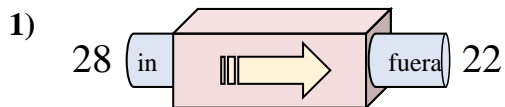
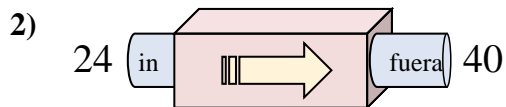




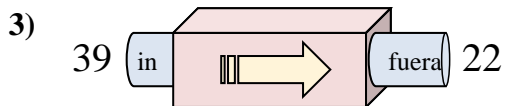
Determinar cuál regla está usando la máquina de funciones.

Respuestas

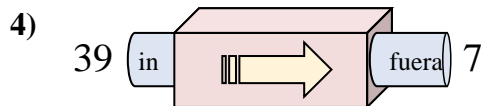
- A. Restar 5
- B. Restar 11
- C. Restar 6
- D. Agregar 5



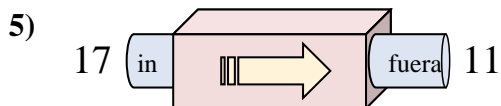
- A. Agregar 20
- B. Agregar 17
- C. Restar 19
- D. Agregar 16



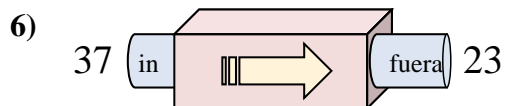
- A. Agregar 17
- B. Restar 17
- C. Restar 20
- D. Restar 19



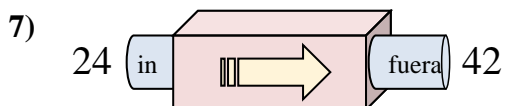
- A. Restar 30
- B. Restar 35
- C. Restar 32
- D. Restar 34



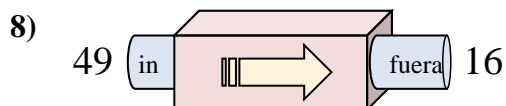
- A. Agregar 9
- B. Restar 8
- C. Restar 6
- D. Restar 2



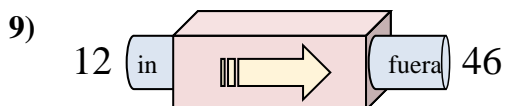
- A. Restar 12
- B. Agregar 10
- C. Restar 14
- D. Restar 15



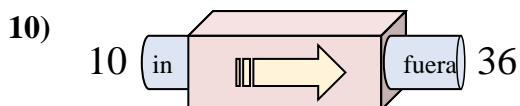
- A. Agregar 18
- B. Agregar 15
- C. Agregar 22
- D. Agregar 14



- A. Restar 33
- B. Restar 32
- C. Agregar 32
- D. Agregar 30



- A. Agregar 37
- B. Agregar 32
- C. Agregar 34
- D. Agregar 38



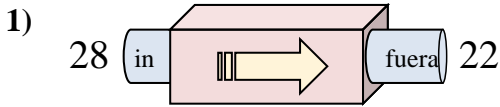
- A. Agregar 29
- B. Agregar 26
- C. Restar 29
- D. Agregar 30

1. _____
2. _____
3. _____
4. _____
5. _____
6. _____
7. _____
8. _____
9. _____
10. _____

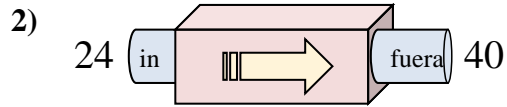


Determinar cuál regla está usando la máquina de funciones.

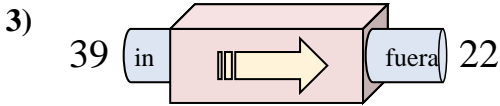
Respuestas



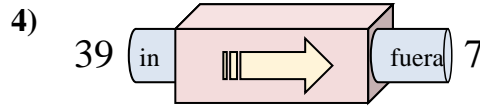
- A. Restar 5
- B. Restar 11
- C. Restar 6
- D. Agregar 5



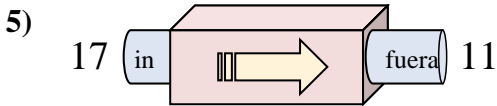
- A. Agregar 20
- B. Agregar 17
- C. Restar 19
- D. Agregar 16



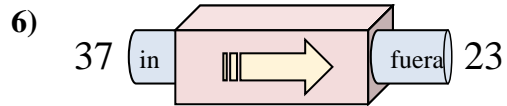
- A. Agregar 17
- B. Restar 17
- C. Restar 20
- D. Restar 19



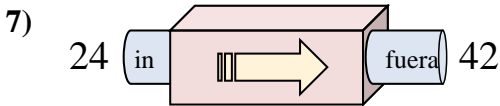
- A. Restar 30
- B. Restar 35
- C. Restar 32
- D. Restar 34



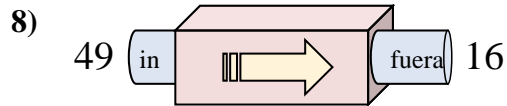
- A. Agregar 9
- B. Restar 8
- C. Restar 6
- D. Restar 2



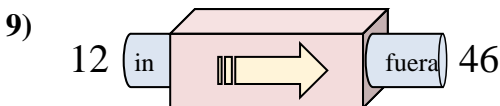
- A. Restar 12
- B. Agregar 10
- C. Restar 14
- D. Restar 15



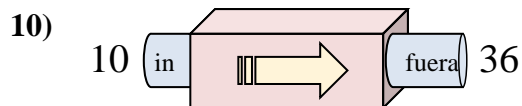
- A. Agregar 18
- B. Agregar 15
- C. Agregar 22
- D. Agregar 14



- A. Restar 33
- B. Restar 32
- C. Agregar 32
- D. Agregar 30



- A. Agregar 37
- B. Agregar 32
- C. Agregar 34
- D. Agregar 38



- A. Agregar 29
- B. Agregar 26
- C. Restar 29
- D. Agregar 30

- 1. **C**
- 2. **D**
- 3. **B**
- 4. **C**
- 5. **C**
- 6. **C**
- 7. **A**
- 8. **A**
- 9. **C**
- 10. **B**