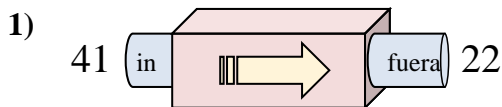
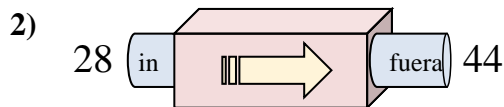




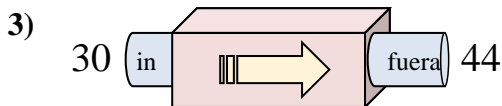
Determinar cuál regla está usando la máquina de funciones.

Respuestas

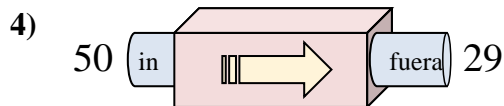
- A. Restar 19
- B. Agregar 16
- C. Restar 24
- D. Agregar 24



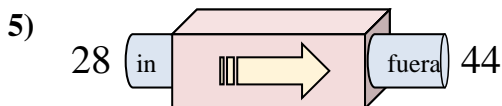
- A. Agregar 16
- B. Agregar 18
- C. Restar 16
- D. Agregar 21



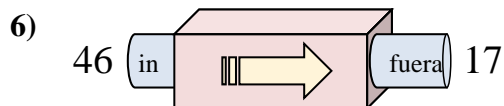
- A. Agregar 12
- B. Agregar 17
- C. Restar 18
- D. Agregar 14



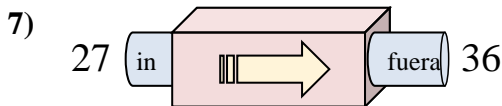
- A. Agregar 23
- B. Restar 21
- C. Agregar 24
- D. Restar 23



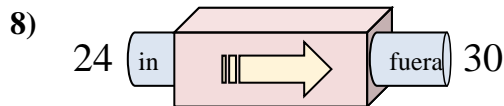
- A. Agregar 12
- B. Agregar 19
- C. Agregar 16
- D. Agregar 21



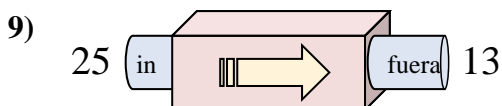
- A. Restar 25
- B. Restar 29
- C. Agregar 31
- D. Agregar 34



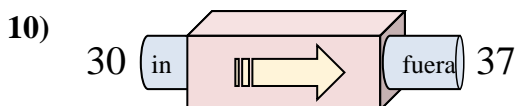
- A. Agregar 7
- B. Agregar 6
- C. Agregar 9
- D. Restar 13



- A. Restar 7
- B. Agregar 2
- C. Agregar 6
- D. Agregar 10



- A. Agregar 12
- B. Restar 8
- C. Agregar 11
- D. Restar 12

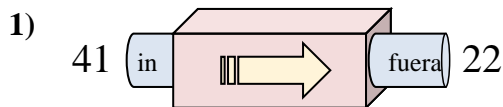


- A. Agregar 7
- B. Agregar 9
- C. Agregar 3
- D. Restar 3

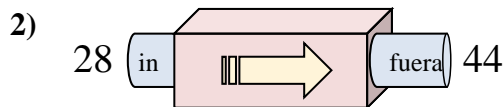
1. _____
2. _____
3. _____
4. _____
5. _____
6. _____
7. _____
8. _____
9. _____
10. _____



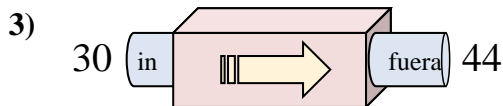
Determinar cuál regla está usando la máquina de funciones.

Respuestas

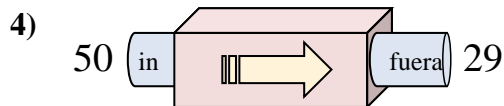
- A. Restar 19
- B. Agregar 16
- C. Restar 24
- D. Agregar 24



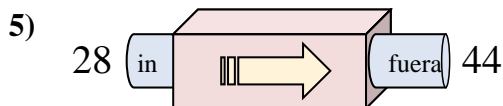
- A. Agregar 16
- B. Agregar 18
- C. Restar 16
- D. Agregar 21



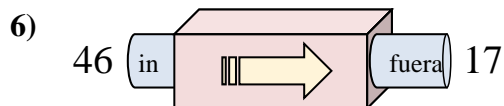
- A. Agregar 12
- B. Agregar 17
- C. Restar 18
- D. Agregar 14



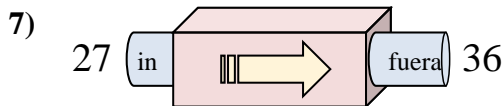
- A. Agregar 23
- B. Restar 21
- C. Agregar 24
- D. Restar 23



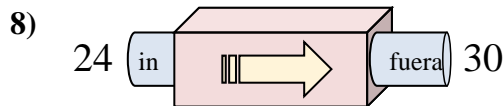
- A. Agregar 12
- B. Agregar 19
- C. Agregar 16
- D. Agregar 21



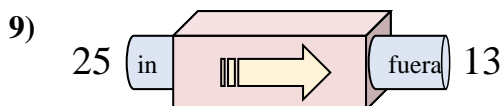
- A. Restar 25
- B. Restar 29
- C. Agregar 31
- D. Agregar 34



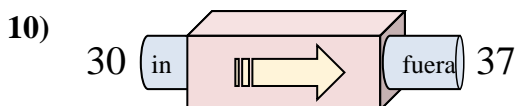
- A. Agregar 7
- B. Agregar 6
- C. Agregar 9
- D. Restar 13



- A. Restar 7
- B. Agregar 2
- C. Agregar 6
- D. Agregar 10



- A. Agregar 12
- B. Restar 8
- C. Agregar 11
- D. Restar 12



- A. Agregar 7
- B. Agregar 9
- C. Agregar 3
- D. Restar 3

1. **A**2. **A**3. **D**4. **B**5. **C**6. **B**7. **C**8. **C**9. **D**10. **A**