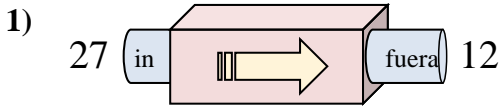


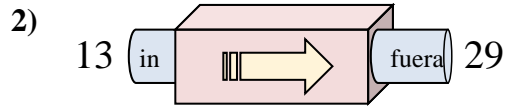


Determinar cuál regla está usando la máquina de funciones.

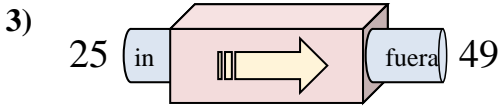
Respuestas



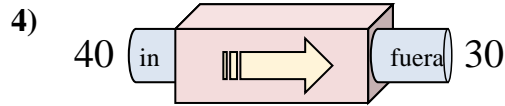
- A. Restar 14
- B. Restar 15
- C. Agregar 11
- D. Restar 19



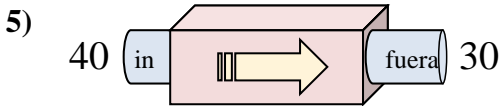
- A. Agregar 16
- B. Agregar 18
- C. Restar 17
- D. Restar 16



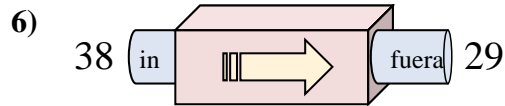
- A. Restar 22
- B. Agregar 24
- C. Agregar 28
- D. Restar 27



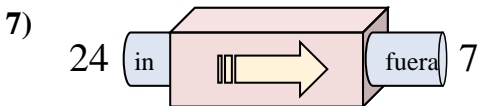
- A. Agregar 6
- B. Restar 15
- C. Restar 12
- D. Restar 10



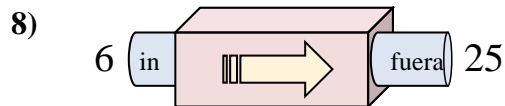
- A. Restar 7
- B. Agregar 10
- C. Restar 10
- D. Agregar 6



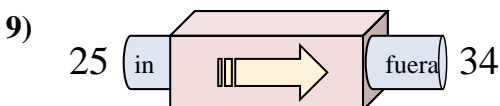
- A. Restar 6
- B. Restar 9
- C. Restar 7
- D. Agregar 12



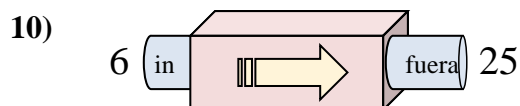
- A. Restar 17
- B. Restar 22
- C. Agregar 13
- D. Restar 18



- A. Agregar 19
- B. Agregar 22
- C. Agregar 20
- D. Restar 19



- A. Agregar 10
- B. Agregar 6
- C. Restar 14
- D. Agregar 9

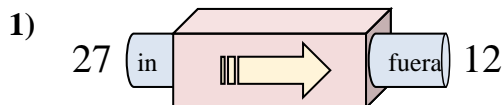


- A. Agregar 19
- B. Agregar 15
- C. Agregar 18
- D. Restar 23

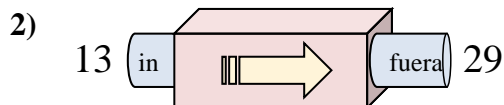
1. _____
2. _____
3. _____
4. _____
5. _____
6. _____
7. _____
8. _____
9. _____
10. _____



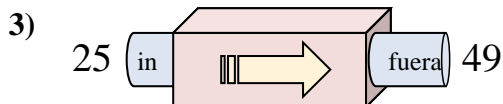
Determinar cuál regla está usando la máquina de funciones.

Respuestas

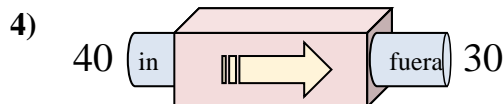
- A. Restar 14
- B. Restar 15
- C. Agregar 11
- D. Restar 19



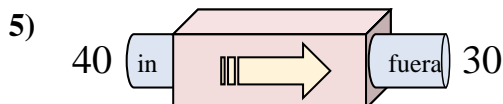
- A. Agregar 16
- B. Agregar 18
- C. Restar 17
- D. Restar 16



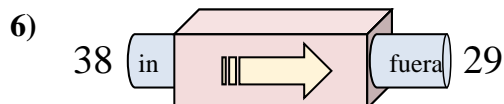
- A. Restar 22
- B. Agregar 24
- C. Agregar 28
- D. Restar 27



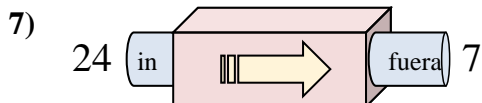
- A. Agregar 6
- B. Restar 15
- C. Restar 12
- D. Restar 10



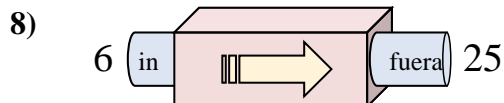
- A. Restar 7
- B. Agregar 10
- C. Restar 10
- D. Agregar 6



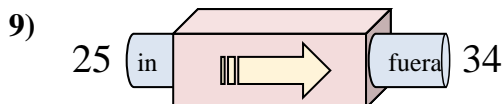
- A. Restar 6
- B. Restar 9
- C. Restar 7
- D. Agregar 12



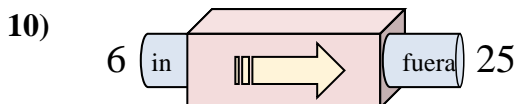
- A. Restar 17
- B. Restar 22
- C. Agregar 13
- D. Restar 18



- A. Agregar 19
- B. Agregar 22
- C. Agregar 20
- D. Restar 19



- A. Agregar 10
- B. Agregar 6
- C. Restar 14
- D. Agregar 9



- A. Agregar 19
- B. Agregar 15
- C. Agregar 18
- D. Restar 23

1. **B**2. **A**3. **B**4. **D**5. **C**6. **B**7. **A**8. **A**9. **D**10. **A**