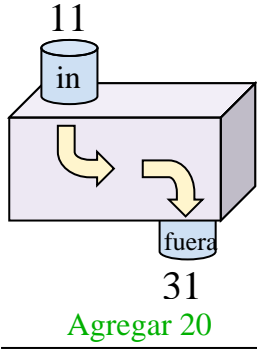


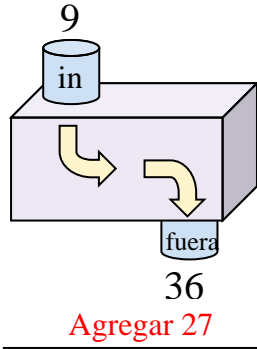


Determina la regla que cada máquina de función está usando.

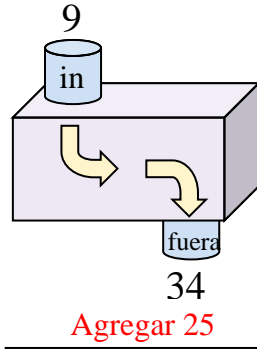
Ej)



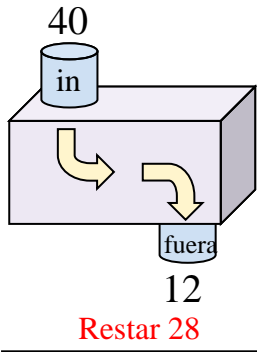
1)



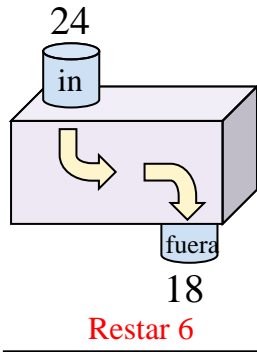
2)



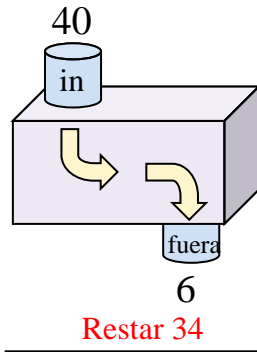
3)



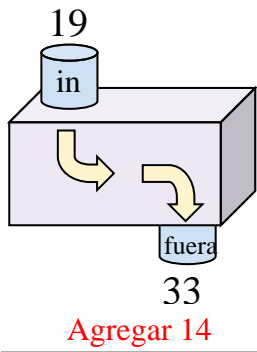
4)



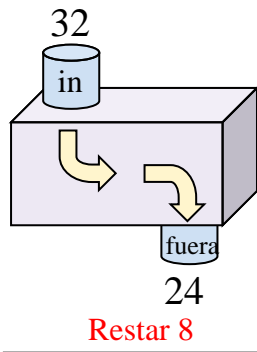
5)



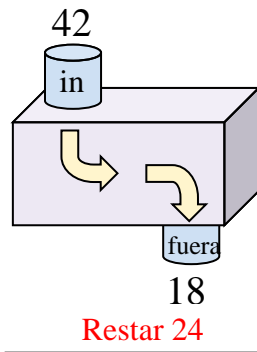
6)



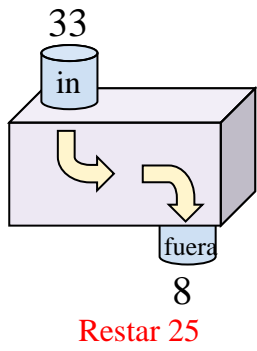
7)



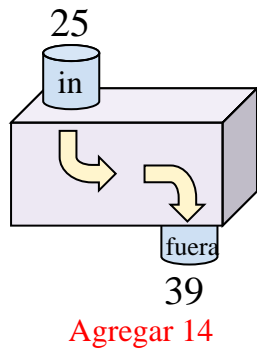
8)



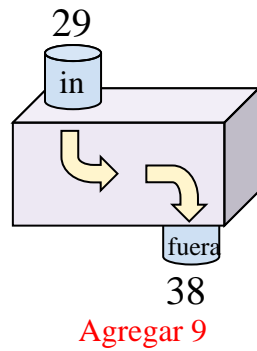
9)



10)



11)



Respuestas

Ej. **Agregar 20**

1. **Agregar 27**

2. **Agregar 25**

3. **Restar 28**

4. **Restar 6**

5. **Restar 34**

6. **Agregar 14**

7. **Restar 8**

8. **Restar 24**

9. **Restar 25**

10. **Agregar 14**

11. **Agregar 9**