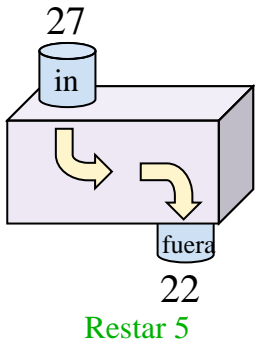




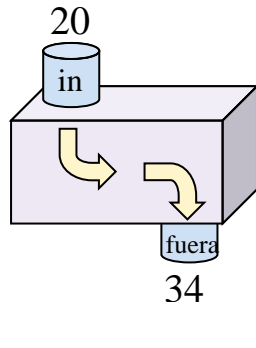
Determina la regla que cada máquina de función está usando.

Respuestas

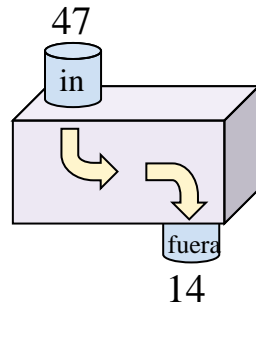
Ej)



1)



2)



Ej. **Restar 5**

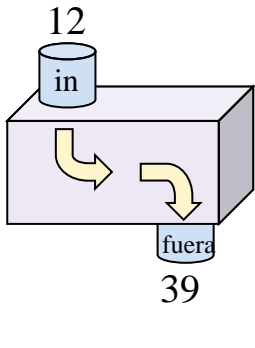
1. _____

2. _____

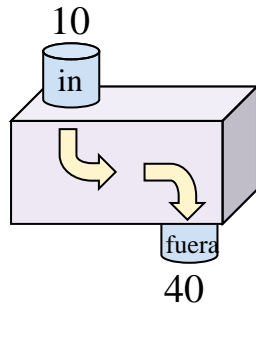
3. _____

4. _____

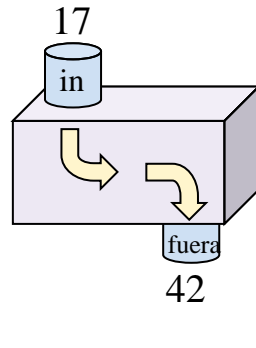
3)



4)



5)



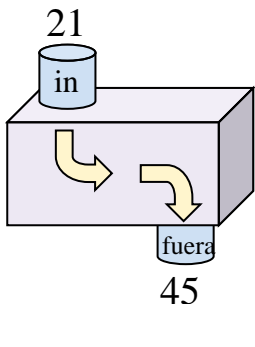
5. _____

6. _____

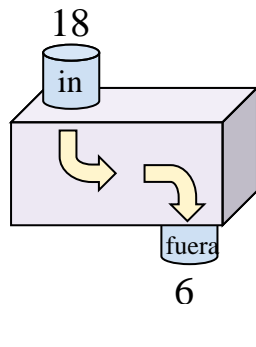
7. _____

8. _____

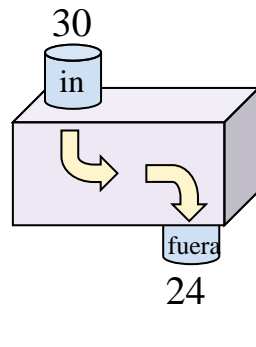
6)



7)



8)

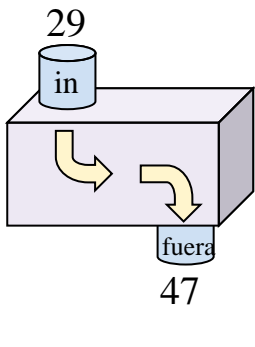


9. _____

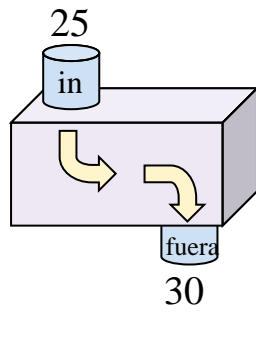
10. _____

11. _____

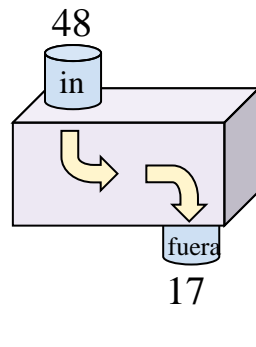
9)



10)



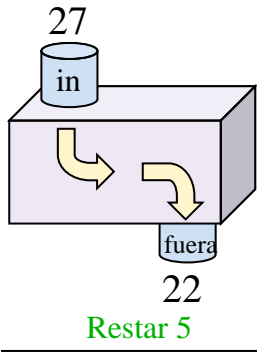
11)



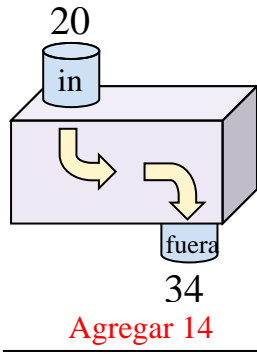


Determina la regla que cada máquina de función está usando.

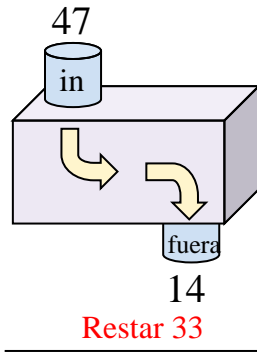
Ej)



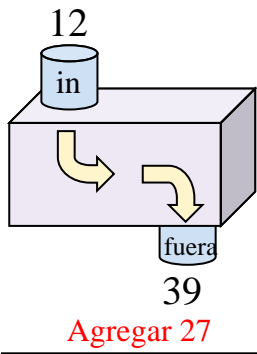
1)



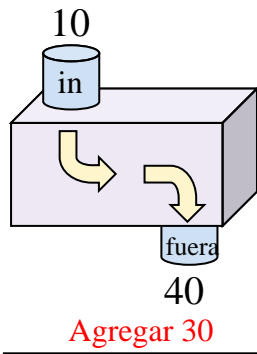
2)



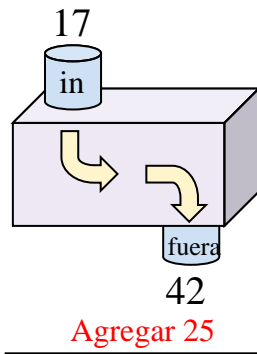
3)



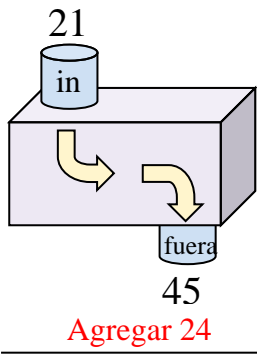
4)



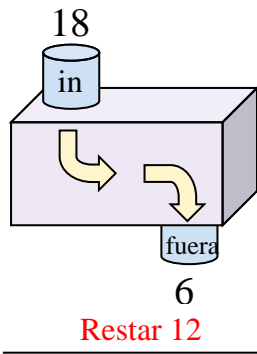
5)



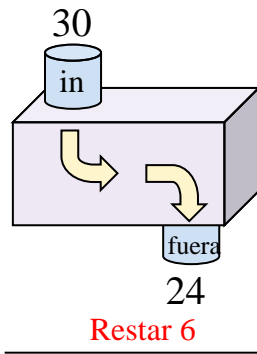
6)



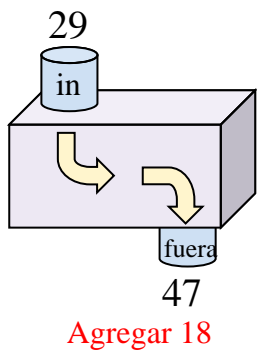
7)



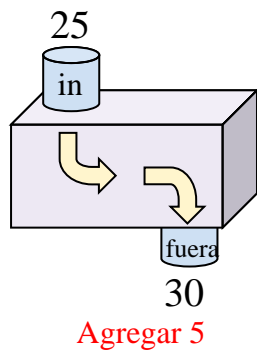
8)



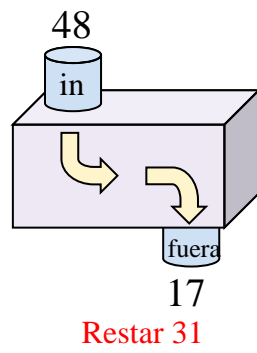
9)



10)



11)



Respuestas

- Ej. **Restar 5**
- 1. **Agregar 14**
- 2. **Restar 33**
- 3. **Agregar 27**
- 4. **Agregar 30**
- 5. **Agregar 25**
- 6. **Agregar 24**
- 7. **Restar 12**
- 8. **Restar 6**
- 9. **Agregar 18**
- 10. **Agregar 5**
- 11. **Restar 31**