

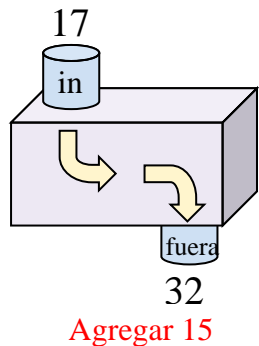


Determina la regla que cada máquina de función está usando.

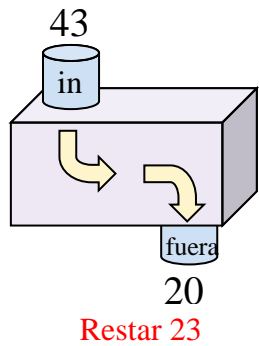
Ej)



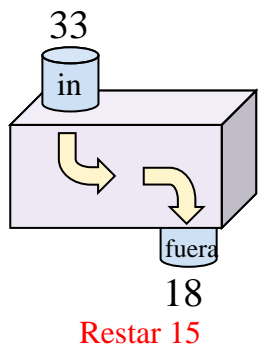
1)



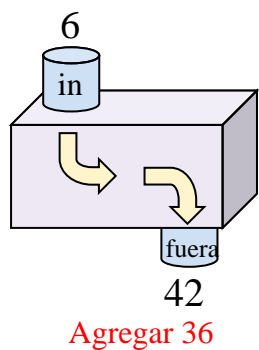
2)



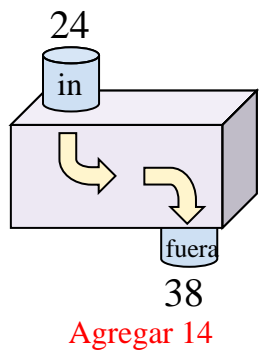
3)



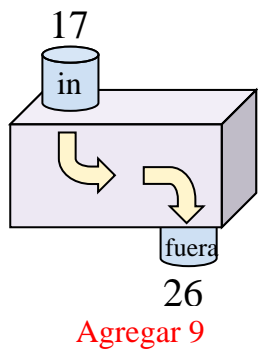
4)



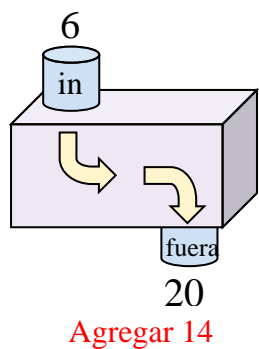
5)



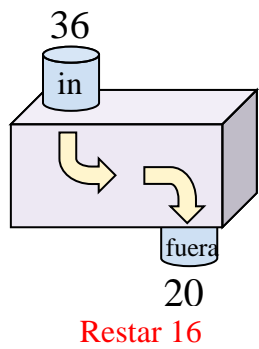
6)



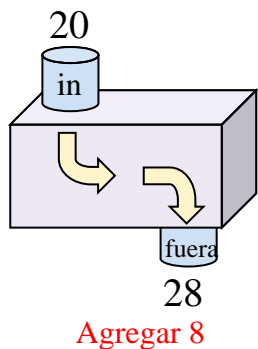
7)



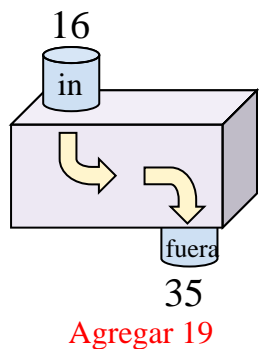
8)



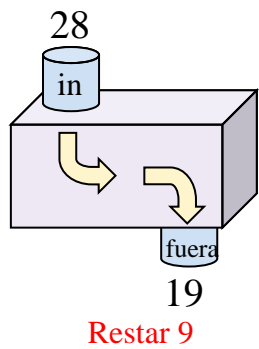
9)



10)



11)



Respuestas

- Ej. **Restar 33**
- 1. **Agregar 15**
- 2. **Restar 23**
- 3. **Restar 15**
- 4. **Agregar 36**
- 5. **Agregar 14**
- 6. **Agregar 9**
- 7. **Agregar 14**
- 8. **Restar 16**
- 9. **Agregar 8**
- 10. **Agregar 19**
- 11. **Restar 9**