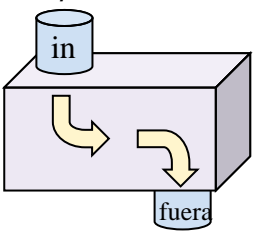
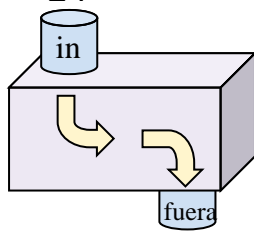


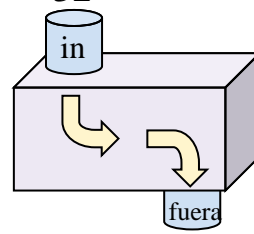


Determina la regla que cada máquina de función está usando.

Respuestas

Ej) 
 7
 in
 fuera
 20
 Agregar 13

1) 
 24
 in
 fuera
 33

2) 
 32
 in
 fuera
 9

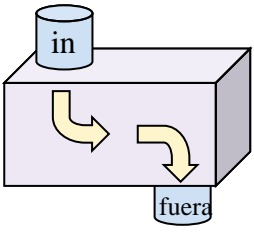
Ej. **Agregar 13**

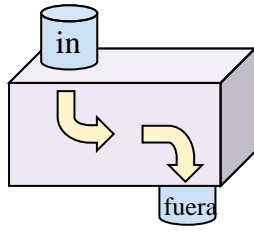
1. _____

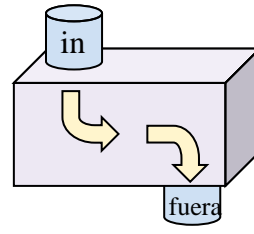
2. _____

3. _____

4. _____

3) 
 34
 in
 fuera
 29

4) 
 27
 in
 fuera
 37

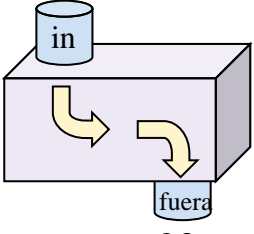
5) 
 43
 in
 fuera
 26

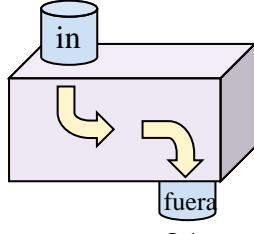
5. _____

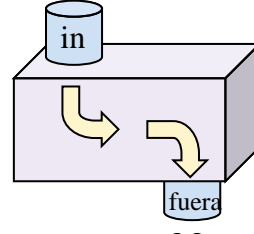
6. _____

7. _____

8. _____

6) 
 36
 in
 fuera
 20

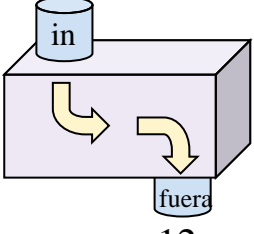
7) 
 26
 in
 fuera
 31

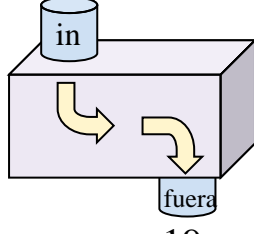
8) 
 20
 in
 fuera
 33

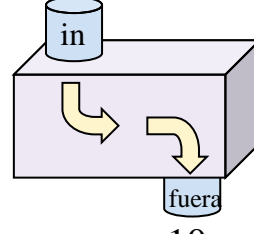
9. _____

10. _____

11. _____

9) 
 38
 in
 fuera
 12

10) 
 11
 in
 fuera
 19

11) 
 26
 in
 fuera
 10



Determina la regla que cada máquina de función está usando.

Ej) **Agregar 13**

1) **Agregar 9**

2) **Restar 23**

3) **Restar 5**

4) **Agregar 10**

5) **Restar 17**

6) **Restar 16**

7) **Agregar 5**

8) **Agregar 13**

9) **Restar 26**

10) **Agregar 8**

11) **Restar 16**

Respuestas

- Ej. **Agregar 13**
- 1. **Agregar 9**
- 2. **Restar 23**
- 3. **Restar 5**
- 4. **Agregar 10**
- 5. **Restar 17**
- 6. **Restar 16**
- 7. **Agregar 5**
- 8. **Agregar 13**
- 9. **Restar 26**
- 10. **Agregar 8**
- 11. **Restar 16**