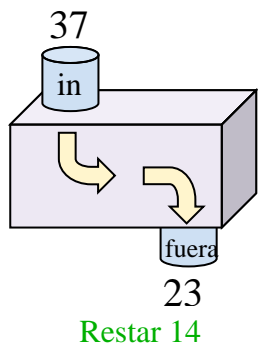




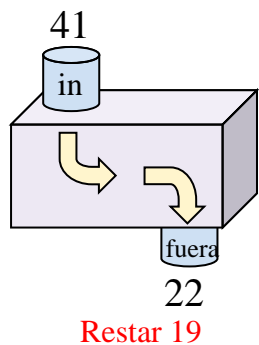


Determina la regla que cada máquina de función está usando.

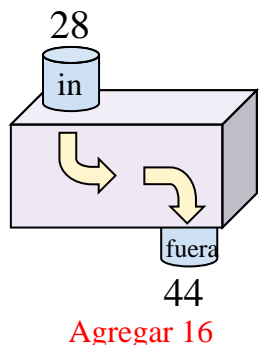
Ej)



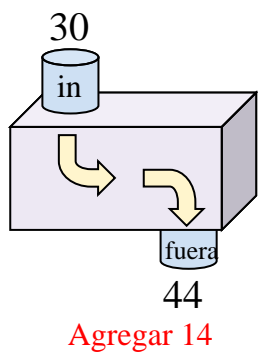
1)



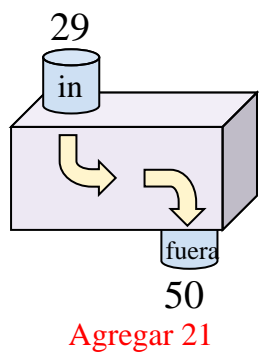
2)



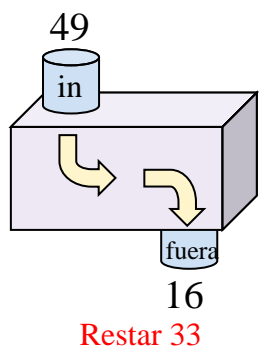
3)



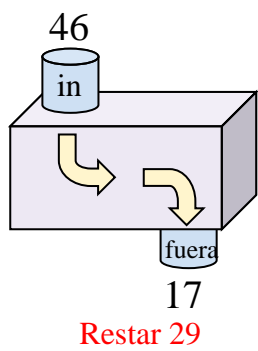
4)



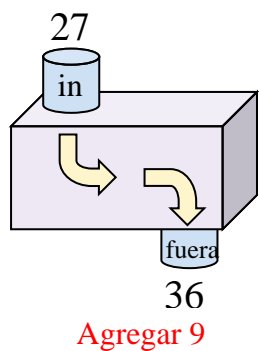
5)



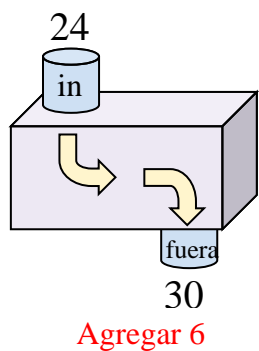
6)



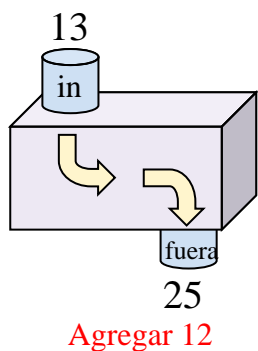
7)



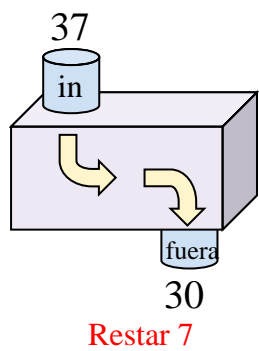
8)



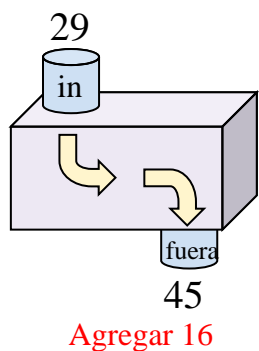
9)



10)



11)



**Respuestas**

- Ej. **Restar 14**
- 1. **Restar 19**
- 2. **Agregar 16**
- 3. **Agregar 14**
- 4. **Agregar 21**
- 5. **Restar 33**
- 6. **Restar 29**
- 7. **Agregar 9**
- 8. **Agregar 6**
- 9. **Agregar 12**
- 10. **Restar 7**
- 11. **Agregar 16**