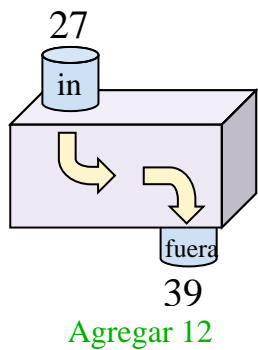


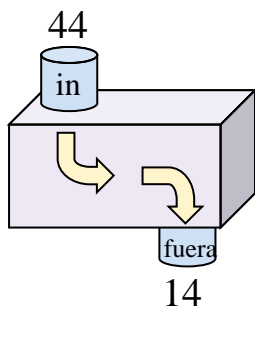


Determina la regla que cada máquina de función está usando.

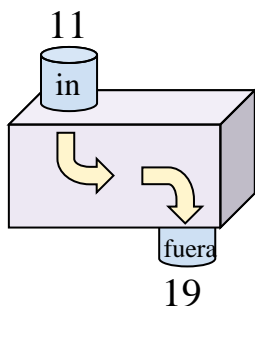
Ej)



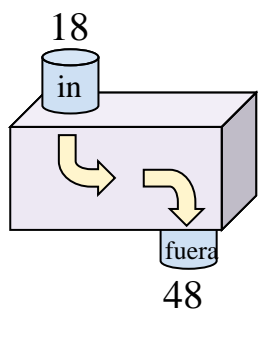
1)



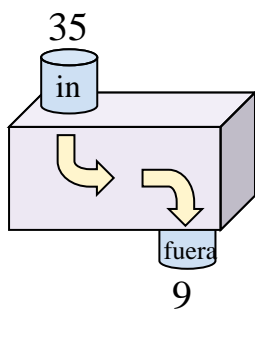
2)



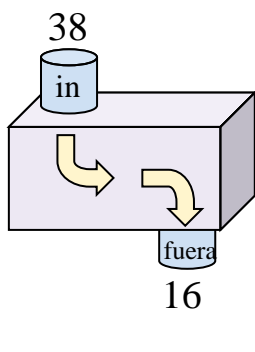
3)



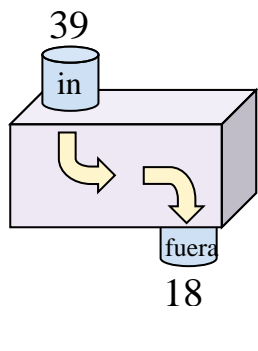
4)



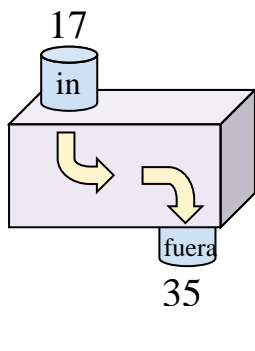
5)



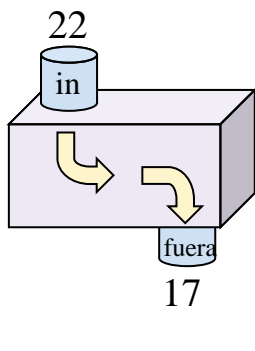
6)



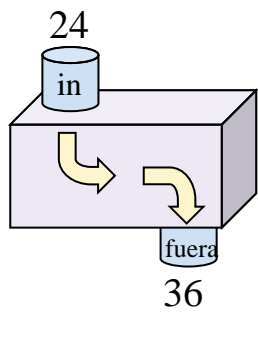
7)



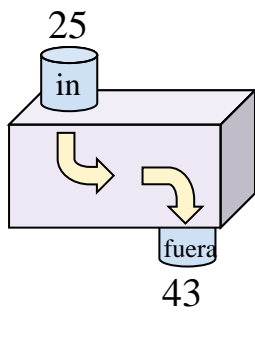
8)



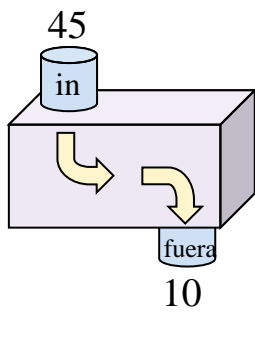
9)



10)



11)



**Respuestas**

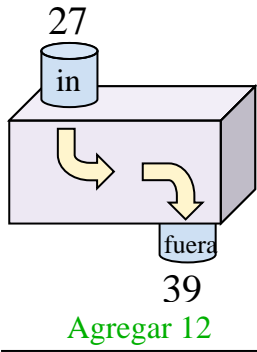
Ej. **Agregar 12**

- 1. \_\_\_\_\_
- 2. \_\_\_\_\_
- 3. \_\_\_\_\_
- 4. \_\_\_\_\_
- 5. \_\_\_\_\_
- 6. \_\_\_\_\_
- 7. \_\_\_\_\_
- 8. \_\_\_\_\_
- 9. \_\_\_\_\_
- 10. \_\_\_\_\_
- 11. \_\_\_\_\_

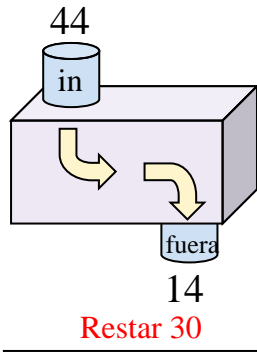


Determina la regla que cada máquina de función está usando.

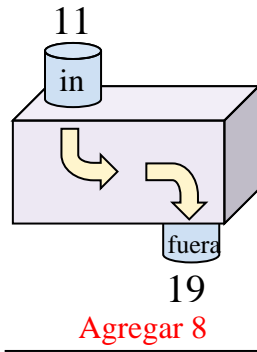
Ej)



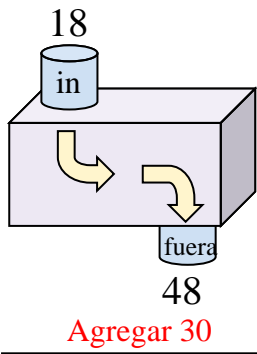
1)



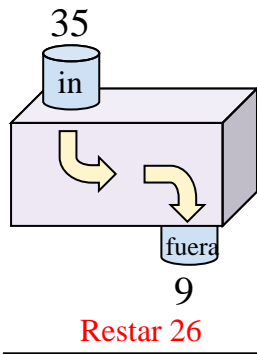
2)



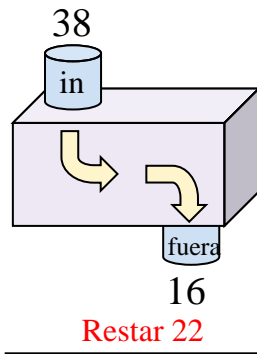
3)



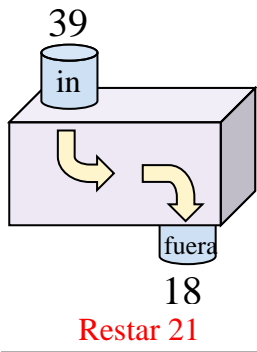
4)



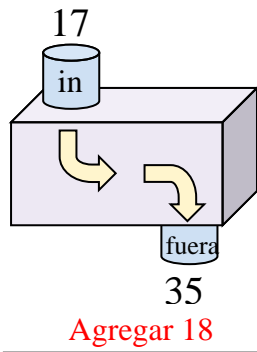
5)



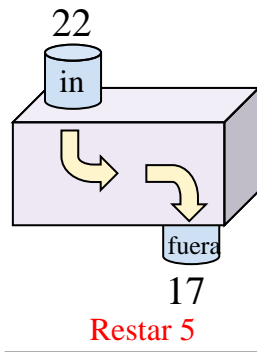
6)



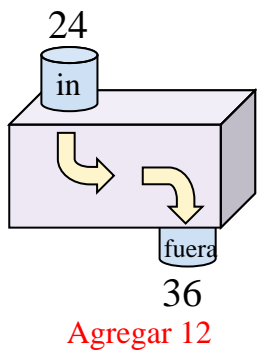
7)



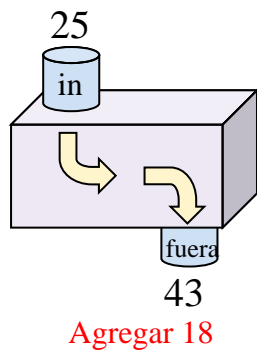
8)



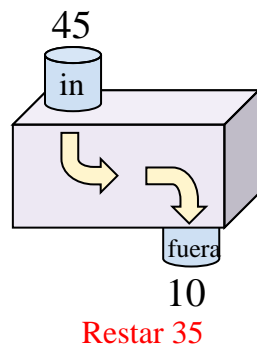
9)



10)



11)



**Respuestas**

Ej. **Agregar 12**

1. **Restar 30**

2. **Agregar 8**

3. **Agregar 30**

4. **Restar 26**

5. **Restar 22**

6. **Restar 21**

7. **Agregar 18**

8. **Restar 5**

9. **Agregar 12**

10. **Agregar 18**

11. **Restar 35**