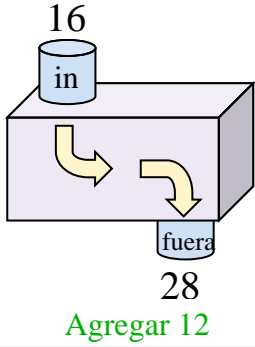




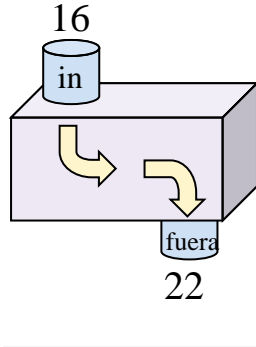
Determina la regla que cada máquina de función está usando.

Respuestas

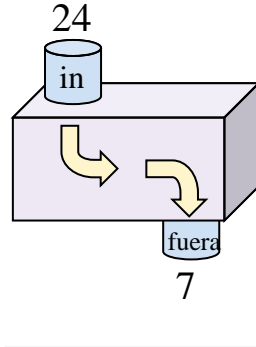
Ej)



1)



2)



Ej. **Agregar 12**

1. _____

2. _____

3. _____

4. _____

5. _____

6. _____

7. _____

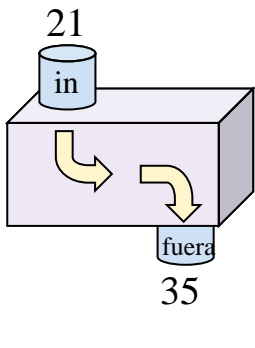
8. _____

9. _____

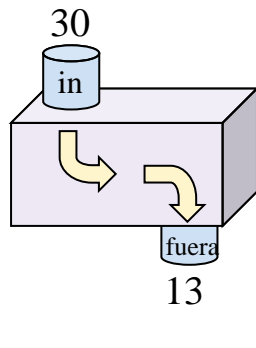
10. _____

11. _____

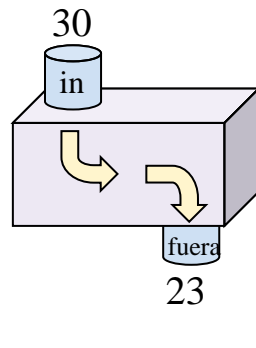
3)



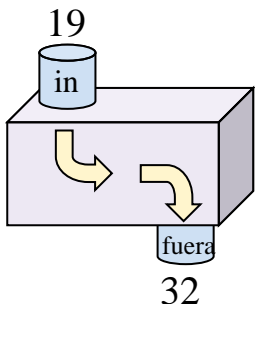
4)



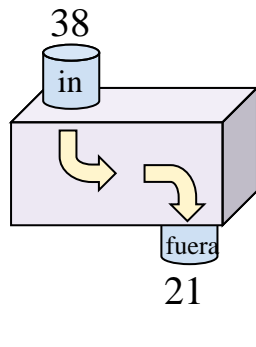
5)



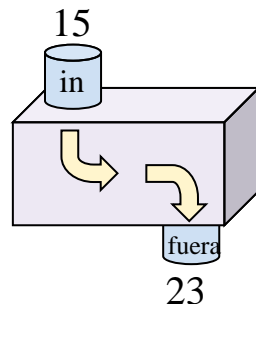
6)



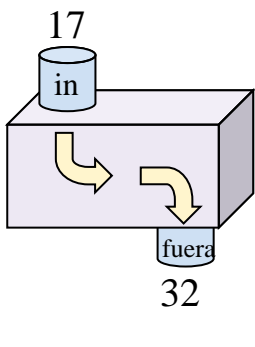
7)



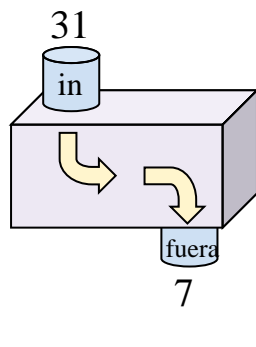
8)



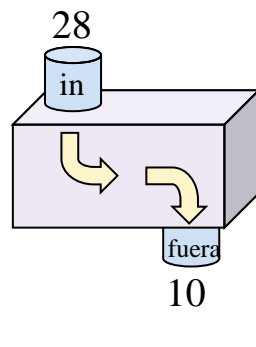
9)



10)



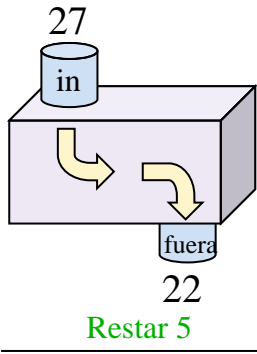
11)



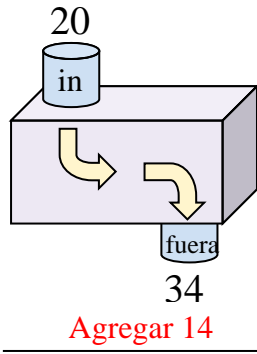


Determina la regla que cada máquina de función está usando.

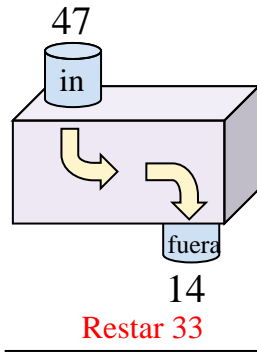
Ej)



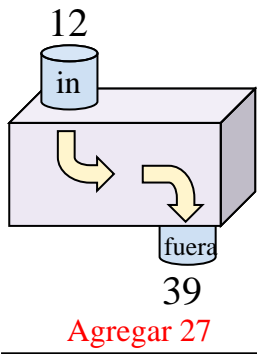
1)



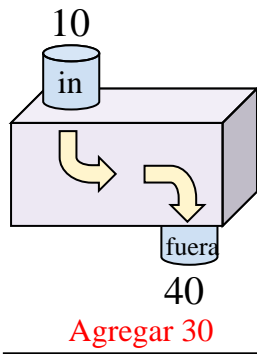
2)



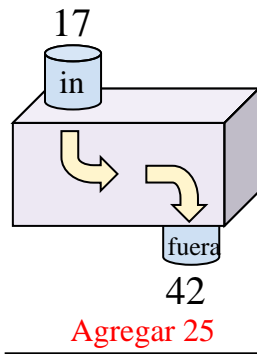
3)



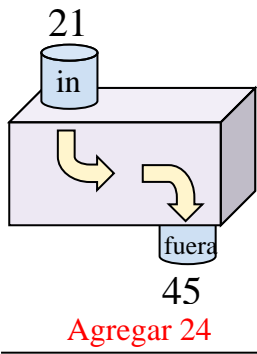
4)



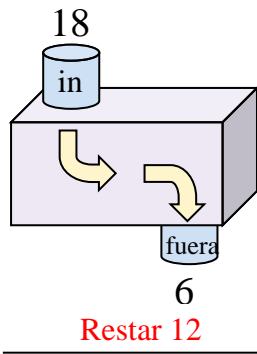
5)



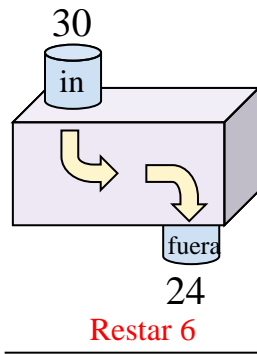
6)



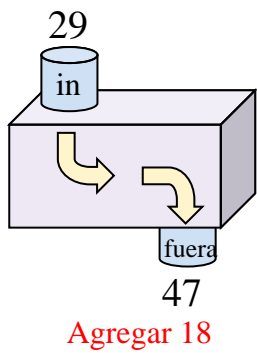
7)



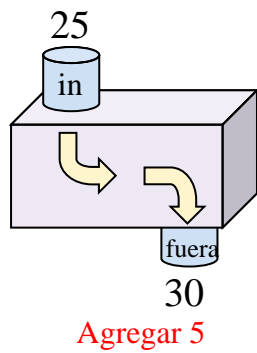
8)



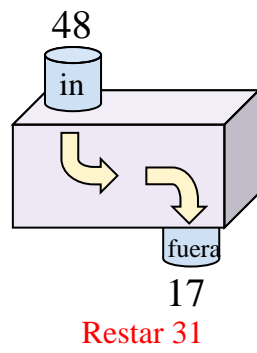
9)



10)



11)



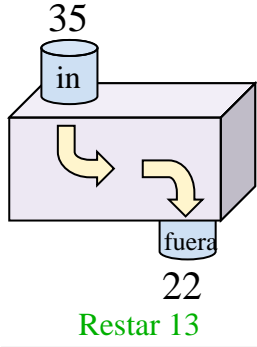
Respuestas

- Ej. **Restar 5**
- 1. **Agregar 14**
- 2. **Restar 33**
- 3. **Agregar 27**
- 4. **Agregar 30**
- 5. **Agregar 25**
- 6. **Agregar 24**
- 7. **Restar 12**
- 8. **Restar 6**
- 9. **Agregar 18**
- 10. **Agregar 5**
- 11. **Restar 31**

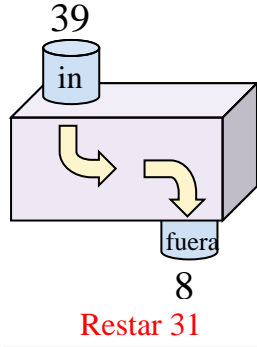


Determina la regla que cada máquina de función está usando.

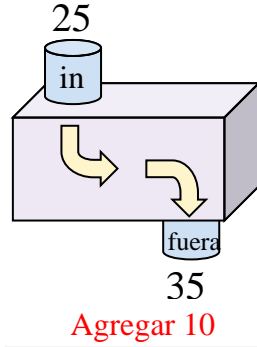
Ej)



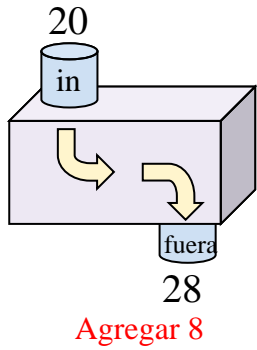
1)



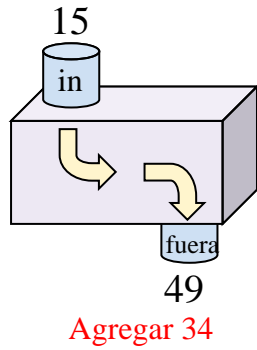
2)



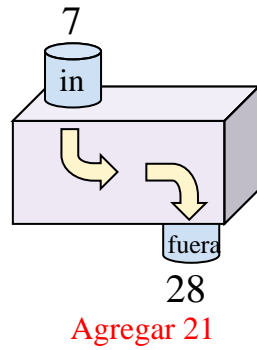
3)



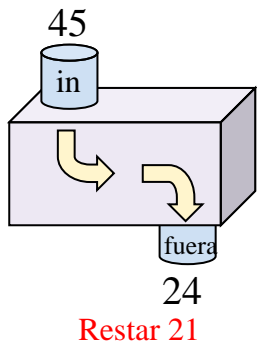
4)



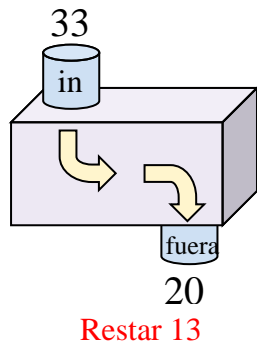
5)



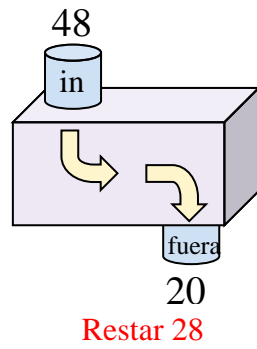
6)



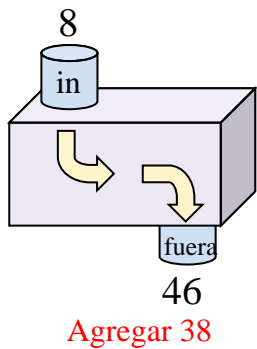
7)



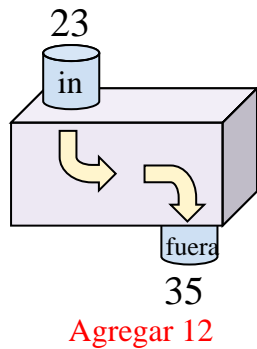
8)



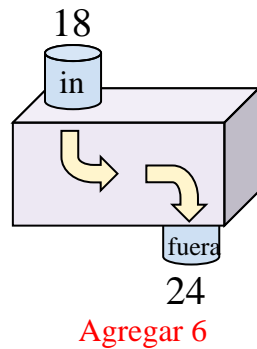
9)



10)



11)



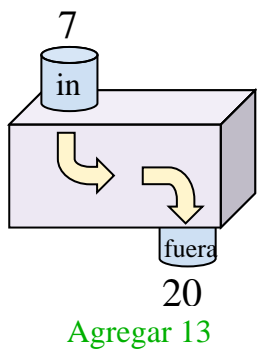
Respuestas

- Ej. **Restar 13**
- 1. **Restar 31**
- 2. **Agregar 10**
- 3. **Agregar 8**
- 4. **Agregar 34**
- 5. **Agregar 21**
- 6. **Restar 21**
- 7. **Restar 13**
- 8. **Restar 28**
- 9. **Agregar 38**
- 10. **Agregar 12**
- 11. **Agregar 6**

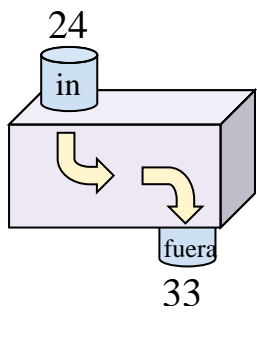


Determina la regla que cada máquina de función está usando.

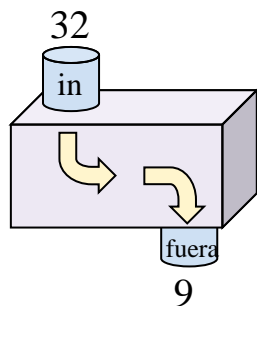
Ej)



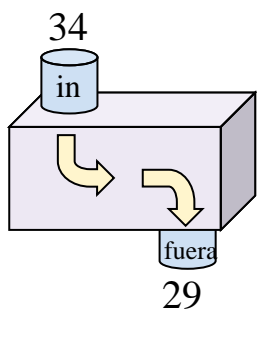
1)



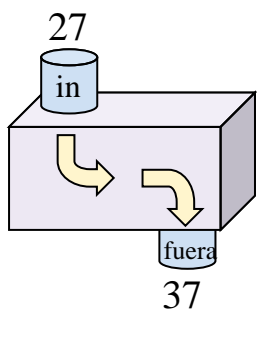
2)



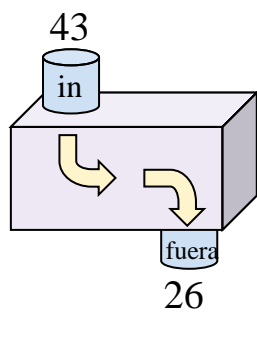
3)



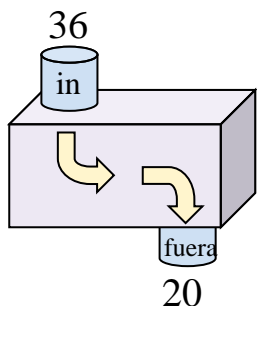
4)



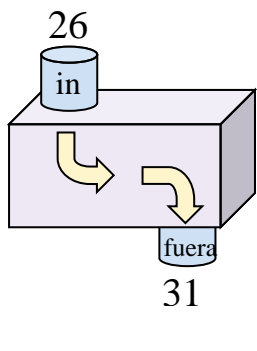
5)



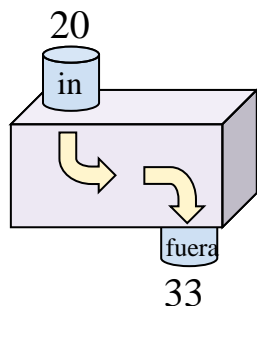
6)



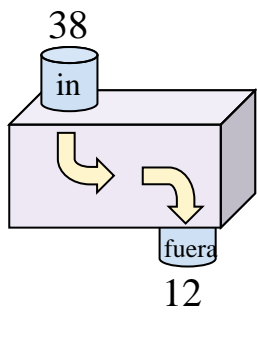
7)



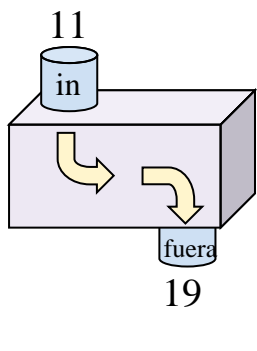
8)



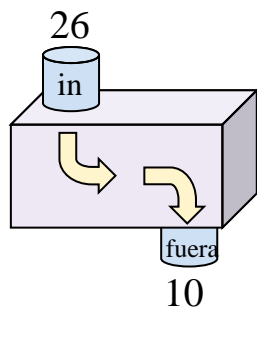
9)



10)



11)



Respuestas

Ej. **Agregar 13**

1. _____
2. _____
3. _____
4. _____
5. _____
6. _____
7. _____
8. _____
9. _____
10. _____
11. _____



Determina la regla que cada máquina de función está usando.

Ej)
 7 in → 20 fuera
 Agregar 13

1)
 24 in → 33 fuera
 Agregar 9

2)
 32 in → 9 fuera
 Restar 23

3)
 34 in → 29 fuera
 Restar 5

4)
 27 in → 37 fuera
 Agregar 10

5)
 43 in → 26 fuera
 Restar 17

6)
 36 in → 20 fuera
 Restar 16

7)
 26 in → 31 fuera
 Agregar 5

8)
 20 in → 33 fuera
 Agregar 13

9)
 38 in → 12 fuera
 Restar 26

10)
 11 in → 19 fuera
 Agregar 8

11)
 26 in → 10 fuera
 Restar 16

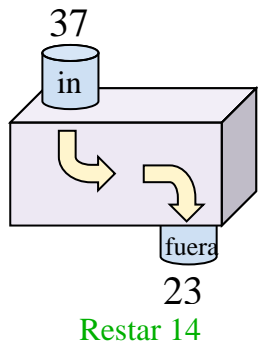
Respuestas

- Ej. **Agregar 13**
- 1. **Agregar 9**
- 2. **Restar 23**
- 3. **Restar 5**
- 4. **Agregar 10**
- 5. **Restar 17**
- 6. **Restar 16**
- 7. **Agregar 5**
- 8. **Agregar 13**
- 9. **Restar 26**
- 10. **Agregar 8**
- 11. **Restar 16**

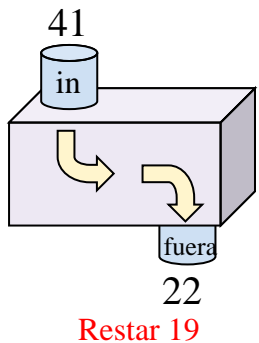


Determina la regla que cada máquina de función está usando.

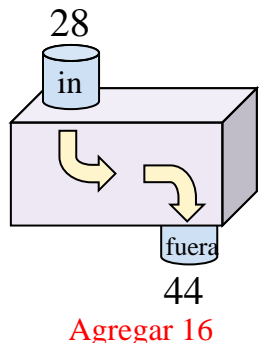
Ej)



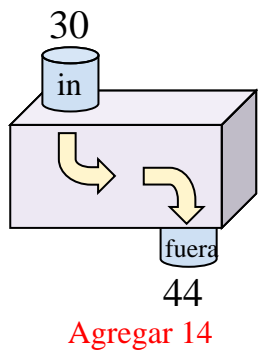
1)



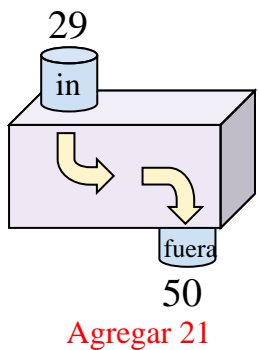
2)



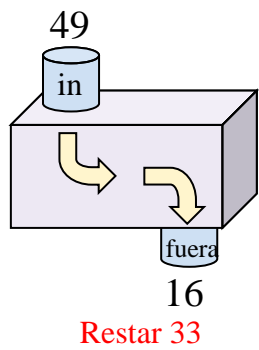
3)



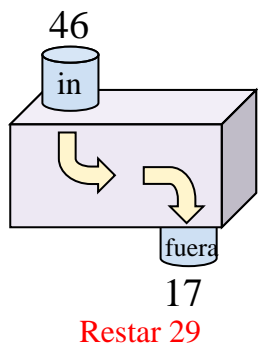
4)



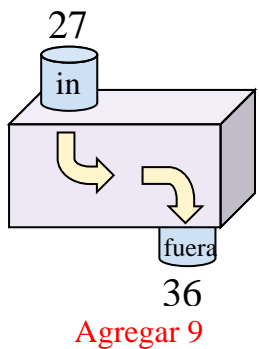
5)



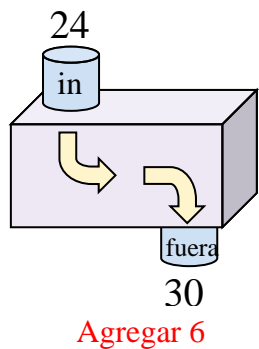
6)



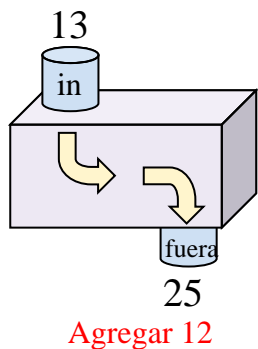
7)



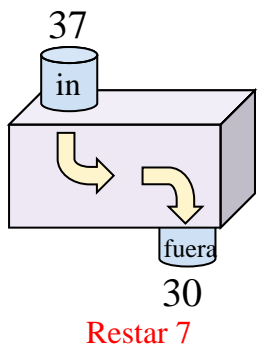
8)



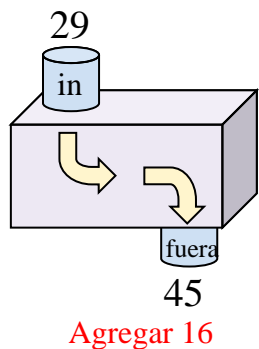
9)



10)



11)



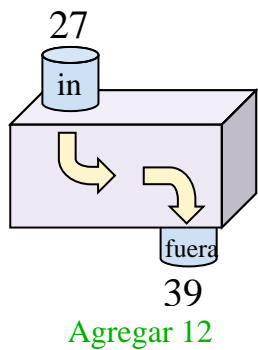
Respuestas

- Ej. **Restar 14**
- 1. **Restar 19**
- 2. **Agregar 16**
- 3. **Agregar 14**
- 4. **Agregar 21**
- 5. **Restar 33**
- 6. **Restar 29**
- 7. **Agregar 9**
- 8. **Agregar 6**
- 9. **Agregar 12**
- 10. **Restar 7**
- 11. **Agregar 16**

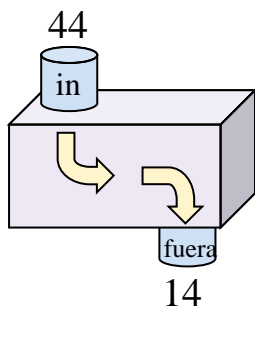


Determina la regla que cada máquina de función está usando.

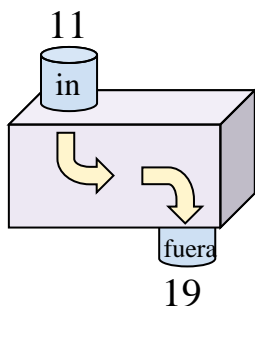
Ej)



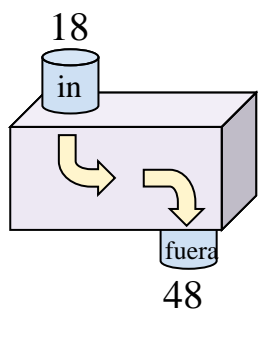
1)



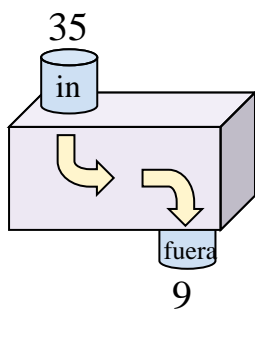
2)



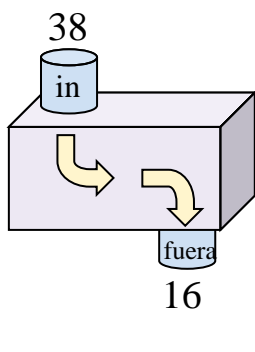
3)



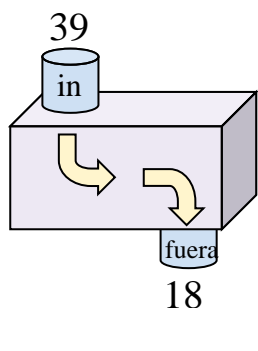
4)



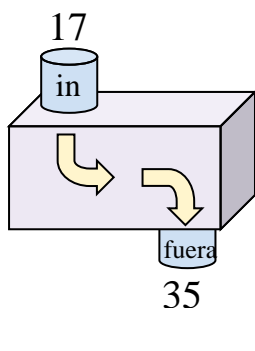
5)



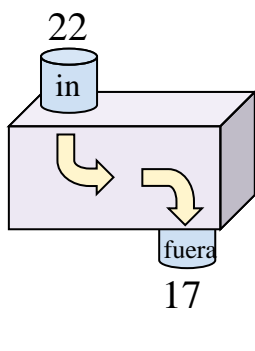
6)



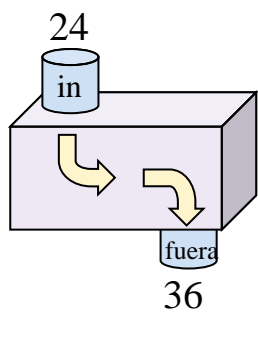
7)



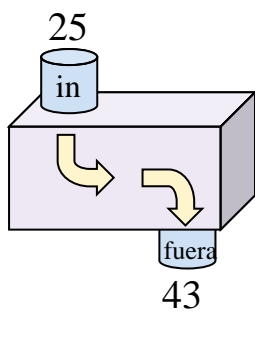
8)



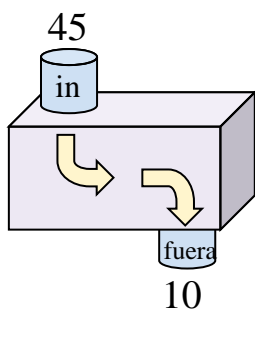
9)



10)



11)



Respuestas

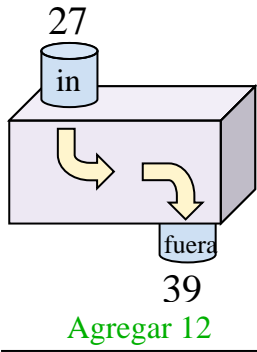
Ej. **Agregar 12**

- 1. _____
- 2. _____
- 3. _____
- 4. _____
- 5. _____
- 6. _____
- 7. _____
- 8. _____
- 9. _____
- 10. _____
- 11. _____

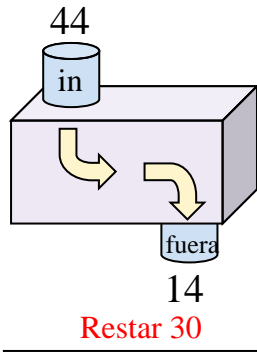


Determina la regla que cada máquina de función está usando.

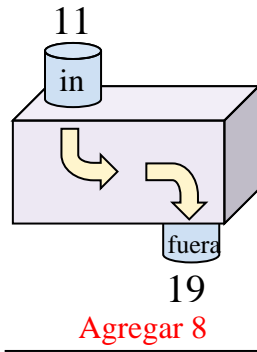
Ej)



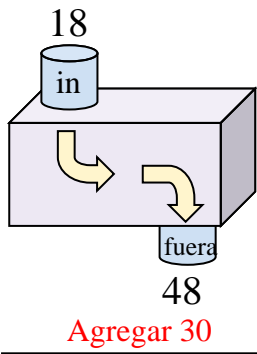
1)



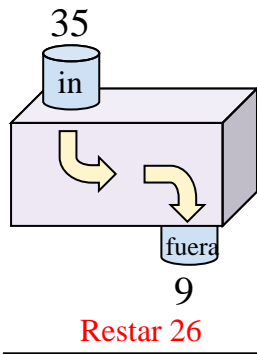
2)



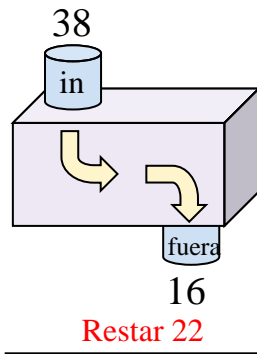
3)



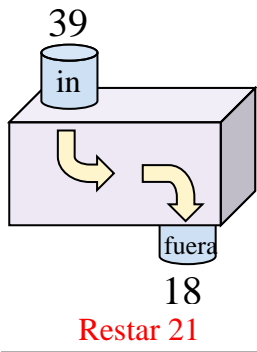
4)



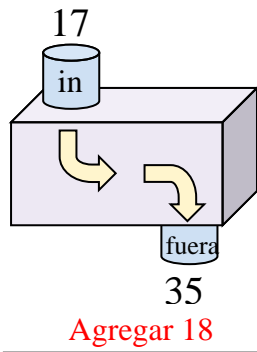
5)



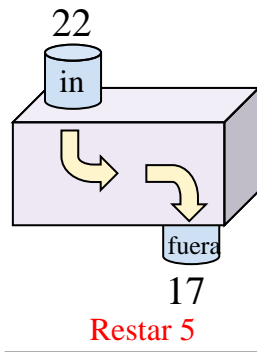
6)



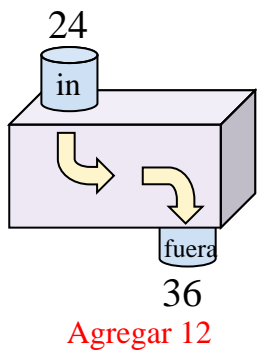
7)



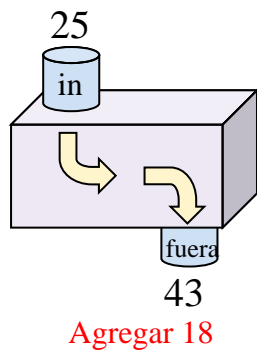
8)



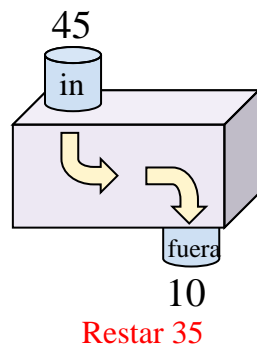
9)



10)



11)



Respuestas

Ej. **Agregar 12**

1. **Restar 30**

2. **Agregar 8**

3. **Agregar 30**

4. **Restar 26**

5. **Restar 22**

6. **Restar 21**

7. **Agregar 18**

8. **Restar 5**

9. **Agregar 12**

10. **Agregar 18**

11. **Restar 35**

