



Resuelve cada problema usando la propiedad distributiva de la división.

Respuestas

1) $295 \div 5 =$

2) $368 \div 8 =$

3) $216 \div 9 =$

4) $240 \div 5 =$

5) $800 \div 8 =$

6) $480 \div 5 =$

7) $320 \div 5 =$

8) $104 \div 4 =$

9) $495 \div 5 =$


10) $495 \div 9 =$

- 1. _____
- 2. _____
- 3. _____
- 4. _____
- 5. _____
- 6. _____
- 7. _____
- 8. _____
- 9. _____
- 10. _____

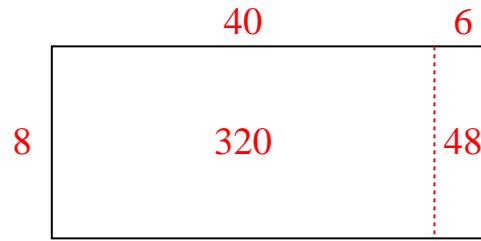


Resuelve cada problema usando la propiedad distributiva de la división.

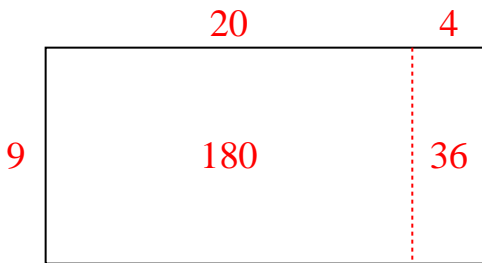
1) $295 \div 5 =$



2) $368 \div 8 =$



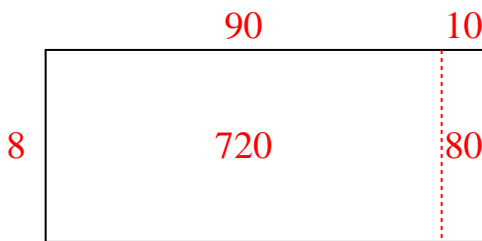
3) $216 \div 9 =$



4) $240 \div 5 =$



5) $800 \div 8 =$



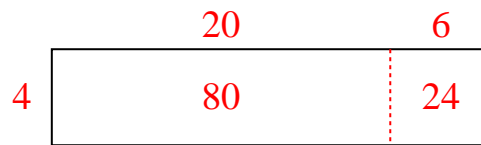
6) $480 \div 5 =$



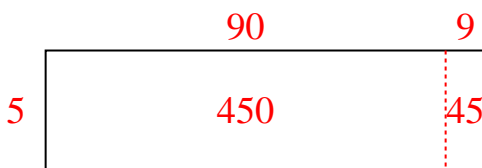
7) $320 \div 5 =$



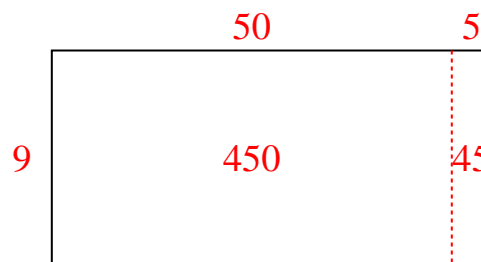
8) $104 \div 4 =$



9) $495 \div 5 =$



10) $495 \div 9 =$

**Respuestas**1. **59**2. **46**3. **24**4. **48**5. **100**6. **96**7. **64**8. **26**9. **99**10. **55**