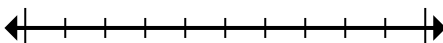




Marque la ubicación (aproximada) en la recta numérica y luego resuelva.

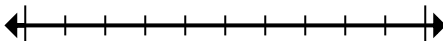
**Respuestas**

1) Round 60,393,636 to the nearest hundred thousand.



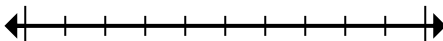
1. \_\_\_\_\_

2) Round 94,001 to the nearest ten thousand.



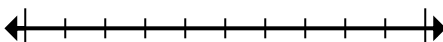
2. \_\_\_\_\_

3) Round 665 to the nearest hundred.



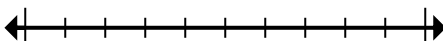
3. \_\_\_\_\_

4) Round 257 to the nearest hundred.



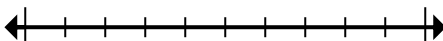
4. \_\_\_\_\_

5) Round 888,081 to the nearest ten thousand.



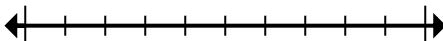
5. \_\_\_\_\_

6) Round 2,138 to the nearest thousand.



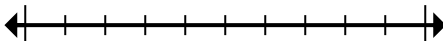
6. \_\_\_\_\_

7) Round 3,390 to the nearest thousand.



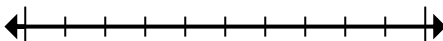
7. \_\_\_\_\_

8) Round 8,542,890 to the nearest ten thousand.



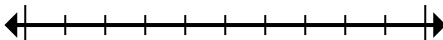
8. \_\_\_\_\_

9) Round 515,011 to the nearest hundred thousand.



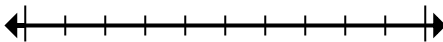
9. \_\_\_\_\_

10) Round 962,363 to the nearest hundred.



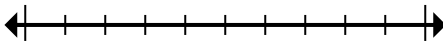
10. \_\_\_\_\_

11) Round 656,429 to the nearest hundred thousand.



11. \_\_\_\_\_

12) Round 87,606 to the nearest ten thousand.



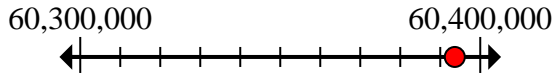
12. \_\_\_\_\_



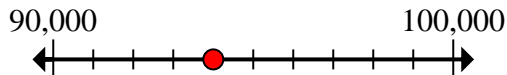
Marque la ubicación (aproximada) en la recta numérica y luego resuelva.

**Respuestas**

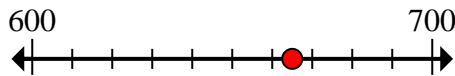
- 1) Round 60,393,636 to the nearest hundred thousand.

1. **60,400,000**

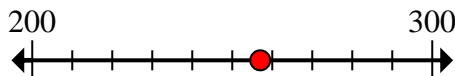
- 2) Round 94,001 to the nearest ten thousand.

2. **90,000**

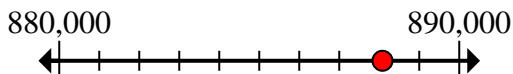
- 3) Round 665 to the nearest hundred.

3. **700**

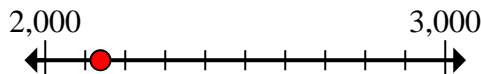
- 4) Round 257 to the nearest hundred.

4. **300**

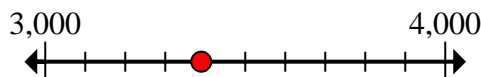
- 5) Round 888,081 to the nearest ten thousand.

5. **890,000**

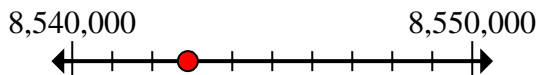
- 6) Round 2,138 to the nearest thousand.

6. **2,000**

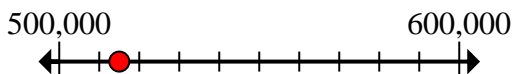
- 7) Round 3,390 to the nearest thousand.

7. **3,000**

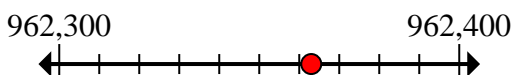
- 8) Round 8,542,890 to the nearest ten thousand.

8. **8,540,000**

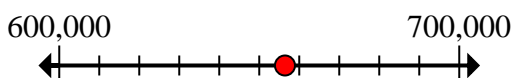
- 9) Round 515,011 to the nearest hundred thousand.

9. **500,000**

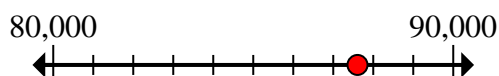
- 10) Round 962,363 to the nearest hundred.

10. **962,400**

- 11) Round 656,429 to the nearest hundred thousand.

11. **700,000**

- 12) Round 87,606 to the nearest ten thousand.

12. **90,000**

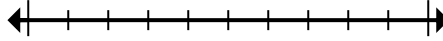


Marque la ubicación (aproximada) en la recta numérica y luego resuelva.

**Respuestas**

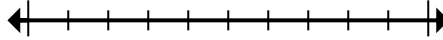
2,000	60,400,000	700	90,000
90,000	700,000	3,000	8,540,000
962,400	300	500,000	890,000

1) Round 60,393,636 to the nearest hundred thousand.



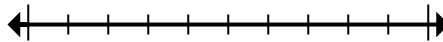
1. \_\_\_\_\_

2) Round 94,001 to the nearest ten thousand.



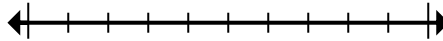
2. \_\_\_\_\_

3) Round 665 to the nearest hundred.



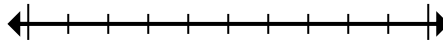
3. \_\_\_\_\_

4) Round 257 to the nearest hundred.



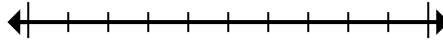
4. \_\_\_\_\_

5) Round 888,081 to the nearest ten thousand.



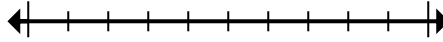
5. \_\_\_\_\_

6) Round 2,138 to the nearest thousand.



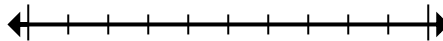
6. \_\_\_\_\_

7) Round 3,390 to the nearest thousand.



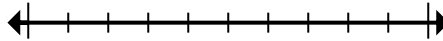
7. \_\_\_\_\_

8) Round 8,542,890 to the nearest ten thousand.



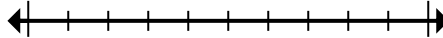
8. \_\_\_\_\_

9) Round 515,011 to the nearest hundred thousand.



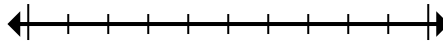
9. \_\_\_\_\_

10) Round 962,363 to the nearest hundred.



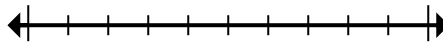
10. \_\_\_\_\_

11) Round 656,429 to the nearest hundred thousand.



11. \_\_\_\_\_

12) Round 87,606 to the nearest ten thousand.



12. \_\_\_\_\_