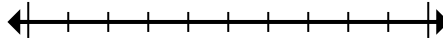




Marque la ubicación (aproximada) en la recta numérica y luego resuelva.

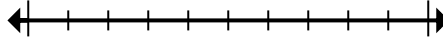
**Respuestas**

1) Round 41,495,881 to the nearest hundred thousand.



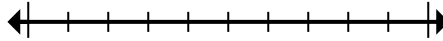
1. \_\_\_\_\_

2) Round 42,268 to the nearest hundred.



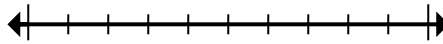
2. \_\_\_\_\_

3) Round 62,956 to the nearest ten thousand.



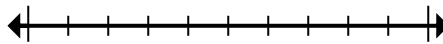
3. \_\_\_\_\_

4) Round 793,025 to the nearest thousand.



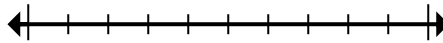
4. \_\_\_\_\_

5) Round 6,486 to the nearest thousand.



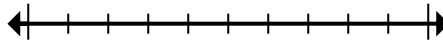
5. \_\_\_\_\_

6) Round 946,794 to the nearest ten thousand.



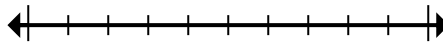
6. \_\_\_\_\_

7) Round 56,647 to the nearest hundred.



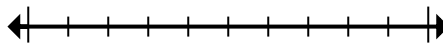
7. \_\_\_\_\_

8) Round 493 to the nearest hundred.



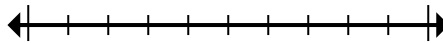
8. \_\_\_\_\_

9) Round 937,248 to the nearest hundred thousand.



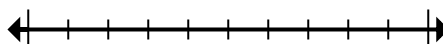
9. \_\_\_\_\_

10) Round 8,994 to the nearest thousand.



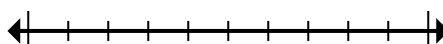
10. \_\_\_\_\_

11) Round 81,576,640 to the nearest hundred thousand.



11. \_\_\_\_\_

12) Round 824,415 to the nearest thousand.



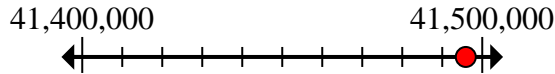
12. \_\_\_\_\_



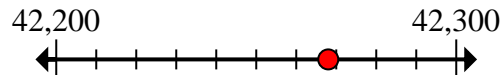
Marque la ubicación (aproximada) en la recta numérica y luego resuelva.

**Respuestas**

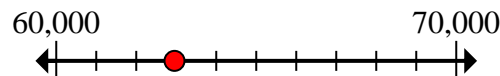
- 1) Round 41,495,881 to the nearest hundred thousand.

1. 41,500,000

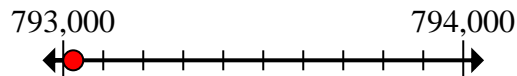
- 2) Round 42,268 to the nearest hundred.

2. 42,300

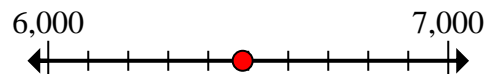
- 3) Round 62,956 to the nearest ten thousand.

3. 60,000

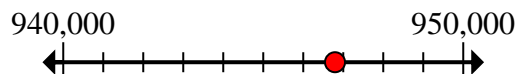
- 4) Round 793,025 to the nearest thousand.

4. 793,000

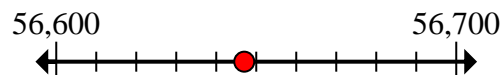
- 5) Round 6,486 to the nearest thousand.

5. 6,000

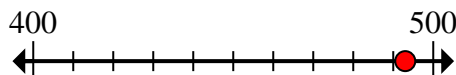
- 6) Round 946,794 to the nearest ten thousand.

6. 950,000

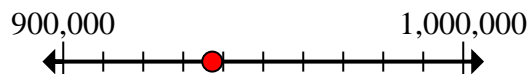
- 7) Round 56,647 to the nearest hundred.

7. 56,600

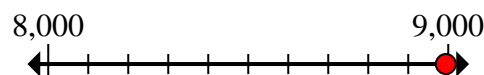
- 8) Round 493 to the nearest hundred.

8. 500


- 9) Round 937,248 to the nearest hundred thousand.

9. 900,000

- 10) Round 8,994 to the nearest thousand.

10. 9,000

- 11) Round 81,576,640 to the nearest hundred thousand.

11. 81,600,000

- 12) Round 824,415 to the nearest thousand.

12. 824,000

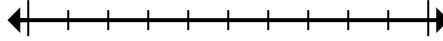


Marque la ubicación (aproximada) en la recta numérica y luego resuelva.

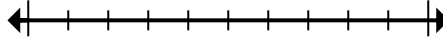
**Respuestas**

900,000	56,600	81,600,000	9,000
6,000	500	793,000	60,000
824,000	41,500,000	950,000	42,300

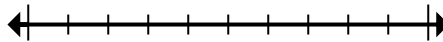
1) Round 41,495,881 to the nearest hundred thousand.



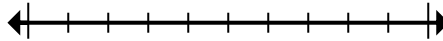
2) Round 42,268 to the nearest hundred.



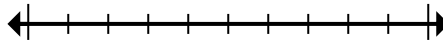
3) Round 62,956 to the nearest ten thousand.



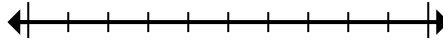
4) Round 793,025 to the nearest thousand.



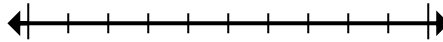
5) Round 6,486 to the nearest thousand.



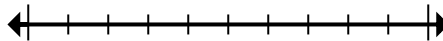
6) Round 946,794 to the nearest ten thousand.



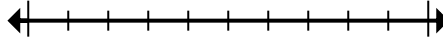
7) Round 56,647 to the nearest hundred.



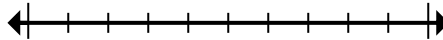
8) Round 493 to the nearest hundred.



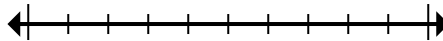
9) Round 937,248 to the nearest hundred thousand.



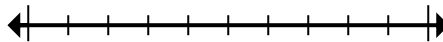
10) Round 8,994 to the nearest thousand.



11) Round 81,576,640 to the nearest hundred thousand.



12) Round 824,415 to the nearest thousand.



- 1. \_\_\_\_\_
- 2. \_\_\_\_\_
- 3. \_\_\_\_\_
- 4. \_\_\_\_\_
- 5. \_\_\_\_\_
- 6. \_\_\_\_\_
- 7. \_\_\_\_\_
- 8. \_\_\_\_\_
- 9. \_\_\_\_\_
- 10. \_\_\_\_\_
- 11. \_\_\_\_\_
- 12. \_\_\_\_\_