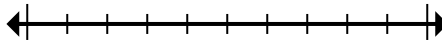




Marque la ubicación (aproximada) en la recta numérica y luego resuelva.

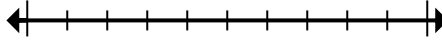
Respuestas

1) Round 356,781 to the nearest ten thousand.



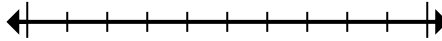
1. _____

2) Round 53,745,442 to the nearest hundred thousand.



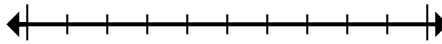
2. _____

3) Round 65,568 to the nearest ten thousand.



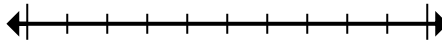
3. _____

4) Round 7,146,414 to the nearest ten thousand.



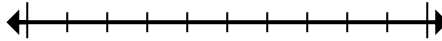
4. _____

5) Round 88,757 to the nearest ten thousand.



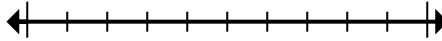
5. _____

6) Round 1,227 to the nearest hundred.



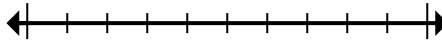
6. _____

7) Round 23,522 to the nearest hundred.



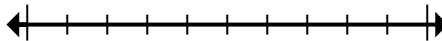
7. _____

8) Round 68,460,896 to the nearest hundred thousand.



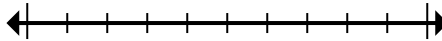
8. _____

9) Round 6,240 to the nearest thousand.



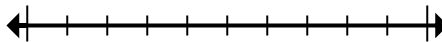
9. _____

10) Round 139 to the nearest hundred.



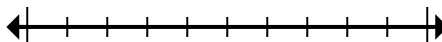
10. _____

11) Round 876,706 to the nearest thousand.



11. _____

12) Round 492,040 to the nearest hundred thousand.



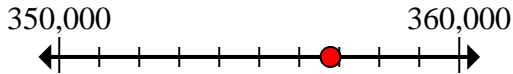
12. _____



Marque la ubicación (aproximada) en la recta numérica y luego resuelva.

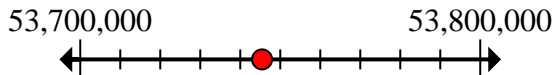
Respuestas

1) Round 356,781 to the nearest ten thousand.



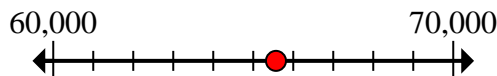
1. 360,000

2) Round 53,745,442 to the nearest hundred thousand.



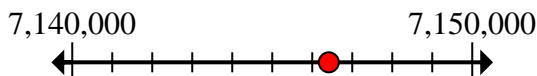
2. 53,700,000

3) Round 65,568 to the nearest ten thousand.



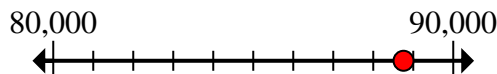
3. 70,000

4) Round 7,146,414 to the nearest ten thousand.



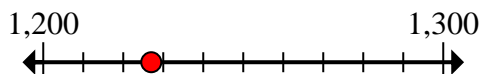
4. 7,150,000

5) Round 88,757 to the nearest ten thousand.



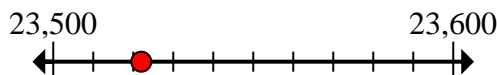
5. 90,000

6) Round 1,227 to the nearest hundred.



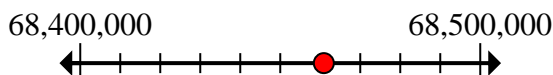
6. 1,200

7) Round 23,522 to the nearest hundred.



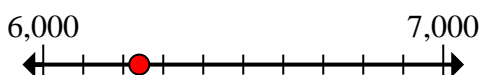
7. 23,500

8) Round 68,460,896 to the nearest hundred thousand.



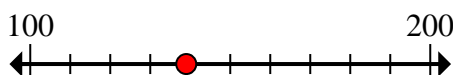
8. 68,500,000

9) Round 6,240 to the nearest thousand.



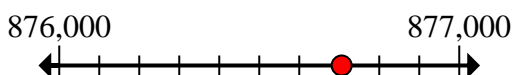
9. 6,000

10) Round 139 to the nearest hundred.



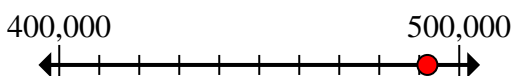
10. 100

11) Round 876,706 to the nearest thousand.



11. 877,000

12) Round 492,040 to the nearest hundred thousand.



12. 500,000

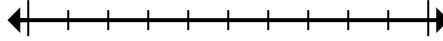


Marque la ubicación (aproximada) en la recta numérica y luego resuelva.

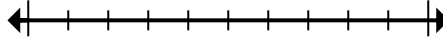
Respuestas

1,200	7,150,000	23,500	6,000
68,500,000	70,000	90,000	53,700,000
100	500,000	877,000	360,000

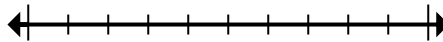
1) Round 356,781 to the nearest ten thousand.



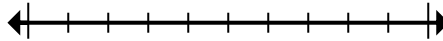
2) Round 53,745,442 to the nearest hundred thousand.



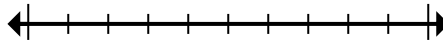
3) Round 65,568 to the nearest ten thousand.



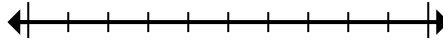
4) Round 7,146,414 to the nearest ten thousand.



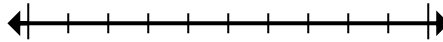
5) Round 88,757 to the nearest ten thousand.



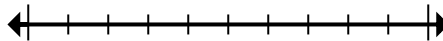
6) Round 1,227 to the nearest hundred.



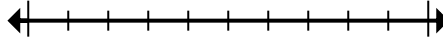
7) Round 23,522 to the nearest hundred.



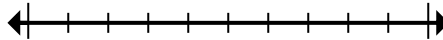
8) Round 68,460,896 to the nearest hundred thousand.



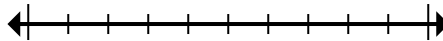
9) Round 6,240 to the nearest thousand.



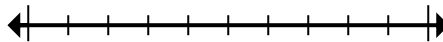
10) Round 139 to the nearest hundred.



11) Round 876,706 to the nearest thousand.



12) Round 492,040 to the nearest hundred thousand.



1. _____
2. _____
3. _____
4. _____
5. _____
6. _____
7. _____
8. _____
9. _____
10. _____
11. _____
12. _____