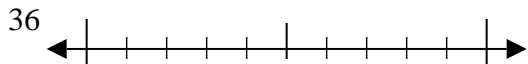


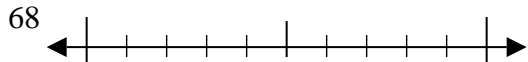


Usar las rectas numéricas para encontrar el número más cercano a 10.

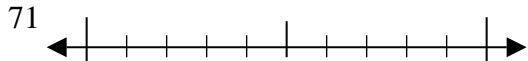
Ej)



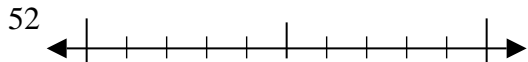
1)



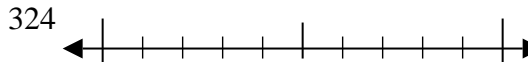
2)



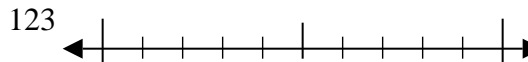
3)



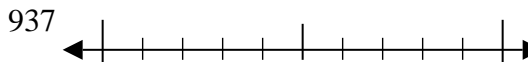
4)



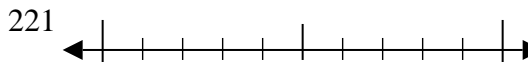
5)



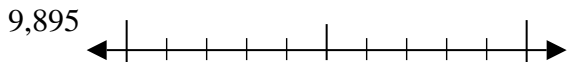
6)



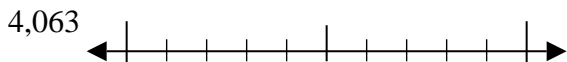
7)



8)



9)



Respuestas

Ej. 40

1. _____

2. _____

3. _____

4. _____

5. _____

6. _____

7. _____

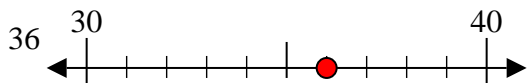
8. _____

9. _____

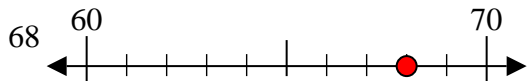


Usar las rectas numéricas para encontrar el número más cercano a 10.

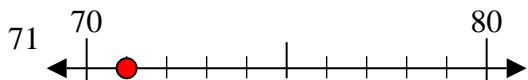
Ej)



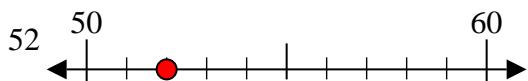
1)



2)



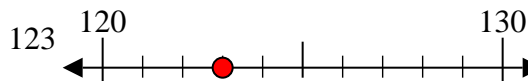
3)



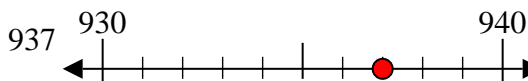
4)



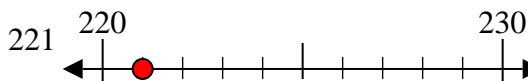
5)



6)



7)



8)



9)



Respuestas

Ej. 40

1. 70

2. 70

3. 50

4. 320

5. 120

6. 940

7. 220

8. 9900

9. 4060