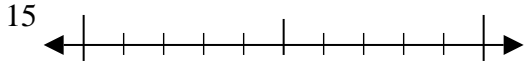


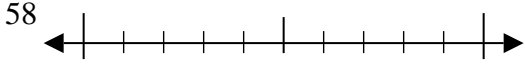


Usar las rectas numéricas para encontrar el número más cercano a 10.

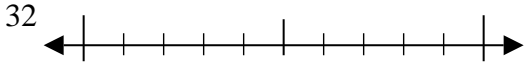
Ej)



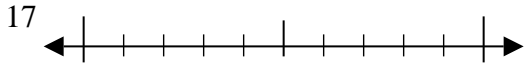
1)



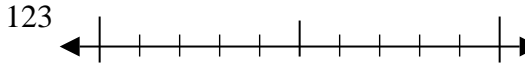
2)



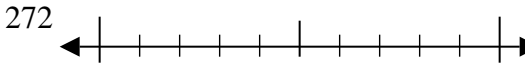
3)



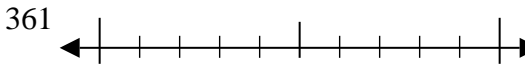
4)



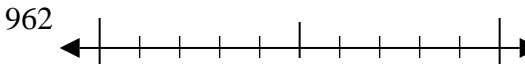
5)



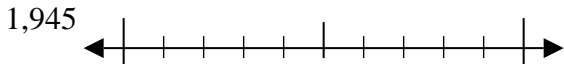
6)



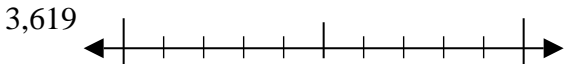
7)



8)



9)



**Respuestas**

Ej. 20

1. \_\_\_\_\_

2. \_\_\_\_\_

3. \_\_\_\_\_

4. \_\_\_\_\_

5. \_\_\_\_\_

6. \_\_\_\_\_

7. \_\_\_\_\_

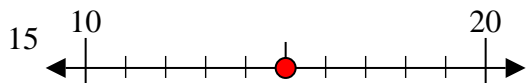
8. \_\_\_\_\_

9. \_\_\_\_\_

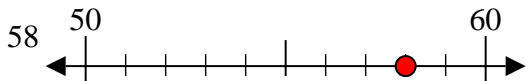


Usar las rectas numéricas para encontrar el número más cercano a 10.

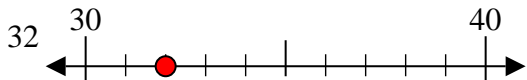
Ej)



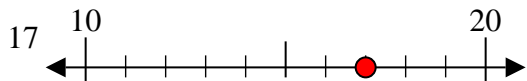
1)



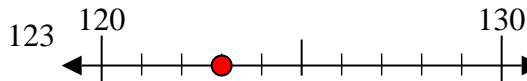
2)



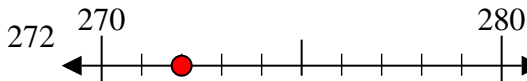
3)



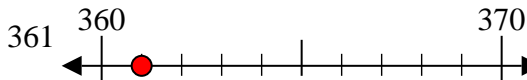
4)



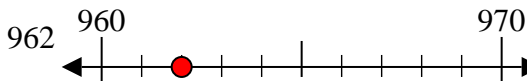
5)



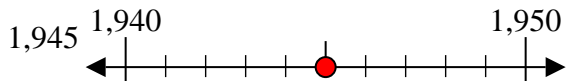
6)



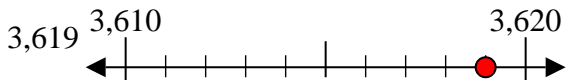
7)



8)



9)



**Respuestas**

Ej. 20

1. 60

2. 30

3. 20

4. 120

5. 270

6. 360

7. 960

8. 1950

9. 3620