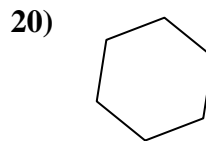
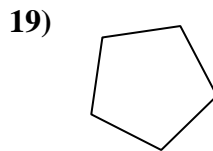
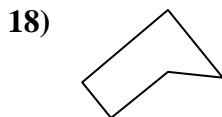
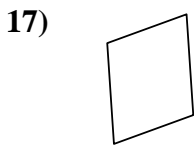
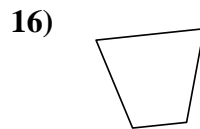
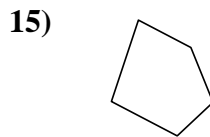
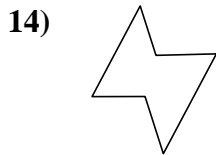
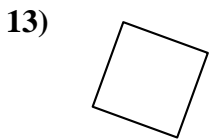
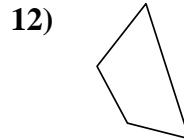
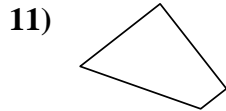
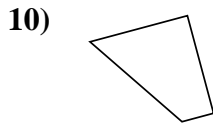
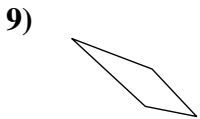
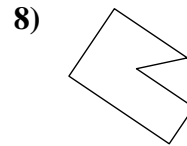
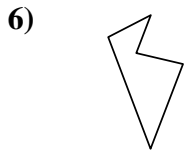
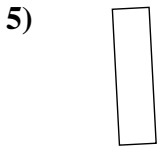
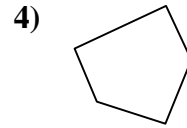
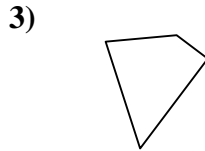
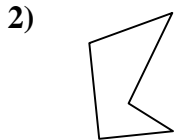
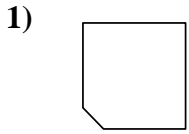




Determinar si la forma mostrada es un cuadrilátero (sí) o no (no).

**Respuestas**



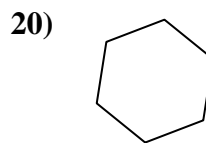
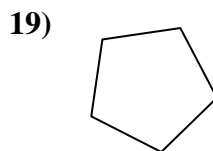
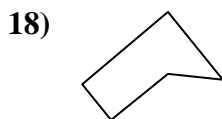
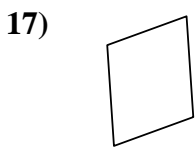
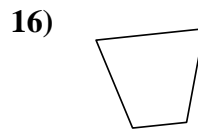
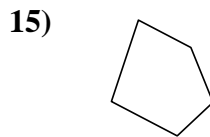
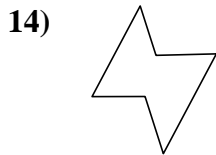
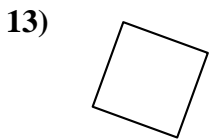
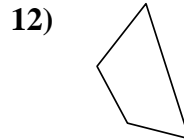
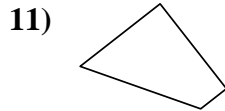
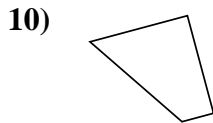

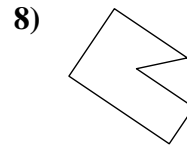
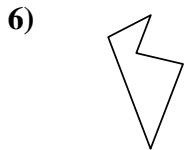
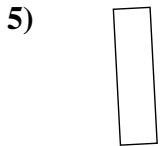
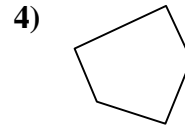
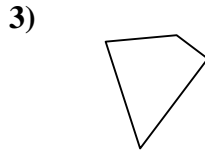
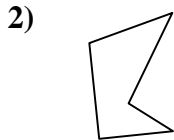
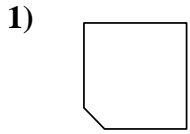
- 1. \_\_\_\_\_
- 2. \_\_\_\_\_
- 3. \_\_\_\_\_
- 4. \_\_\_\_\_
- 5. \_\_\_\_\_
- 6. \_\_\_\_\_
- 7. \_\_\_\_\_
- 8. \_\_\_\_\_
- 9. \_\_\_\_\_
- 10. \_\_\_\_\_
- 11. \_\_\_\_\_
- 12. \_\_\_\_\_
- 13. \_\_\_\_\_
- 14. \_\_\_\_\_
- 15. \_\_\_\_\_
- 16. \_\_\_\_\_
- 17. \_\_\_\_\_
- 18. \_\_\_\_\_
- 19. \_\_\_\_\_
- 20. \_\_\_\_\_

1-10	95	90	85	80	75	70	65	60	55	50
11-20	45	40	35	30	25	20	15	10	5	0



Determinar si la forma mostrada es un cuadrilátero (si) o no (no).

**Respuestas**



1. **no**

2. **no**

3. **si**

4. **no**

5. **si**

6. **no**

7. **si**

8. **no**

9. **si**

10. **si**

11. **si**

12. **si**

13. **si**

14. **no**

15. **no**

16. **si**

17. **si**

18. **no**

19. **no**

20. **no**