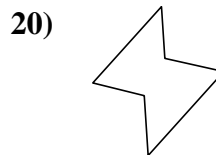
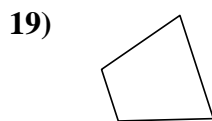
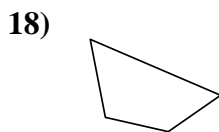
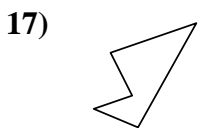
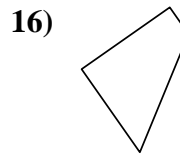
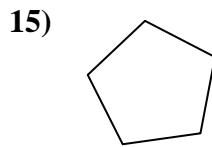
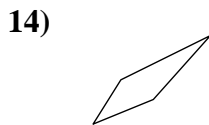
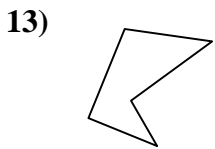
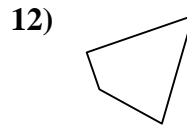
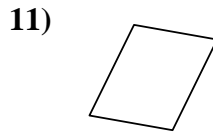
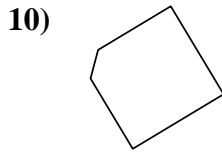
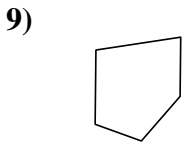
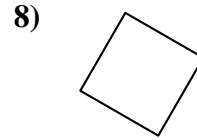
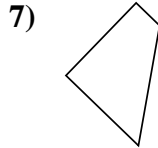
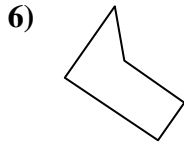
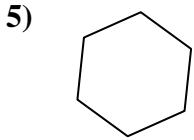

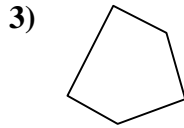
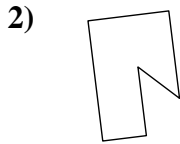
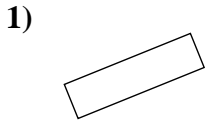




Determinar si la forma mostrada es un cuadrilátero (sí) o no (no).

**Respuestas**


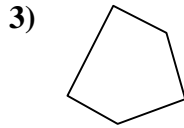
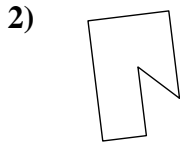
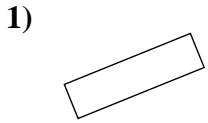


- 1. \_\_\_\_\_
- 2. \_\_\_\_\_
- 3. \_\_\_\_\_
- 4. \_\_\_\_\_
- 5. \_\_\_\_\_
- 6. \_\_\_\_\_
- 7. \_\_\_\_\_
- 8. \_\_\_\_\_
- 9. \_\_\_\_\_
- 10. \_\_\_\_\_
- 11. \_\_\_\_\_
- 12. \_\_\_\_\_
- 13. \_\_\_\_\_
- 14. \_\_\_\_\_
- 15. \_\_\_\_\_
- 16. \_\_\_\_\_
- 17. \_\_\_\_\_
- 18. \_\_\_\_\_
- 19. \_\_\_\_\_
- 20. \_\_\_\_\_



Determinar si la forma mostrada es un cuadrilátero (si) o no (no).

**Respuestas**

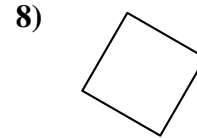
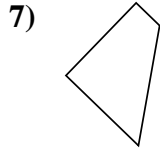
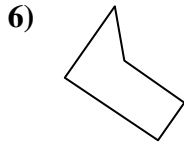
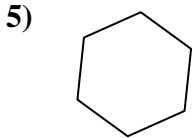


1. si

2. no

3. no

4. si

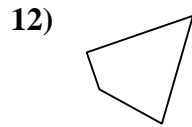
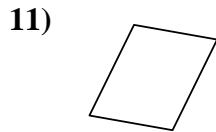
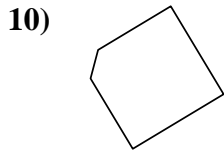
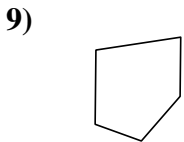


5. no

6. no

7. si

8. si

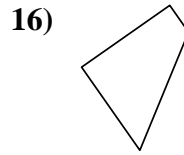
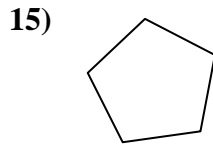
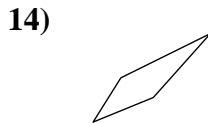
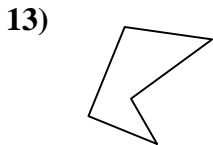


9. no

10. no

11. si

12. si

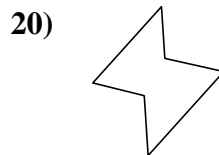
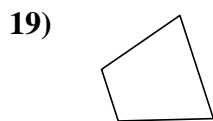
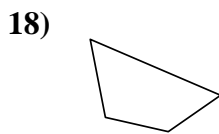
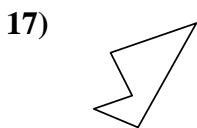


13. no

14. si

15. no

16. si



17. no

18. si

19. si

20. no

1-10	95	90	85	80	75	70	65	60	55	50
11-20	45	40	35	30	25	20	15	10	5	0