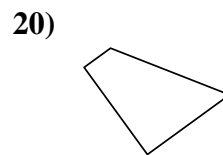
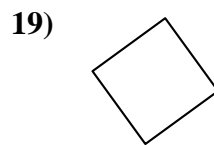
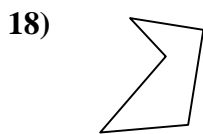
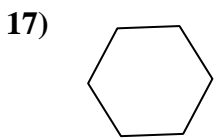
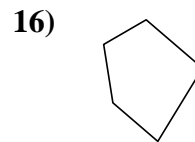
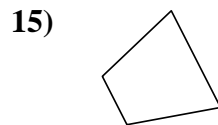

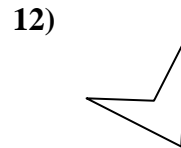
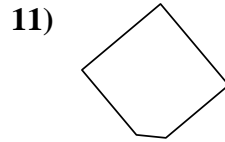
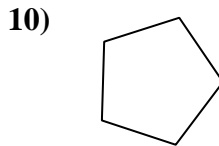
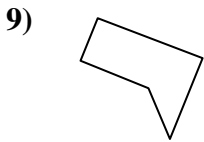
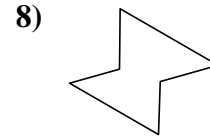
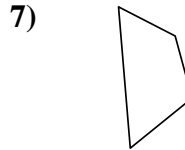
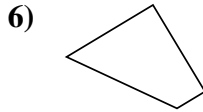
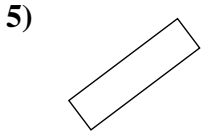
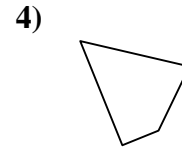
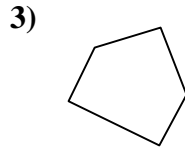
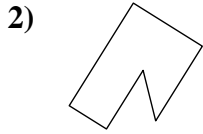
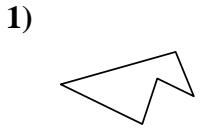




Determinar si la forma mostrada es un cuadrilátero (sí) o no (no).

Respuestas



1. _____

2. _____

3. _____

4. _____

5. _____

6. _____

7. _____

8. _____

9. _____

10. _____

11. _____

12. _____

13. _____

14. _____

15. _____

16. _____

17. _____

18. _____

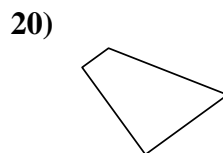
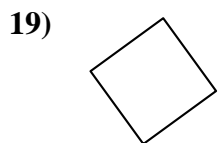
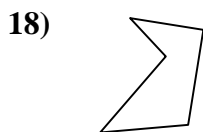
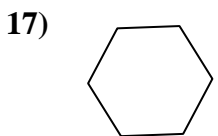
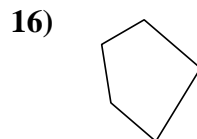
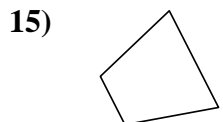
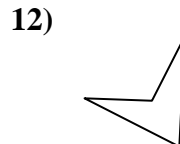
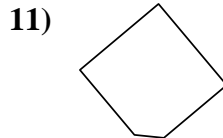
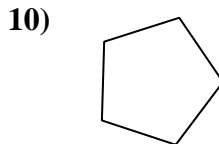
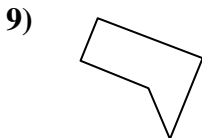
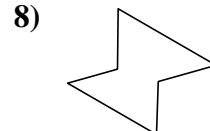
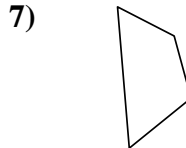
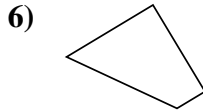
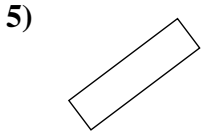
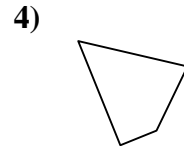
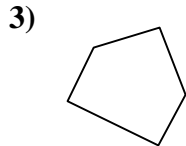
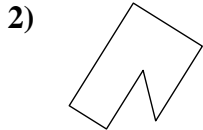
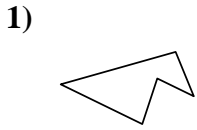
19. _____

20. _____



Determinar si la forma mostrada es un cuadrilátero (si) o no (no).

Respuestas



1. **no**

2. **no**

3. **no**

4. **si**

5. **si**

6. **si**

7. **si**

8. **no**

9. **no**

10. **no**

11. **no**

12. **si**

13. **si**

14. **si**

15. **si**

16. **no**

17. **no**

18. **no**

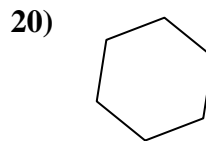
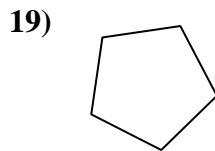
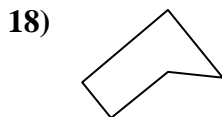
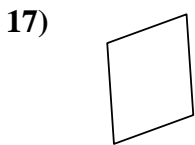
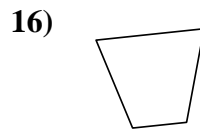
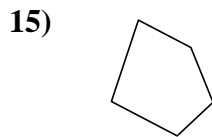
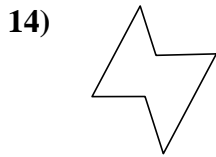
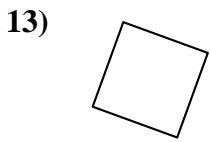
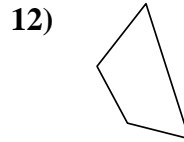
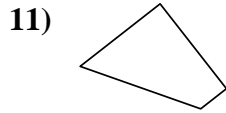
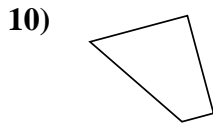

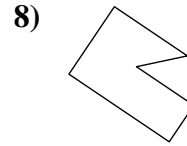
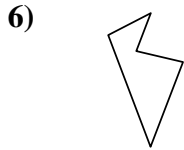
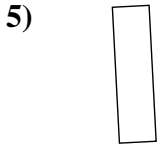
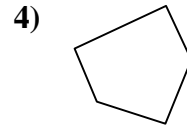
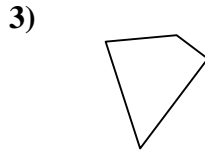
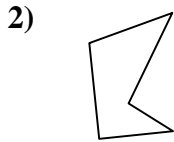
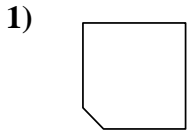
19. **si**

20. **si**



Determinar si la forma mostrada es un cuadrilátero (sí) o no (no).

Respuestas

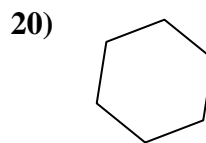
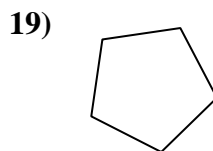
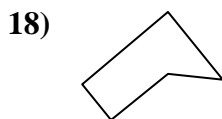
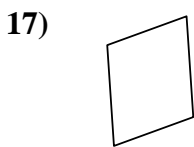
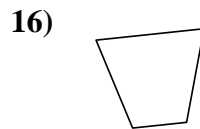
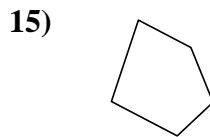
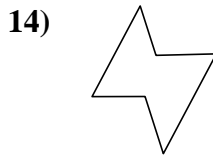
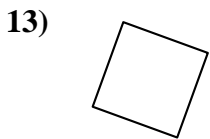
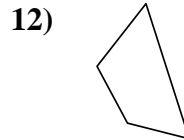
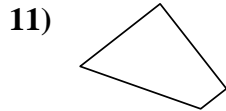
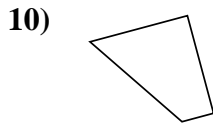
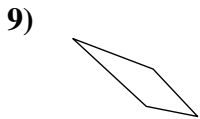
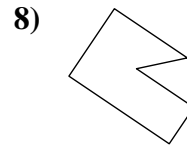
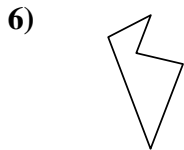
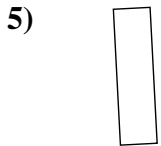
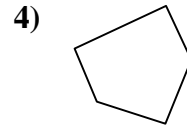
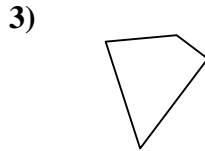
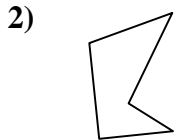
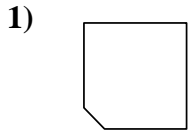


1. _____
2. _____
3. _____
4. _____
5. _____
6. _____
7. _____
8. _____
9. _____
10. _____
11. _____
12. _____
13. _____
14. _____
15. _____
16. _____
17. _____
18. _____
19. _____
20. _____



Determinar si la forma mostrada es un cuadrilátero (si) o no (no).

Respuestas



1. no

2. no

3. si

4. no

5. si

6. no

7. si

8. no

9. si

10. si

11. si

12. si

13. si

14. no

15. no

16. si

17. si

18. no

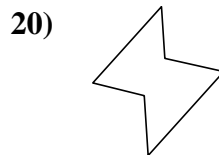
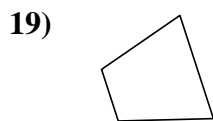
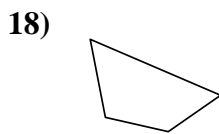
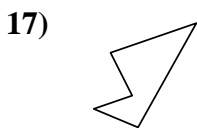
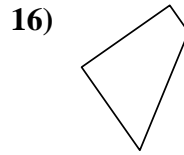
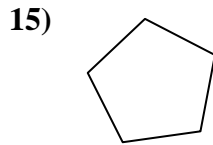
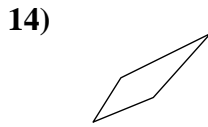
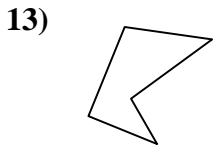
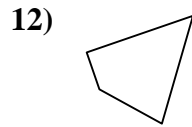
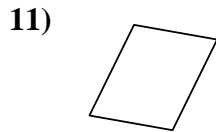
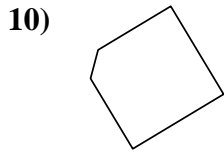
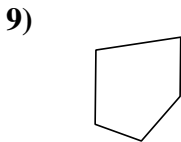
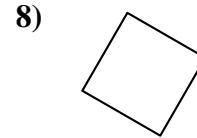
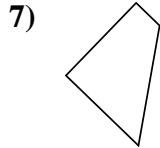
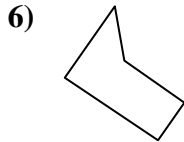
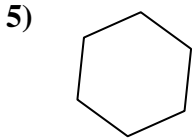

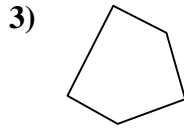
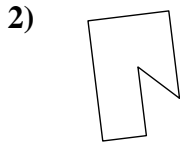
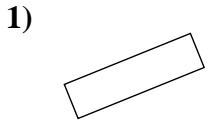
19. no

20. no



Determinar si la forma mostrada es un cuadrilátero (sí) o no (no).

Respuestas




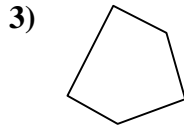
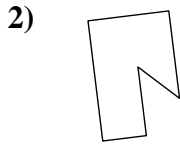
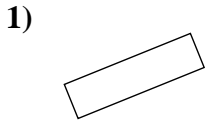
- 1. _____
- 2. _____
- 3. _____
- 4. _____
- 5. _____
- 6. _____
- 7. _____
- 8. _____
- 9. _____
- 10. _____
- 11. _____
- 12. _____
- 13. _____
- 14. _____
- 15. _____
- 16. _____
- 17. _____
- 18. _____
- 19. _____
- 20. _____

1-10	95	90	85	80	75	70	65	60	55	50
11-20	45	40	35	30	25	20	15	10	5	0



Determinar si la forma mostrada es un cuadrilátero (si) o no (no).

Respuestas

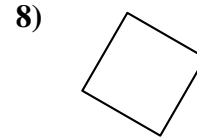
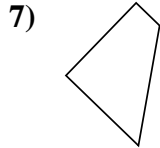
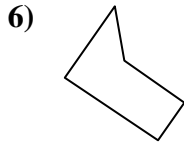
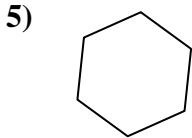


1. si

2. no

3. no

4. si

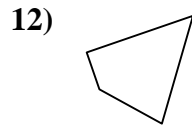
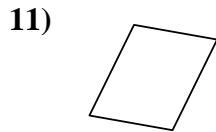
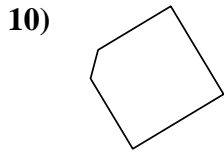
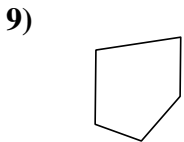


5. no

6. no

7. si

8. si

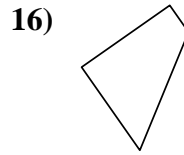
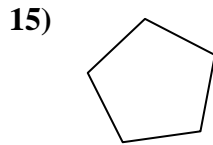
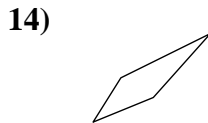
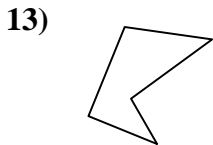


9. no

10. no

11. si

12. si

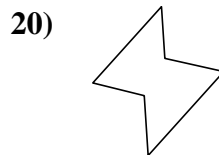
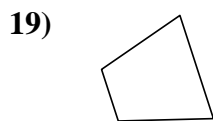
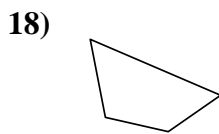
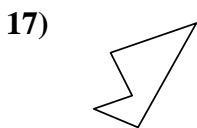


13. no

14. si

15. no

16. si



17. no

18. si

19. si

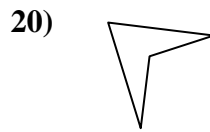
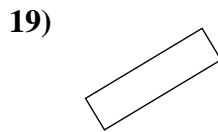
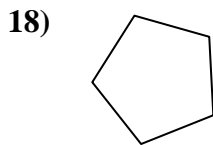

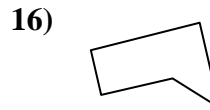
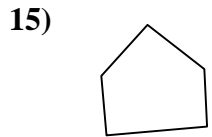
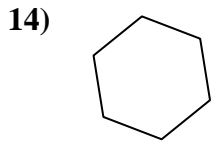
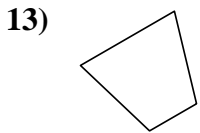
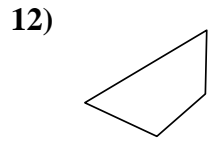
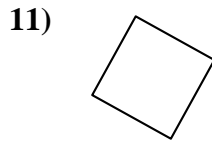
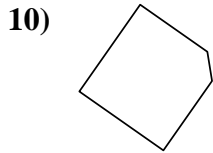
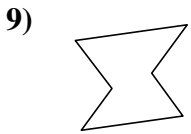
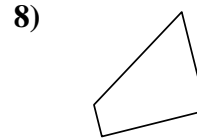
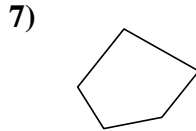
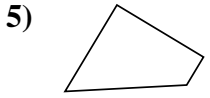
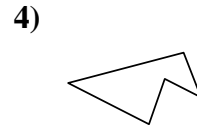
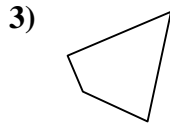
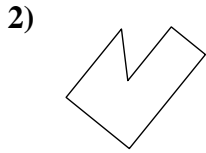
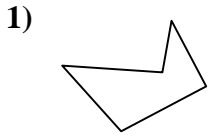
20. no

1-10	95	90	85	80	75	70	65	60	55	50
11-20	45	40	35	30	25	20	15	10	5	0



Determinar si la forma mostrada es un cuadrilátero (sí) o no (no).

Respuestas



1. _____

2. _____

3. _____

4. _____

5. _____

6. _____

7. _____

8. _____

9. _____

10. _____

11. _____

12. _____

13. _____

14. _____

15. _____

16. _____

17. _____

18. _____

19. _____

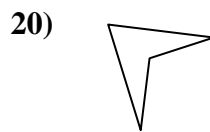
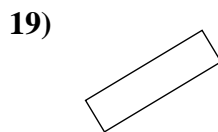
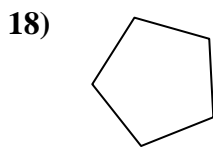
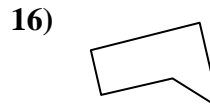
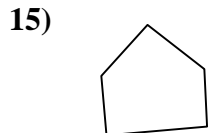
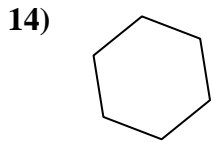
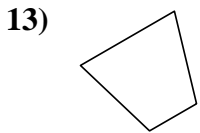
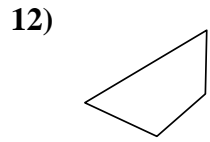
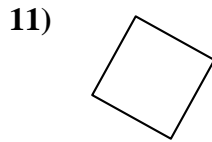
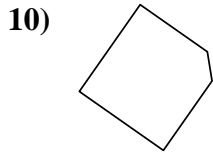
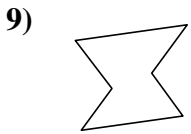
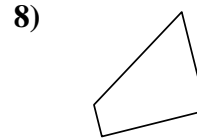
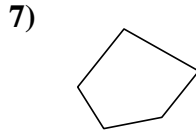
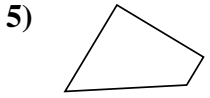
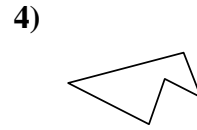
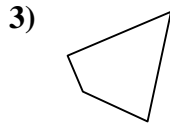
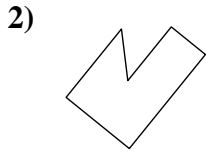
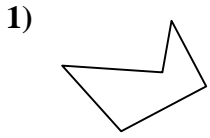
20. _____

1-10	95	90	85	80	75	70	65	60	55	50
11-20	45	40	35	30	25	20	15	10	5	0



Determinar si la forma mostrada es un cuadrilátero (si) o no (no).

Respuestas



1. **no**

2. **no**

3. **si**

4. **no**

5. **si**

6. **si**

7. **no**

8. **si**

9. **no**

10. **no**

11. **si**

12. **si**

13. **si**

14. **no**

15. **no**

16. **no**

17. **si**

18. **no**

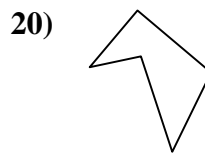
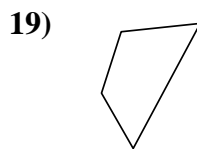
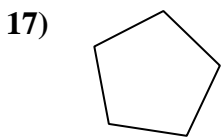
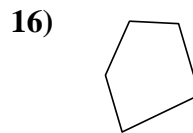
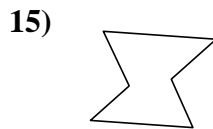
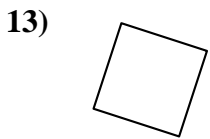
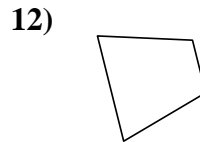
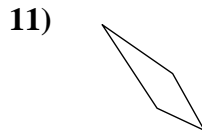
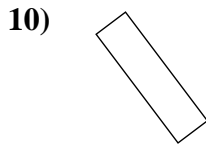
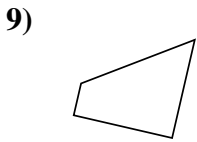
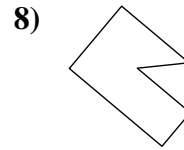
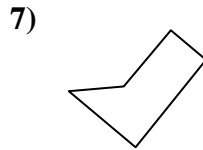
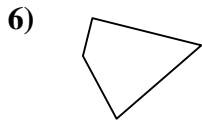
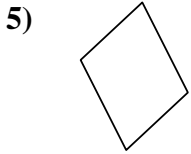
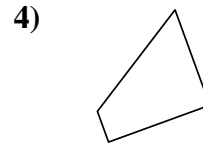
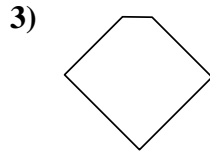
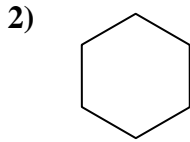
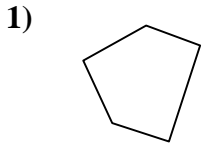
19. **si**

20. **si**



Determinar si la forma mostrada es un cuadrilátero (sí) o no (no).

Respuestas



1. _____

2. _____

3. _____

4. _____

5. _____

6. _____

7. _____

8. _____

9. _____

10. _____

11. _____

12. _____

13. _____

14. _____

15. _____

16. _____

17. _____

18. _____

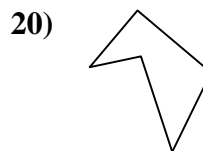
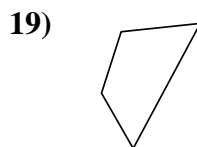
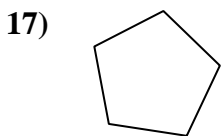
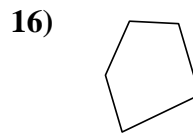
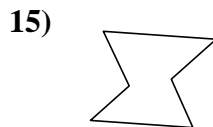
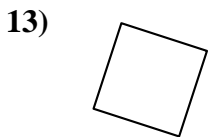
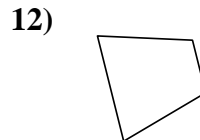
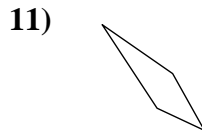
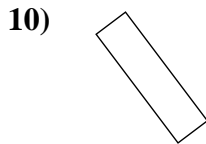
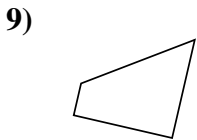
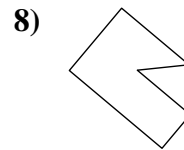
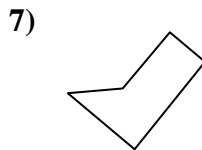
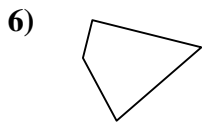
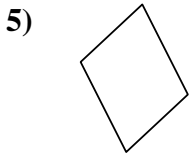
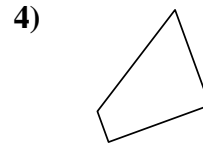
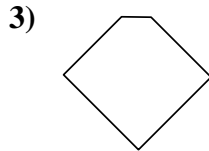
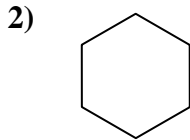
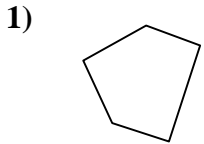
19. _____

20. _____



Determinar si la forma mostrada es un cuadrilátero (si) o no (no).

Respuestas



1. **no**

2. **no**

3. **no**

4. **si**

5. **si**

6. **si**

7. **no**

8. **no**

9. **si**

10. **si**

11. **si**

12. **si**

13. **si**

14. **no**

15. **no**

16. **no**

17. **no**

18. **si**

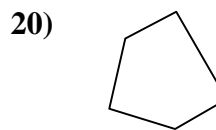
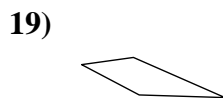
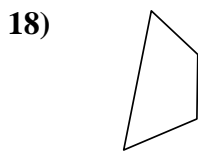
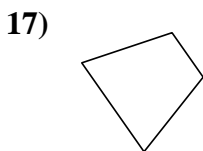
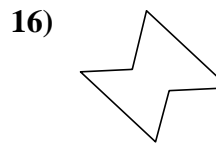
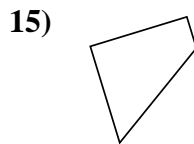
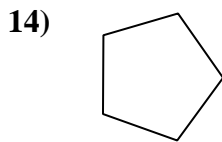

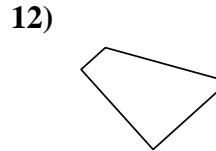
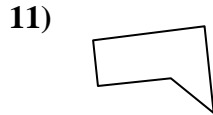
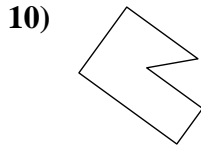
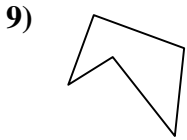
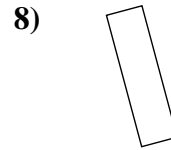
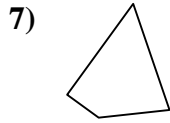
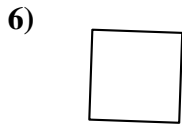
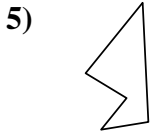
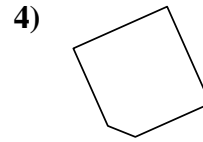
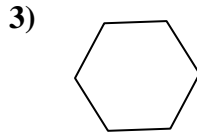
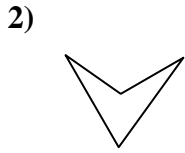
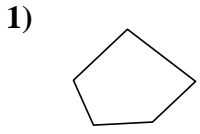
19. **si**

20. **no**



Determinar si la forma mostrada es un cuadrilátero (sí) o no (no).

Respuestas

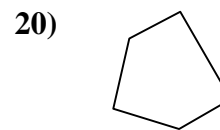
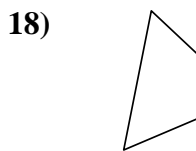
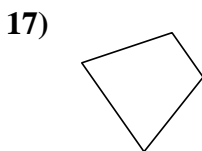
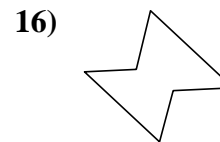
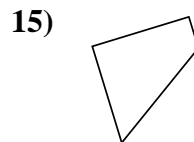
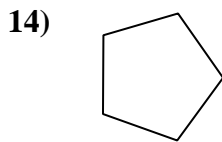
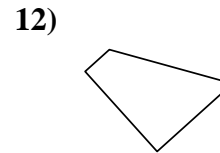
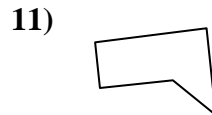
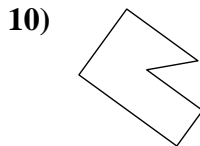
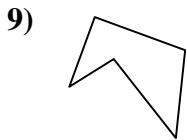
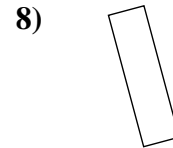
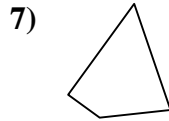
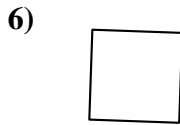
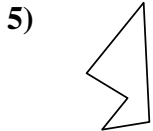
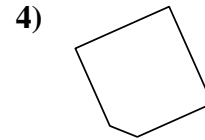
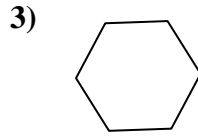
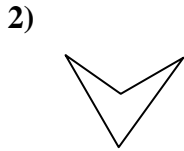
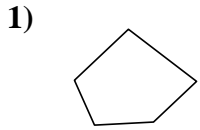


- 1. _____
- 2. _____
- 3. _____
- 4. _____
- 5. _____
- 6. _____
- 7. _____
- 8. _____
- 9. _____
- 10. _____
- 11. _____
- 12. _____
- 13. _____
- 14. _____
- 15. _____
- 16. _____
- 17. _____
- 18. _____
- 19. _____
- 20. _____



Determinar si la forma mostrada es un cuadrilátero (si) o no (no).

Respuestas



1. **no**

2. **si**

3. **no**

4. **no**

5. **no**

6. **si**

7. **si**

8. **si**

9. **no**

10. **no**

11. **no**

12. **si**

13. **si**

14. **no**

15. **si**

16. **no**

17. **si**

18. **si**

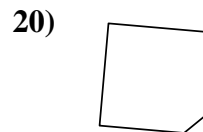
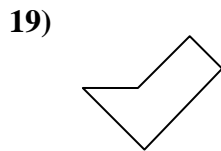
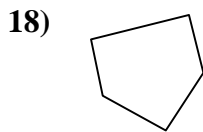
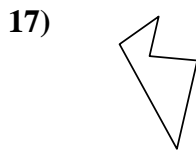
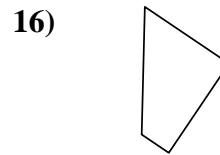
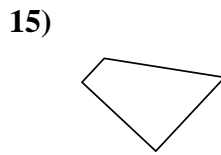
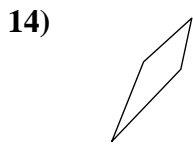
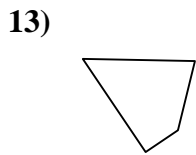
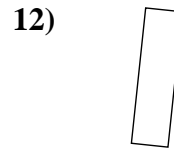
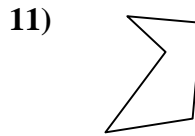
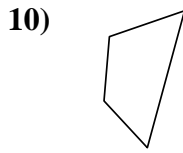
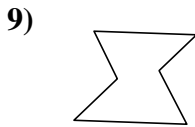
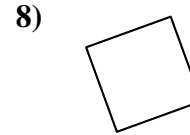
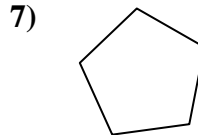
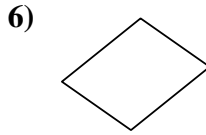
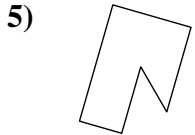
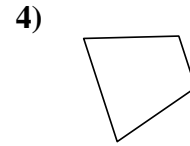
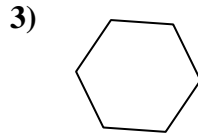
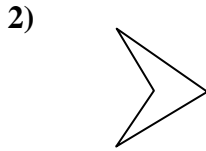
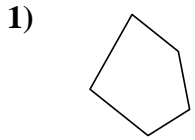
19. **si**

20. **no**



Determinar si la forma mostrada es un cuadrilátero (sí) o no (no).

Respuestas



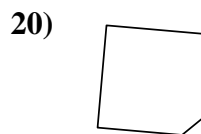
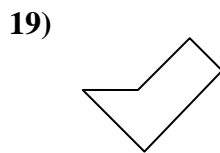
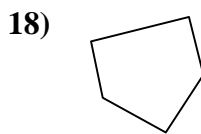
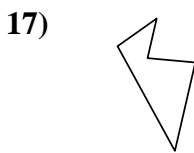
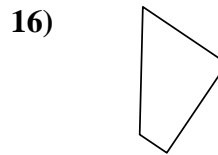
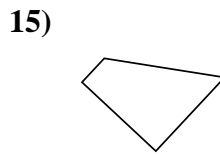
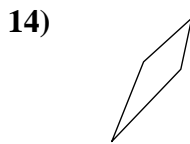
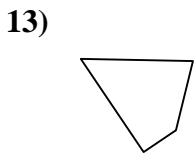
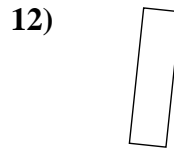
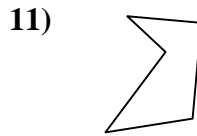
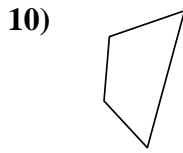
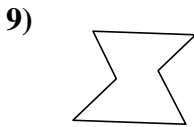
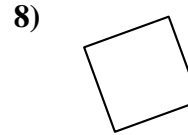
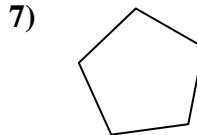
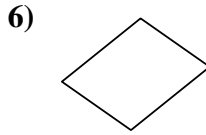
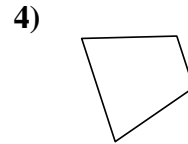
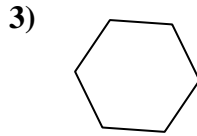
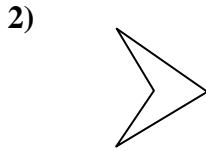
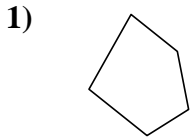
- 1. _____
- 2. _____
- 3. _____
- 4. _____
- 5. _____
- 6. _____
- 7. _____
- 8. _____
- 9. _____
- 10. _____
- 11. _____
- 12. _____
- 13. _____
- 14. _____
- 15. _____
- 16. _____
- 17. _____
- 18. _____
- 19. _____
- 20. _____

1-10	95	90	85	80	75	70	65	60	55	50
11-20	45	40	35	30	25	20	15	10	5	0



Determinar si la forma mostrada es un cuadrilátero (si) o no (no).

Respuestas

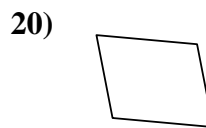
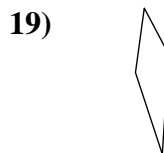
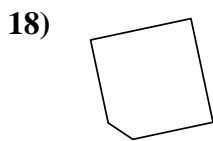
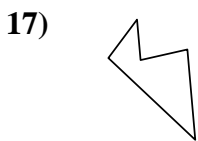
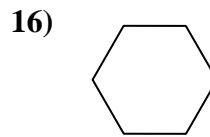
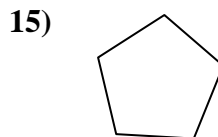
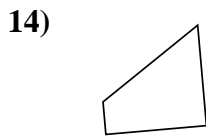
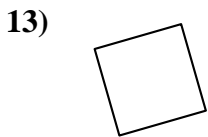
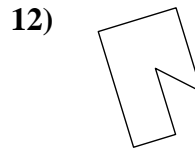
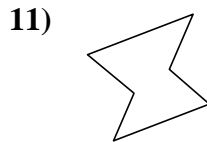
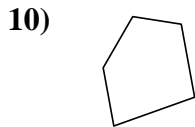
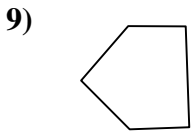
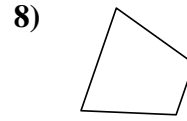
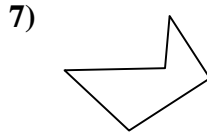
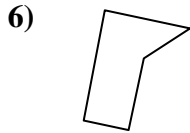
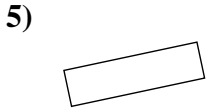
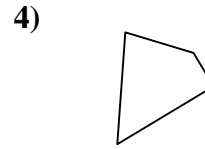
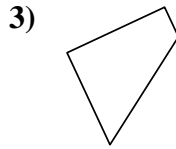
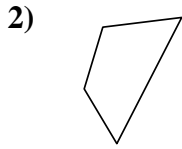



- 1. no
- 2. si
- 3. no
- 4. si
- 5. no
- 6. si
- 7. no
- 8. si
- 9. no
- 10. si
- 11. no
- 12. si
- 13. si
- 14. si
- 15. si
- 16. si
- 17. no
- 18. no
- 19. no
- 20. no



Determinar si la forma mostrada es un cuadrilátero (sí) o no (no).

Respuestas



1. _____

2. _____

3. _____

4. _____

5. _____

6. _____

7. _____

8. _____

9. _____

10. _____

11. _____

12. _____

13. _____

14. _____

15. _____

16. _____

17. _____

18. _____

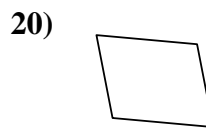
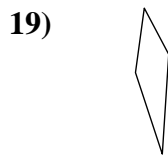
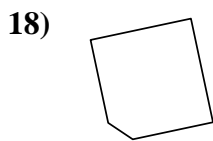
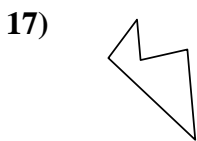
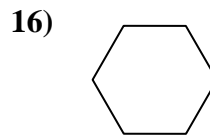
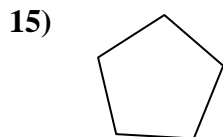
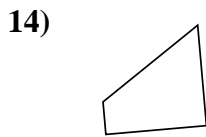
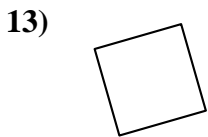
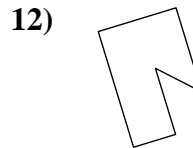
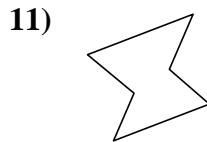
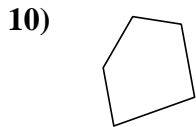
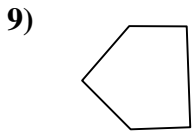
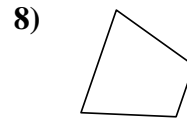
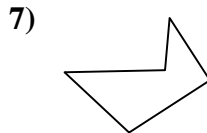
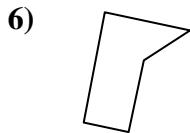

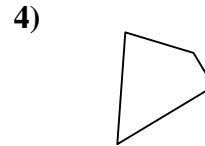
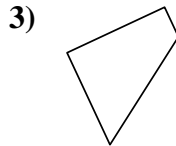
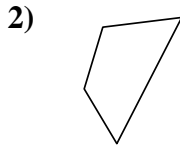

19. _____

20. _____



Determinar si la forma mostrada es un cuadrilátero (si) o no (no).

Respuestas



1. si

2. si

3. si

4. si

5. si

6. no

7. no

8. si

9. no

10. no

11. no

12. no

13. si

14. si

15. no

16. no

17. no

18. no

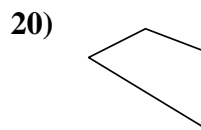
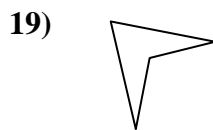
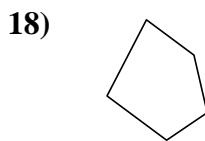
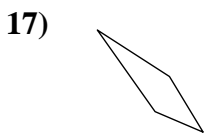
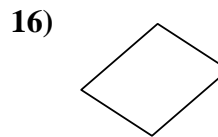
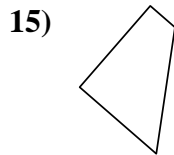
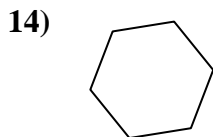
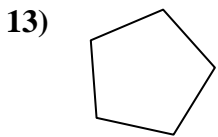
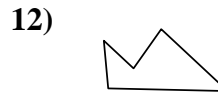
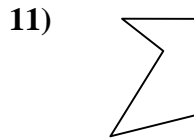
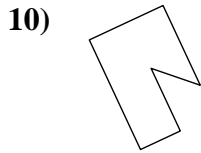
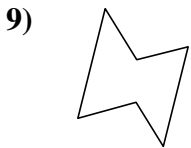
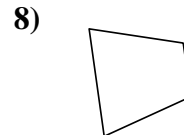
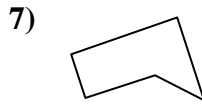
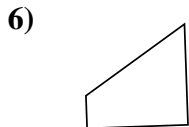
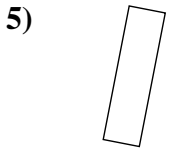
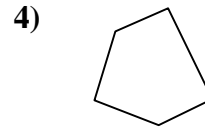
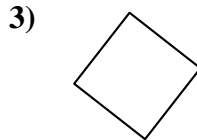
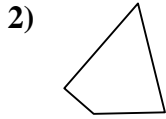
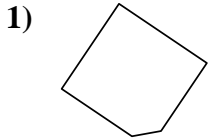
19. si

20. si



Determinar si la forma mostrada es un cuadrilátero (sí) o no (no).

Respuestas

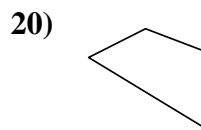
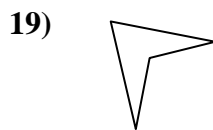
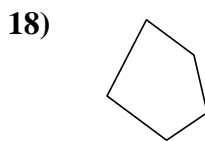
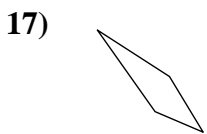
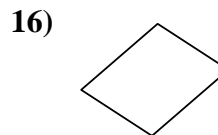
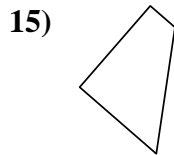
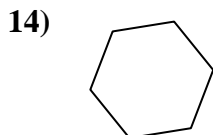
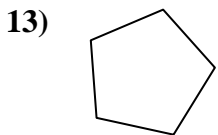
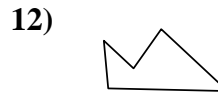
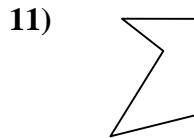
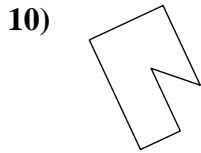
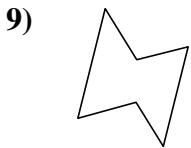
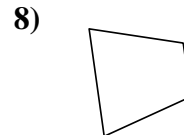
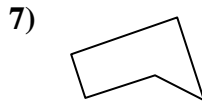
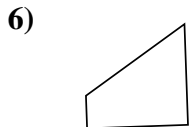
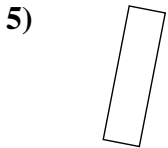
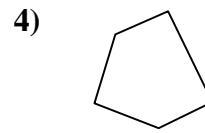
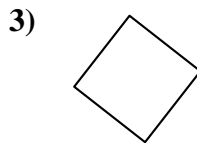
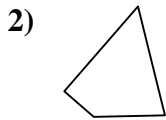
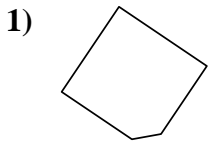


- 1. _____
- 2. _____
- 3. _____
- 4. _____
- 5. _____
- 6. _____
- 7. _____
- 8. _____
- 9. _____
- 10. _____
- 11. _____
- 12. _____
- 13. _____
- 14. _____
- 15. _____
- 16. _____
- 17. _____
- 18. _____
- 19. _____
- 20. _____



Determinar si la forma mostrada es un cuadrilátero (si) o no (no).

Respuestas



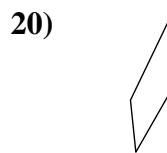
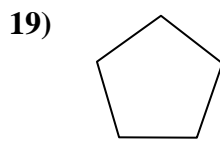
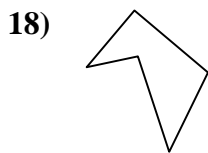
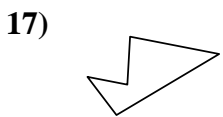
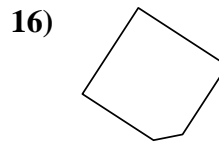
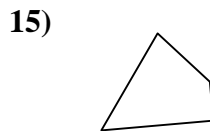
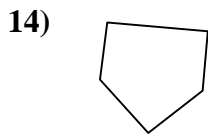
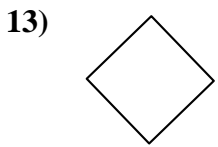
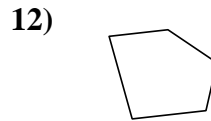
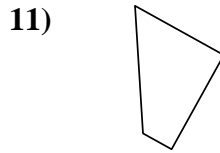
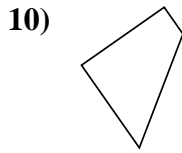
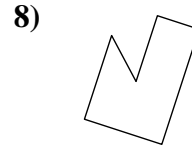
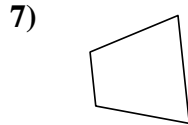
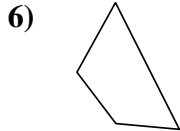
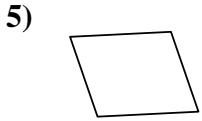
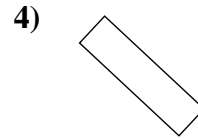
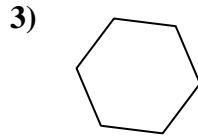
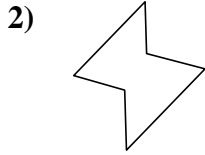
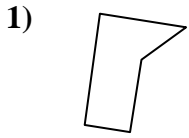
- 1. no
- 2. si
- 3. si
- 4. no
- 5. si
- 6. si
- 7. no
- 8. si
- 9. no
- 10. no
- 11. no
- 12. no
- 13. no
- 14. no
- 15. si
- 16. si
- 17. si
- 18. no
- 19. si
- 20. si

1-10	95	90	85	80	75	70	65	60	55	50
11-20	45	40	35	30	25	20	15	10	5	0



Determinar si la forma mostrada es un cuadrilátero (sí) o no (no).

Respuestas

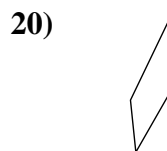
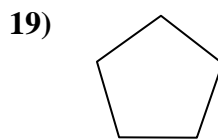
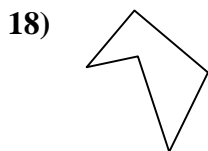
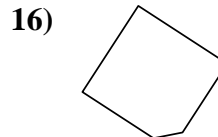
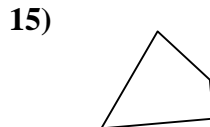
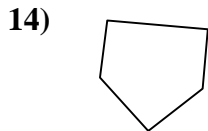
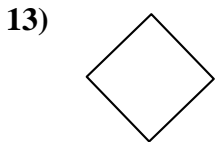
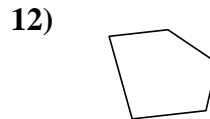
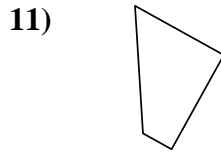
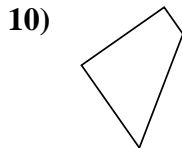
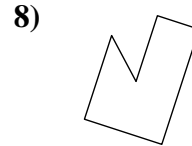
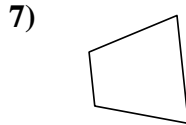
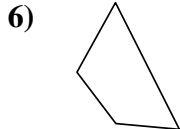
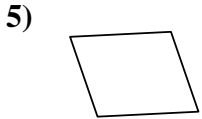
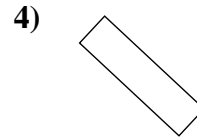
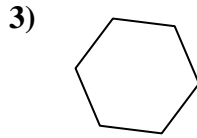
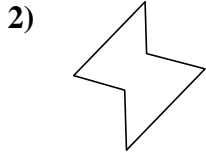
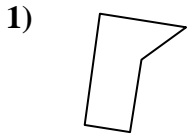


1. _____
2. _____
3. _____
4. _____
5. _____
6. _____
7. _____
8. _____
9. _____
10. _____
11. _____
12. _____
13. _____
14. _____
15. _____
16. _____
17. _____
18. _____
19. _____
20. _____



Determinar si la forma mostrada es un cuadrilátero (si) o no (no).

Respuestas



1. **no**

2. **no**

3. **no**

4. **si**

5. **si**

6. **si**

7. **si**

8. **no**

9. **si**

10. **si**

11. **si**

12. **no**

13. **si**

14. **no**

15. **si**

16. **no**

17. **no**

18. **no**

19. **no**

20. **si**