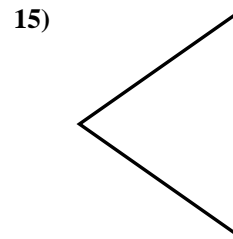
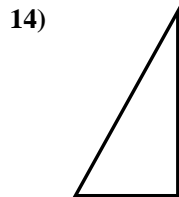
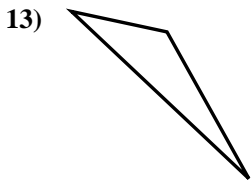
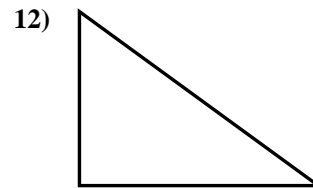
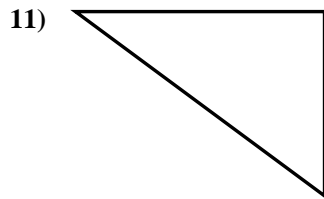
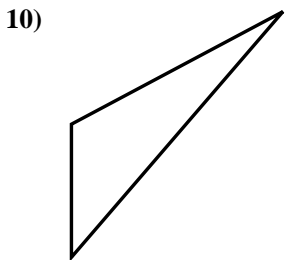
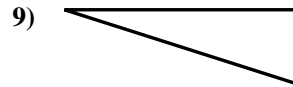
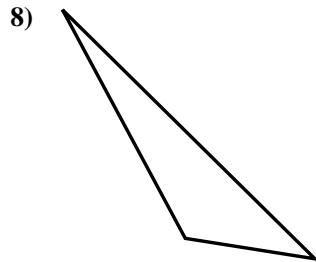
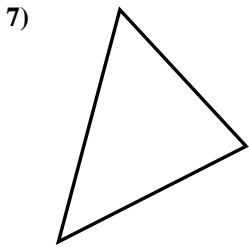
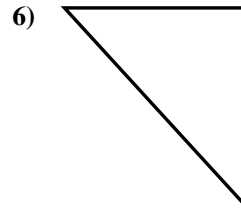
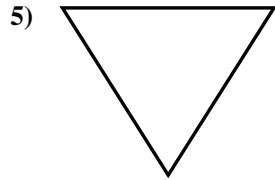
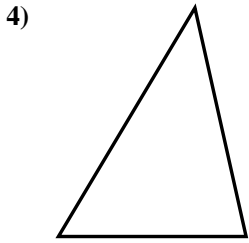
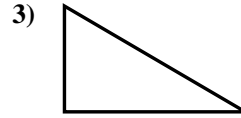
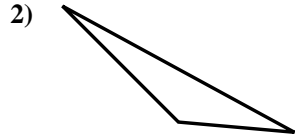
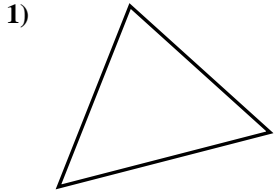




Determinar si el triángulo mostrado es un triángulo recto (sí) o no (no).

**Respuestas**

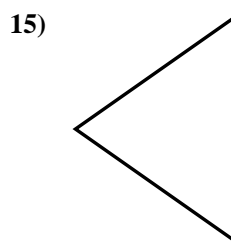
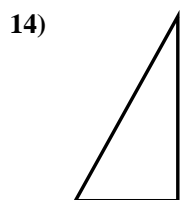
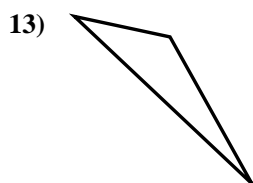
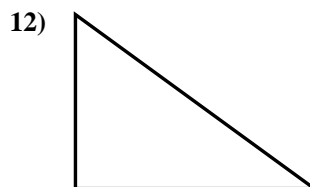
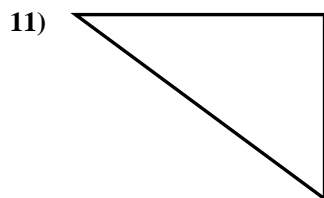
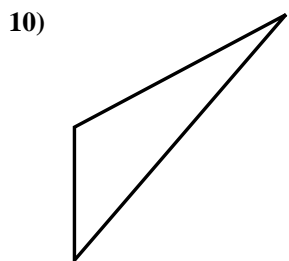
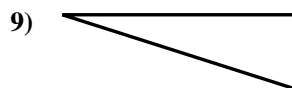
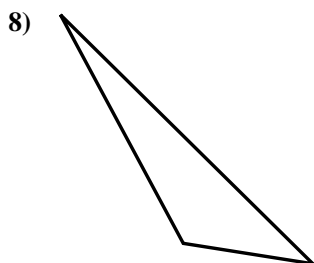
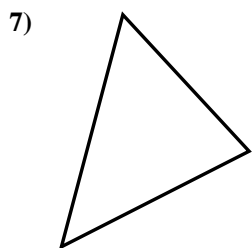
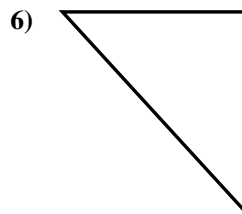
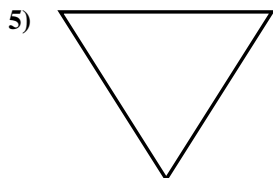
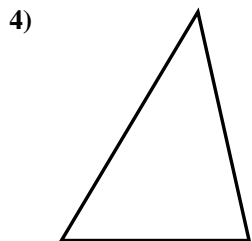
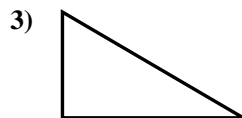
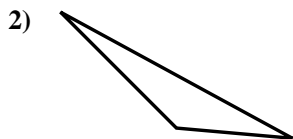
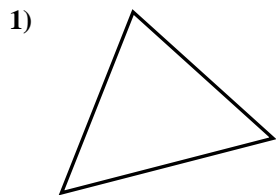


- 1. \_\_\_\_\_
- 2. \_\_\_\_\_
- 3. \_\_\_\_\_
- 4. \_\_\_\_\_
- 5. \_\_\_\_\_
- 6. \_\_\_\_\_
- 7. \_\_\_\_\_
- 8. \_\_\_\_\_
- 9. \_\_\_\_\_
- 10. \_\_\_\_\_
- 11. \_\_\_\_\_
- 12. \_\_\_\_\_
- 13. \_\_\_\_\_
- 14. \_\_\_\_\_
- 15. \_\_\_\_\_



Determinar si el triángulo mostrado es un triángulo recto (si) o no (no).

**Respuestas**



1. no

2. no

3. si

4. no

5. no

6. si

7. no

8. no

9. si

10. no

11. si

12. si

13. no

14. si

15. no