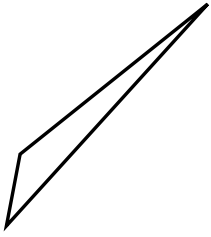




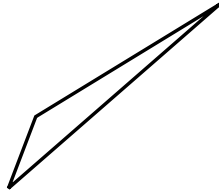
Determinar si el triángulo mostrado es un triángulo recto (si) o no (no).

**Respuestas**

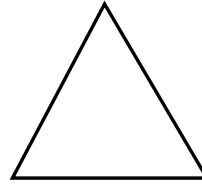
1)



2)



3)



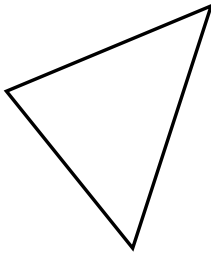
1. \_\_\_\_\_

2. \_\_\_\_\_

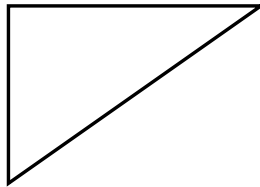
3. \_\_\_\_\_

4. \_\_\_\_\_


4)



5)



6)




5. \_\_\_\_\_

6. \_\_\_\_\_

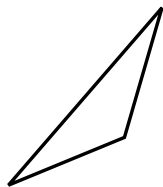
7. \_\_\_\_\_

8. \_\_\_\_\_


7)



8)



9)



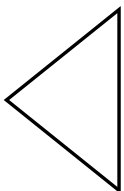
9. \_\_\_\_\_

10. \_\_\_\_\_

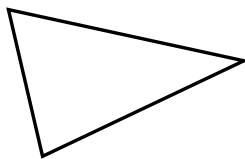
11. \_\_\_\_\_

12. \_\_\_\_\_

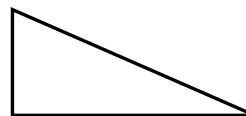
10)



11)



12)

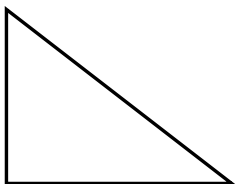


13. \_\_\_\_\_

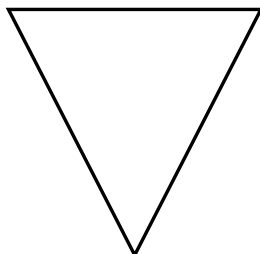
14. \_\_\_\_\_

15. \_\_\_\_\_

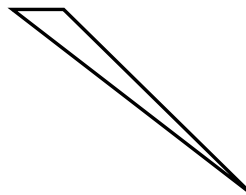
13)



14)



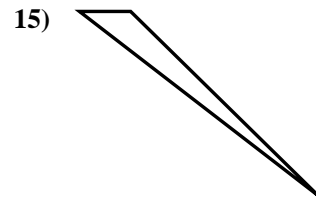
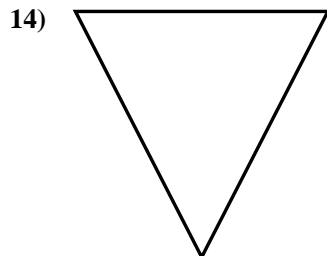
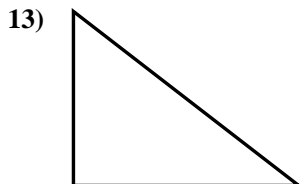
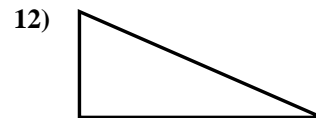
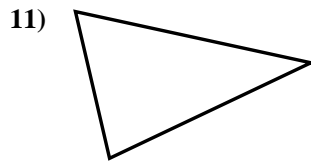
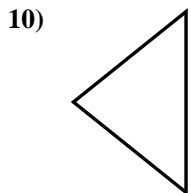
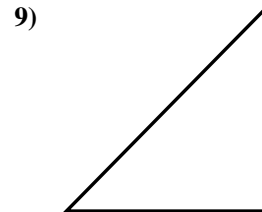
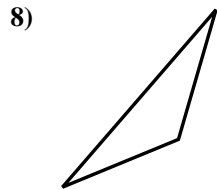
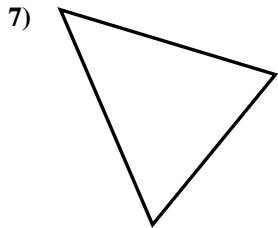
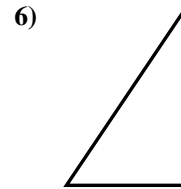
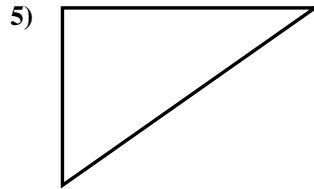
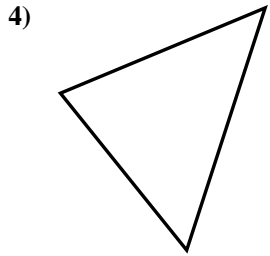
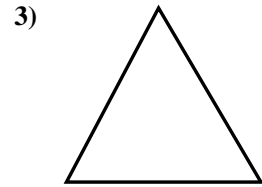
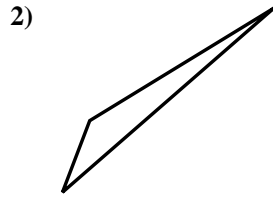
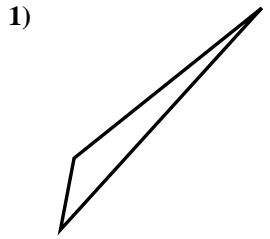
15)





Determinar si el triángulo mostrado es un triángulo recto (si) o no (no).

**Respuestas**



1. no

2. no

3. no

4. no

5. si

6. si

7. no

8. no

9. si

10. no

11. no

12. si

13. si

14. no

15. no