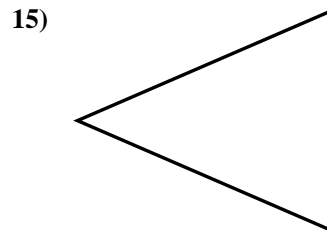
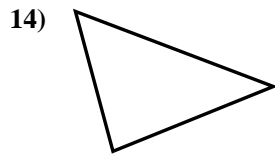
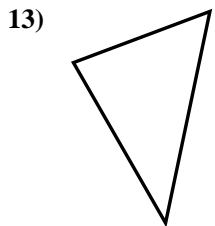
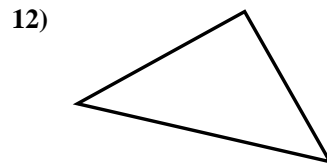
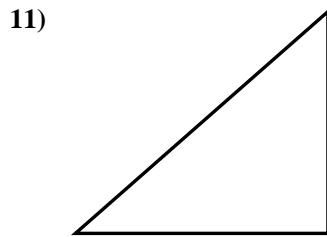
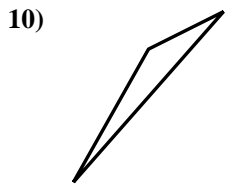
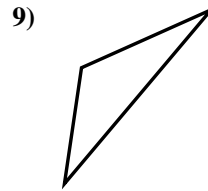
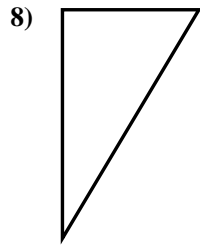
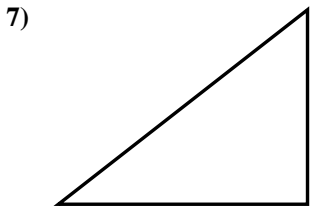
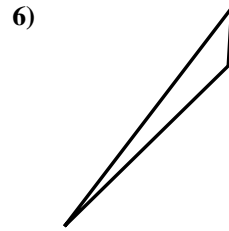
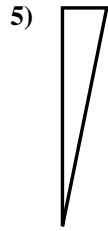
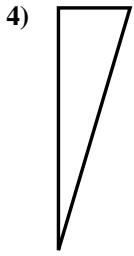
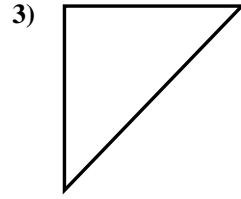
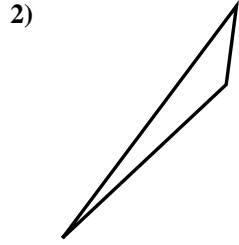
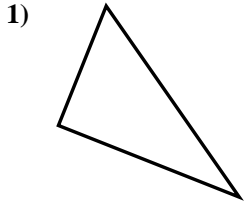




Determinar si el triángulo mostrado es un triángulo recto (si) o no (no).

Respuestas

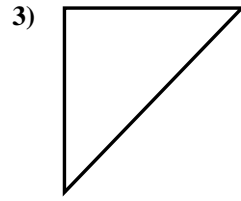
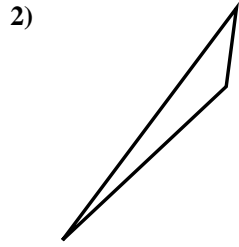
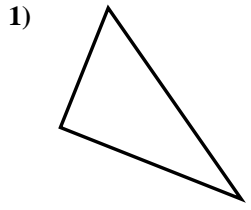


- 1. _____
- 2. _____
- 3. _____
- 4. _____
- 5. _____
- 6. _____
- 7. _____
- 8. _____
- 9. _____
- 10. _____
- 11. _____
- 12. _____
- 13. _____
- 14. _____
- 15. _____

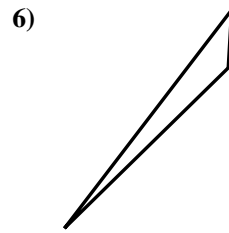
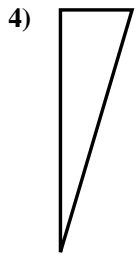


Determinar si el triángulo mostrado es un triángulo recto (si) o no (no).

Respuestas



1. si



2. no

3. si

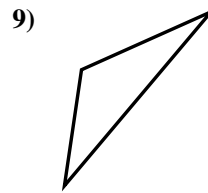
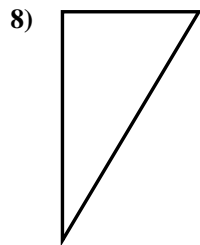
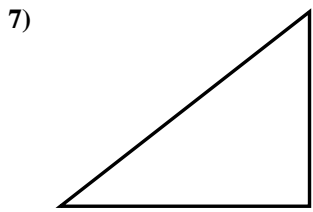
4. si

5. si

6. no

7. si

8. si

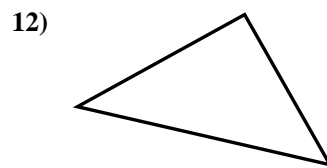
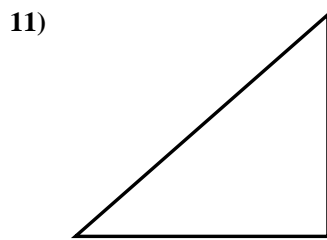
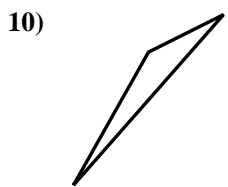


9. no

10. no

11. si

12. si



13. no

14. no

15. no

