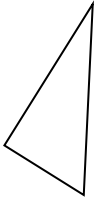


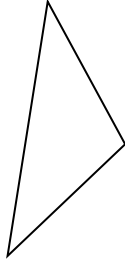


Determinar si la forma mostrada es un 'Triángulo', 'Cuadrado', 'Rectángulo', 'Hexágono' u 'Otro'.

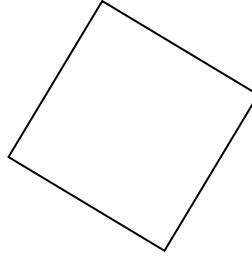
1)



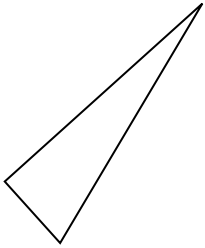
2)



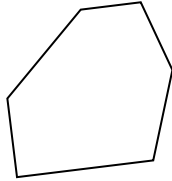
3)



4)



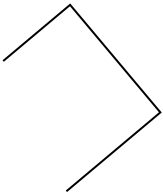
5)




6)



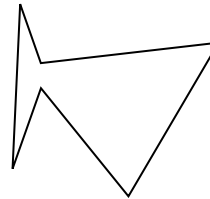
7)




8)



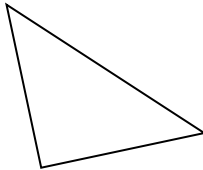
9)



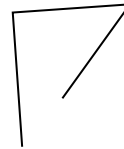
10)



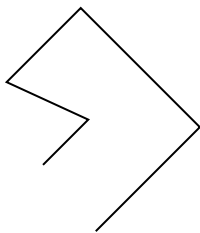
11)



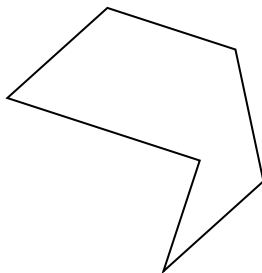
12)



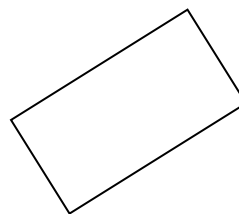
13)



14)



15)



Respuestas

1. _____

2. _____

3. _____

4. _____

5. _____

6. _____

7. _____

8. _____

9. _____

10. _____

11. _____

12. _____

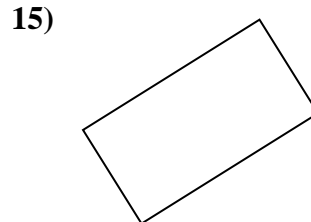
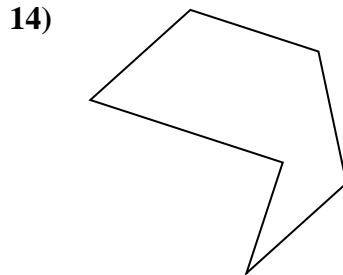
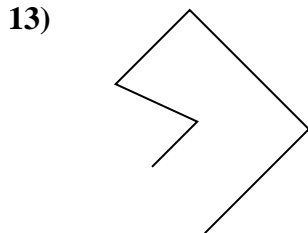
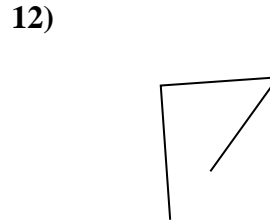
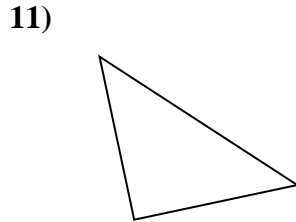
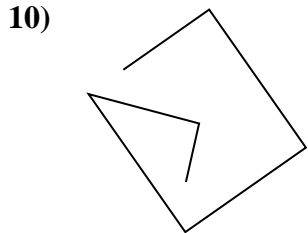
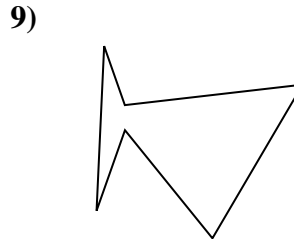
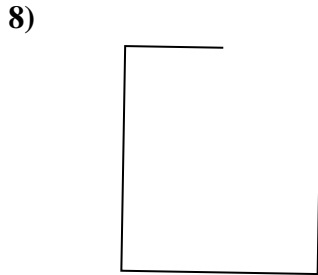
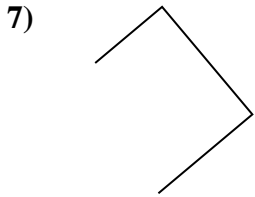

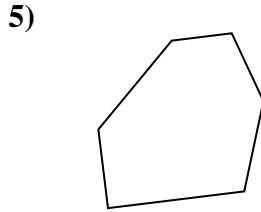
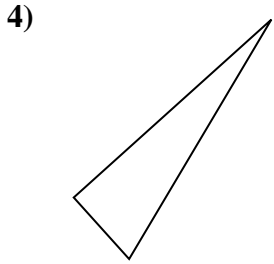
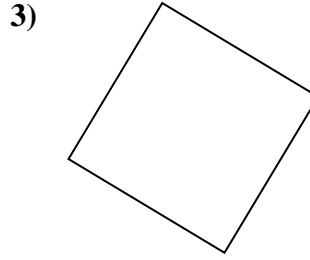
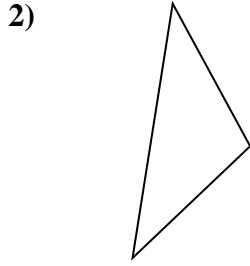
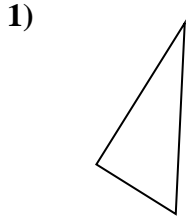
13. _____

14. _____

15. _____



Determinar si la forma mostrada es un 'Triángulo', 'Cuadrado', 'Rectángulo', 'Hexágono' u 'Otro'.



Respuestas

1. triangle

2. triangle

3. square

4. triangle

5. hexágono

6. Otra

7. Otra

8. Otra

9. hexágono

10. Otra

11. triangle

12. Otra

13. Otra

14. hexágono

15. rectangle