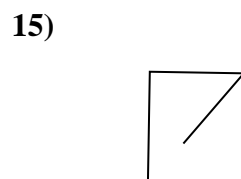
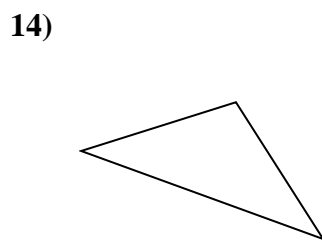
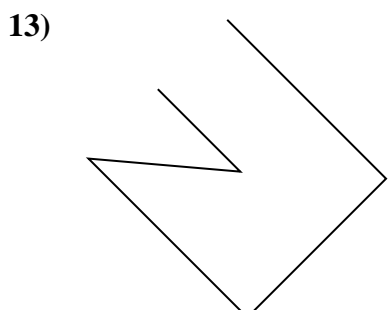
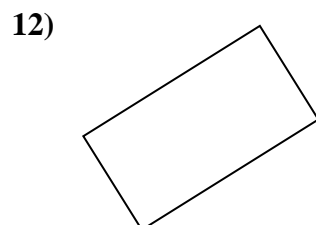
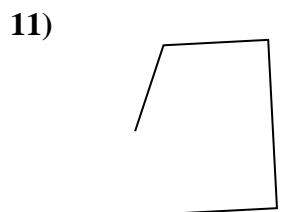
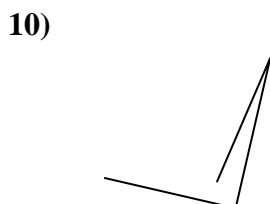

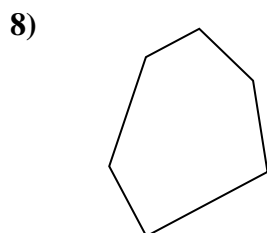
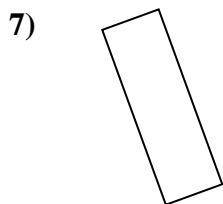
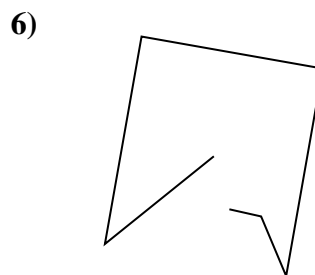
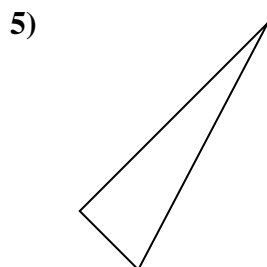
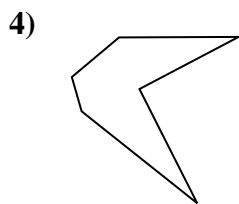
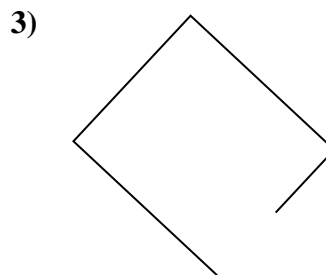
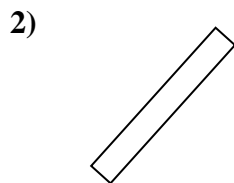
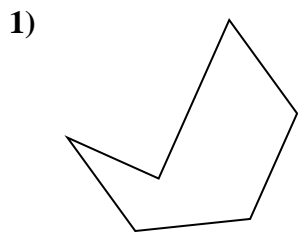




Determinar si la forma mostrada es un 'Triángulo', 'Cuadrado', 'Rectángulo', 'Hexágono' u 'Otro'.

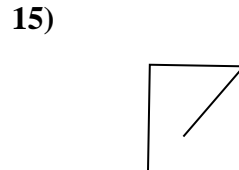
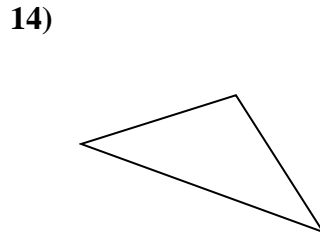
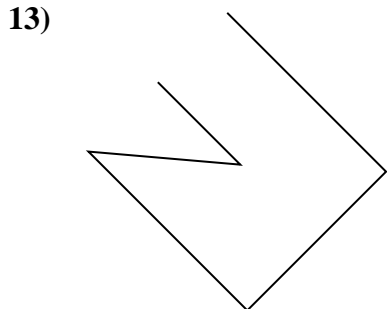
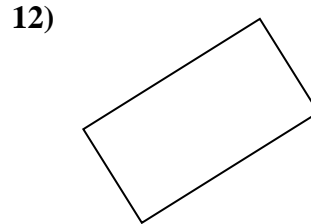
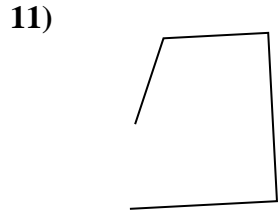
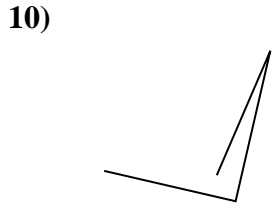

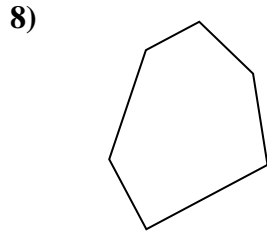
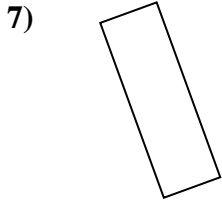
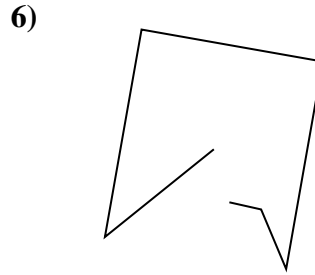
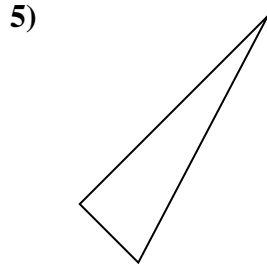
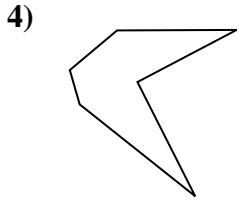
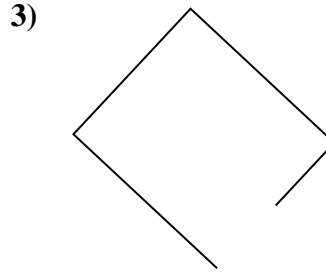
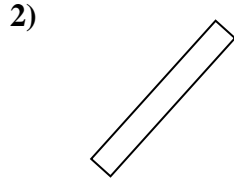
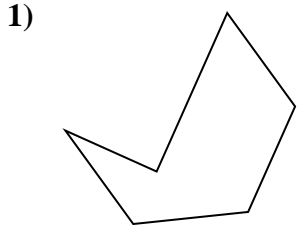


**Respuestas**

- 1. \_\_\_\_\_
- 2. \_\_\_\_\_
- 3. \_\_\_\_\_
- 4. \_\_\_\_\_
- 5. \_\_\_\_\_
- 6. \_\_\_\_\_
- 7. \_\_\_\_\_
- 8. \_\_\_\_\_
- 9. \_\_\_\_\_
- 10. \_\_\_\_\_
- 11. \_\_\_\_\_
- 12. \_\_\_\_\_
- 13. \_\_\_\_\_
- 14. \_\_\_\_\_
- 15. \_\_\_\_\_



Determinar si la forma mostrada es un 'Triángulo', 'Cuadrado', 'Rectángulo', 'Hexágono' u 'Otro'.



Respuestas

1. hexágono

2. rectangle

3. Otra

4. hexágono

5. triangle

6. Otra

7. rectangle

8. hexágono

9. triangle

10. Otra

11. Otra

12. rectangle

13. Otra

14. triangle

15. Otra