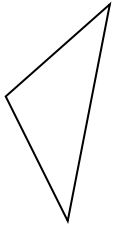


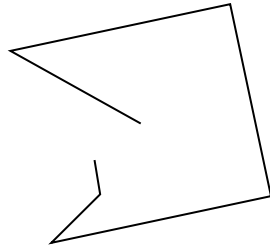


Determinar si la forma mostrada es un 'Triángulo', 'Cuadrado', 'Rectángulo', 'Hexágono' u 'Otro'.

1)



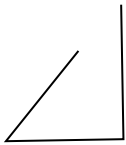
2)



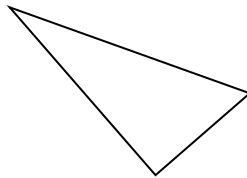
3)



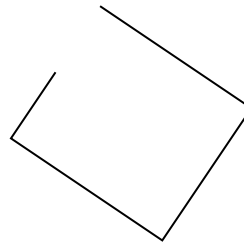
4)



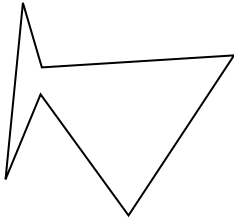
5)



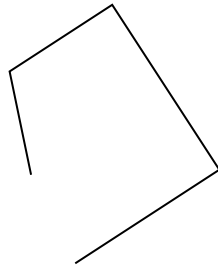
6)




7)




8)



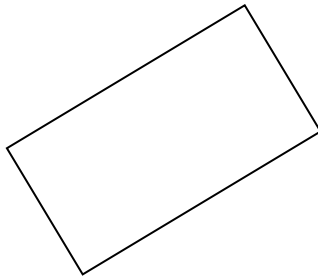
9)




10)



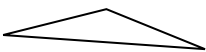
11)




12)



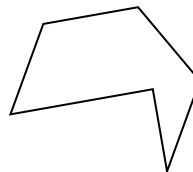
13)



14)



15)



Respuestas

1. _____

2. _____

3. _____

4. _____

5. _____

6. _____

7. _____

8. _____

9. _____

10. _____

11. _____

12. _____

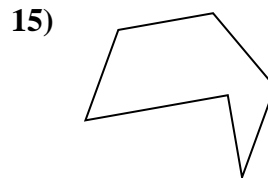
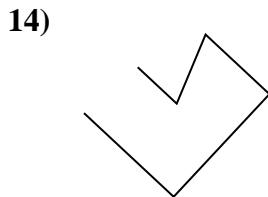
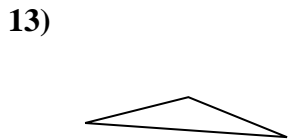
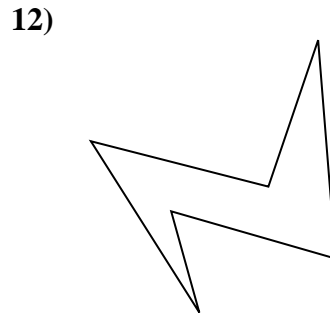
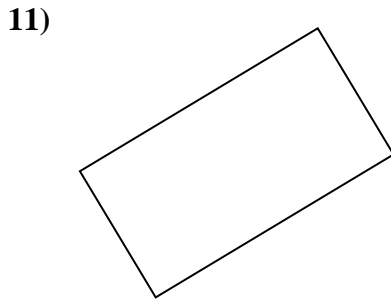
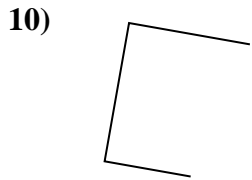
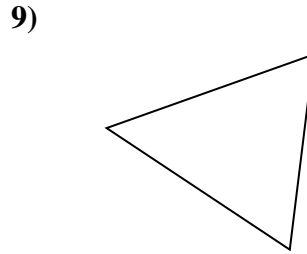
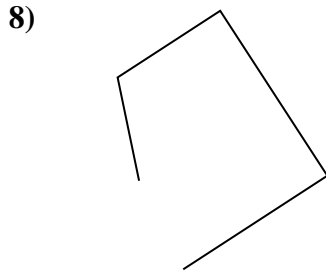
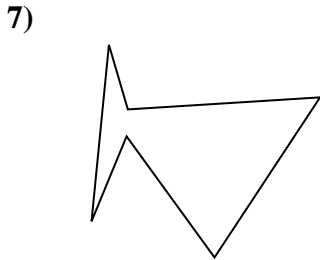
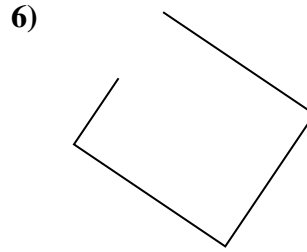
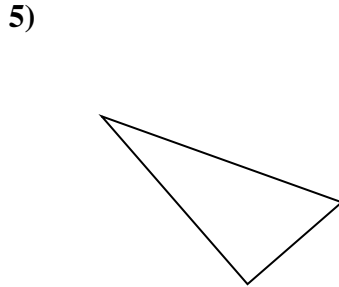
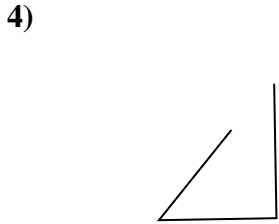
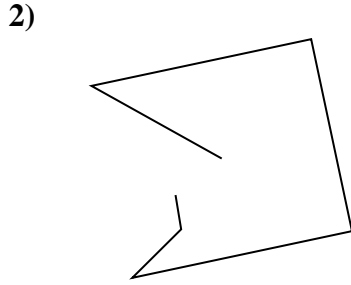
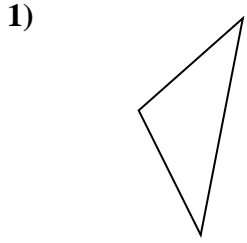
13. _____

14. _____

15. _____



Determinar si la forma mostrada es un 'Triángulo', 'Cuadrado', 'Rectángulo', 'Hexágono' u 'Otro'.



Respuestas

1. triangle

2. Otra

3. Otra

4. Otra

5. triangle

6. Otra

7. hexágono

8. Otra

9. triangle

10. Otra

11. rectangle

12. hexágono

13. triangle

14. Otra

15. hexágono