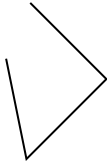


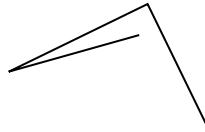


Determinar si la forma mostrada es un 'Triángulo', 'Cuadrado', 'Rectángulo', 'Hexágono' u 'Otro'.

1)



2)



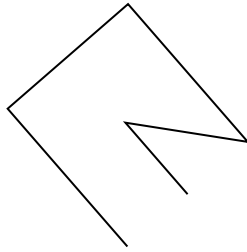
3)



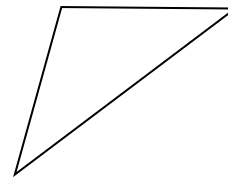
4)



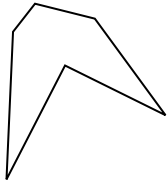
5)



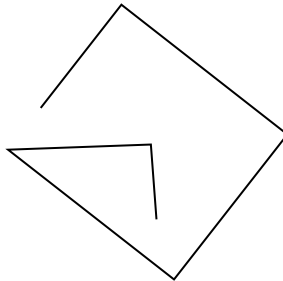
6)




7)




8)



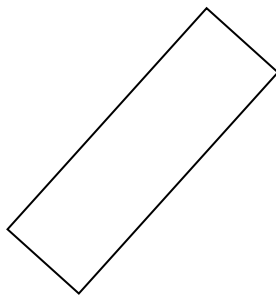
9)



10)



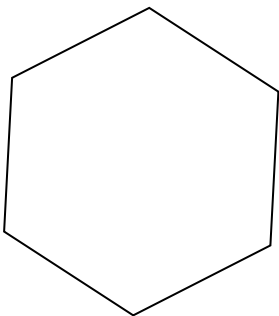
11)



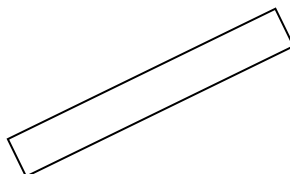
12)



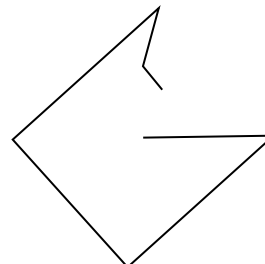
13)



14)



15)

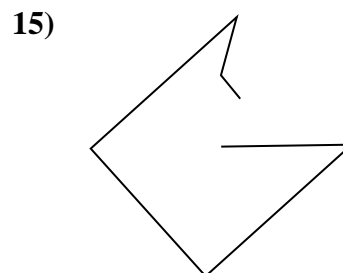
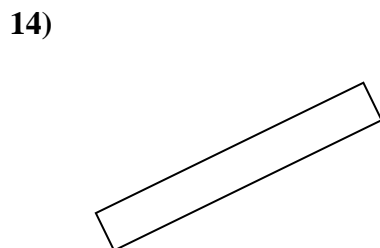
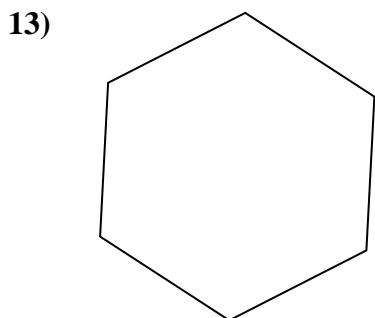
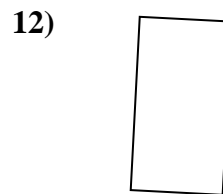
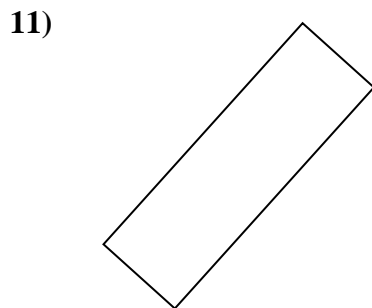
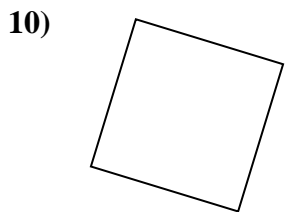
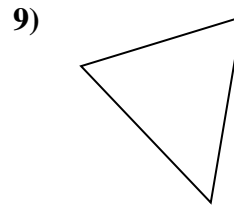
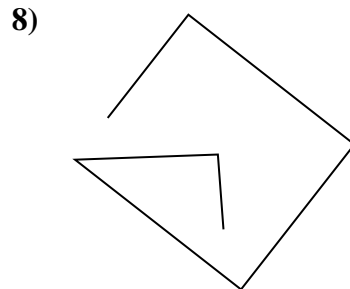
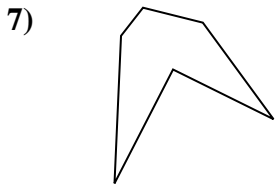
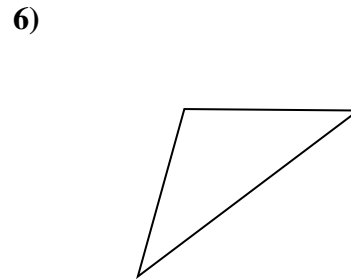
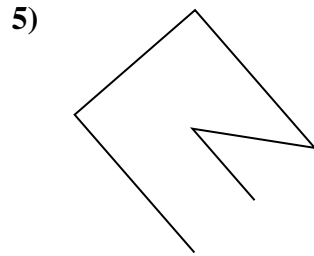
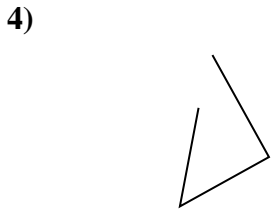
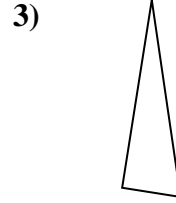
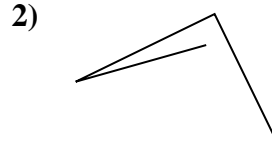



Respuestas

- 1. _____
- 2. _____
- 3. _____
- 4. _____
- 5. _____
- 6. _____
- 7. _____
- 8. _____
- 9. _____
- 10. _____
- 11. _____
- 12. _____
- 13. _____
- 14. _____
- 15. _____



Determinar si la forma mostrada es un 'Triángulo', 'Cuadrado', 'Rectángulo', 'Hexágono' u 'Otro'.



Respuestas

1. Otra

2. Otra

3. triangle

4. Otra

5. Otra

6. triangle

7. hexágono

8. Otra

9. triangle

10. square

11. rectangle

12. rectangle

13. hexágono

14. rectangle

15. Otra