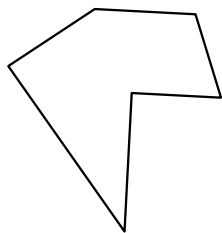





Identificar el tipo de figura mostrada.

Respuestas

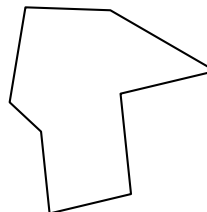
1)



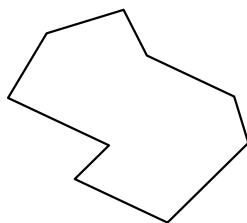
2)



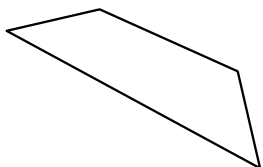
3)



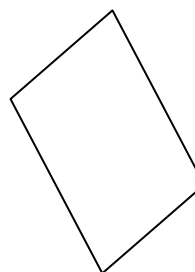
4)




5)



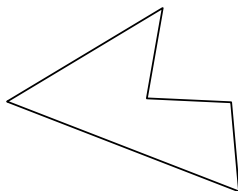
6)




7)



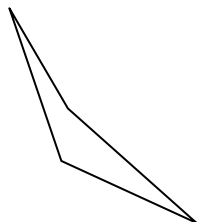
8)



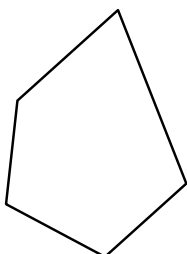
9)



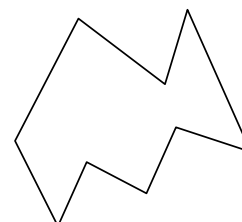
10)



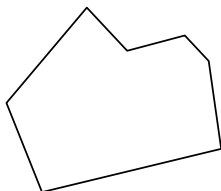
11)



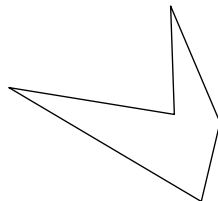
12)



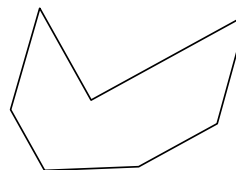
13)




14)



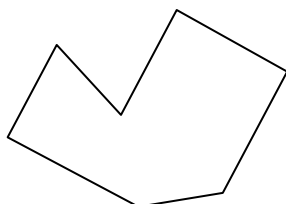
15)



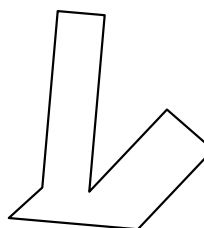
16)



17)



18)



1. _____

2. _____

3. _____

4. _____

5. _____

6. _____

7. _____

8. _____

9. _____

10. _____

11. _____

12. _____

13. _____

14. _____

15. _____

16. _____

17. _____

18. _____

19. _____

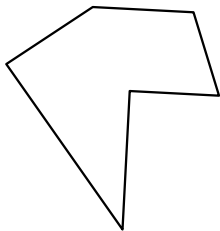
20. _____

21. _____




Identificar el tipo de figura mostrada.

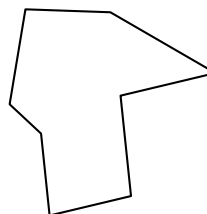
1)



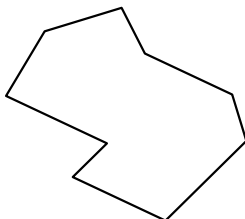
2)



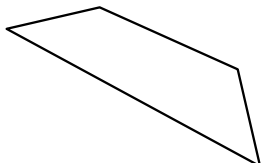
3)



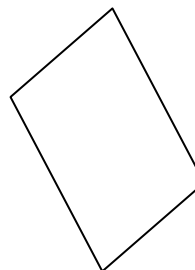
4)




5)



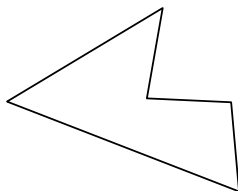
6)




7)



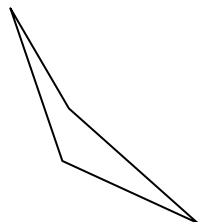
8)



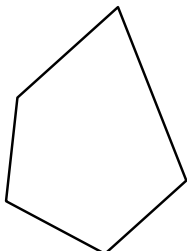
9)



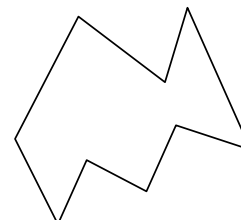
10)



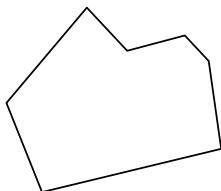
11)



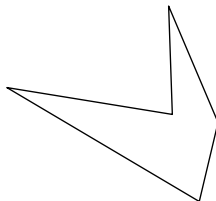
12)



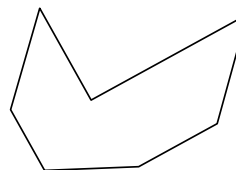
13)



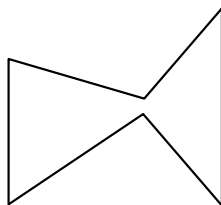
14)



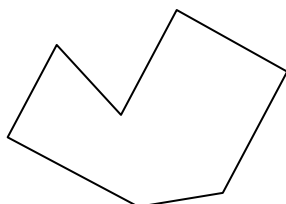
15)



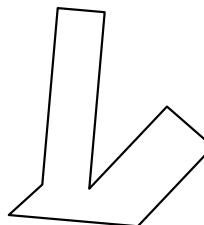
16)



17)



18)



Respuestas

1. hexágono

2. nonagono

3. octágonos

4. nonagono

5. cuadrilátero

6. cuadrilátero

7. cuadrilátero

8. pentágono

9. heptágono

10. cuadrilátero

11. pentágono

12. nonagono

13. heptágono

14. pentágono

15. heptágono

16. hexágono

17. heptágono

18. octágonos

19. octágonos

20. heptágono

21. octágonos