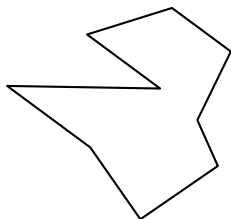




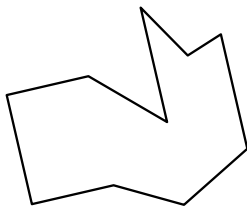
Identificar el tipo de figura mostrada.

Respuestas

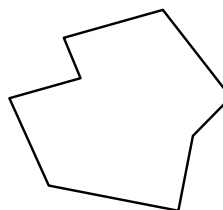
1)



2)

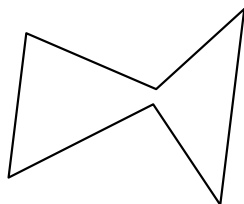


3)

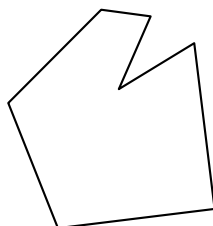


1. _____

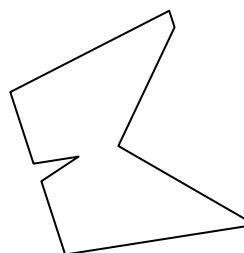
4)



5)

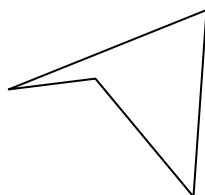


6)

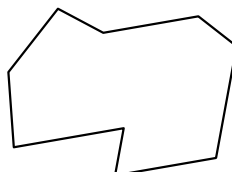


2. _____

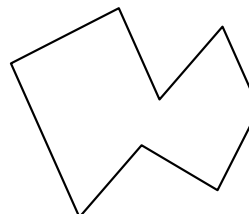
7)



8)




9)

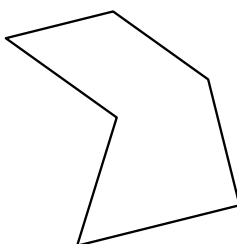


3. _____

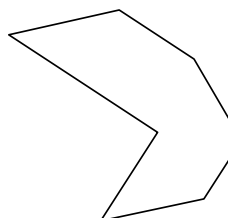
10)



11)

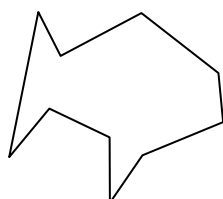


12)

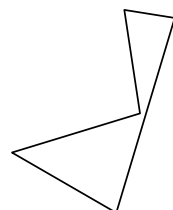


4. _____


13)



14)

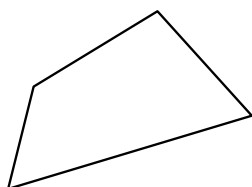


15)

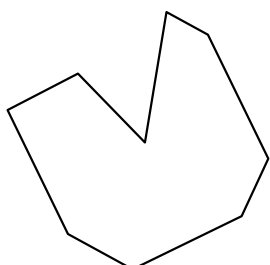


5. _____

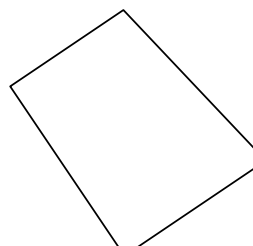
16)



17)



18)



6. _____

7. _____

8. _____

9. _____

10. _____

11. _____

12. _____

13. _____

14. _____

15. _____

16. _____

17. _____

18. _____

19. _____

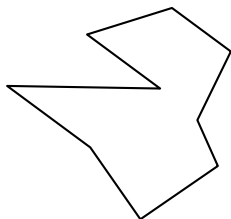
20. _____

21. _____

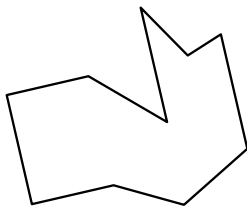


Identificar el tipo de figura mostrada.

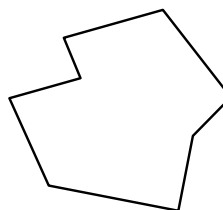
1)



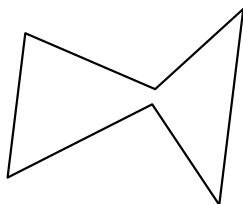
2)



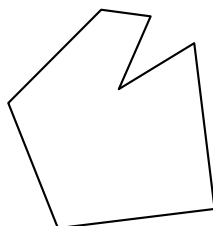
3)



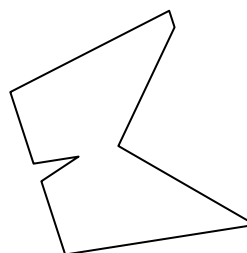
4)



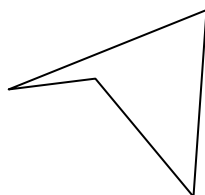
5)



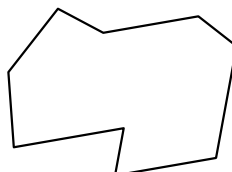
6)



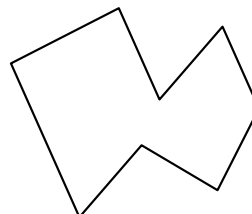
7)




8)



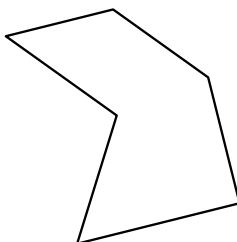
9)



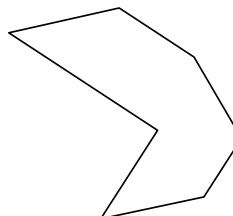
10)



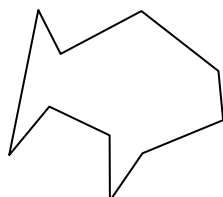
11)



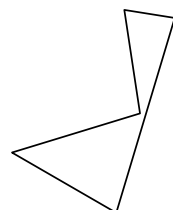
12)




13)



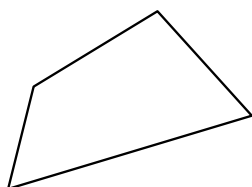
14)



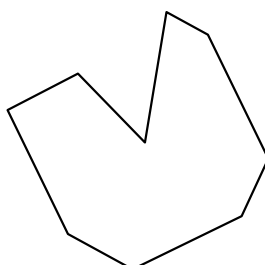
15)



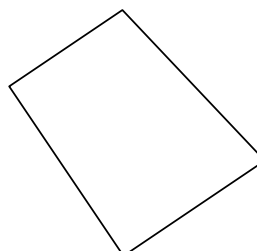
16)



17)



18)



Respuestas

1. nonagono

2. decágono

3. octágonos

4. hexágono

5. heptágono

6. nonagono

7. cuadrilátero

8. nonagono

9. octágonos

10. decágono

11. hexágono

12. heptágono

13. decágono

14. pentágono

15. hexágono

16. cuadrilátero

17. nonagono

18. cuadrilátero

19. cuadrilátero

20. cuadrilátero

21. hexágono