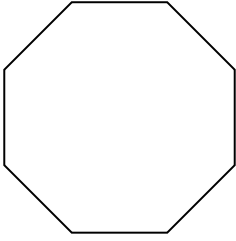


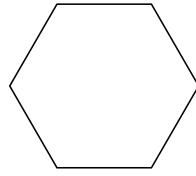


Identificar el tipo de figura mostrada.


1)



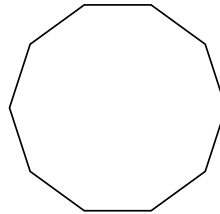
2)



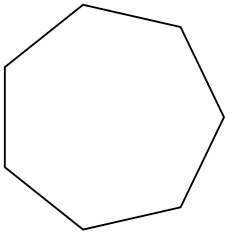
3)



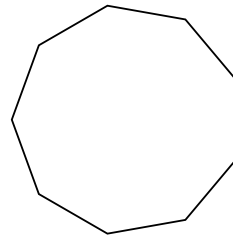
4)



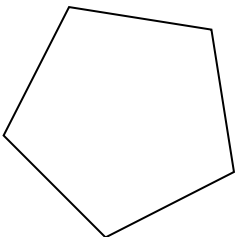
5)



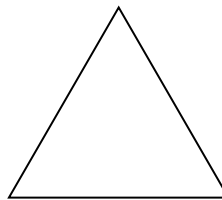
6)



7)



8)



**Respuestas**

1. \_\_\_\_\_

2. \_\_\_\_\_

3. \_\_\_\_\_

4. \_\_\_\_\_

5. \_\_\_\_\_

6. \_\_\_\_\_

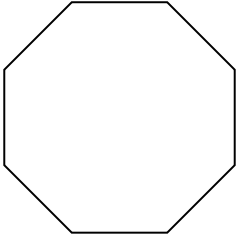
7. \_\_\_\_\_

8. \_\_\_\_\_

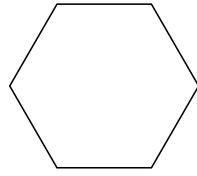


Identificar el tipo de figura mostrada.


1)



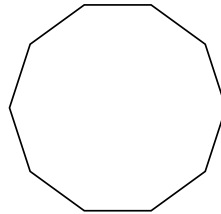
2)



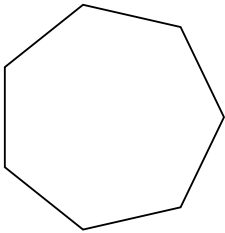
3)



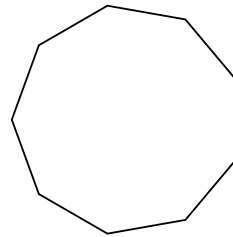
4)



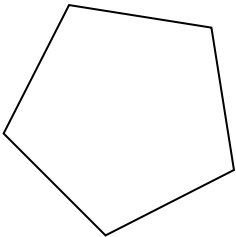
5)



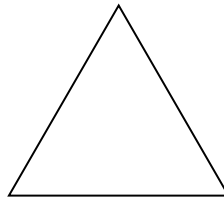
6)



7)



8)



**Respuestas**

1. **octágonos**

2. **hexágono**

3. **cuadrilátero**

4. **decágono**

5. **heptágono**

6. **nonagono**

7. **pentágono**

8. **triangle**