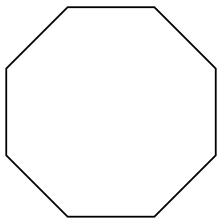


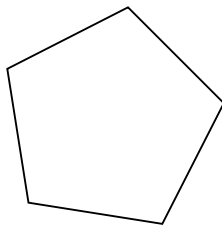


Identificar el tipo de figura mostrada.

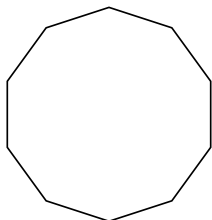
1)



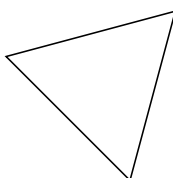
2)



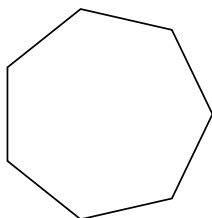
3)



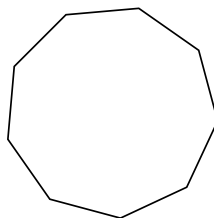
4)



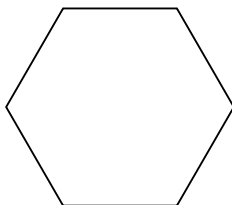
5)



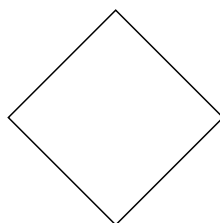
6)



7)



8)



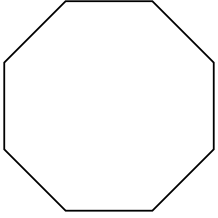
**Respuestas**

- 1. \_\_\_\_\_
- 2. \_\_\_\_\_
- 3. \_\_\_\_\_
- 4. \_\_\_\_\_
- 5. \_\_\_\_\_
- 6. \_\_\_\_\_
- 7. \_\_\_\_\_
- 8. \_\_\_\_\_

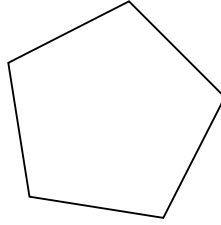


Identificar el tipo de figura mostrada.

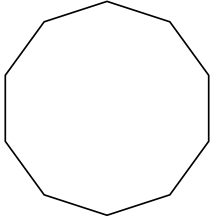
1)




2)



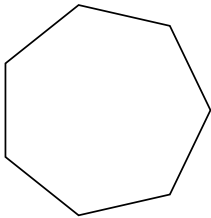
3)



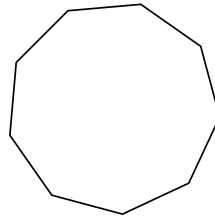
4)



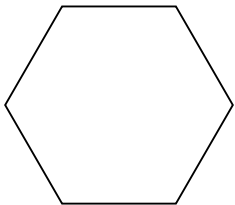
5)



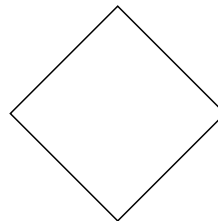
6)



7)



8)



**Respuestas**

1. **octágonos**

2. **pentágono**

3. **decágono**

4. **triangle**

5. **heptágono**

6. **nonagono**

7. **hexágono**

8. **cuadrilátero**