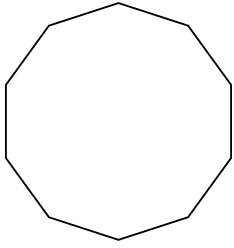


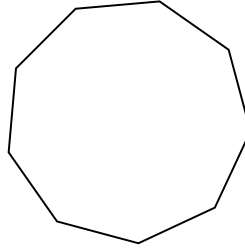


Identificar el tipo de figura mostrada.

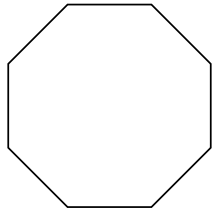
1)



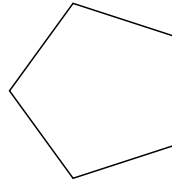
2)



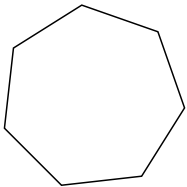
3)



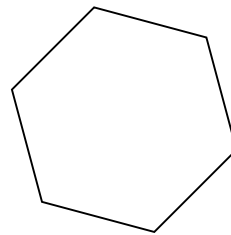
4)




5)




6)



7)



8)



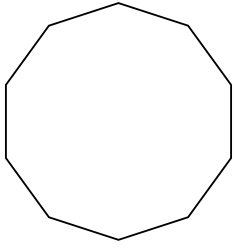
Respuestas

- 1. _____
- 2. _____
- 3. _____
- 4. _____
- 5. _____
- 6. _____
- 7. _____
- 8. _____

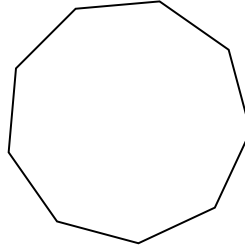


Identificar el tipo de figura mostrada.

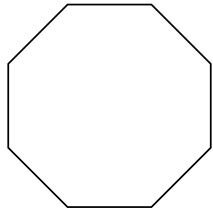
1)



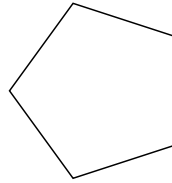
2)



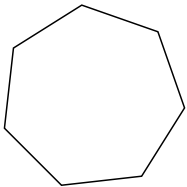
3)



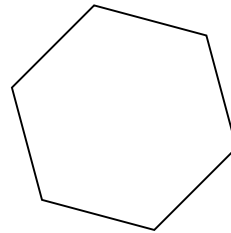
4)




5)




6)



7)



8)



Respuestas

1. decágono

2. nonagono

3. octágonos

4. pentágono

5. heptágono

6. hexágono

7. triangle

8. cuadrilátero