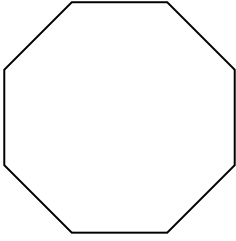


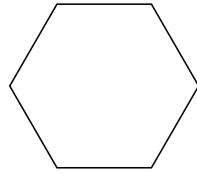


Identificar el tipo de figura mostrada.


1)



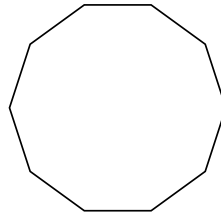
2)



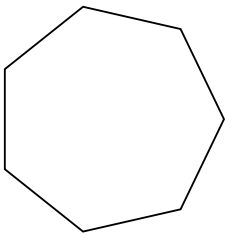
3)



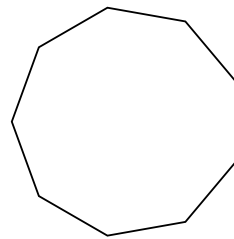
4)



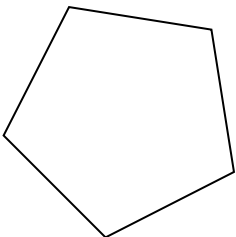
5)



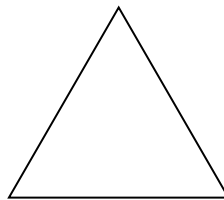
6)



7)



8)



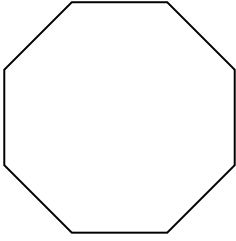
Respuestas

- 1. _____
- 2. _____
- 3. _____
- 4. _____
- 5. _____
- 6. _____
- 7. _____
- 8. _____

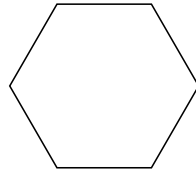


Identificar el tipo de figura mostrada.


1)



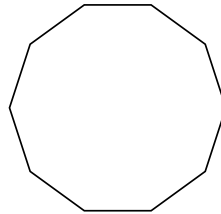
2)



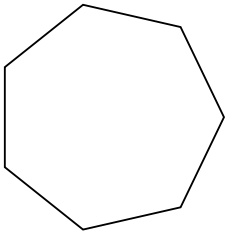
3)



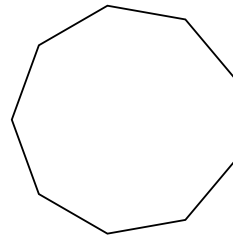
4)



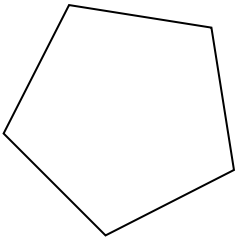
5)



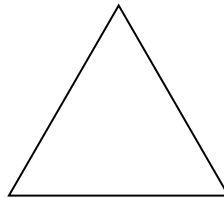
6)



7)



8)



Respuestas

1. **octágonos**

2. **hexágono**

3. **cuadrilátero**

4. **decágono**

5. **heptágono**

6. **nonagono**

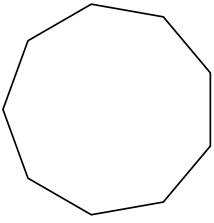
7. **pentágono**

8. **triangle**

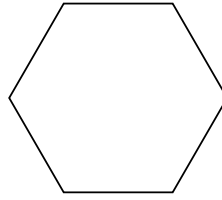


Identificar el tipo de figura mostrada.

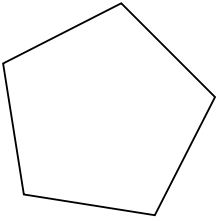
1)



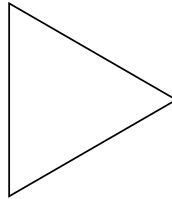
2)




3)



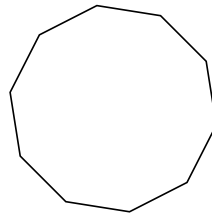
4)



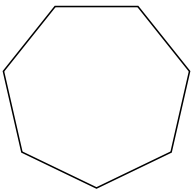
5)



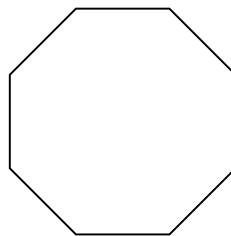
6)



7)



8)



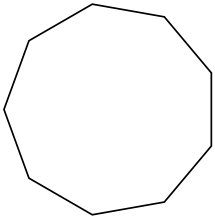
Respuestas

- 1. _____
- 2. _____
- 3. _____
- 4. _____
- 5. _____
- 6. _____
- 7. _____
- 8. _____

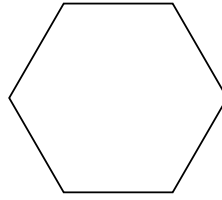


Identificar el tipo de figura mostrada.

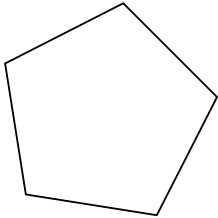
1)



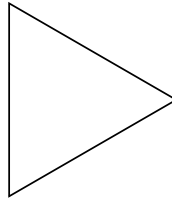
2)




3)



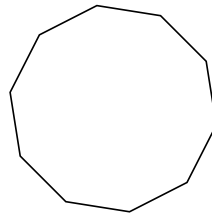
4)



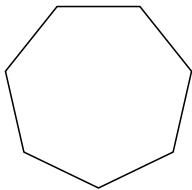
5)



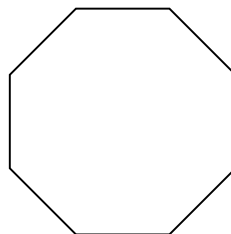
6)



7)



8)



Respuestas

1. **nonagono**

2. **hexágono**

3. **pentágono**

4. **triangle**

5. **cuadrilátero**

6. **decágono**

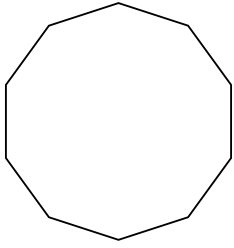
7. **heptágono**

8. **octágonos**

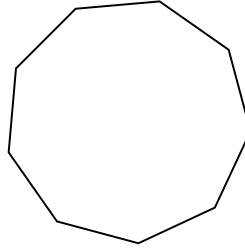


Identificar el tipo de figura mostrada.

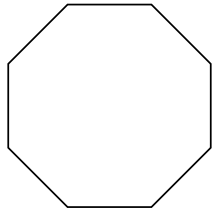
1)



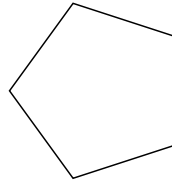
2)



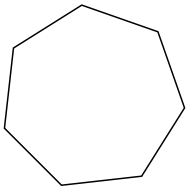
3)



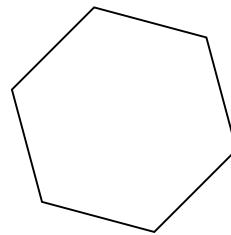
4)




5)




6)



7)



8)



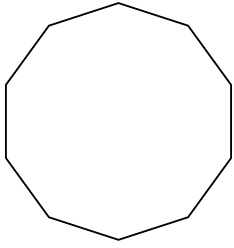
Respuestas

- 1. _____
- 2. _____
- 3. _____
- 4. _____
- 5. _____
- 6. _____
- 7. _____
- 8. _____

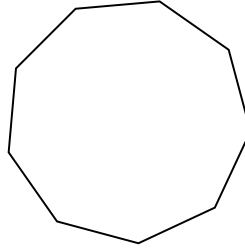


Identificar el tipo de figura mostrada.

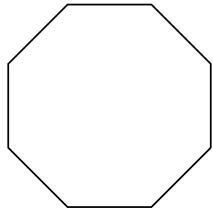
1)



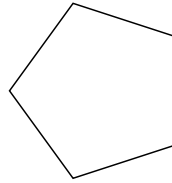
2)



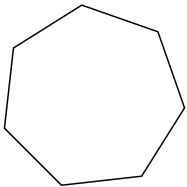
3)



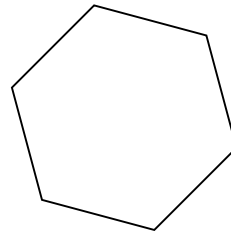
4)




5)




6)



7)



8)



Respuestas

1. decágono

2. nonagono

3. octágonos

4. pentágono

5. heptágono

6. hexágono

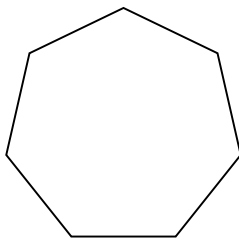
7. triangle

8. cuadrilátero

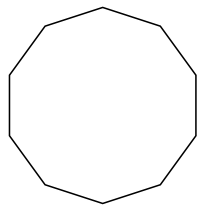


Identificar el tipo de figura mostrada.

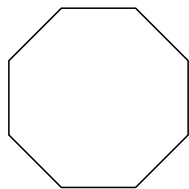
1)



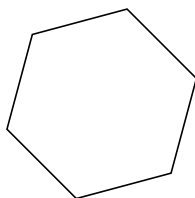
2)



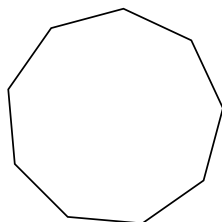
3)



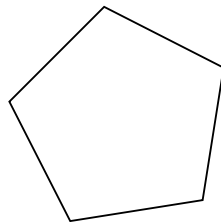
4)



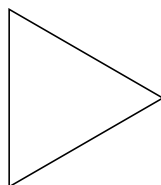
5)



6)



7)



8)



Respuestas

1. _____

2. _____

3. _____

4. _____

5. _____

6. _____

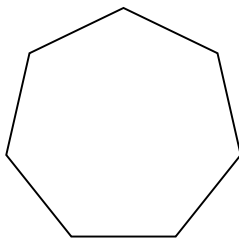
7. _____

8. _____

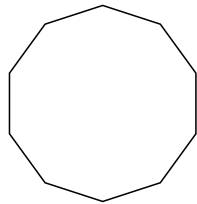


Identificar el tipo de figura mostrada.

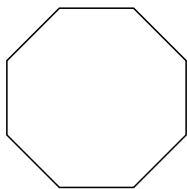
1)



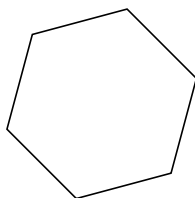
2)



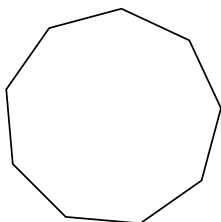
3)



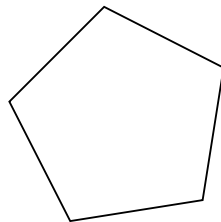
4)



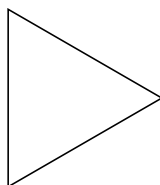
5)




6)



7)



8)



Respuestas

1. **heptágono**

2. **decágono**

3. **octágonos**

4. **hexágono**

5. **nonagono**

6. **pentágono**

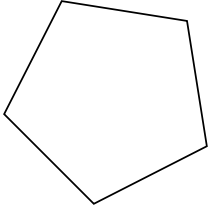
7. **triangle**

8. **cuadrilátero**

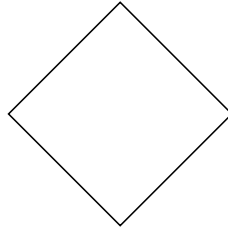


Identificar el tipo de figura mostrada.

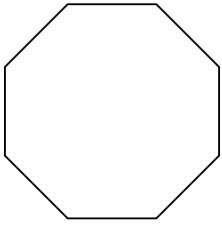
1)



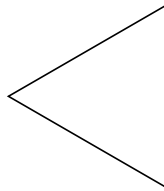
2)



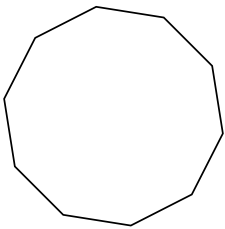
3)



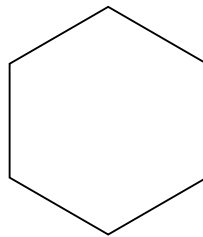
4)



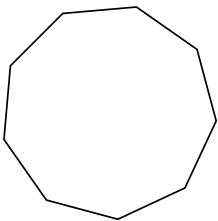
5)



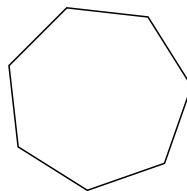
6)



7)



8)



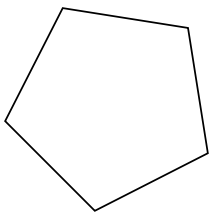
Respuestas

- 1. _____
- 2. _____
- 3. _____
- 4. _____
- 5. _____
- 6. _____
- 7. _____
- 8. _____

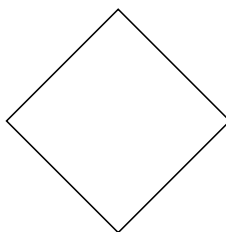


Identificar el tipo de figura mostrada.

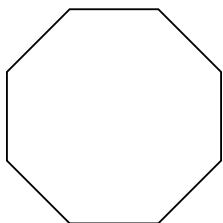
1)



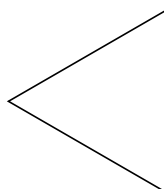
2)



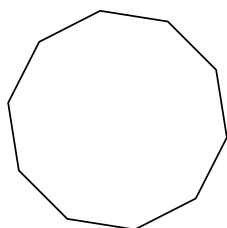
3)



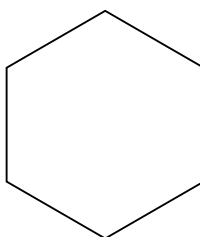
4)



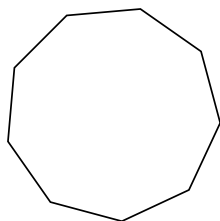
5)



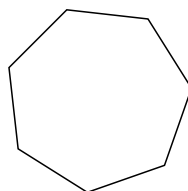
6)



7)



8)



Respuestas

1. pentágono

2. cuadrilátero

3. octágonos

4. triangle

5. decágono

6. hexágono

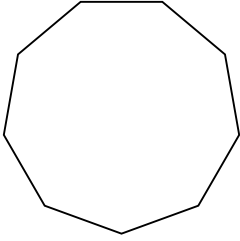
7. nonagono

8. heptágono

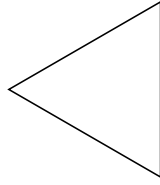


Identificar el tipo de figura mostrada.

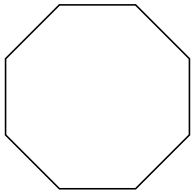
1)



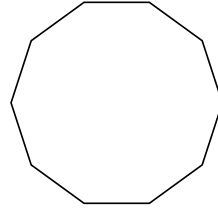
2)




3)



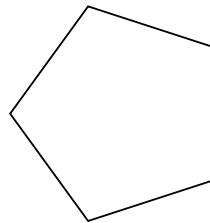
4)



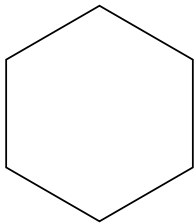
5)



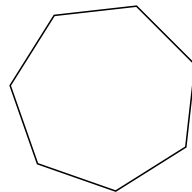
6)



7)



8)



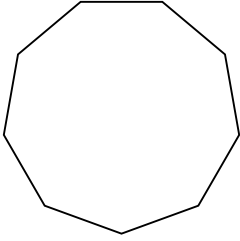
Respuestas

- 1. _____
- 2. _____
- 3. _____
- 4. _____
- 5. _____
- 6. _____
- 7. _____
- 8. _____

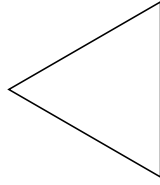


Identificar el tipo de figura mostrada.

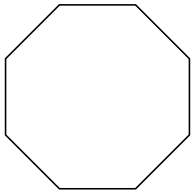
1)



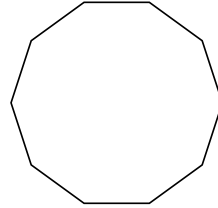
2)




3)



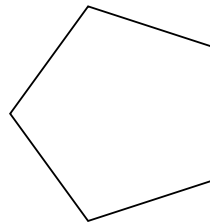
4)



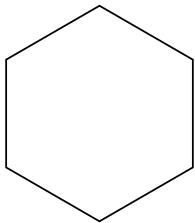
5)



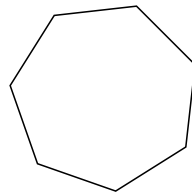
6)



7)



8)



Respuestas

1. **nonagono**

2. **triangle**

3. **octágonos**

4. **decágonos**

5. **cuadrilátero**

6. **pentágonos**

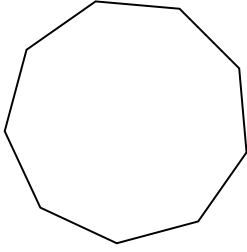
7. **hexágonos**

8. **heptágonos**

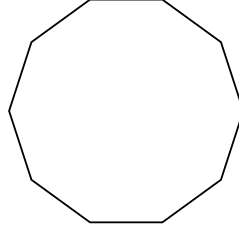


Identificar el tipo de figura mostrada.


1)



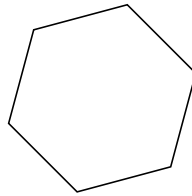
2)



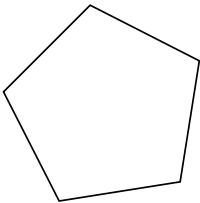
3)



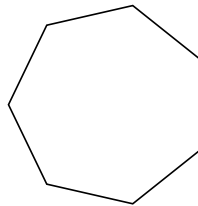
4)



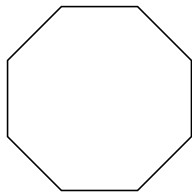
5)




6)



7)



8)



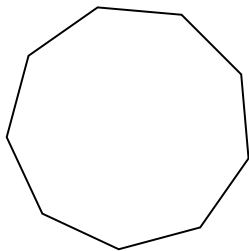
Respuestas

- 1. _____
- 2. _____
- 3. _____
- 4. _____
- 5. _____
- 6. _____
- 7. _____
- 8. _____

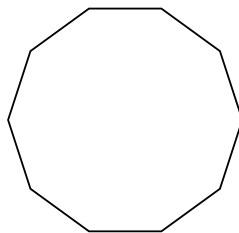


Identificar el tipo de figura mostrada.

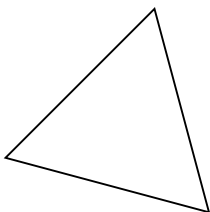
1)



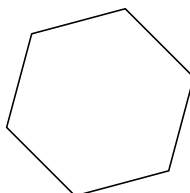
2)



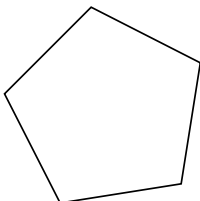
3)



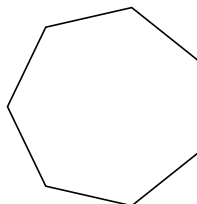
4)



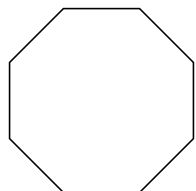
5)



6)



7)



8)



Respuestas

1. **nonagono**

2. **decágono**

3. **triangle**

4. **hexágono**

5. **pentágono**

6. **heptágono**

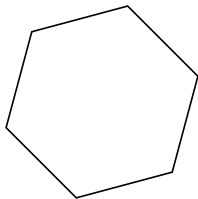
7. **octágonos**

8. **cuadrilátero**

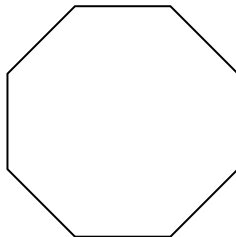


Identificar el tipo de figura mostrada.

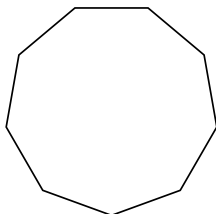
1)



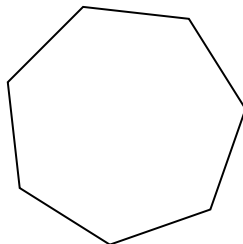
2)




3)



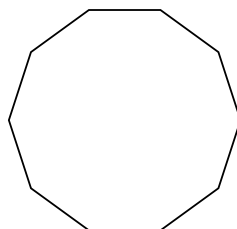
4)



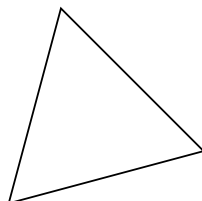
5)



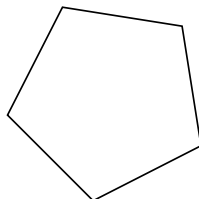
6)



7)



8)



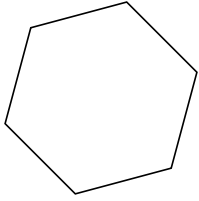
Respuestas

- 1. _____
- 2. _____
- 3. _____
- 4. _____
- 5. _____
- 6. _____
- 7. _____
- 8. _____

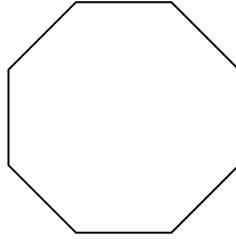


Identificar el tipo de figura mostrada.

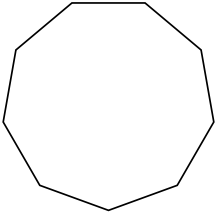
1)



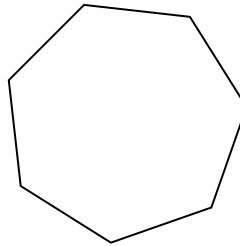
2)




3)



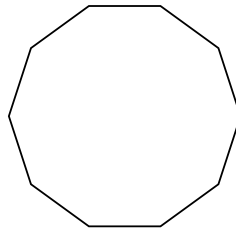
4)



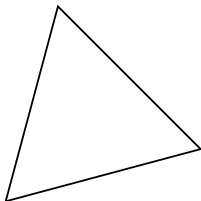
5)



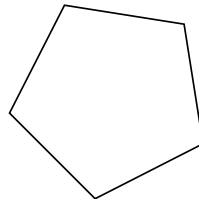
6)



7)



8)



Respuestas

1. **hexágono**

2. **octágonos**

3. **nonagono**

4. **heptágono**

5. **cuadrilátero**

6. **decágono**

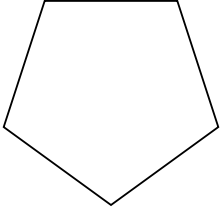
7. **triangle**

8. **pentágono**

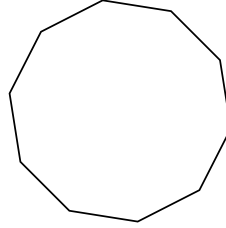


Identificar el tipo de figura mostrada.

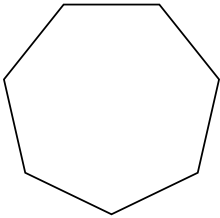
1)



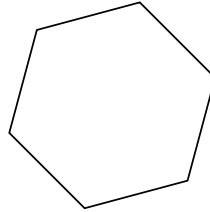
2)




3)



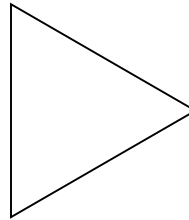
4)



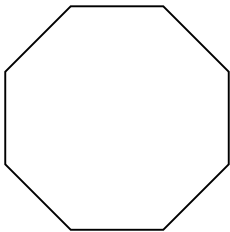
5)



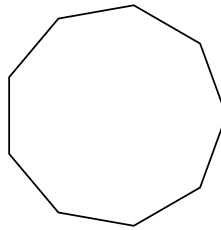
6)



7)



8)



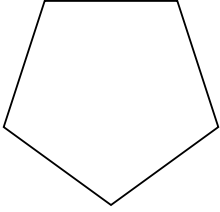
Respuestas

- 1. _____
- 2. _____
- 3. _____
- 4. _____
- 5. _____
- 6. _____
- 7. _____
- 8. _____

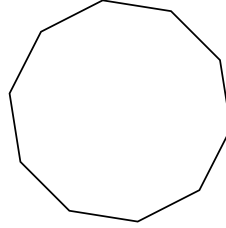


Identificar el tipo de figura mostrada.

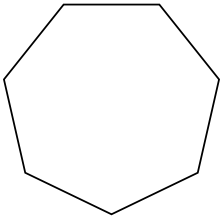
1)



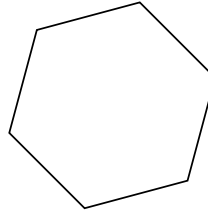
2)




3)



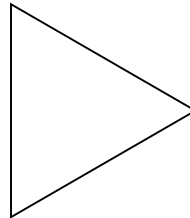
4)



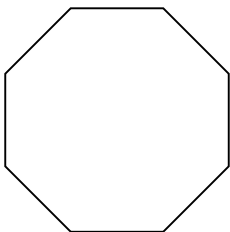
5)



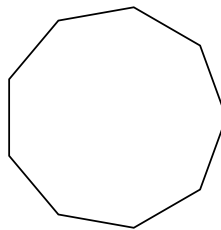
6)



7)



8)



Respuestas

1. pentágono

2. decágono

3. heptágono

4. hexágono

5. cuadrilátero

6. triangle

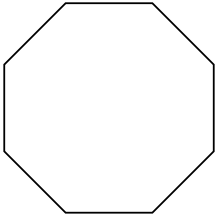
7. octágonos

8. nonagono

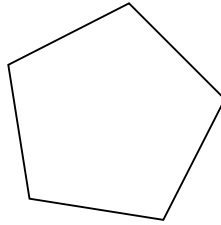


Identificar el tipo de figura mostrada.

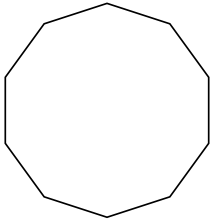
1)




2)



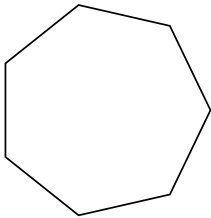
3)



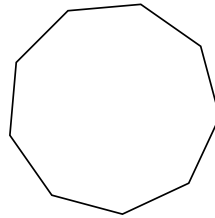
4)



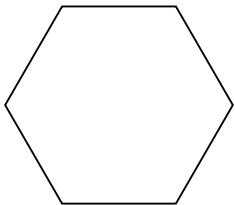
5)



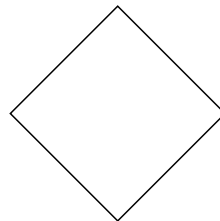
6)



7)



8)



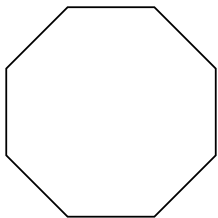
Respuestas

- 1. _____
- 2. _____
- 3. _____
- 4. _____
- 5. _____
- 6. _____
- 7. _____
- 8. _____

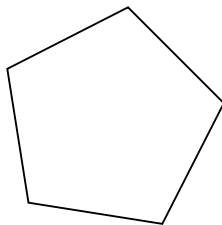


Identificar el tipo de figura mostrada.

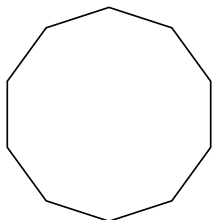
1)



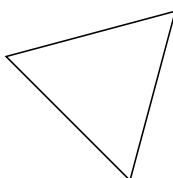
2)



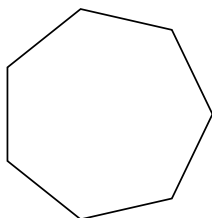
3)



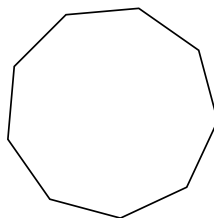
4)



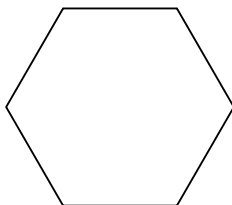
5)



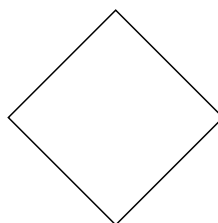
6)



7)



8)



Respuestas

1. **octágonos**

2. **pentágono**

3. **decágono**

4. **triangle**

5. **heptágono**

6. **nonagono**

7. **hexágono**

8. **cuadrilátero**