




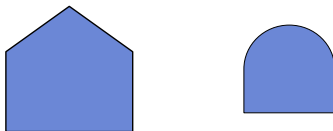
Determina si las figuras que se muestran son 'similares', 'congruentes' o 'ninguna'.

**Respuestas**

1)



2)



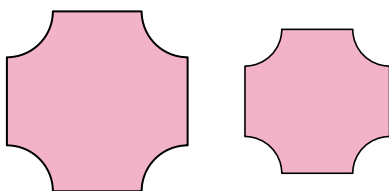
3)



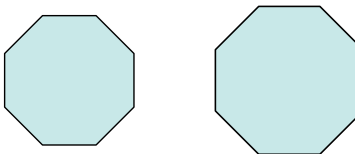
4)




5)



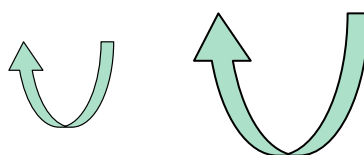
6)



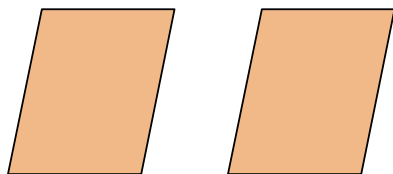
7)



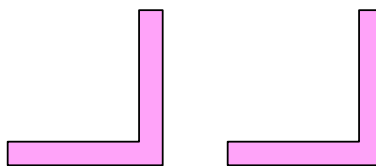
8)



9)



10)



11)



12)



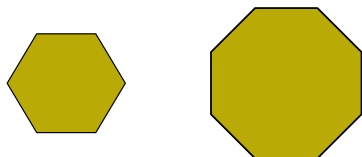
13)



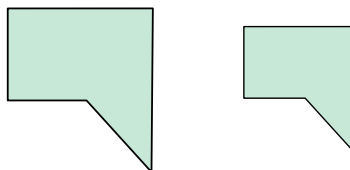
14)



15)



16)



1. \_\_\_\_\_
2. \_\_\_\_\_
3. \_\_\_\_\_
4. \_\_\_\_\_
5. \_\_\_\_\_
6. \_\_\_\_\_
7. \_\_\_\_\_
8. \_\_\_\_\_
9. \_\_\_\_\_
10. \_\_\_\_\_
11. \_\_\_\_\_
12. \_\_\_\_\_
13. \_\_\_\_\_
14. \_\_\_\_\_
15. \_\_\_\_\_
16. \_\_\_\_\_



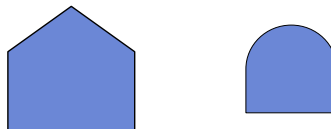
Determina si las figuras que se muestran son 'similares', 'congruentes' o 'ninguna'.

**Respuestas**

1)



2)



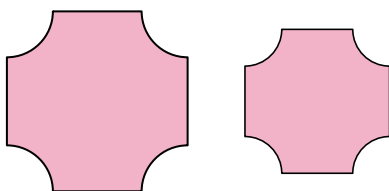
3)



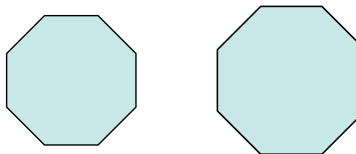
4)




5)



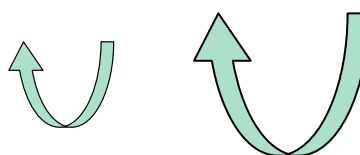
6)



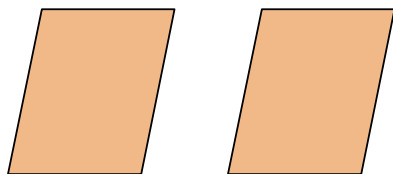
7)



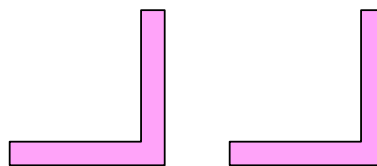
8)



9)



10)



11)



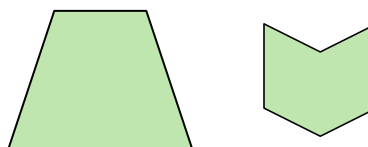
12)



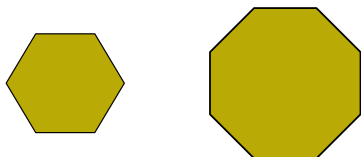
13)



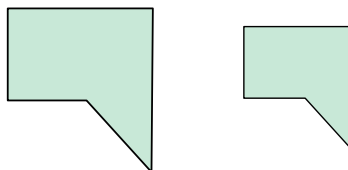
14)



15)



16)



1. congruente

2. ninguno

3. congruente

4. similar

5. similar

6. similar

7. similar

8. similar

9. congruente

10. congruente

11. congruente

12. ninguno

13. congruente

14. ninguno

15. ninguno

16. similar