




Determina si las figuras que se muestran son 'similares', 'congruentes' o 'ninguna'.

**Respuestas**

1)



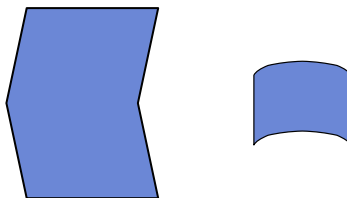
2)



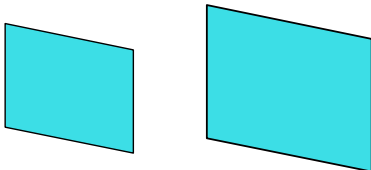
3)



4)



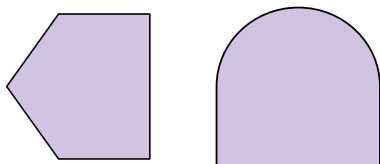
5)



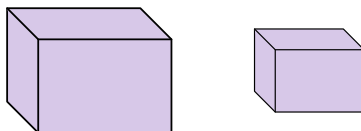
6)



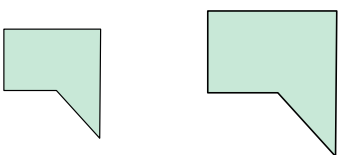
7)



8)



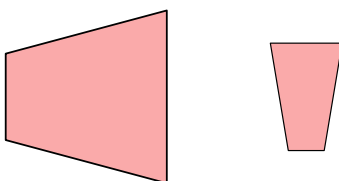
9)




10)



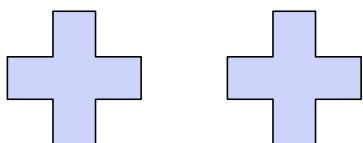
11)



12)



13)



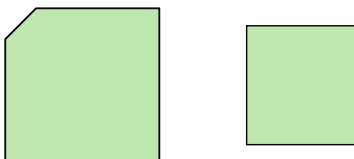
14)



15)



16)



1. \_\_\_\_\_
2. \_\_\_\_\_
3. \_\_\_\_\_
4. \_\_\_\_\_
5. \_\_\_\_\_
6. \_\_\_\_\_
7. \_\_\_\_\_
8. \_\_\_\_\_
9. \_\_\_\_\_
10. \_\_\_\_\_
11. \_\_\_\_\_
12. \_\_\_\_\_
13. \_\_\_\_\_
14. \_\_\_\_\_
15. \_\_\_\_\_
16. \_\_\_\_\_



Determina si las figuras que se muestran son 'similares', 'congruentes' o 'ninguna'.

**Respuestas**


1)



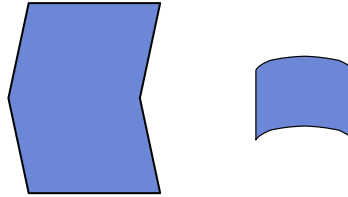
2)



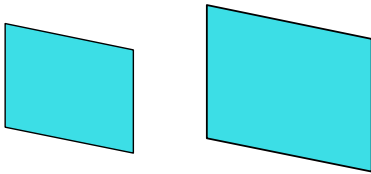
3)



4)



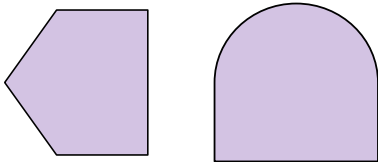
5)



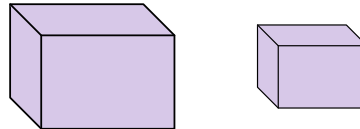
6)



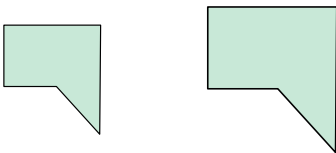
7)



8)



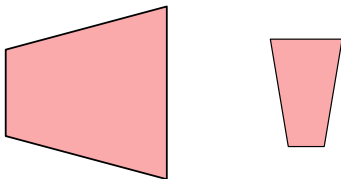
9)




10)



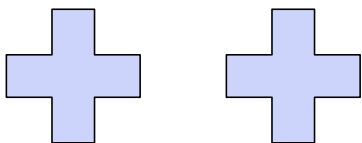
11)



12)



13)



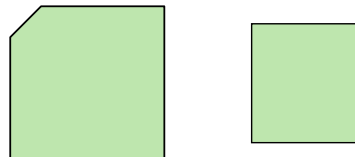
14)



15)



16)



1. similar
2. congruente
3. congruente
4. ninguno
5. similar
6. congruente
7. ninguno
8. similar
9. similar
10. congruente
11. ninguno
12. ninguno
13. congruente
14. congruente
15. similar
16. ninguno