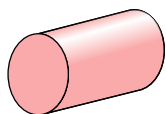




Determinar cuál de las opciones describe mejor la figura mostrada.

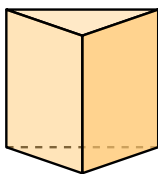
**Respuestas**

1)



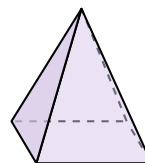
- A. sphere
- B. triangular pyramid
- C. rectangular pyramid
- D. cylinder

2)



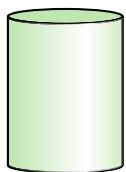
- A. triangular prism
- B. cone
- C. triangular pyramid
- D. rectangular prism

3)



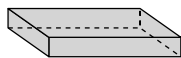
- A. rectangular pyramid
- B. sphere
- C. rectangular prism
- D. triangular prism

4)



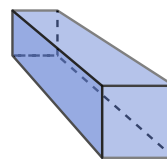
- A. triangular pyramid
- B. cylinder
- C. triangular prism
- D. sphere

5)



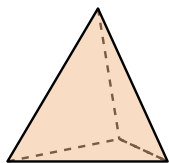
- A. rectangular pyramid
- B. sphere
- C. rectangular prism
- D. triangular prism

6)



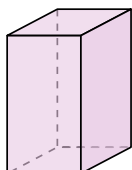
- A. cube
- B. cone
- C. triangular pyramid
- D. rectangular prism

7)



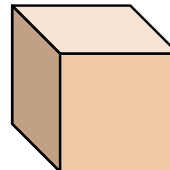
- A. triangular pyramid
- B. triangular prism
- C. cone
- D. rectangular pyramid

8)



- A. cube
- B. cylinder
- C. rectangular pyramid
- D. rectangular prism

9)



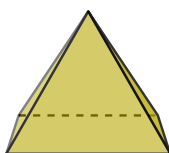
- A. cone
- B. cube
- C. triangular prism
- D. rectangular pyramid

10)




- A. cylinder
- B. sphere
- C. triangular pyramid
- D. cone

11)



- A. rectangular pyramid
- B. rectangular prism
- C. sphere
- D. cube

12)



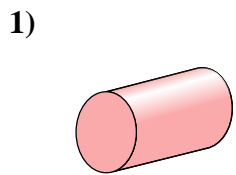
- A. cone
- B. triangular pyramid
- C. triangular prism
- D. sphere

- 1. \_\_\_\_\_
- 2. \_\_\_\_\_
- 3. \_\_\_\_\_
- 4. \_\_\_\_\_
- 5. \_\_\_\_\_
- 6. \_\_\_\_\_
- 7. \_\_\_\_\_
- 8. \_\_\_\_\_
- 9. \_\_\_\_\_
- 10. \_\_\_\_\_
- 11. \_\_\_\_\_
- 12. \_\_\_\_\_

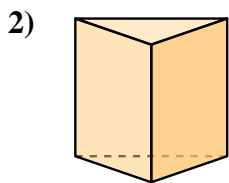


Determinar cuál de las opciones describe mejor la figura mostrada.

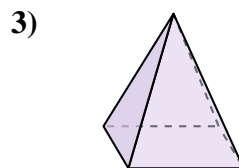
**Respuestas**



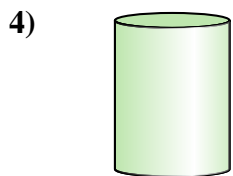
- A. sphere
- B. triangular pyramid
- C. rectangular pyramid
- D. cylinder



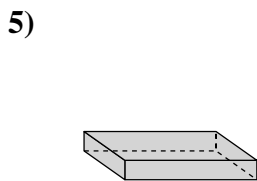
- A. triangular prism
- B. cone
- C. triangular pyramid
- D. rectangular prism



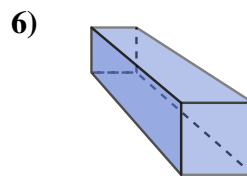
- A. rectangular pyramid
- B. sphere
- C. rectangular prism
- D. triangular prism



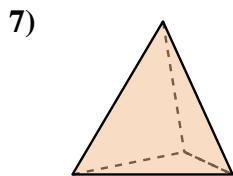
- A. triangular pyramid
- B. cylinder
- C. triangular prism
- D. sphere



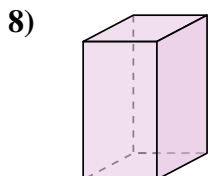
- A. rectangular pyramid
- B. sphere
- C. rectangular prism
- D. triangular prism



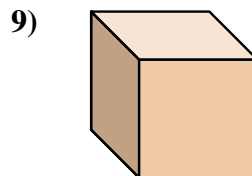
- A. cube
- B. cone
- C. triangular pyramid
- D. rectangular prism



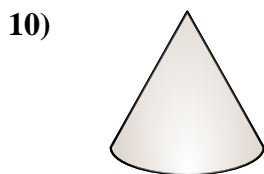
- A. triangular pyramid
- B. triangular prism
- C. cone
- D. rectangular pyramid



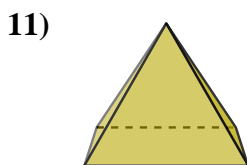
- A. cube
- B. cylinder
- C. rectangular pyramid
- D. rectangular prism



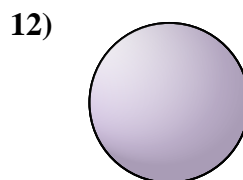
- A. cone
- B. cube
- C. triangular prism
- D. rectangular pyramid



- A. cylinder
- B. sphere
- C. triangular pyramid
- D. cone



- A. rectangular pyramid
- B. rectangular prism
- C. sphere
- D. cube



- A. cone
- B. triangular pyramid
- C. triangular prism
- D. sphere

- 1.     **D**
- 2.     **A**
- 3.     **A**
- 4.     **B**
- 5.     **C**
- 6.     **D**
- 7.     **A**
- 8.     **D**
- 9.     **B**
- 10.     **D**
- 11.     **A**
- 12.     **D**