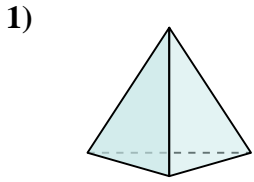


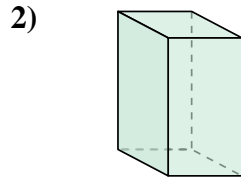


Determinar cuál de las opciones describe mejor la figura mostrada.

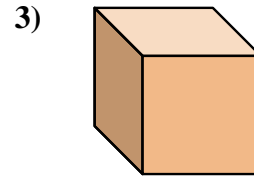
**Respuestas**



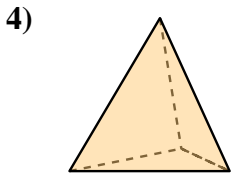
- A. cube
- B. triangular pyramid
- C. cone
- D. sphere




- A. triangular pyramid
- B. cylinder
- C. rectangular prism
- D. triangular prism



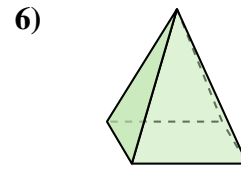
- A. rectangular prism
- B. cube
- C. cone
- D. triangular prism



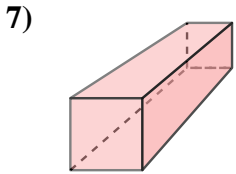
- A. cone
- B. triangular pyramid
- C. triangular prism
- D. rectangular pyramid



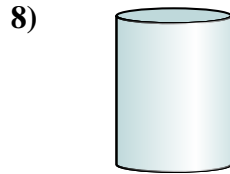
- A. triangular prism
- B. cone
- C. cylinder
- D. sphere



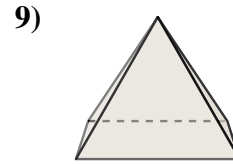
- A. cone
- B. cube
- C. triangular prism
- D. rectangular pyramid



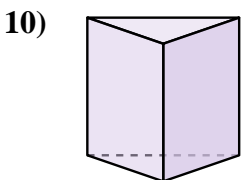
- A. triangular prism
- B. rectangular prism
- C. sphere
- D. cylinder



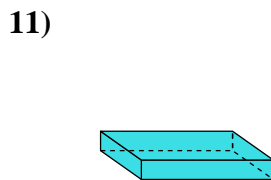
- A. triangular pyramid
- B. cube
- C. cylinder
- D. triangular prism



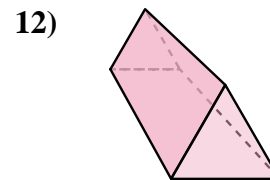
- A. cube
- B. cone
- C. triangular pyramid
- D. rectangular pyramid



- A. triangular prism
- B. sphere
- C. triangular pyramid
- D. cone



- A. cube
- B. triangular prism
- C. cylinder
- D. rectangular prism



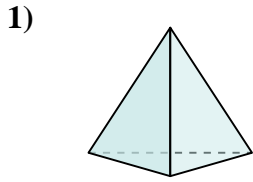
- A. cylinder
- B. triangular prism
- C. cone
- D. rectangular pyramid

- 1. \_\_\_\_\_
- 2. \_\_\_\_\_
- 3. \_\_\_\_\_
- 4. \_\_\_\_\_
- 5. \_\_\_\_\_
- 6. \_\_\_\_\_
- 7. \_\_\_\_\_
- 8. \_\_\_\_\_
- 9. \_\_\_\_\_
- 10. \_\_\_\_\_
- 11. \_\_\_\_\_
- 12. \_\_\_\_\_

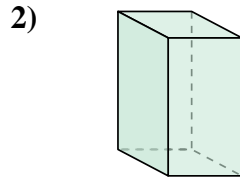


Determinar cuál de las opciones describe mejor la figura mostrada.

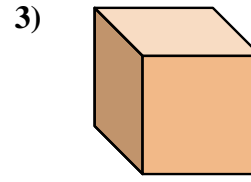
**Respuestas**



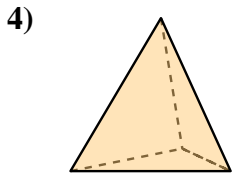
- A. cube
- B. triangular pyramid
- C. cone
- D. sphere




- A. triangular pyramid
- B. cylinder
- C. rectangular prism
- D. triangular prism



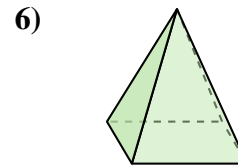
- A. rectangular prism
- B. cube
- C. cone
- D. triangular prism



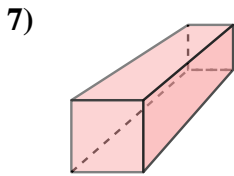
- A. cone
- B. triangular pyramid
- C. triangular prism
- D. rectangular pyramid



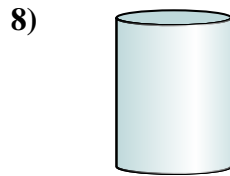
- A. triangular prism
- B. cone
- C. cylinder
- D. sphere



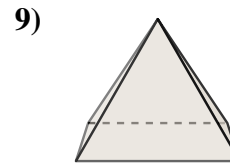
- A. cone
- B. cube
- C. triangular prism
- D. rectangular pyramid



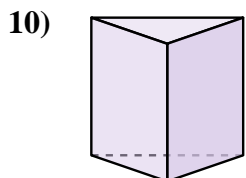
- A. triangular prism
- B. rectangular prism
- C. sphere
- D. cylinder



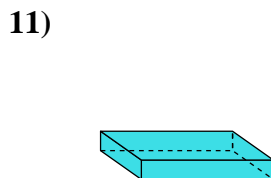
- A. triangular pyramid
- B. cube
- C. cylinder
- D. triangular prism



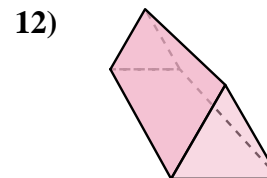
- A. cube
- B. cone
- C. triangular pyramid
- D. rectangular pyramid



- A. triangular prism
- B. sphere
- C. triangular pyramid
- D. cone



- A. cube
- B. triangular prism
- C. cylinder
- D. rectangular prism



- A. cylinder
- B. triangular prism
- C. cone
- D. rectangular pyramid

- 1.     **B**
- 2.     **C**
- 3.     **B**
- 4.     **B**
- 5.     **D**
- 6.     **D**
- 7.     **B**
- 8.     **C**
- 9.     **D**
- 10.     **A**
- 11.     **D**
- 12.     **B**