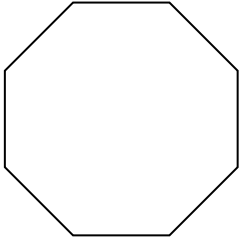




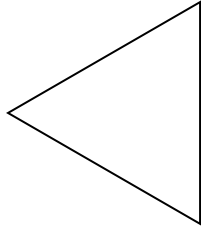
Determinar si la figura mostrada es una forma regular o irregular.

**Respuestas**

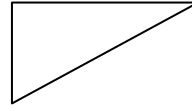
1)



2)

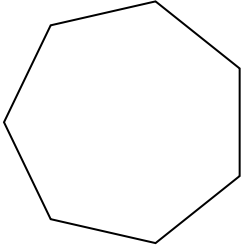


3)

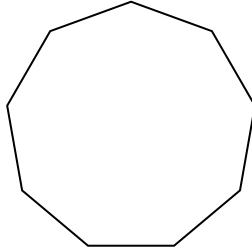


1. \_\_\_\_\_

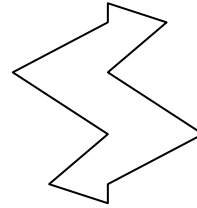
4)



5)



6)



2. \_\_\_\_\_

3. \_\_\_\_\_

4. \_\_\_\_\_

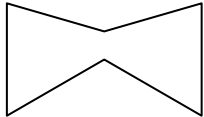
5. \_\_\_\_\_

6. \_\_\_\_\_

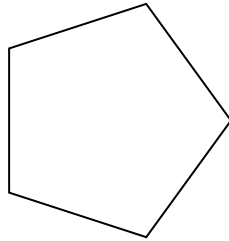
7. \_\_\_\_\_

8. \_\_\_\_\_


7)



8)



9)




9. \_\_\_\_\_

10. \_\_\_\_\_

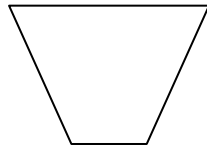
11. \_\_\_\_\_

12. \_\_\_\_\_


10)



11)



12)




13. \_\_\_\_\_


14. \_\_\_\_\_

15. \_\_\_\_\_

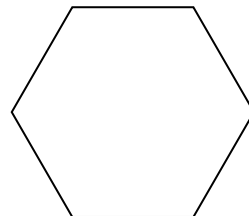
13)



14)

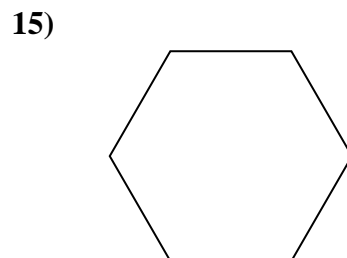
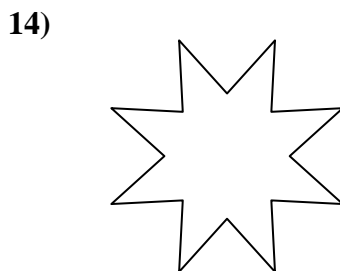
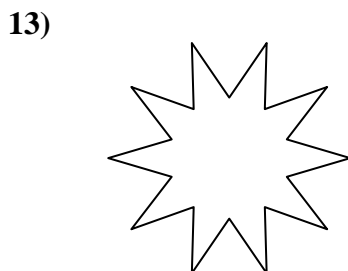
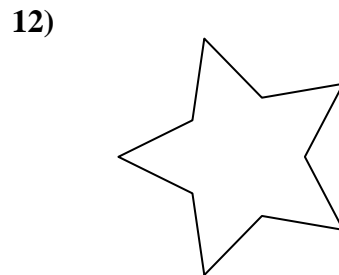
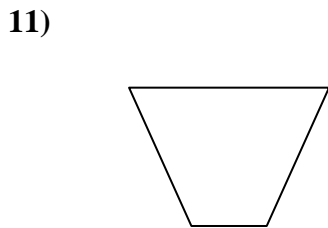
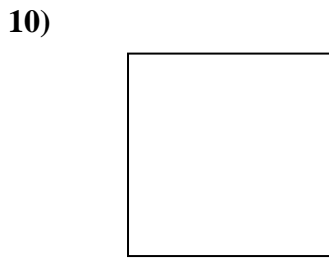

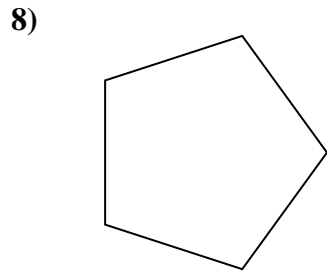
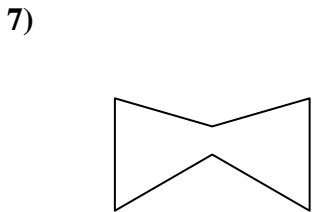
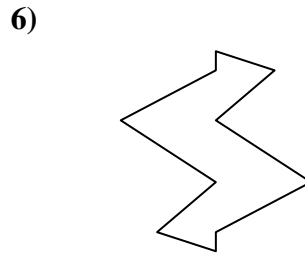
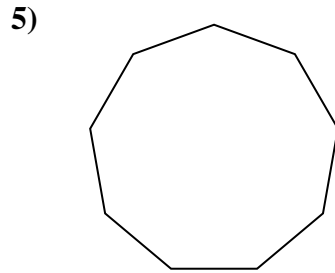
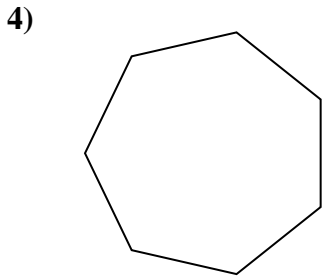
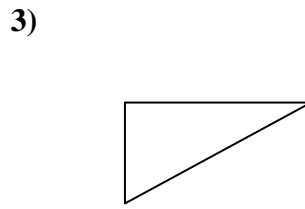
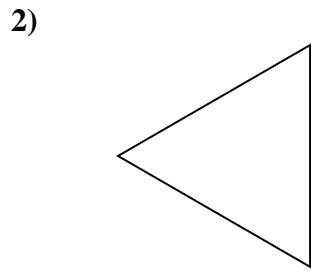
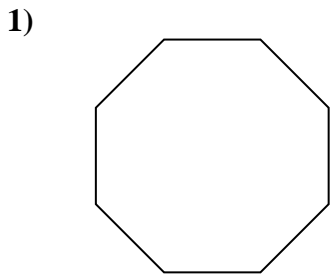


15)





Determinar si la figura mostrada es una forma regular o irregular.



**Respuestas**

1. Regulare

2. Regulare

3. Irregulare

4. Regulare

5. Regulare

6. Irregulare

7. Irregulare

8. Regulare

9. Irregulare

10. Regulare

11. Irregulare

12. Irregulare

13. Irregulare

14. Irregulare

15. Regulare