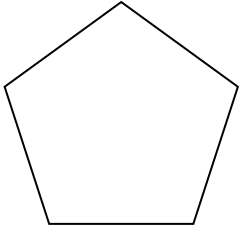




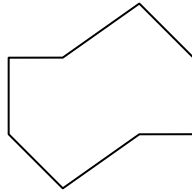
Determinar si la figura mostrada es una forma regular o irregular.

Respuestas


1)



2)

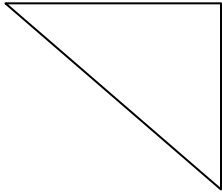


3)

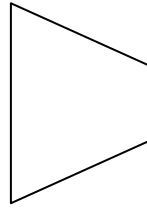


1. _____

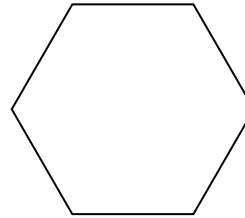
4)



5)




6)




2. _____

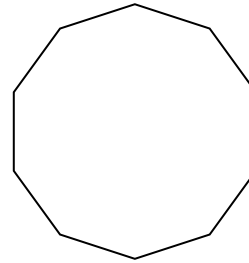
7)



8)

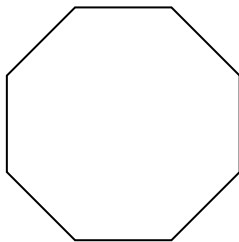


9)




3. _____

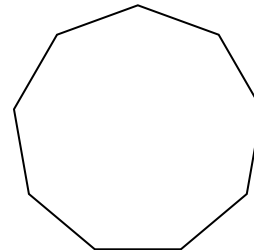
10)



11)

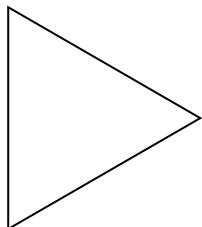


12)




4. _____

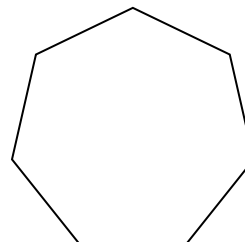
13)



14)



15)



5. _____

6. _____

7. _____

8. _____

9. _____

10. _____

11. _____

12. _____

13. _____

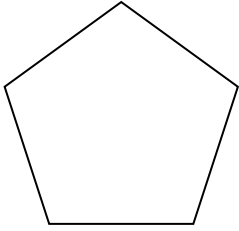
14. _____

15. _____

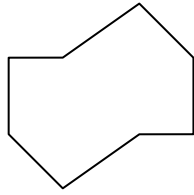


Determinar si la figura mostrada es una forma regular o irregular.


1)



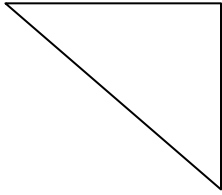
2)



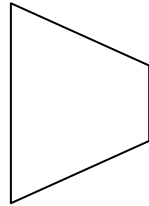
3)



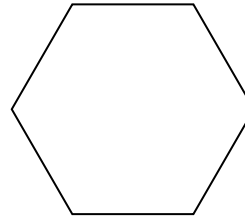
4)




5)




6)



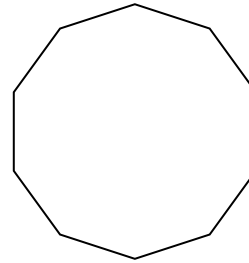
7)



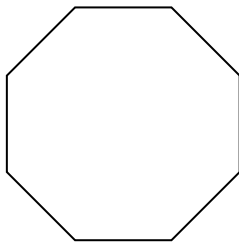
8)




9)



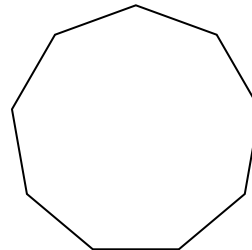
10)



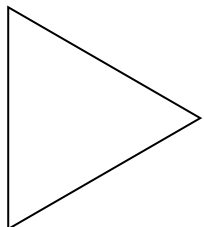
11)




12)



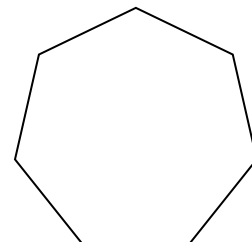
13)



14)



15)



Respuestas

1. Regulare

2. Irregulare

3. Regulare

4. Irregulare

5. Irregulare

6. Regulare

7. Irregulare

8. Irregulare

9. Regulare

10. Regulare

11. Irregulare

12. Regulare

13. Regulare

14. Irregulare

15. Regulare