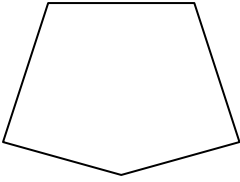





Determinar si la figura mostrada es una forma regular o irregular.

Respuestas


1)



2)




3)

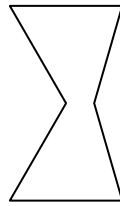


1. _____

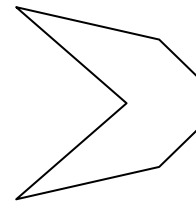
4)



5)



6)



2. _____

3. _____

4. _____

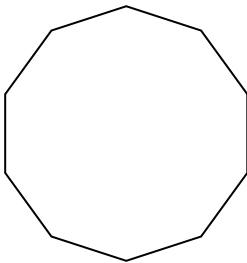
5. _____

6. _____

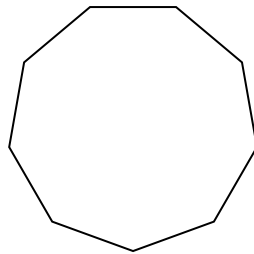
7. _____

8. _____

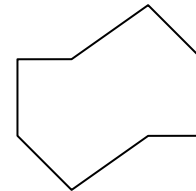
7)



8)



9)



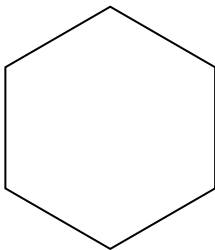
9. _____

10. _____

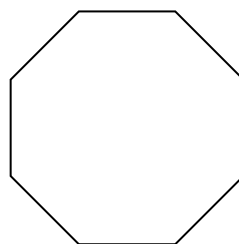
11. _____

12. _____

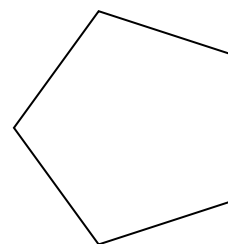
10)



11)



12)




13. _____

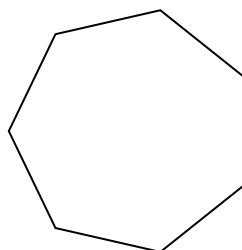
14. _____

15. _____


13)



14)



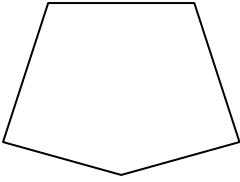
15)






Determinar si la figura mostrada es una forma regular o irregular.


1)




2)



3)



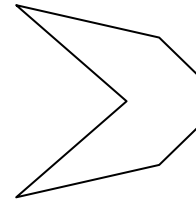
4)



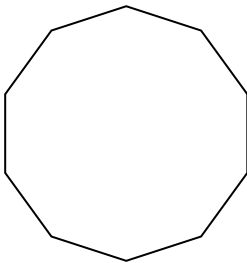
5)



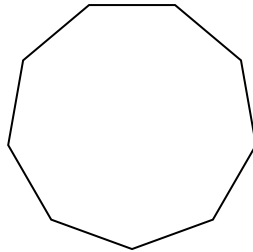
6)



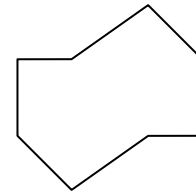
7)



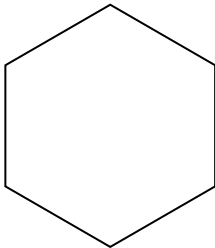
8)



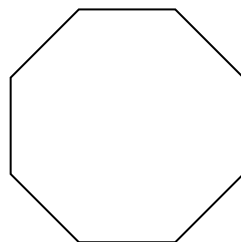
9)



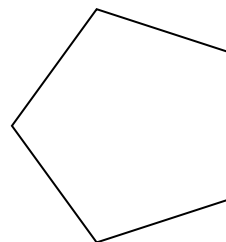
10)




11)



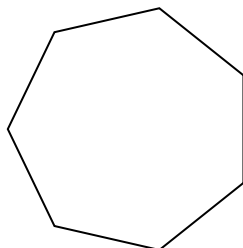
12)




13)



14)



15)



Respuestas

1. **Irregulare**

2. **Irregulare**

3. **Regulare**

4. **Irregulare**

5. **Irregulare**

6. **Irregulare**

7. **Regulare**

8. **Regulare**

9. **Irregulare**

10. **Regulare**

11. **Regulare**

12. **Regulare**

13. **Irregulare**

14. **Regulare**


15. **Irregulare**



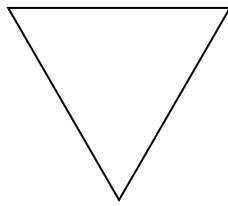
Determinar si la figura mostrada es una forma regular o irregular.

Respuestas

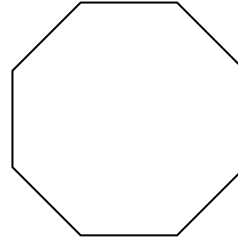
1)



2)



3)



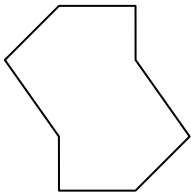
1. _____

2. _____

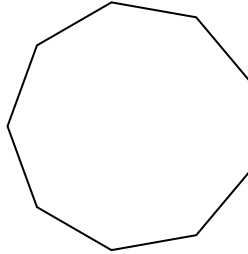
3. _____

4. _____


4)



5)



6)




5. _____

6. _____


7. _____

8. _____

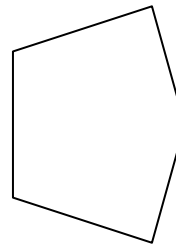
7)



8)



9)




9. _____

10. _____

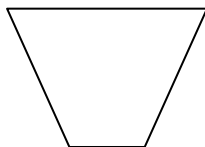
11. _____

12. _____

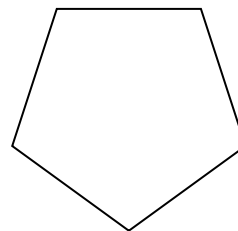
10)



11)



12)

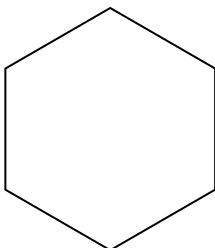


13. _____

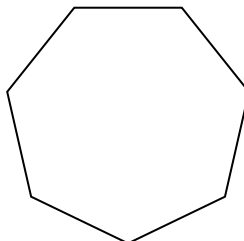
14. _____

15. _____

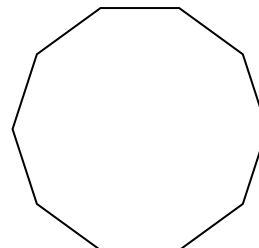
13)



14)




15)



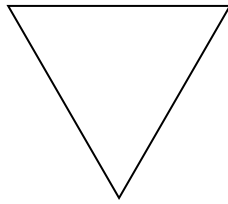


Determinar si la figura mostrada es una forma regular o irregular.

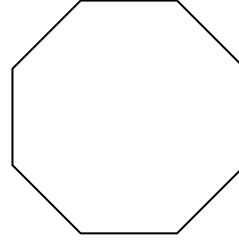
1)



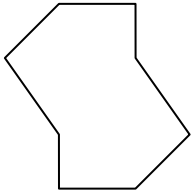
2)



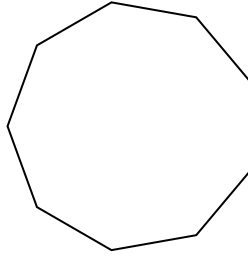
3)



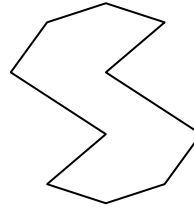
4)




5)




6)



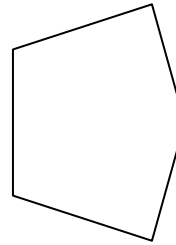
7)




8)



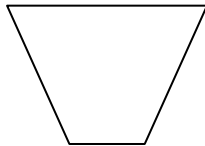
9)



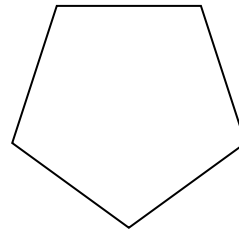
10)



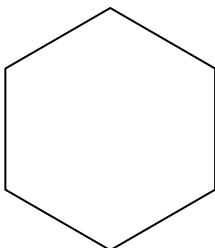
11)



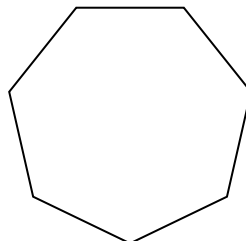
12)



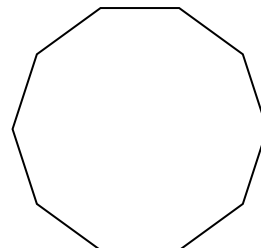
13)



14)



15)



Respuestas

1. Regulare

2. Regulare

3. Regulare

4. Irregulare

5. Regulare

6. Irregulare

7. Irregulare

8. Irregulare

9. Irregulare

10. Irregulare

11. Irregulare

12. Regulare

13. Regulare

14. Regulare

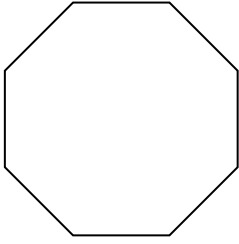
15. Regulare



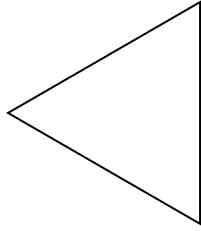
Determinar si la figura mostrada es una forma regular o irregular.

Respuestas

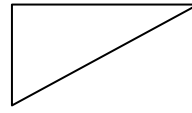
1)



2)

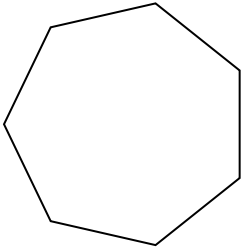


3)

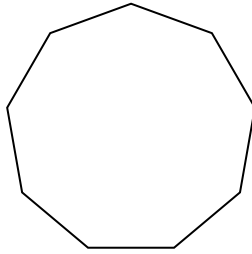


1. _____

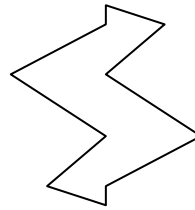
4)



5)



6)



2. _____

3. _____

4. _____

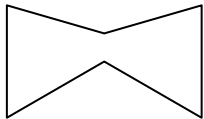
5. _____

6. _____

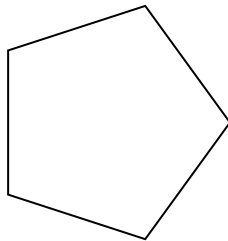
7. _____

8. _____


7)



8)



9)




9. _____

10. _____

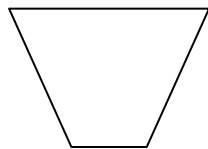
11. _____

12. _____


10)



11)



12)




13. _____


14. _____

15. _____

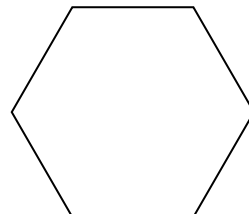
13)



14)



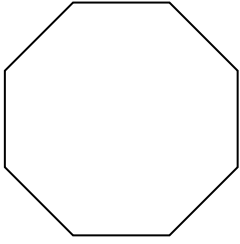
15)



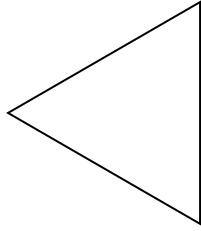


Determinar si la figura mostrada es una forma regular o irregular.

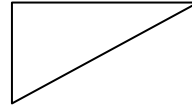
1)



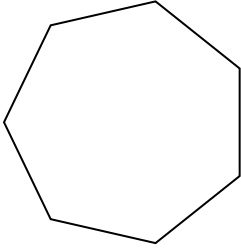
2)



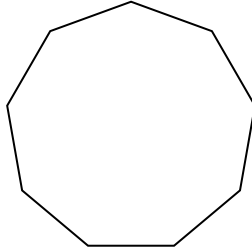
3)




4)



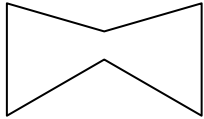
5)



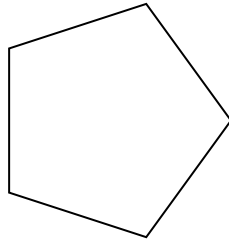
6)




7)




8)



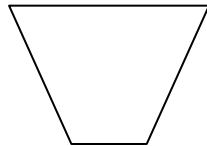
9)




10)




11)




12)



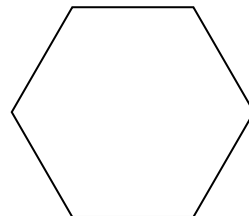
13)



14)



15)



Respuestas

1. Regulare

2. Regulare

3. Irregulare

4. Regulare

5. Regulare

6. Irregulare

7. Irregulare

8. Regulare

9. Irregulare

10. Regulare

11. Irregulare

12. Irregulare

13. Irregulare

14. Irregulare

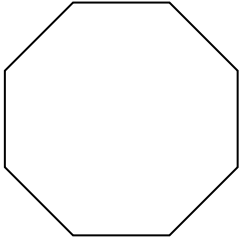
15. Regulare




Determinar si la figura mostrada es una forma regular o irregular.

Respuestas

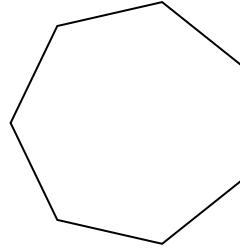
1)



2)




3)




1. _____

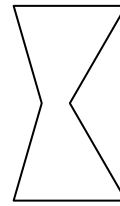
4)



5)



6)



2. _____

3. _____

4. _____

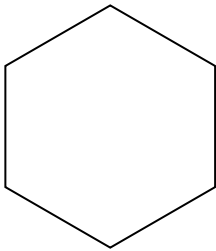
5. _____

6. _____

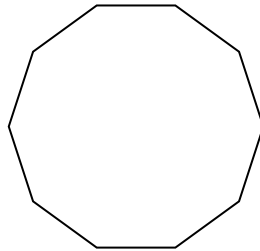
7. _____

8. _____


7)



8)



9)



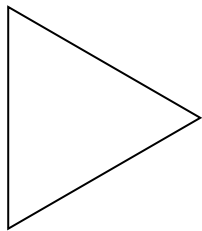
9. _____

10. _____


11. _____

12. _____

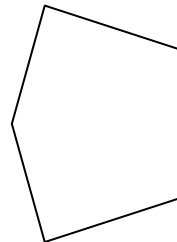
10)



11)



12)




13. _____

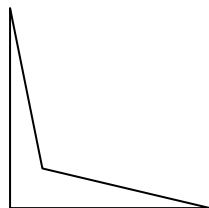
14. _____

15. _____

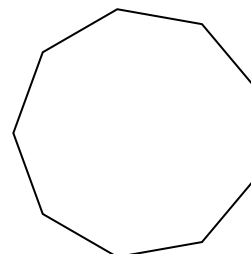
13)



14)



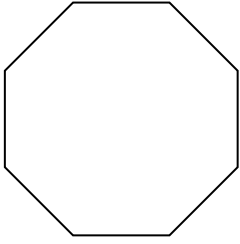
15)






Determinar si la figura mostrada es una forma regular o irregular.

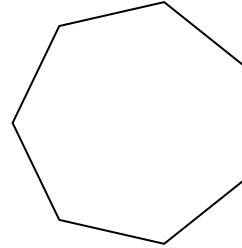
1)




2)




3)



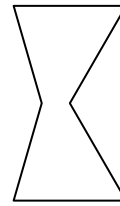
4)



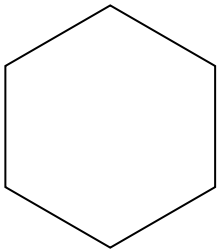
5)



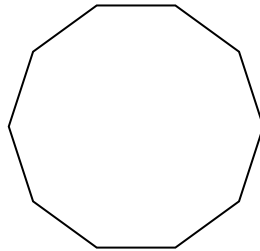
6)




7)



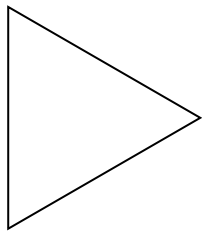
8)




9)



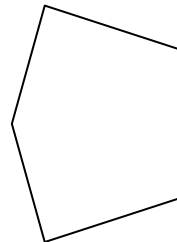
10)




11)



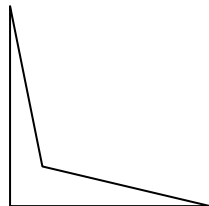
12)



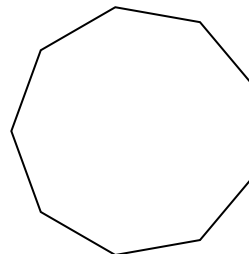
13)



14)



15)



Respuestas

1. Regulare

2. Irregulare

3. Regulare

4. Irregulare

5. Irregulare

6. Irregulare

7. Regulare

8. Regulare

9. Irregulare

10. Regulare

11. Regulare

12. Irregulare

13. Irregulare

14. Irregulare

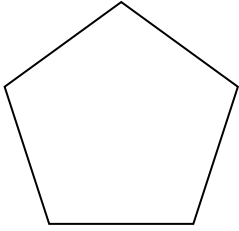
15. Regulare



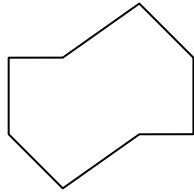
Determinar si la figura mostrada es una forma regular o irregular.

Respuestas


1)



2)

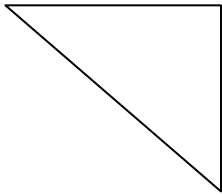


3)

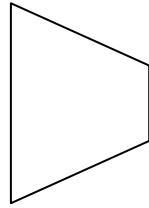


1. _____

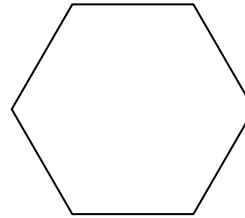
4)



5)




6)




2. _____

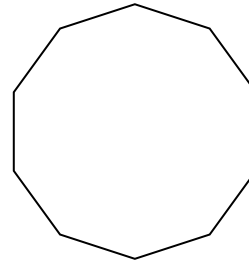
7)



8)



9)



3. _____

4. _____

5. _____

6. _____

7. _____

8. _____

9. _____

10. _____

11. _____

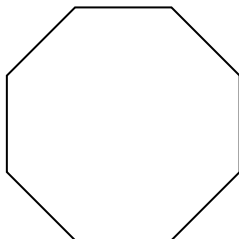
12. _____

13. _____


14. _____

15. _____

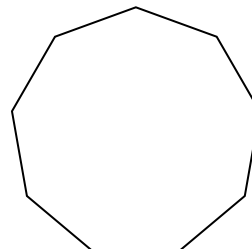
10)



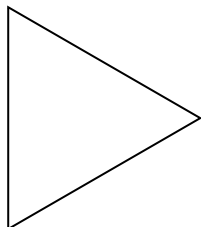
11)




12)



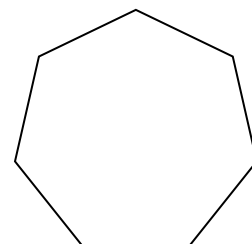
13)



14)



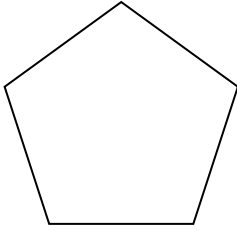
15)



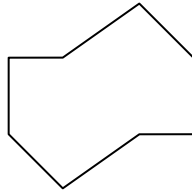


Determinar si la figura mostrada es una forma regular o irregular.


1)



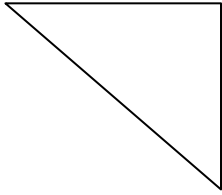
2)



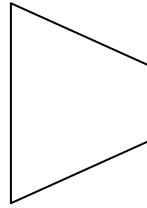
3)



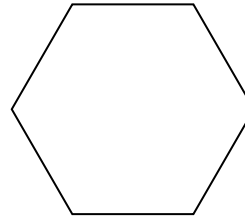
4)




5)




6)



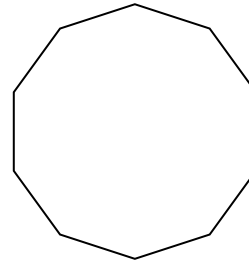
7)



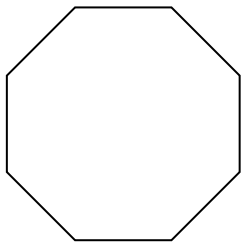
8)




9)



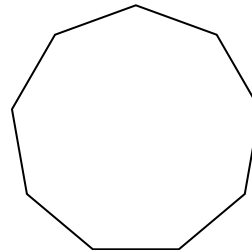
10)



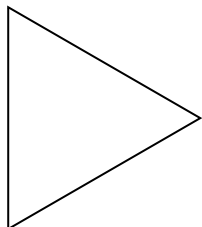
11)




12)



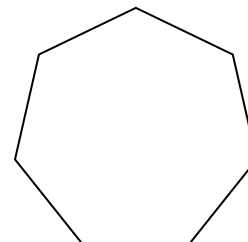
13)



14)



15)



Respuestas

1. Regulare

2. Irregulare

3. Regulare

4. Irregulare

5. Irregulare

6. Regulare

7. Irregulare

8. Irregulare

9. Regulare

10. Regulare

11. Irregulare

12. Regulare

13. Regulare

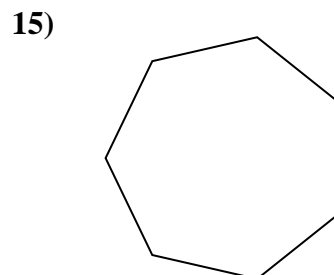
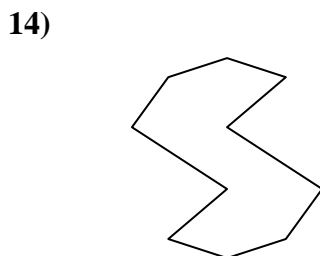
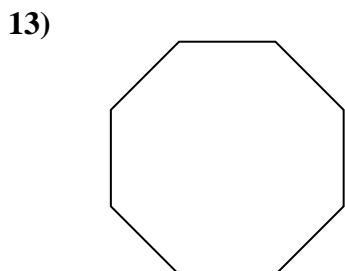
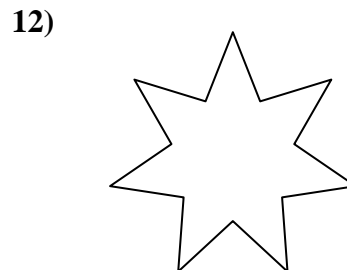
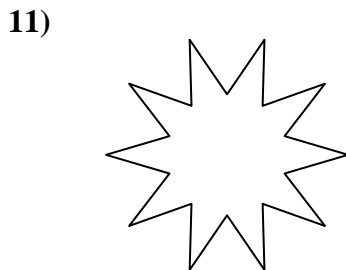
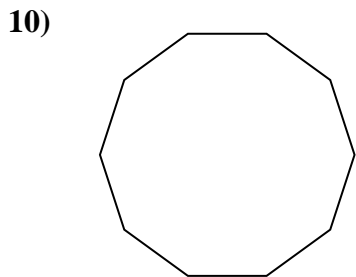
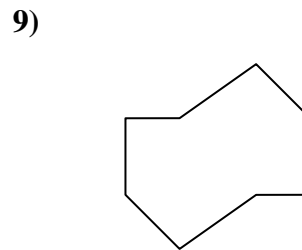
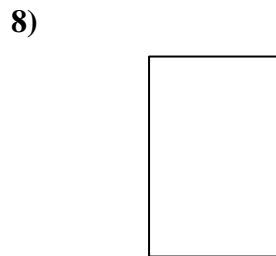
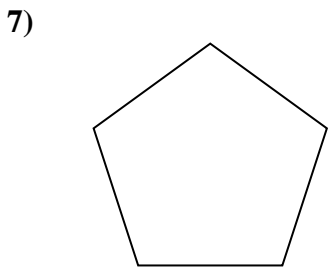
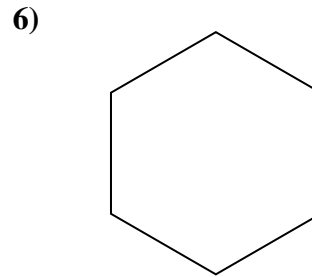

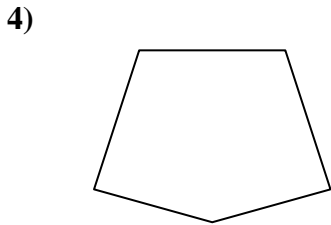
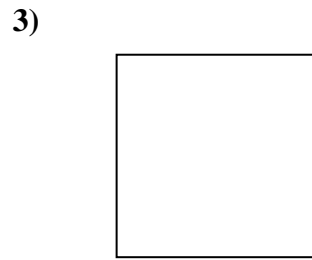
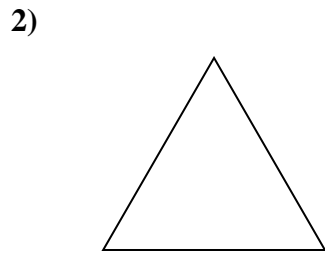
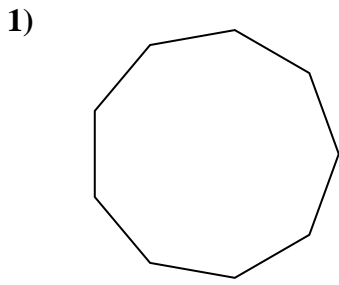
14. Irregulare

15. Regulare



Determinar si la figura mostrada es una forma regular o irregular.

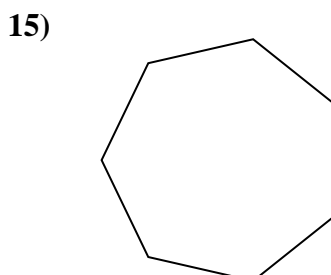
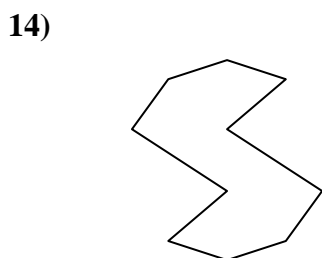
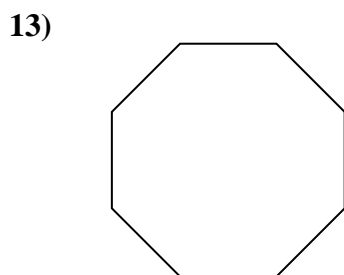
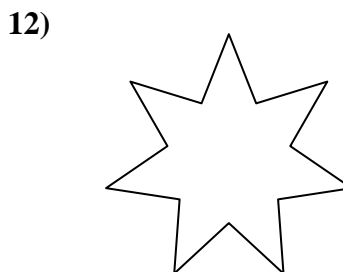
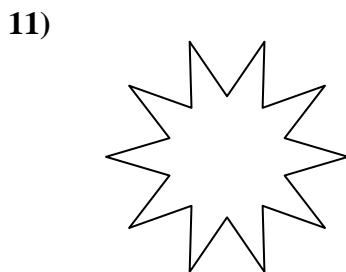
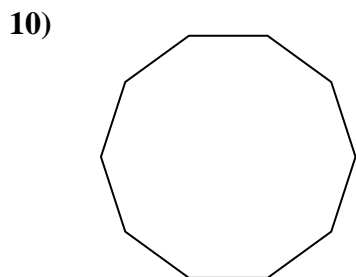
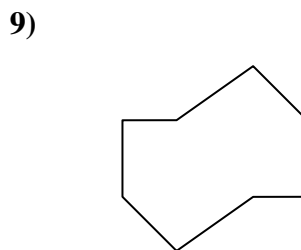
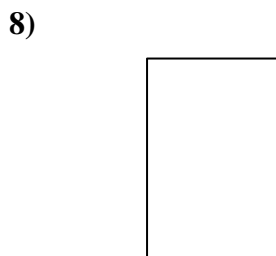
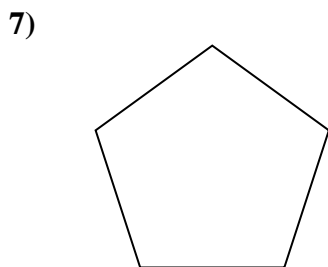
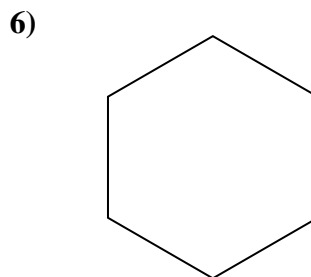

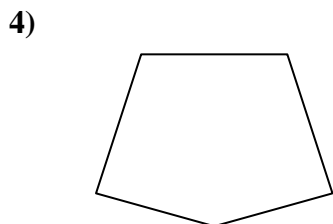
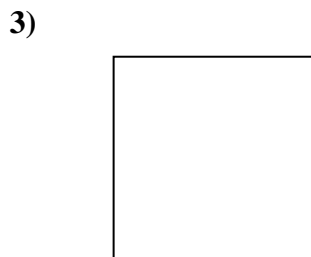
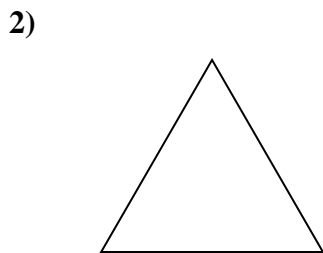
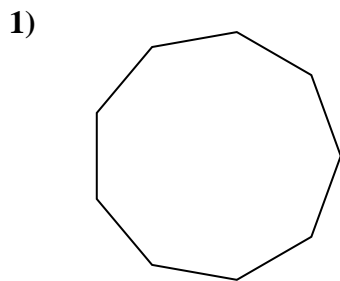
Respuestas



1. _____
2. _____
3. _____
4. _____
5. _____
6. _____
7. _____
8. _____
9. _____
10. _____
11. _____
12. _____
13. _____
14. _____
15. _____



Determinar si la figura mostrada es una forma regular o irregular.



Respuestas

1. Regulare

2. Regulare

3. Regulare

4. Irregulare

5. Irregulare

6. Regulare

7. Regulare

8. Irregulare

9. Irregulare

10. Regulare

11. Irregulare

12. Irregulare

13. Regulare

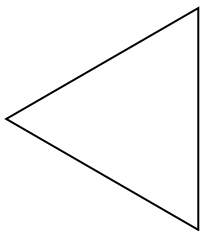
14. Irregulare

15. Regulare

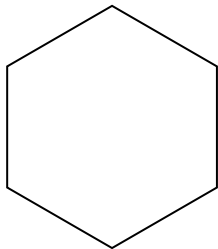


Determinar si la figura mostrada es una forma regular o irregular.


1)



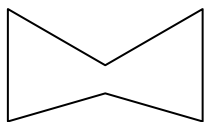
2)




3)



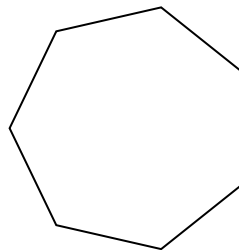
4)



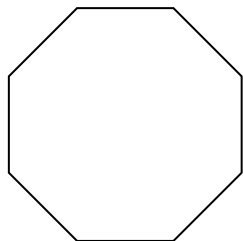
5)




6)



7)



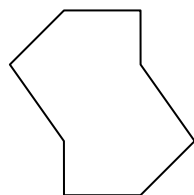
8)



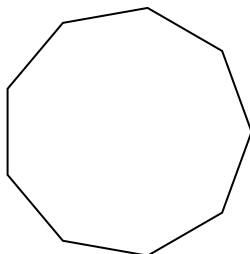
9)



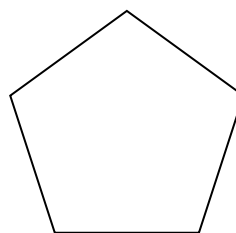
10)




11)




12)



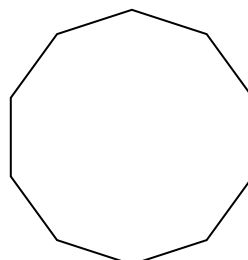
13)



14)



15)



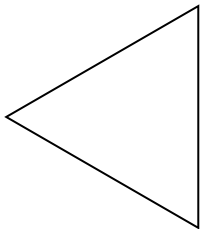
Respuestas

- 1. _____
- 2. _____
- 3. _____
- 4. _____
- 5. _____
- 6. _____
- 7. _____
- 8. _____
- 9. _____
- 10. _____
- 11. _____
- 12. _____
- 13. _____
- 14. _____
- 15. _____

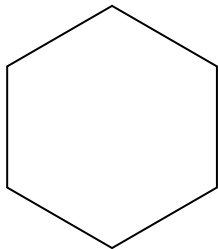


Determinar si la figura mostrada es una forma regular o irregular.


1)



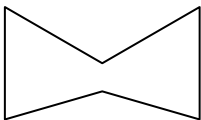
2)




3)



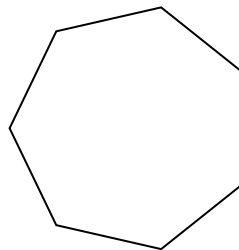
4)



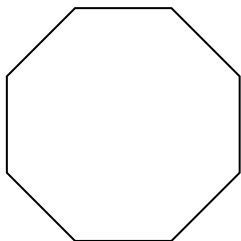
5)




6)



7)



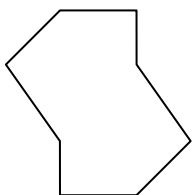
8)



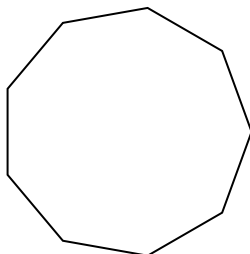
9)



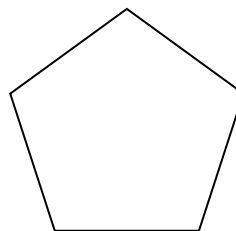
10)



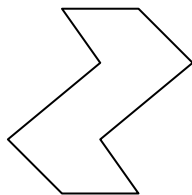
11)




12)



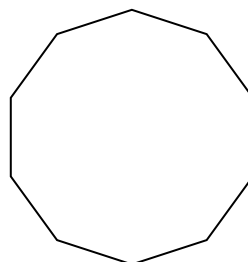
13)



14)



15)



Respuestas

1. Regulare

2. Regulare

3. Irregulare

4. Irregulare

5. Irregulare

6. Regulare

7. Regulare

8. Regulare

9. Irregulare

10. Irregulare

11. Regulare

12. Regulare

13. Irregulare

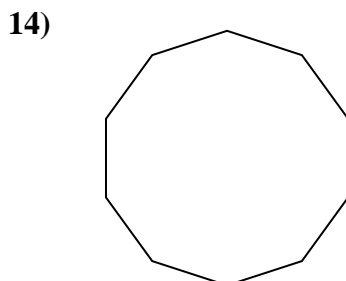
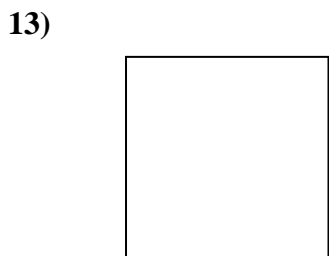
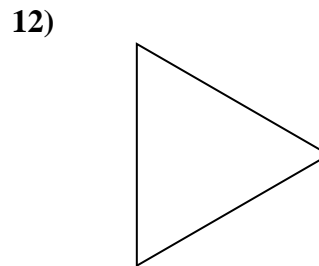
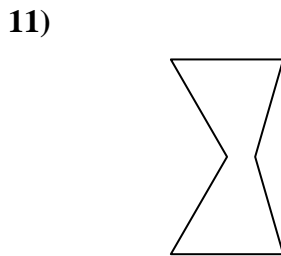
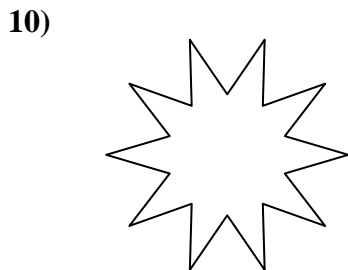
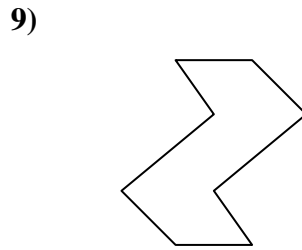
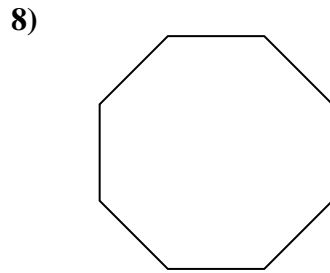
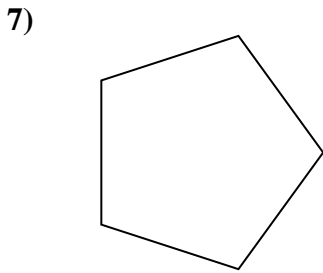
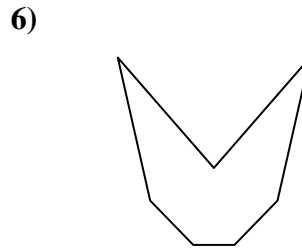
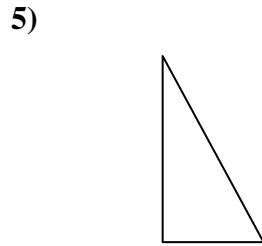
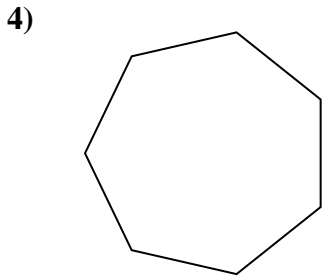
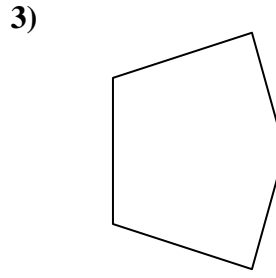
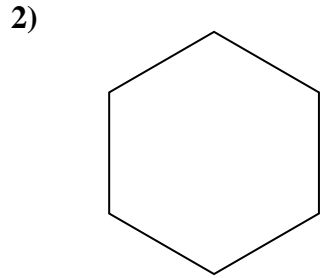
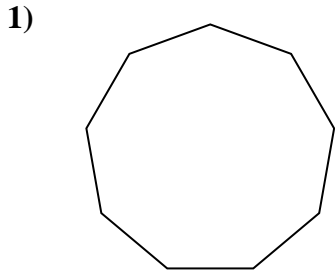
14. Irregulare

15. Regulare



Determinar si la figura mostrada es una forma regular o irregular.

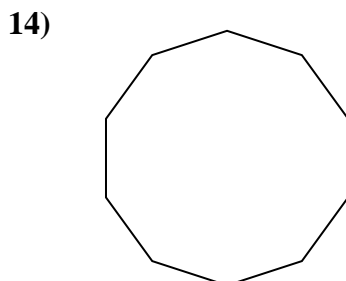
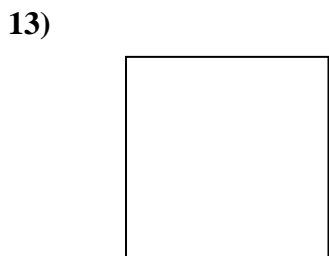
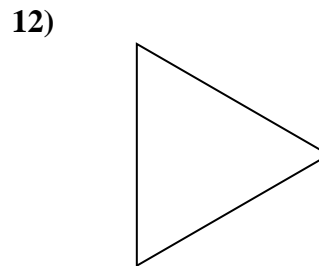
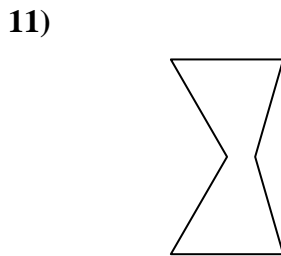
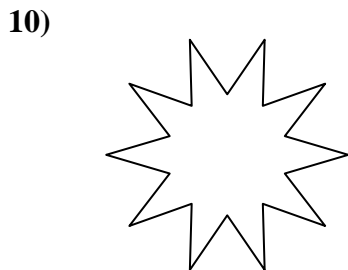
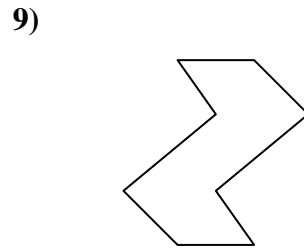
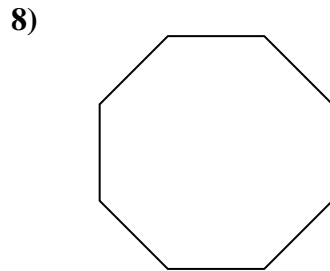
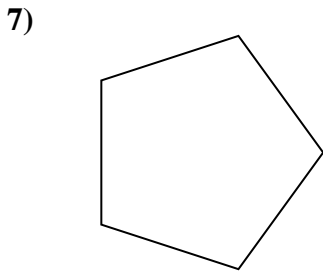
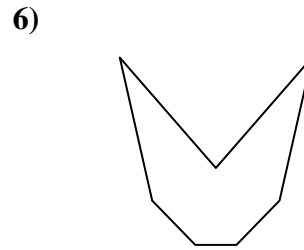
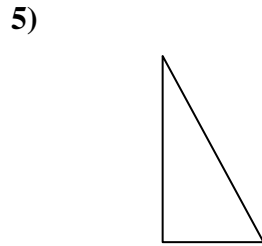
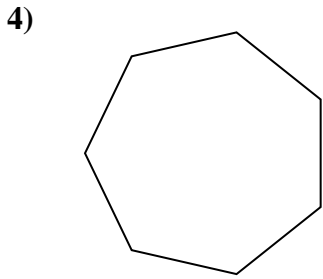
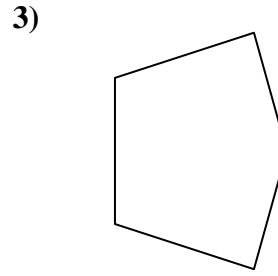
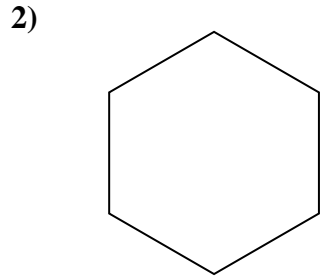
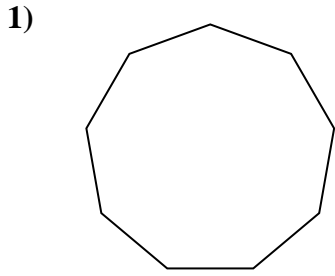
Respuestas



1. _____
2. _____
3. _____
4. _____
5. _____
6. _____
7. _____
8. _____
9. _____
10. _____
11. _____
12. _____
13. _____
14. _____
15. _____



Determinar si la figura mostrada es una forma regular o irregular.



Respuestas

1. Regulare

2. Regulare

3. Irregulare

4. Regulare

5. Irregulare

6. Irregulare

7. Regulare

8. Regulare

9. Irregulare

10. Irregulare

11. Irregulare

12. Regulare

13. Regulare

14. Regulare

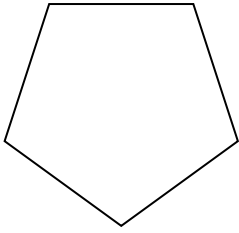
15. Irregulare



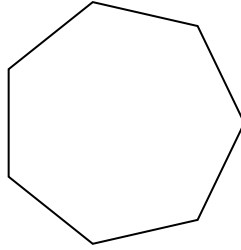
Determinar si la figura mostrada es una forma regular o irregular.

Respuestas

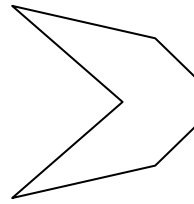
1)



2)




3)

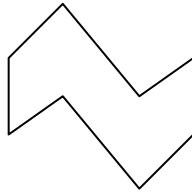


1. _____

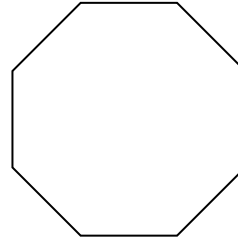
4)



5)

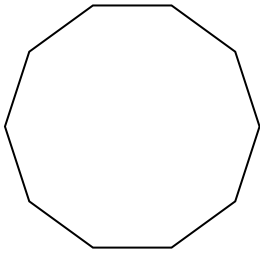


6)

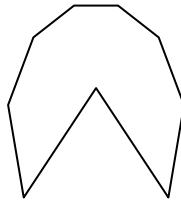


2. _____

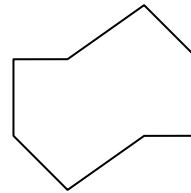
7)



8)



9)



3. _____

4. _____

5. _____

6. _____

7. _____

8. _____

9. _____

10. _____

11. _____

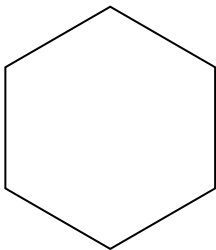
12. _____

13. _____

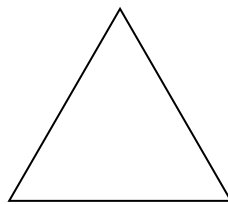
14. _____

15. _____

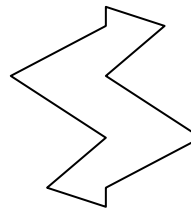
10)




11)



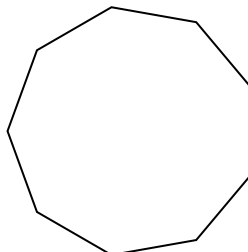
12)




13)



14)


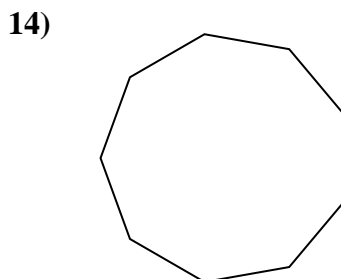
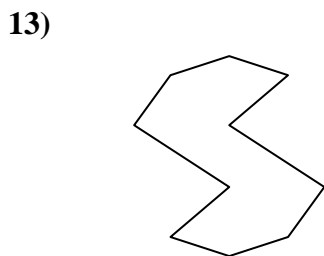
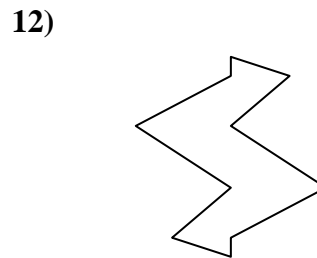
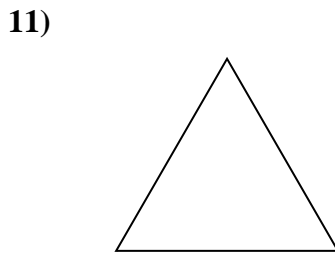
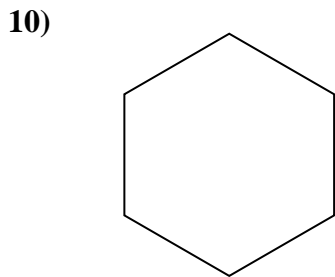
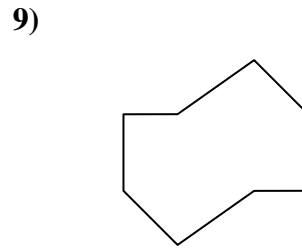
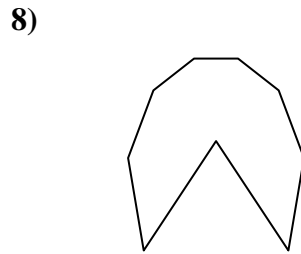
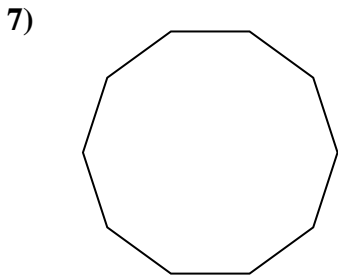
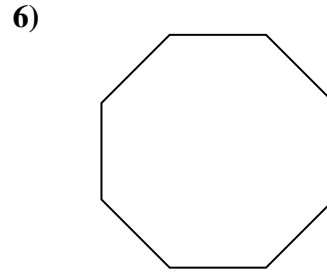
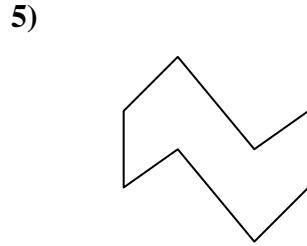
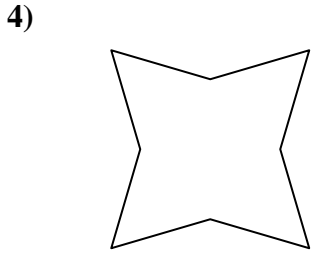
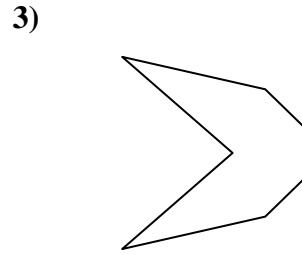
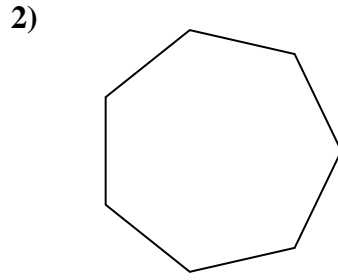
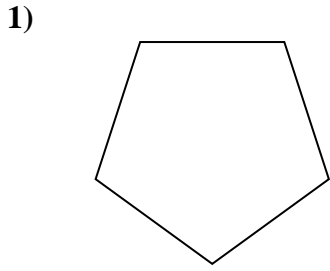


15)





Determinar si la figura mostrada es una forma regular o irregular.



Respuestas

1. Regulare

2. Regulare

3. Irregulare

4. Irregulare

5. Irregulare

6. Regulare

7. Regulare

8. Irregulare

9. Irregulare

10. Regulare

11. Regulare

12. Irregulare

13. Irregulare

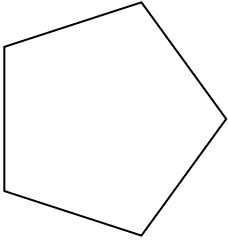
14. Regulare

15. Irregulare

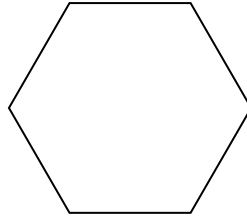


Determinar si la figura mostrada es una forma regular o irregular.

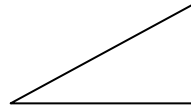
1)



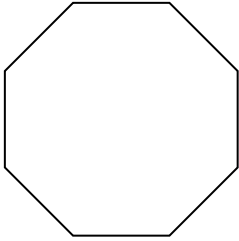
2)



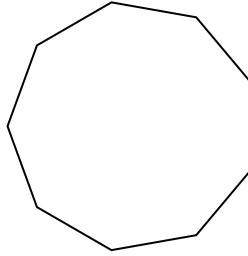
3)



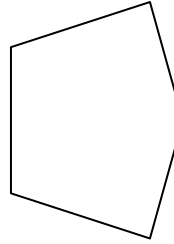
4)



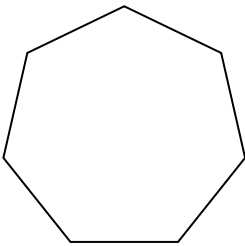
5)



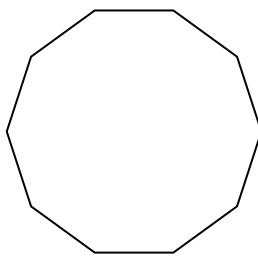
6)



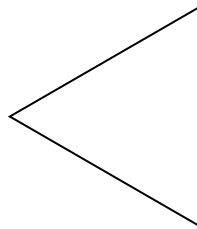
7)




8)




9)



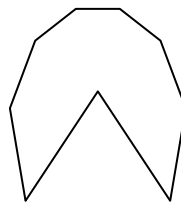
10)




11)




12)



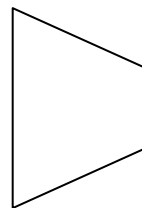
13)



14)



15)



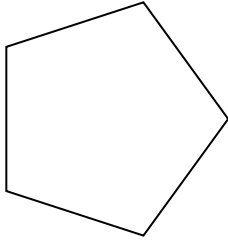
Respuestas

1. _____
2. _____
3. _____
4. _____
5. _____
6. _____
7. _____
8. _____
9. _____
10. _____
11. _____
12. _____
13. _____
14. _____
15. _____

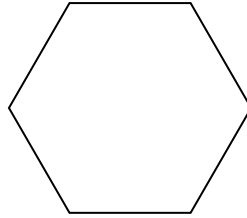


Determinar si la figura mostrada es una forma regular o irregular.

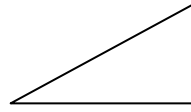
1)



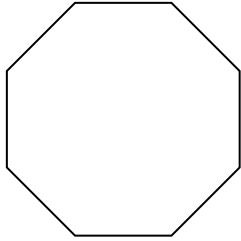
2)



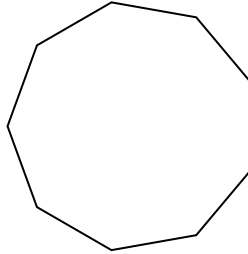
3)



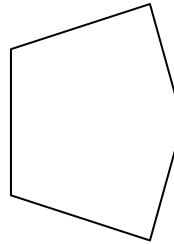
4)



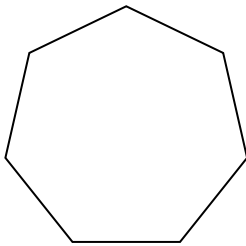
5)



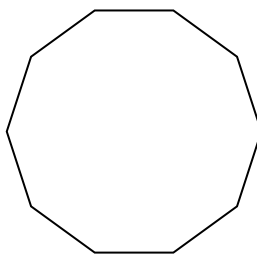
6)



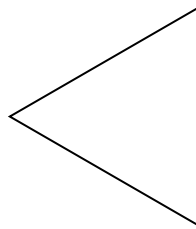
7)




8)




9)



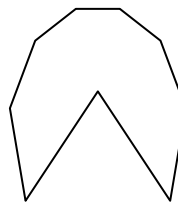
10)




11)




12)



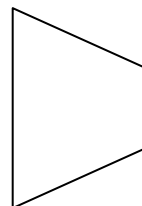
13)



14)



15)



Respuestas

1. Regulare

2. Regulare

3. Irregulare

4. Regulare

5. Regulare

6. Irregulare

7. Regulare

8. Regulare

9. Regulare

10. Irregulare

11. Regulare

12. Irregulare

13. Irregulare

14. Irregulare

15. Irregulare