





Determinar si la figura mostrada es una forma regular o irregular.

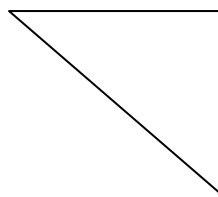
1)



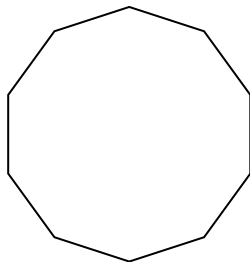
2)



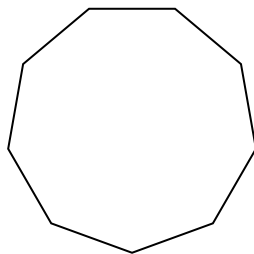
3)



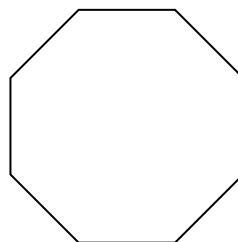
4)



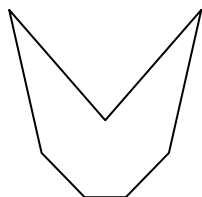
5)



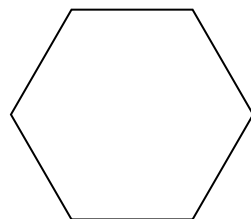
6)




7)




8)



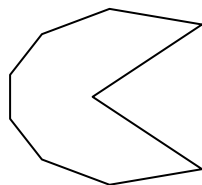
9)




10)



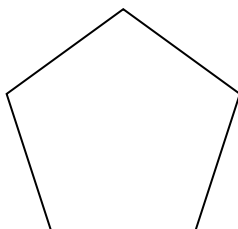
11)



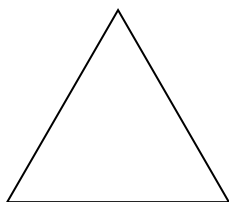
12)



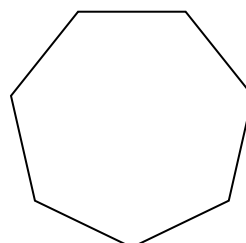
13)



14)



15)




**Respuestas**

- 1. \_\_\_\_\_
- 2. \_\_\_\_\_
- 3. \_\_\_\_\_
- 4. \_\_\_\_\_
- 5. \_\_\_\_\_
- 6. \_\_\_\_\_
- 7. \_\_\_\_\_
- 8. \_\_\_\_\_
- 9. \_\_\_\_\_
- 10. \_\_\_\_\_
- 11. \_\_\_\_\_
- 12. \_\_\_\_\_
- 13. \_\_\_\_\_
- 14. \_\_\_\_\_
- 15. \_\_\_\_\_

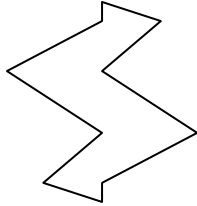


Determinar si la figura mostrada es una forma regular o irregular.

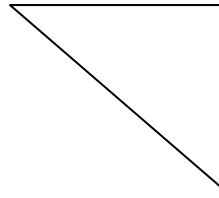
1)



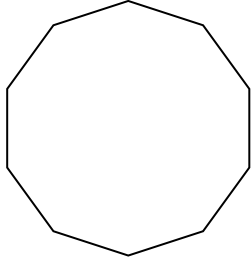
2)



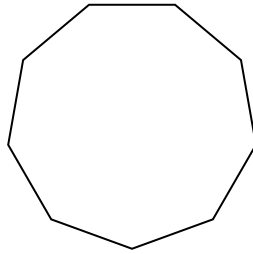
3)



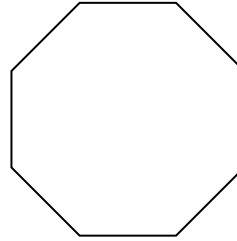
4)



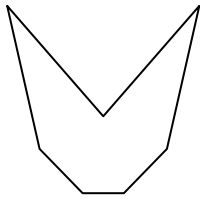
5)



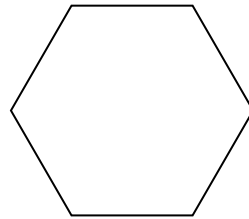
6)




7)




8)



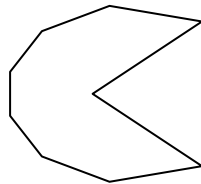
9)




10)



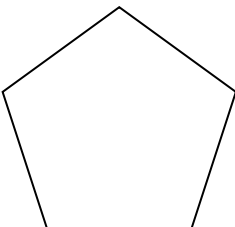
11)



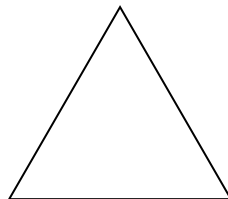
12)



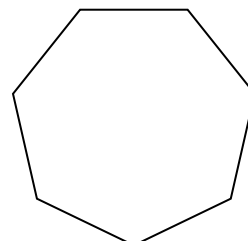
13)



14)



15)



**Respuestas**

1. **Irregulare**

2. **Irregulare**

3. **Irregulare**

4. **Regulare**

5. **Regulare**

6. **Regulare**

7. **Irregulare**

8. **Regulare**

9. **Irregulare**

10. **Irregulare**

11. **Irregulare**

12. **Regulare**

13. **Regulare**

14. **Regulare**

15. **Regulare**