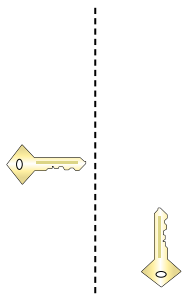





Determinar si la figura se está trasladando (deslizando), rotando (girando) o reflejando (volteando)

**Respuestas**

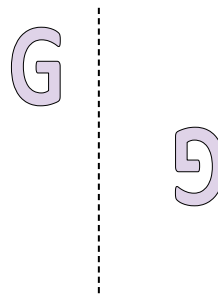
1)



2)

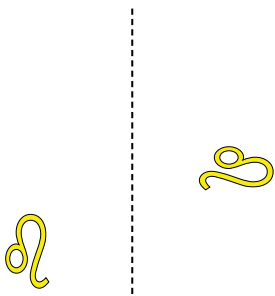


3)

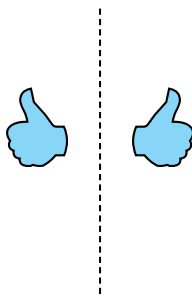


1. \_\_\_\_\_

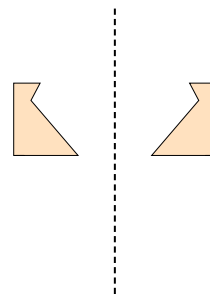
4)



5)



6)



2. \_\_\_\_\_

3. \_\_\_\_\_

4. \_\_\_\_\_

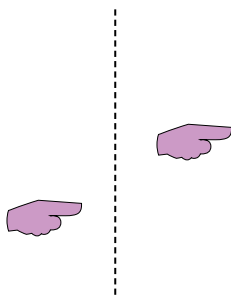
5. \_\_\_\_\_

6. \_\_\_\_\_

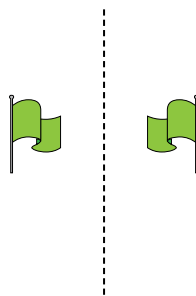
7. \_\_\_\_\_

8. \_\_\_\_\_

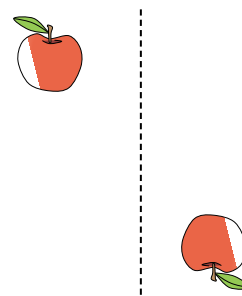
7)



8)



9)



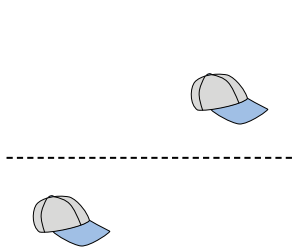
9. \_\_\_\_\_

10. \_\_\_\_\_

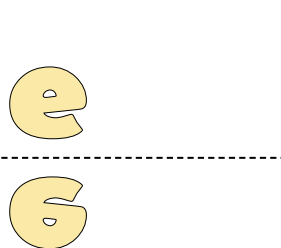
11. \_\_\_\_\_

12. \_\_\_\_\_

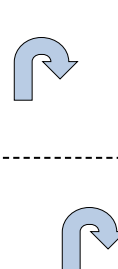
10)



11)



12)

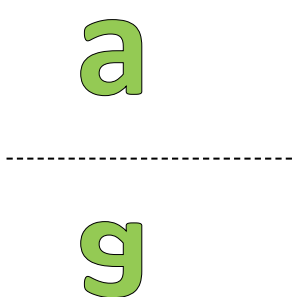


13. \_\_\_\_\_

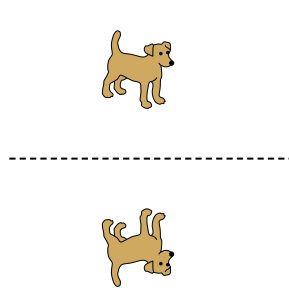
14. \_\_\_\_\_

15. \_\_\_\_\_

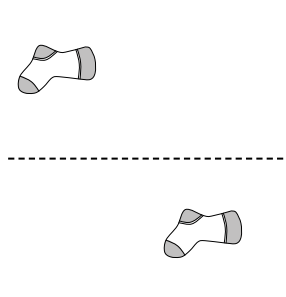
13)



14)



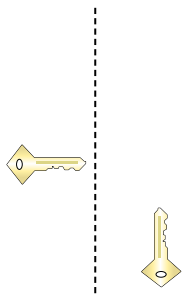
15)






Determinar si la figura se está trasladando (deslizando), rotando (girando) o reflejando (volteando)

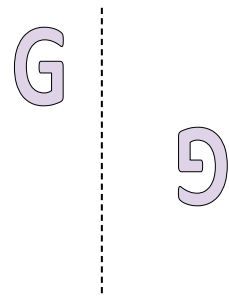
1)



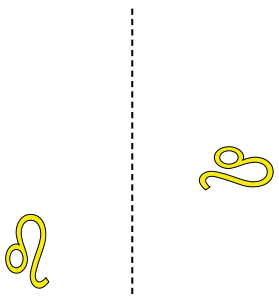
2)



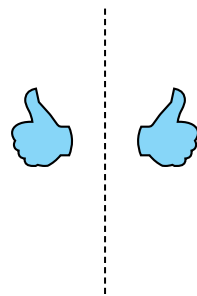
3)



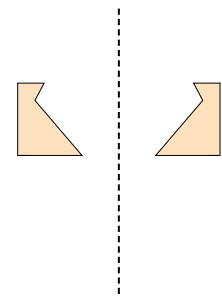
4)



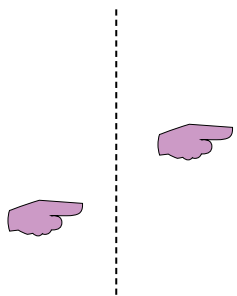
5)



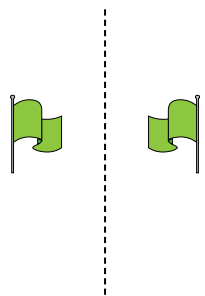
6)



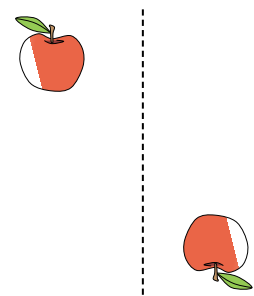
7)



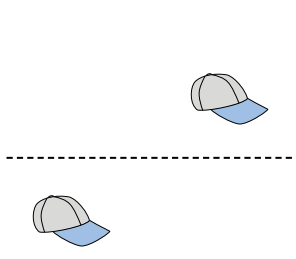
8)



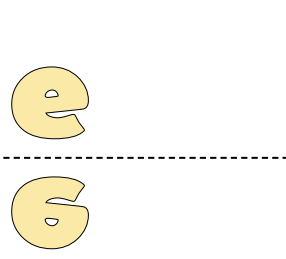
9)



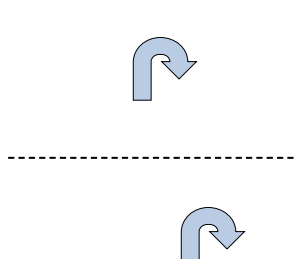
10)



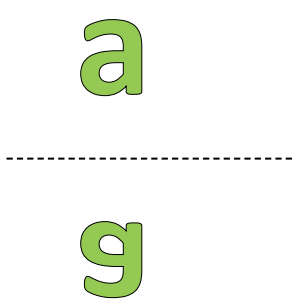
11)



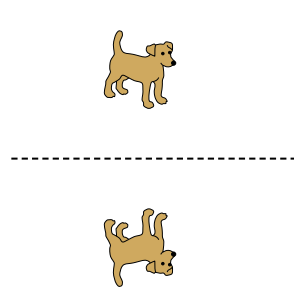
12)



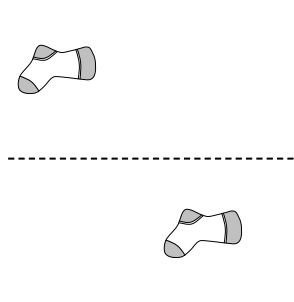
13)



14)



15)



**Respuestas**

1. girando

2. deslizando

3. girando

4. girando

5. volteando

6. volteando

7. deslizando

8. volteando

9. girando

10. deslizando

11. volteando

12. deslizando

13. volteando

14. volteando

15. deslizando