





Determinar si la figura se está trasladando (deslizando), rotando (girando) o reflejando (volteando)

**Respuestas**


1)



2)



3)



1. \_\_\_\_\_

2. \_\_\_\_\_

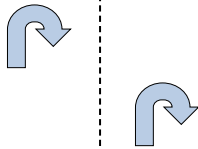
3. \_\_\_\_\_

4. \_\_\_\_\_

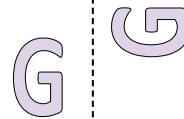
4)



5)



6)



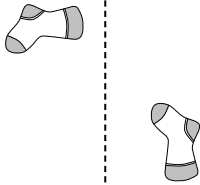
5. \_\_\_\_\_

6. \_\_\_\_\_

7. \_\_\_\_\_

8. \_\_\_\_\_

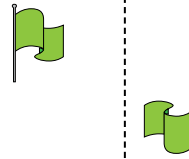
7)



8)



9)



9. \_\_\_\_\_

10. \_\_\_\_\_

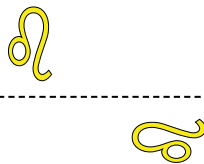
11. \_\_\_\_\_

12. \_\_\_\_\_


10)



11)



12)




13. \_\_\_\_\_


14. \_\_\_\_\_

15. \_\_\_\_\_

13)



14)

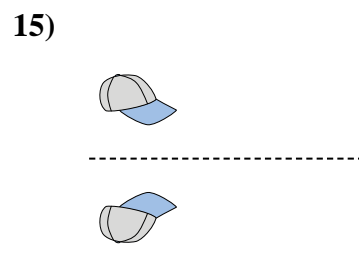
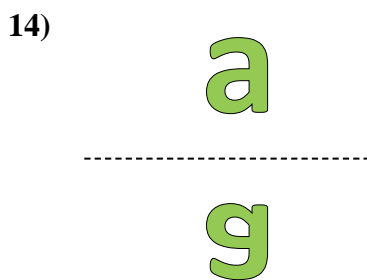
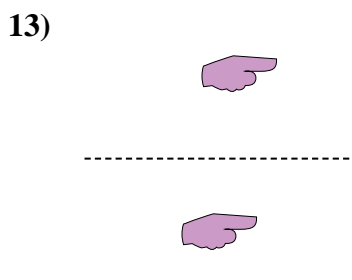
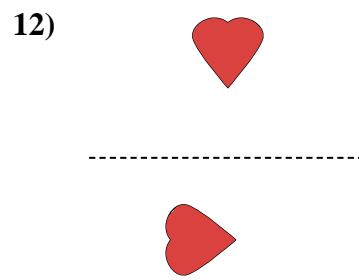
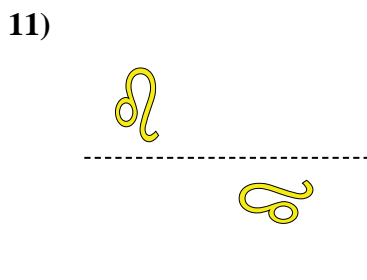
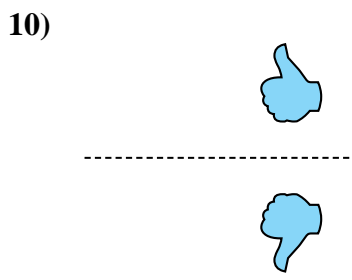
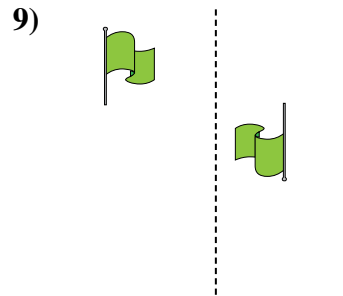
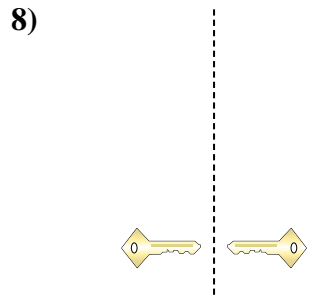
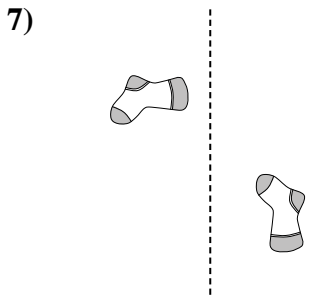
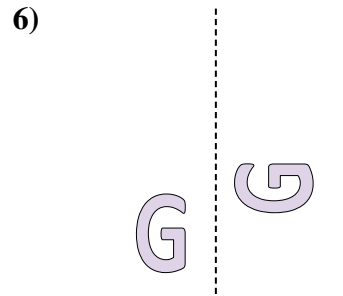
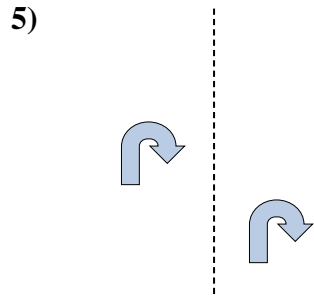
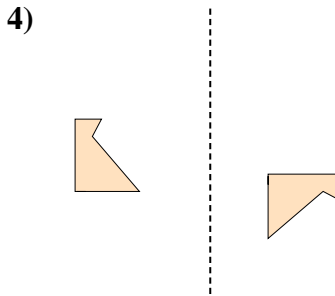
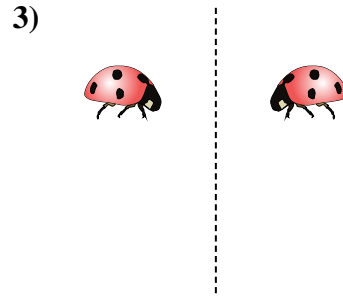
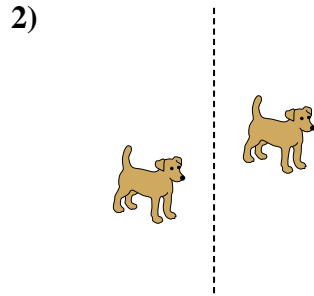
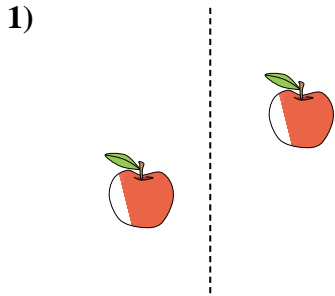


15)





Determinar si la figura se está trasladando (deslizando), rotando (girando) o reflejando (volteando)



**Respuestas**

1. **deslizando**

2. **deslizando**

3. **volteando**

4. **girando**

5. **deslizando**

6. **girando**

7. **girando**

8. **volteando**

9. **girando**

10. **volteando**

11. **girando**

12. **girando**

13. **deslizando**

14. **volteando**

15. **volteando**