




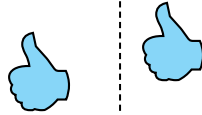
Determinar si la figura se está trasladando (deslizando), rotando (girando) o reflejando (volteando)

Respuestas

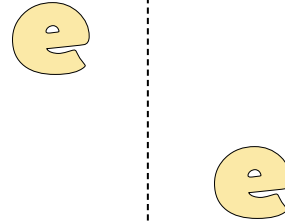
1)



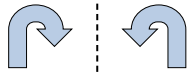
2)



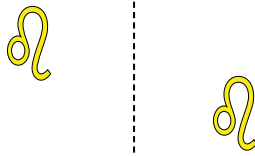
3)




4)



5)



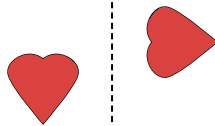
6)



7)



8)




9)




10)



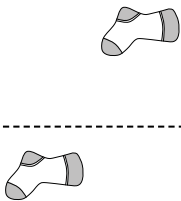
11)



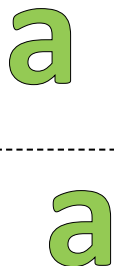
12)



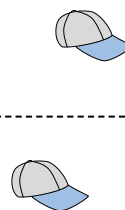
13)



14)



15)

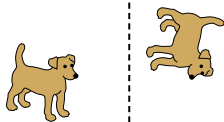


1. _____
2. _____
3. _____
4. _____
5. _____
6. _____
7. _____
8. _____
9. _____
10. _____
11. _____
12. _____
13. _____
14. _____
15. _____

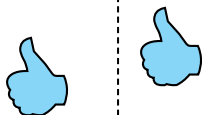


Determinar si la figura se está trasladando (deslizando), rotando (girando) o reflejando (volteando)

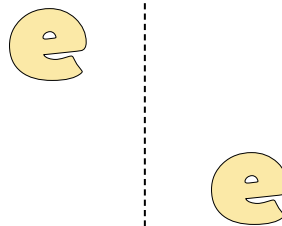
1)



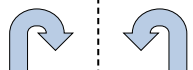
2)



3)




4)



5)



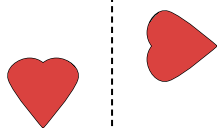
6)



7)



8)



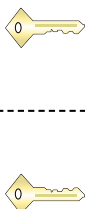
9)



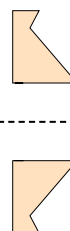
10)



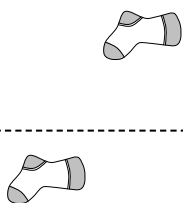
11)



12)



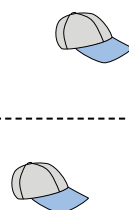
13)



14)



15)



Respuestas

1. **girando**

2. **deslizando**

3. **deslizando**

4. **volteando**

5. **deslizando**

6. **girando**

7. **girando**

8. **girando**

9. **volteando**

10. **volteando**

11. **volteando**

12. **volteando**

13. **deslizando**

14. **deslizando**

15. **deslizando**