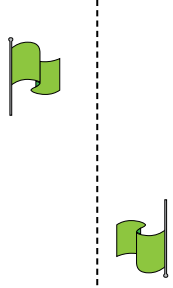




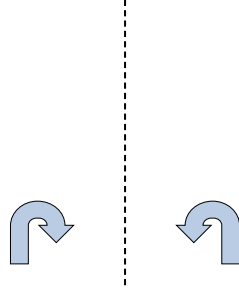
Determinar si la figura se está trasladando (deslizando), rotando (girando) o reflejando (volteando)

Respuestas

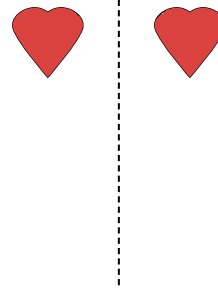
1)



2)



3)



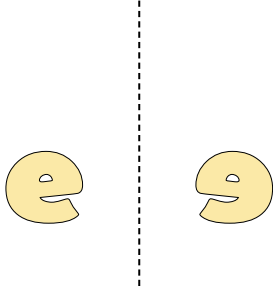
1. _____

2. _____


3. _____

4. _____

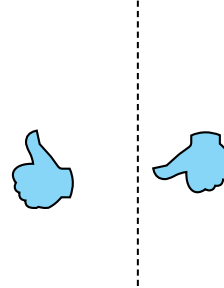
4)



5)



6)



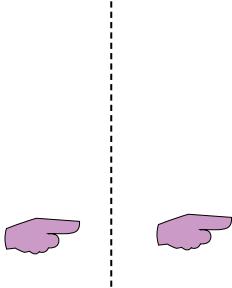
5. _____

6. _____

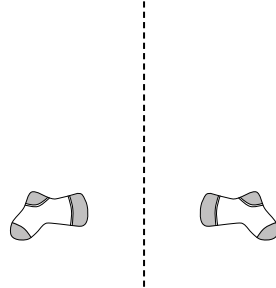
7. _____

8. _____

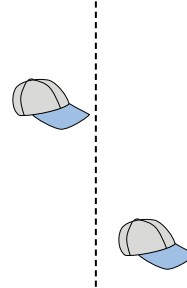
7)



8)



9)



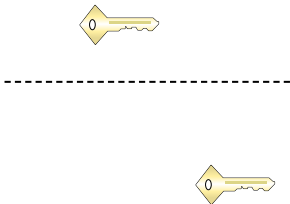
9. _____

10. _____

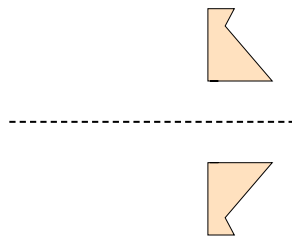
11. _____

12. _____

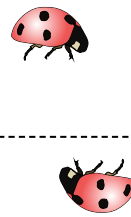
10)



11)



12)




13. _____

14. _____

15. _____

13)



14)



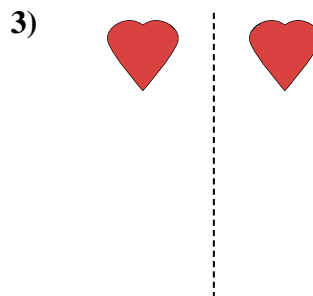
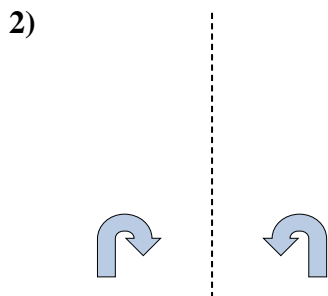

15)



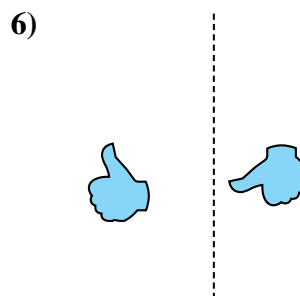
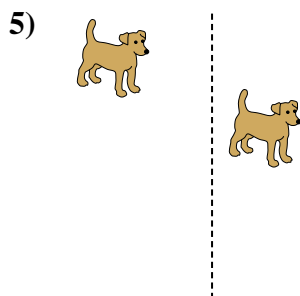
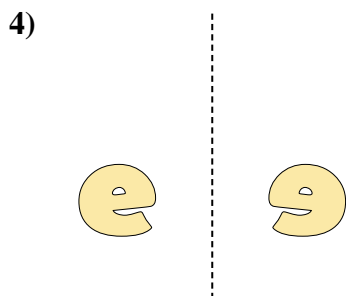


Determinar si la figura se está trasladando (deslizando), rotando (girando) o reflejando (volteando)

Respuestas



1. girando



2. volteando

3. volteando

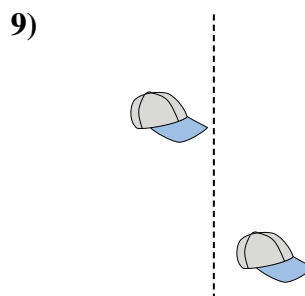
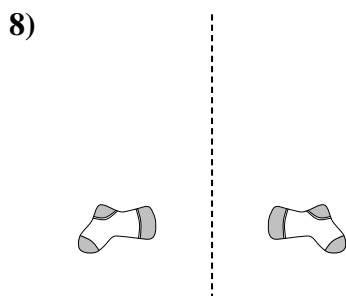
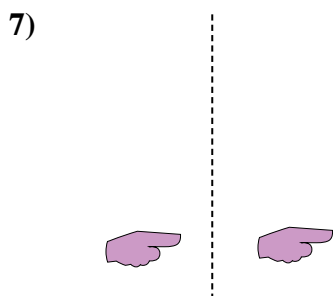
4. volteando

5. deslizando

6. girando

7. deslizando

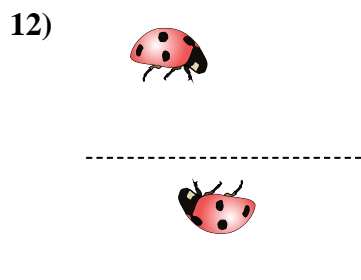
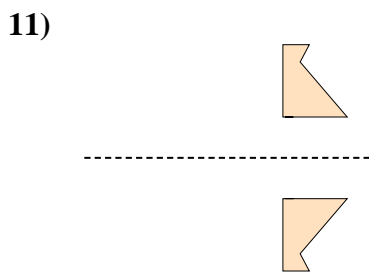
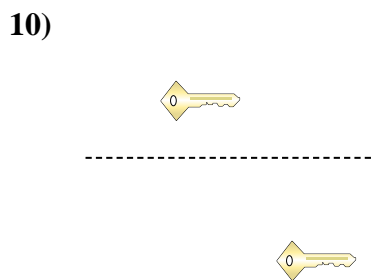
8. volteando



9. deslizando

10. deslizando

11. volteando

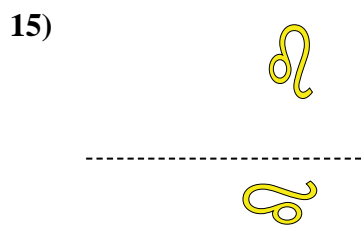
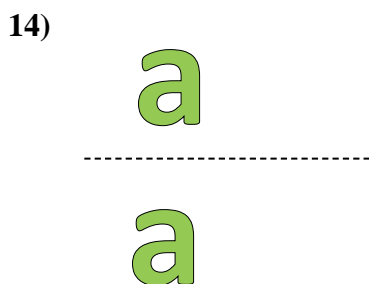



12. girando

13. girando

14. deslizando

15. girando

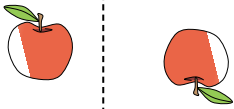




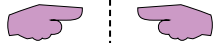
Determinar si la figura se está trasladando (deslizando), rotando (girando) o reflejando (volteando)

Respuestas


1)



2)



3)

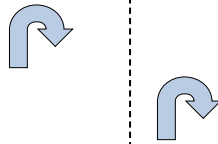


1. _____

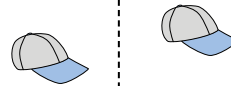
4)



5)



6)



2. _____

3. _____

4. _____

5. _____

6. _____


7. _____

8. _____

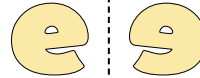
7)



8)



9)



9. _____

10. _____

11. _____

12. _____

10)



11)



12)



13. _____

14. _____

15. _____



13)



14)



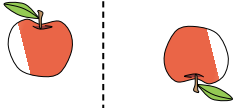
15)



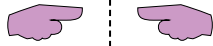


Determinar si la figura se está trasladando (deslizando), rotando (girando) o reflejando (volteando)

1)



2)



3)



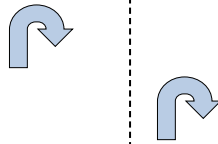
1.

girando

4)



5)



6)



2.

volteando

3.

girando

4.

volteando

5.

deslizando

6.

deslizando


7.

deslizando


8.

volteando

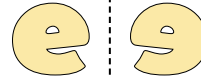
7)



8)



9)



9.

volteando

10.

girando

11.

girando

12.

girando

10)



11)



12)



13.

volteando

14.

deslizando

15.

deslizando

13)



14)



15)

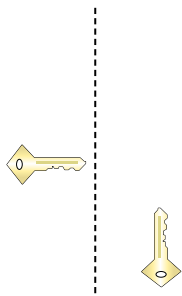





Determinar si la figura se está trasladando (deslizando), rotando (girando) o reflejando (volteando)

Respuestas

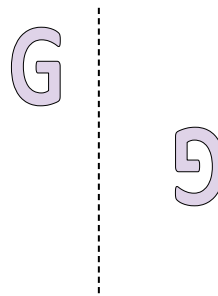
1)



2)

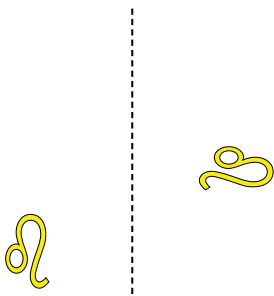


3)

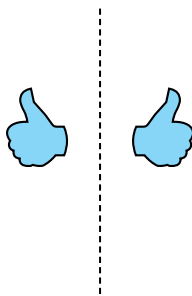


1. _____

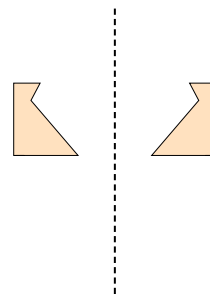
4)



5)



6)



2. _____

3. _____

4. _____

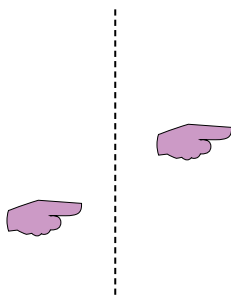
5. _____

6. _____

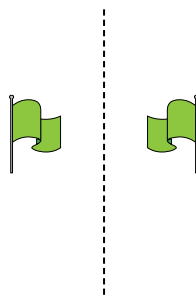
7. _____

8. _____

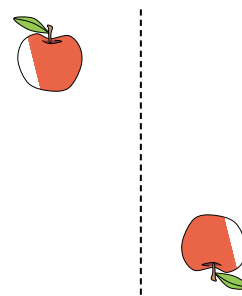
7)



8)



9)



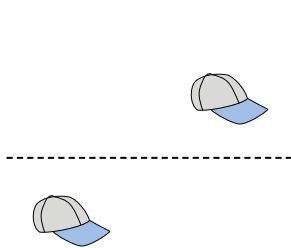
9. _____

10. _____

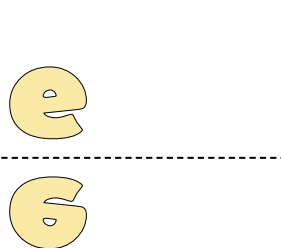
11. _____

12. _____

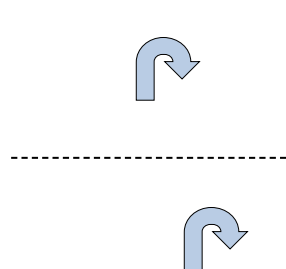
10)



11)



12)

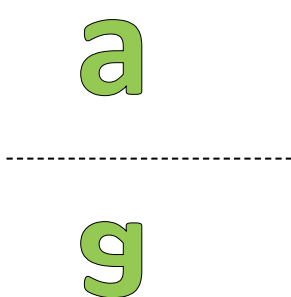


13. _____

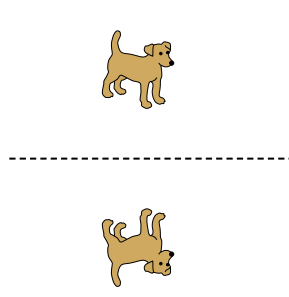
14. _____

15. _____

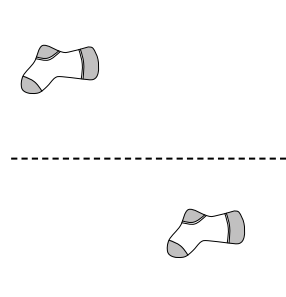
13)



14)



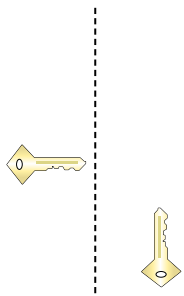
15)






Determinar si la figura se está trasladando (deslizando), rotando (girando) o reflejando (volteando)

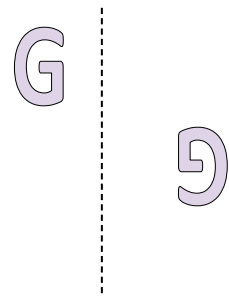
1)



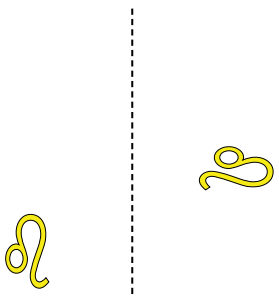
2)



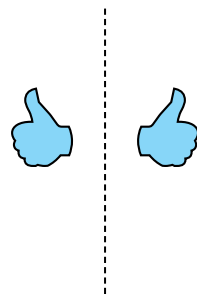
3)



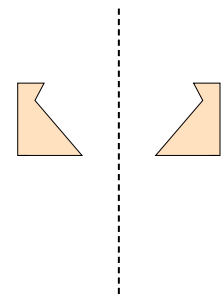
4)



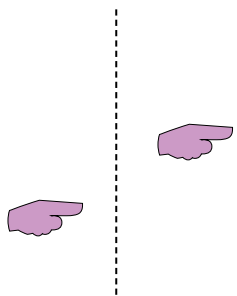
5)



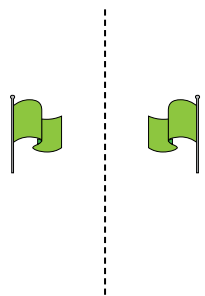
6)



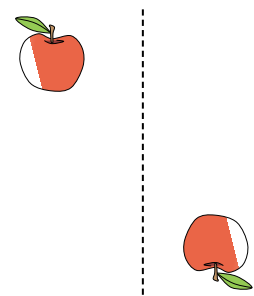
7)



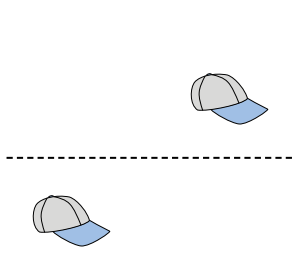
8)



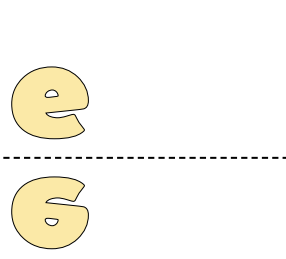
9)



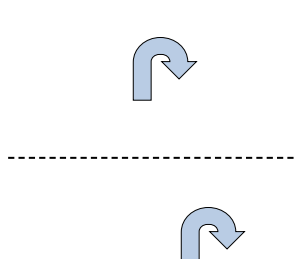
10)



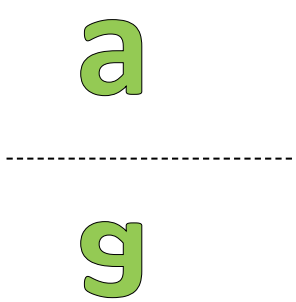
11)



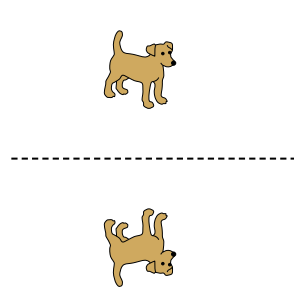
12)



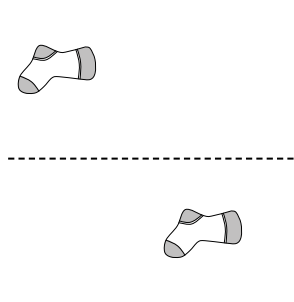
13)



14)



15)



Respuestas

1. girando

2. deslizando

3. girando

4. girando

5. volteando

6. volteando

7. deslizando

8. volteando

9. girando

10. deslizando

11. volteando

12. deslizando

13. volteando

14. volteando

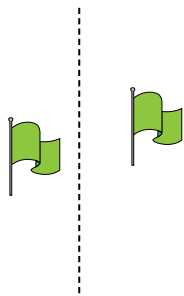
15. deslizando



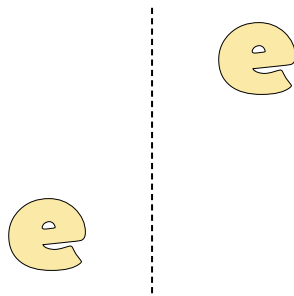
Determinar si la figura se está trasladando (deslizando), rotando (girando) o reflejando (volteando)

Respuestas

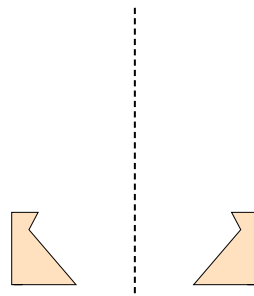
1)



2)



3)



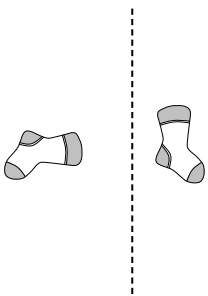
1. _____

2. _____

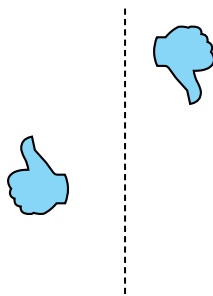
3. _____

4. _____

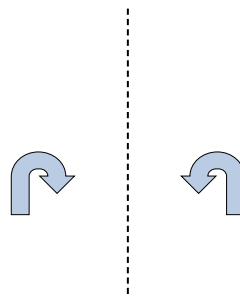
4)



5)



6)



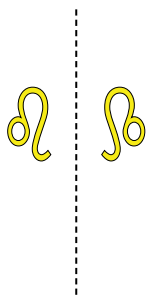
5. _____

6. _____


7. _____

8. _____


7)



8)



9)



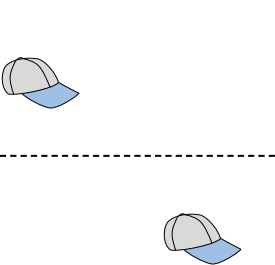
9. _____

10. _____

11. _____

12. _____

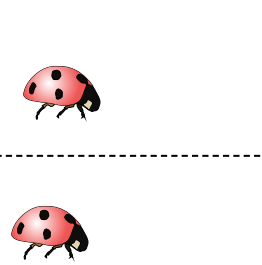
10)



11)



12)

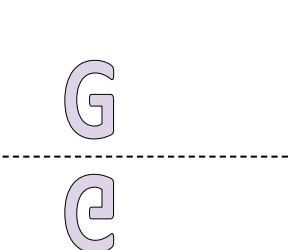


13. _____

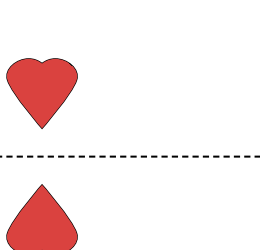
14. _____

15. _____

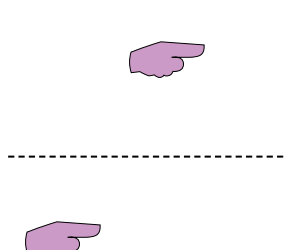
13)



14)

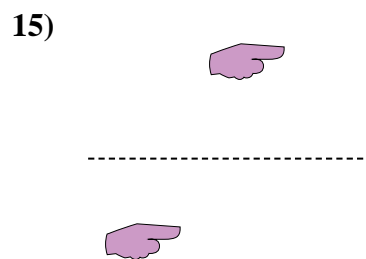
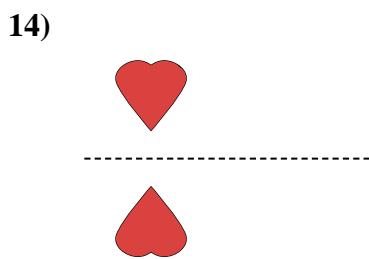
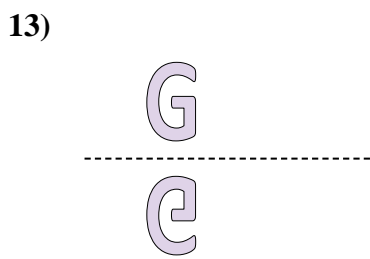
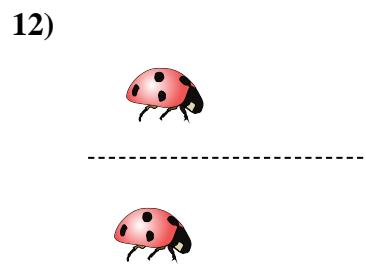
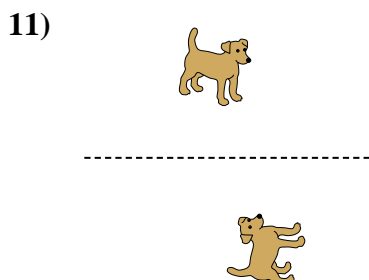
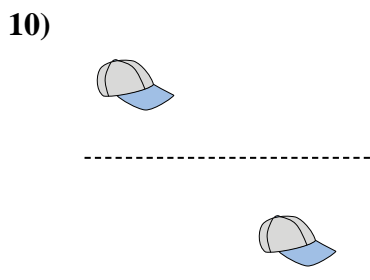
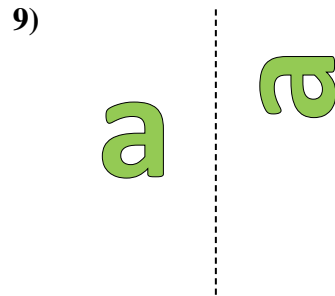
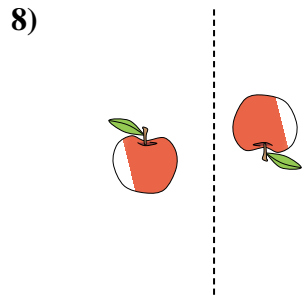
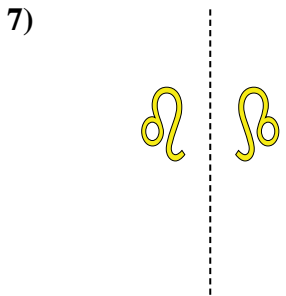
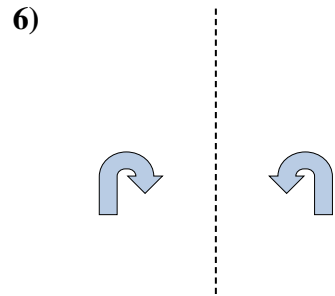
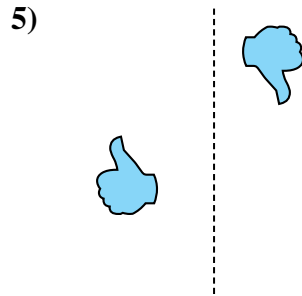
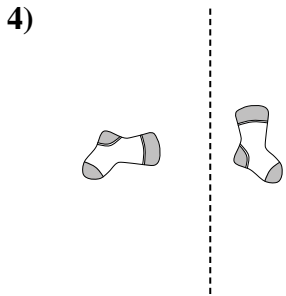
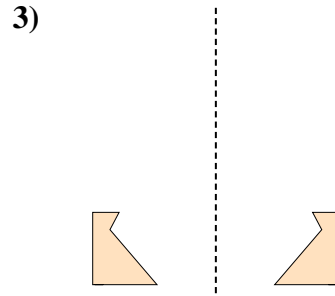
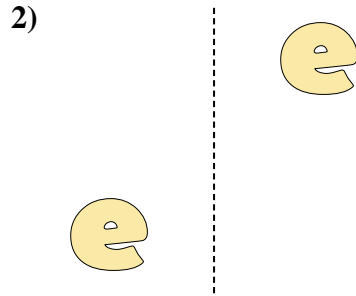
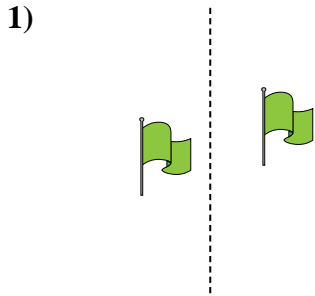


15)





Determinar si la figura se está trasladando (deslizando), rotando (girando) o reflejando (volteando)



Respuestas

1. **deslizando**

2. **deslizando**

3. **volteando**

4. **girando**

5. **girando**

6. **volteando**

7. **volteando**

8. **girando**

9. **girando**

10. **deslizando**

11. **girando**

12. **deslizando**

13. **volteando**

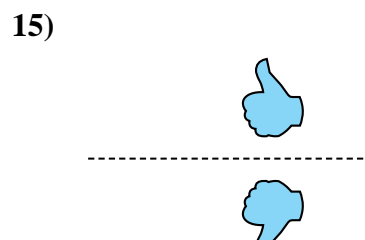
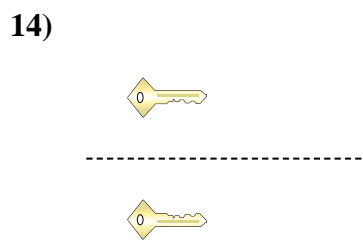
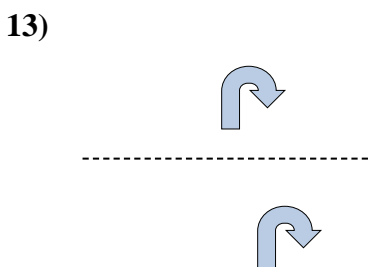
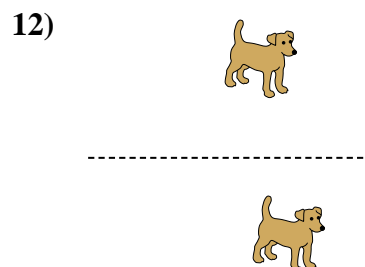
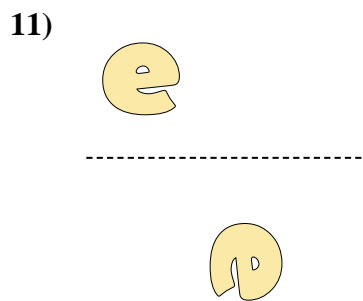
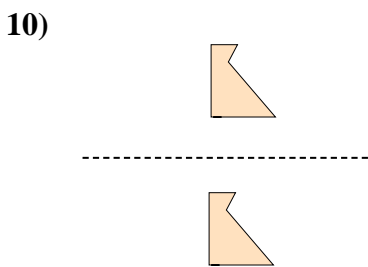
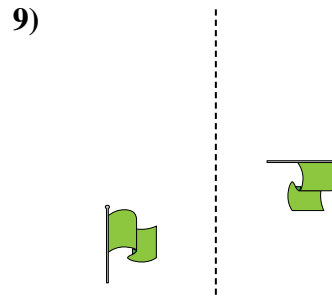
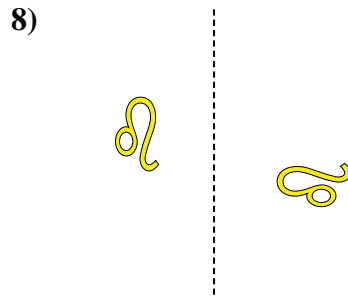
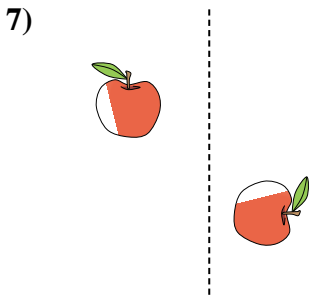
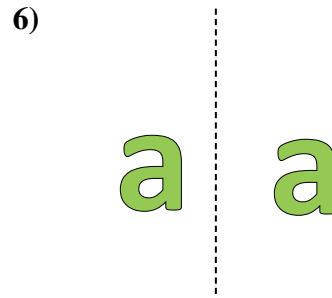
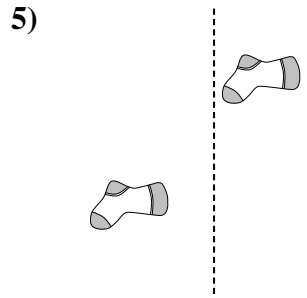
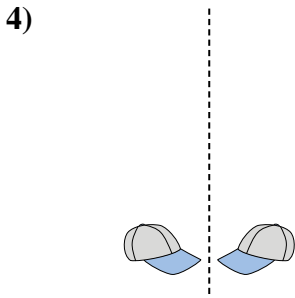
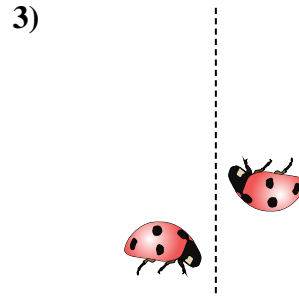
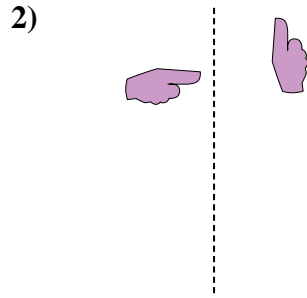
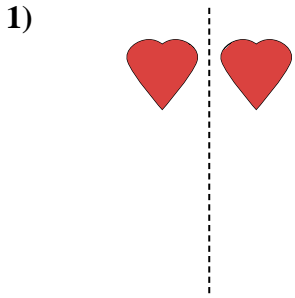
14. **volteando**

15. **deslizando**



Determinar si la figura se está trasladando (deslizando), rotando (girando) o reflejando (volteando)

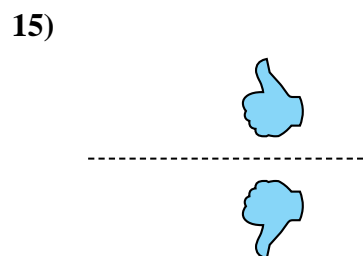
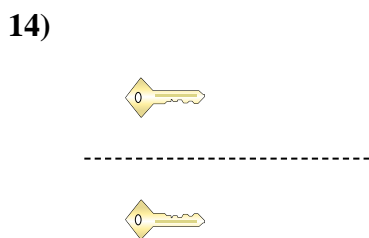
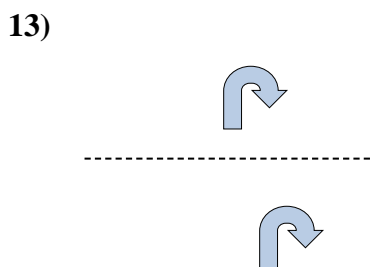
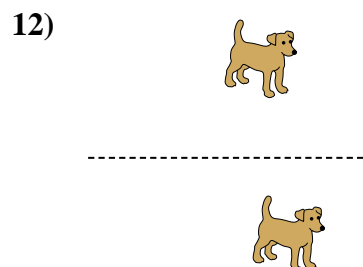
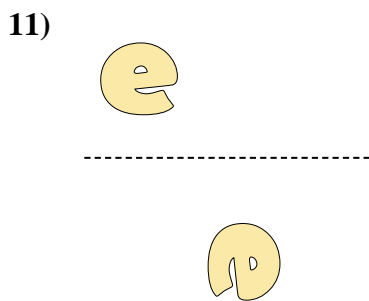
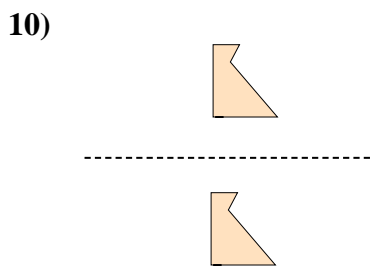
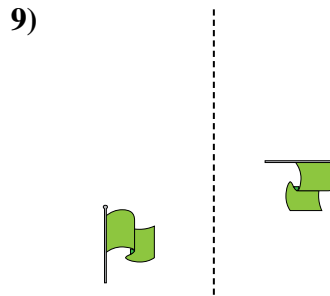
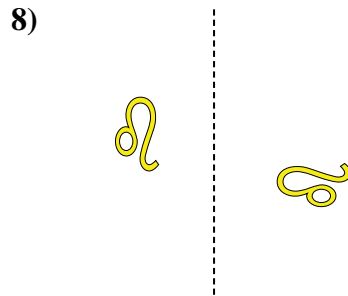
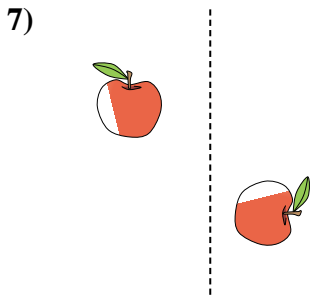
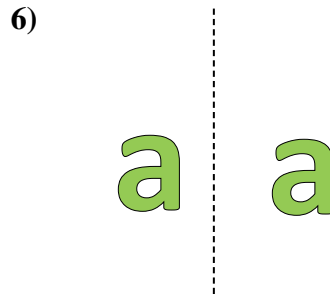
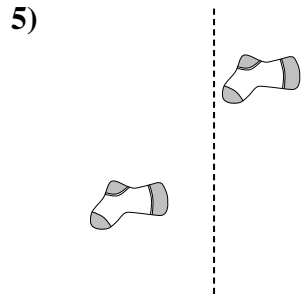
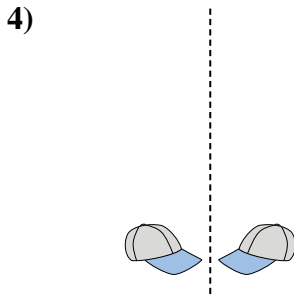
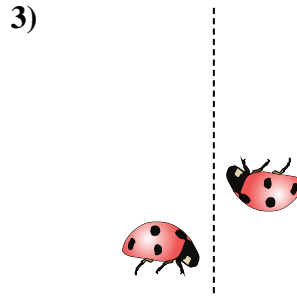
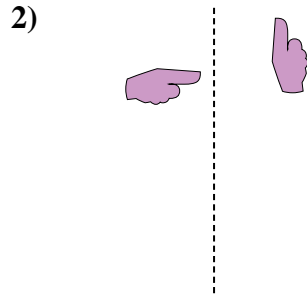
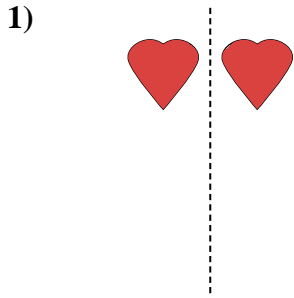
Respuestas



1. _____
2. _____
3. _____
4. _____
5. _____
6. _____
7. _____
8. _____
9. _____
10. _____
11. _____
12. _____
13. _____
14. _____
15. _____



Determinar si la figura se está trasladando (deslizando), rotando (girando) o reflejando (volteando)



Respuestas

1. volteando

2. girando

3. girando

4. volteando

5. deslizando

6. deslizando

7. girando

8. girando

9. girando

10. deslizando

11. girando

12. deslizando

13. deslizando

14. volteando


15. volteando



Determinar si la figura se está trasladando (deslizando), rotando (girando) o reflejando (volteando)

Respuestas

1)



2)



3)



1. _____

2. _____

3. _____

4. _____

4)



5)



6)



5. _____

6. _____

7. _____

8. _____

7)



8)



9)



9. _____

10. _____

11. _____

12. _____

10)



11)



12)



13. _____

14. _____

15. _____



13)



14)



15)





Determinar si la figura se está trasladando (deslizando), rotando (girando) o reflejando (volteando)

1)



2)



3)



4)



5)



6)



7)



8)



9)



10)



11)



12)



13)



14)



15)



Respuestas

1. volteando

2. deslizando

3. girando

4. deslizando

5. deslizando

6. girando

7. volteando

8. volteando

9. deslizando

10. deslizando

11. deslizando

12. volteando

13. girando

14. girando


15. girando




Determinar si la figura se está trasladando (deslizando), rotando (girando) o reflejando (volteando)

Respuestas


1)



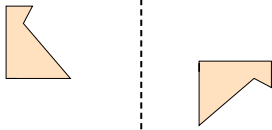
2)



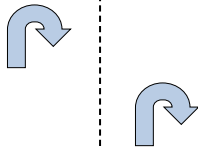
3)



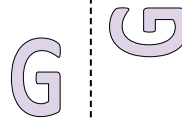
4)



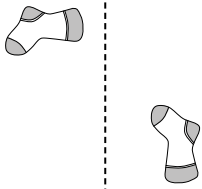
5)



6)



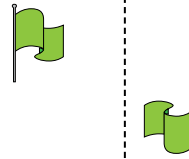
7)




8)



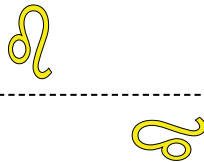
9)




10)



11)




12)



13)



14)



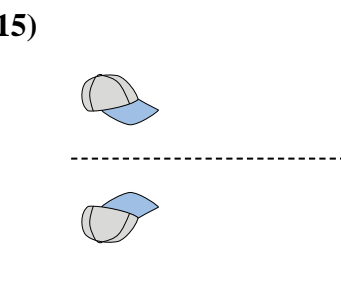
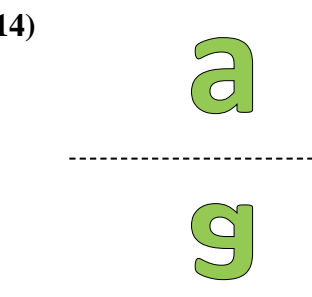
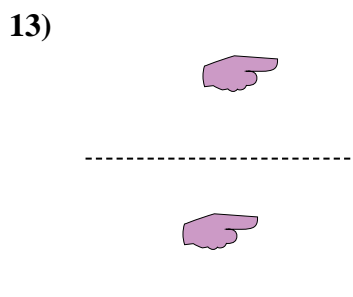
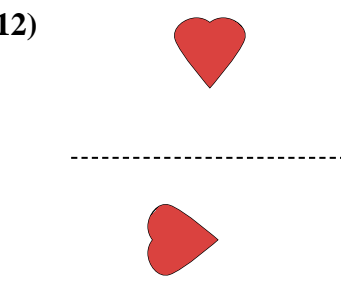
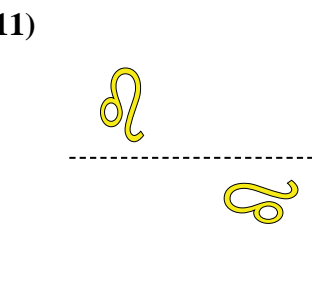
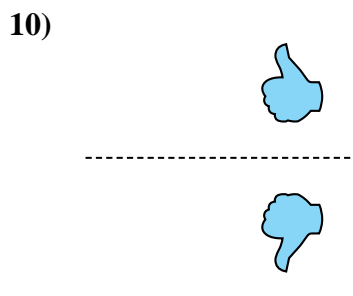
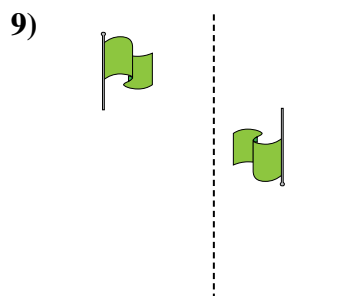
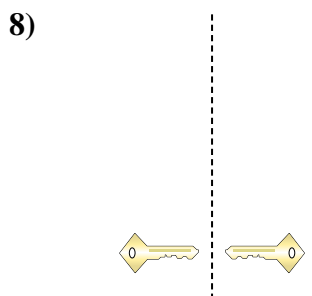
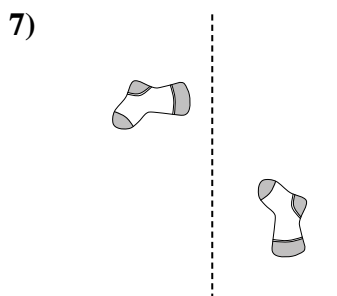
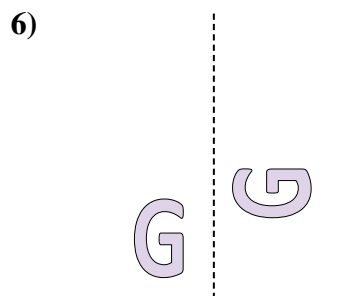
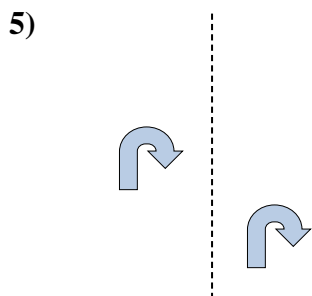
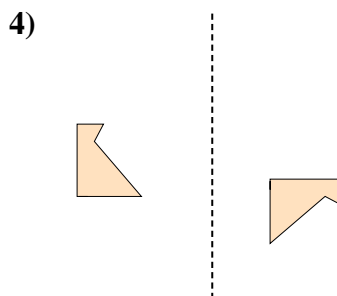
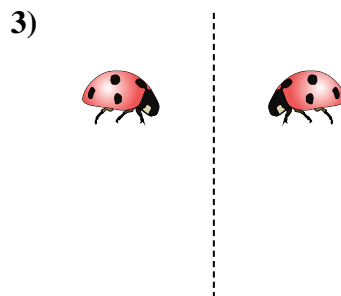
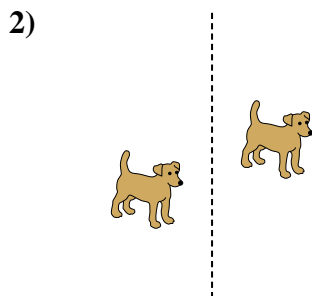
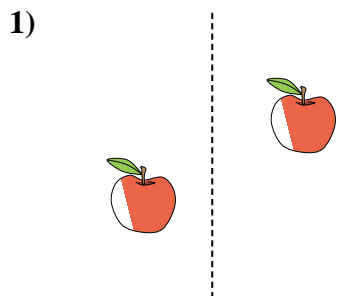
15)



1. _____
2. _____
3. _____
4. _____
5. _____
6. _____
7. _____
8. _____
9. _____
10. _____
11. _____
12. _____
13. _____
14. _____
15. _____



Determinar si la figura se está trasladando (deslizando), rotando (girando) o reflejando (volteando)



Respuestas

1. deslizando

2. deslizando

3. volteando

4. girando

5. deslizando

6. girando

7. girando

8. volteando

9. girando

10. volteando

11. girando

12. girando

13. deslizando

14. volteando

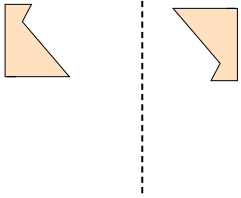
15. volteando



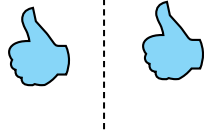
Determinar si la figura se está trasladando (deslizando), rotando (girando) o reflejando (volteando)

Respuestas

1)



2)



3)



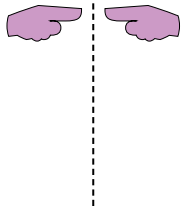
1. _____

2. _____

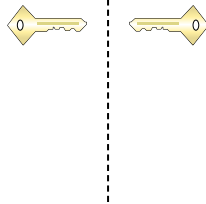
3. _____

4. _____

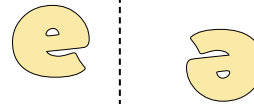
4)



5)



6)



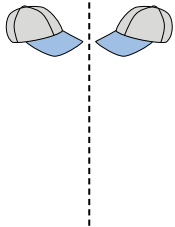
5. _____

6. _____

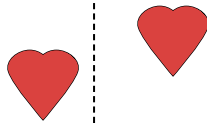
7. _____

8. _____

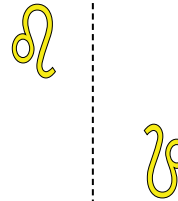
7)



8)



9)



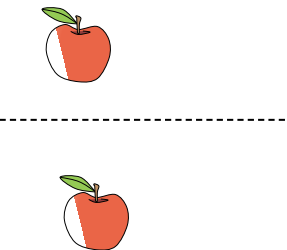
9. _____

10. _____

11. _____

12. _____

10)



11)



12)



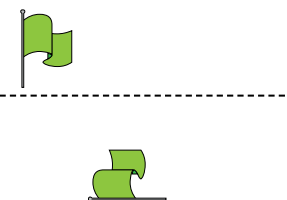
13. _____

14. _____

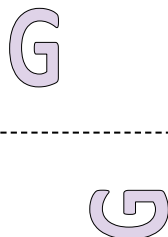
15. _____




13)



14)

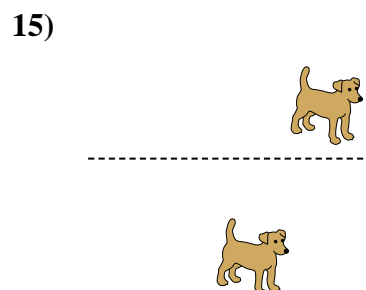
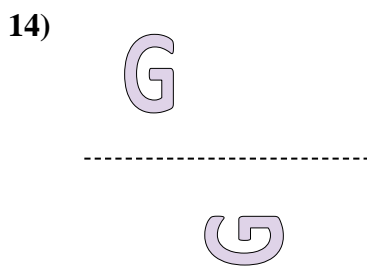
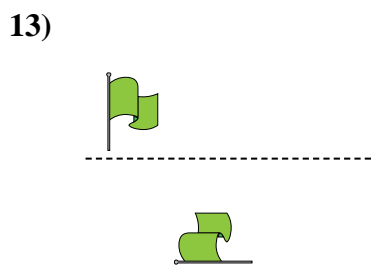
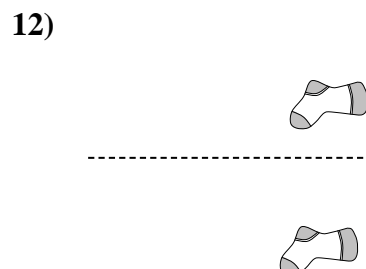
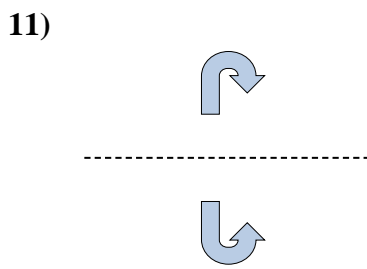
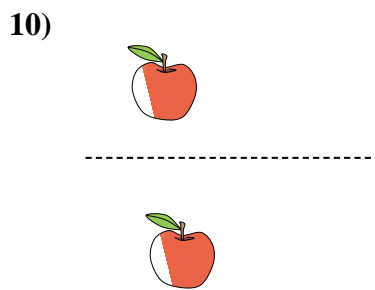
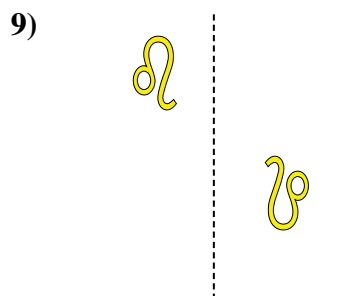

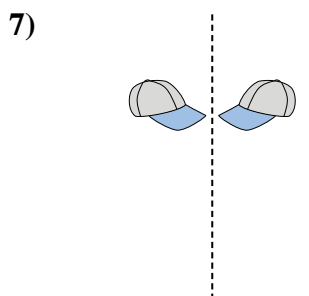
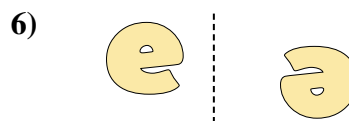
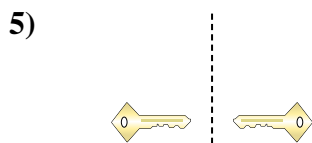
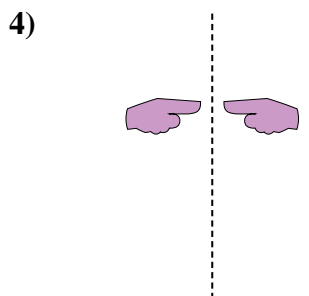

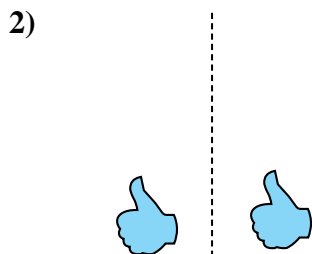
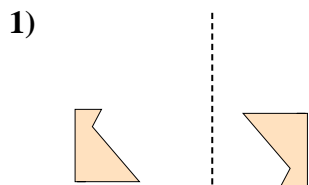


15)





Determinar si la figura se está trasladando (deslizando), rotando (girando) o reflejando (volteando)



Respuestas

1. girando

2. deslizando

3. volteando

4. volteando

5. volteando

6. girando

7. volteando

8. deslizando

9. girando

10. deslizando

11. volteando

12. deslizando

13. girando

14. girando


15. deslizando



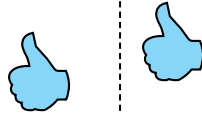
Determinar si la figura se está trasladando (deslizando), rotando (girando) o reflejando (volteando)

Respuestas

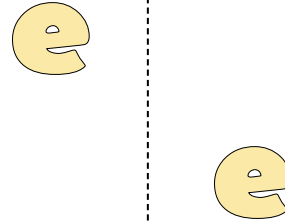
1)



2)



3)



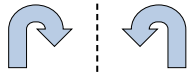
1. _____

2. _____

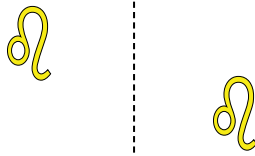
3. _____

4. _____


4)



5)



6)



5. _____

6. _____

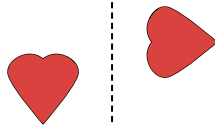
7. _____

8. _____

7)



8)



9)



9. _____

10. _____


11. _____

12. _____


10)



11)



12)

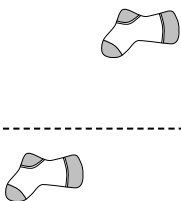


13. _____

14. _____

15. _____

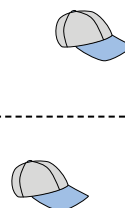
13)



14)




15)



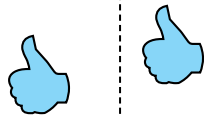


Determinar si la figura se está trasladando (deslizando), rotando (girando) o reflejando (volteando)

1)



2)



3)



4)



5)



6)



7)



8)



9)



10)



11)



12)



13)



14)



15)



Respuestas

1. girando

2. deslizando

3. deslizando

4. volteando

5. deslizando

6. girando

7. girando

8. girando

9. volteando

10. volteando

11. volteando

12. volteando

13. deslizando

14. deslizando

15. deslizando



Determinar si la figura se está trasladando (deslizando), rotando (girando) o reflejando (volteando)

Respuestas


1)



2)



3)



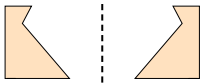
1. _____

2. _____

3. _____

4. _____


4)



5)



6)




5. _____

6. _____

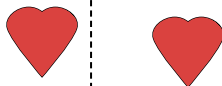
7. _____

8. _____

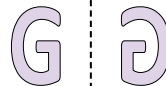
7)



8)



9)



9. _____

10. _____

11. _____

12. _____

10)



11)



12)



13. _____

14. _____

15. _____

13)



14)



15)





Determinar si la figura se está trasladando (deslizado), rotando (girando) o reflejando (volteando)


1)



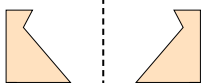
2)



3)




4)



5)



6)



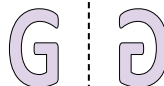
7)



8)



9)



10)



11)



12)



13)



14)



15)



Respuestas

1. **deslizado**

2. **girando**

3. **deslizado**

4. **volteando**

5. **girando**

6. **deslizado**

7. **volteando**

8. **deslizado**

9. **volteando**

10. **deslizado**

11. **deslizado**

12. **girando**

13. **girando**

14. **girando**

15. **volteando**