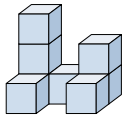



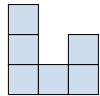




Resuelve cada problema.

Respuestas

1) If you were looking at the 3d shape from above what would you see?



- A. 
- B. 
- C. 
- D. 

1. _____

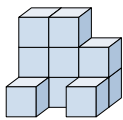
2. _____





3. _____

4. _____

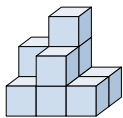
5. _____


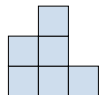


2) If you were looking at the 3d shape from above what would you see?



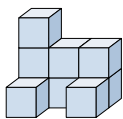
- A. 
- B. 
- C. 
- D. 


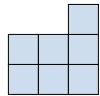


3) If you were looking at the 3d shape from the right side what would you see?



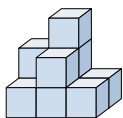
- A. 
- B. 
- C. 
- D. 





4) If you were looking at the 3d shape from above what would you see?



- A. 
- B. 
- C. 
- D. 

5) If you were looking at the 3d shape from above what would you see?



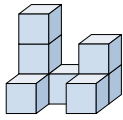
- A. 
- B. 
- C. 
- D. 



Resuelve cada problema.

Respuestas

1) If you were looking at the 3d shape from above what would you see?

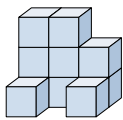


A. B. C. D.



1. **A**

2) If you were looking at the 3d shape from above what would you see?

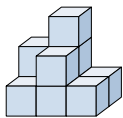


A. B. C. D.



2. **C**

3) If you were looking at the 3d shape from the right side what would you see?

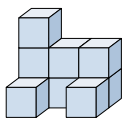


A. B. C. D.



3. **D**

4) If you were looking at the 3d shape from above what would you see?

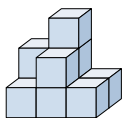


A. B. C. D.



4. **A**

5) If you were looking at the 3d shape from above what would you see?



A. B. C. D.



5. **C**