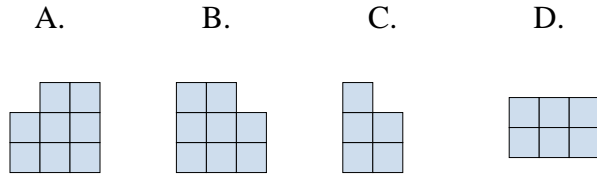
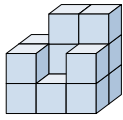




Resuelve cada problema.

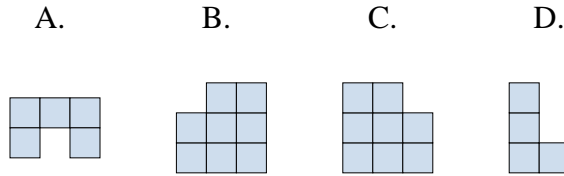
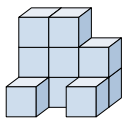
Respuestas

1) If you were looking at the 3d shape from the left side what would you see?



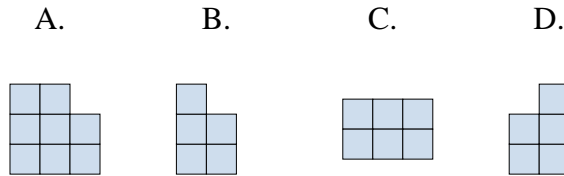
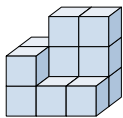
1. _____

2) If you were looking at the 3d shape from above what would you see?



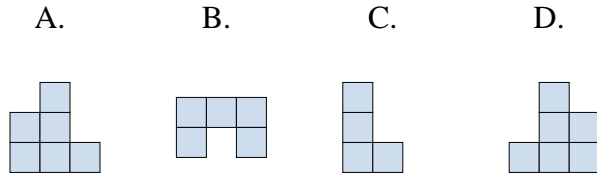
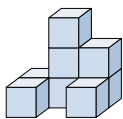
2. _____

3) If you were looking at the 3d shape from the back what would you see?



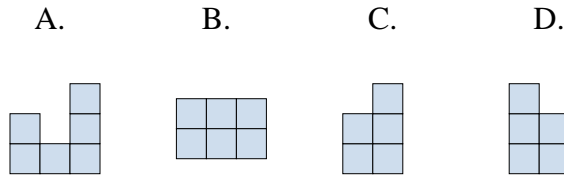
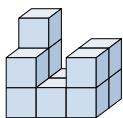
3. _____

4) If you were looking at the 3d shape from the left side what would you see?



4. _____

5) If you were looking at the 3d shape from the left side what would you see?



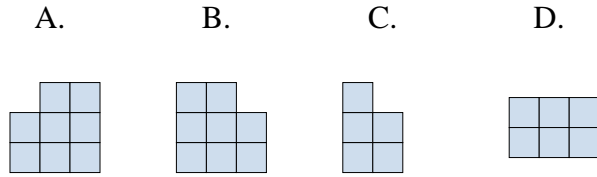
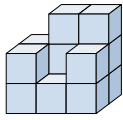
5. _____



Resuelve cada problema.

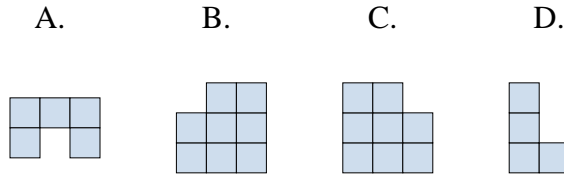
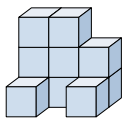
Respuestas

1) If you were looking at the 3d shape from the left side what would you see?



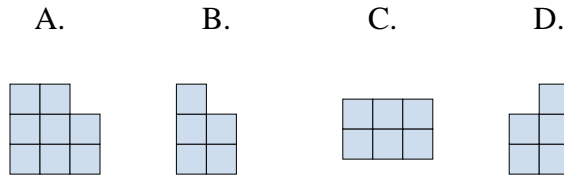
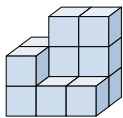
1. **C**

2) If you were looking at the 3d shape from above what would you see?



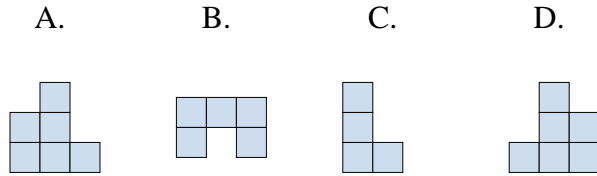
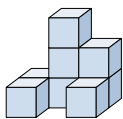
2. **A**

3) If you were looking at the 3d shape from the back what would you see?



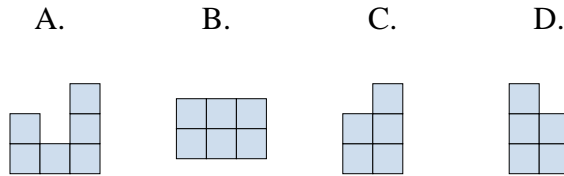
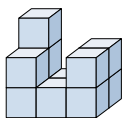
3. **A**

4) If you were looking at the 3d shape from the left side what would you see?



4. **C**

5) If you were looking at the 3d shape from the left side what would you see?



5. **D**