



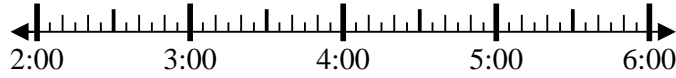
**Resuelve cada problema.**

**Respuestas**

1) Inicio: 2:15

Transcurrido: \_\_\_\_\_

Final: 3:55



1. \_\_\_\_\_

2) Inicio: 2:10

Transcurrido: \_\_\_\_\_

Final: 4:55

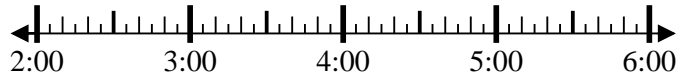


2. \_\_\_\_\_

3) Inicio: 2:45

Transcurrido: \_\_\_\_\_

Final: 4:55



3. \_\_\_\_\_

4) Inicio: 2:20

Transcurrido: \_\_\_\_\_

Final: 3:40



4. \_\_\_\_\_

5) Inicio: 11:05

Transcurrido: \_\_\_\_\_

Final: 1:30



5. \_\_\_\_\_

6) Inicio: 11:05

Transcurrido: \_\_\_\_\_

Final: 1:25

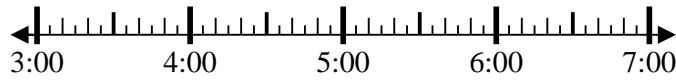


6. \_\_\_\_\_

7) Inicio: 3:45

Transcurrido: \_\_\_\_\_

Final: 6:05

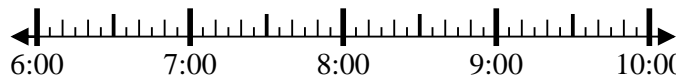


7. \_\_\_\_\_

8) Inicio: 6:20

Transcurrido: \_\_\_\_\_

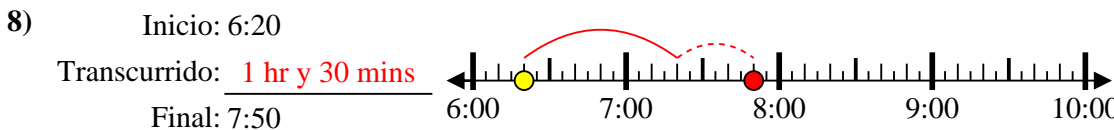
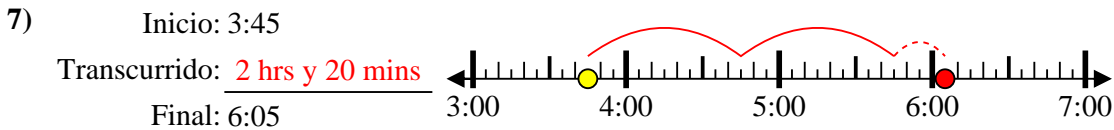
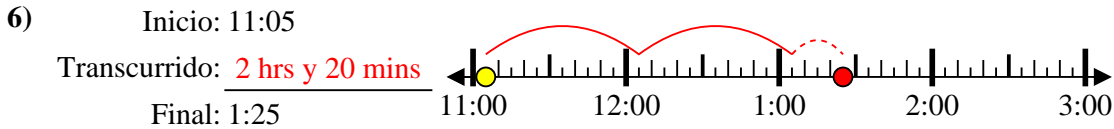
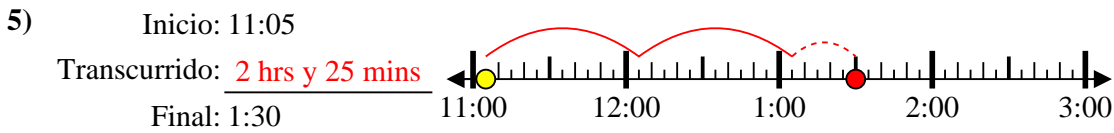
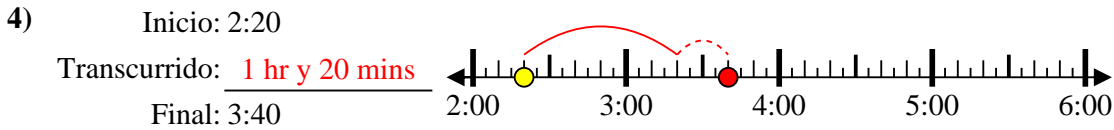
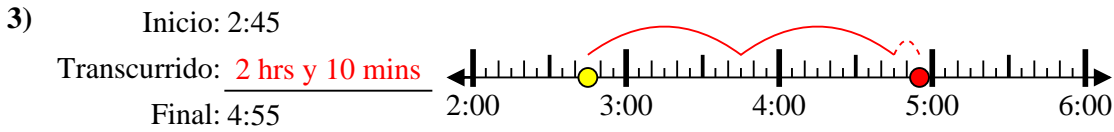
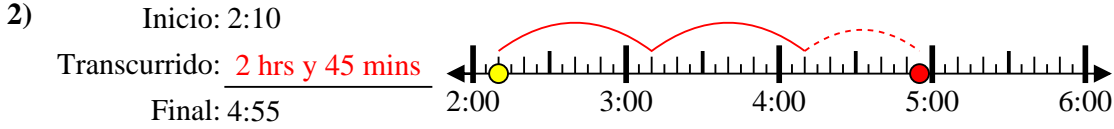
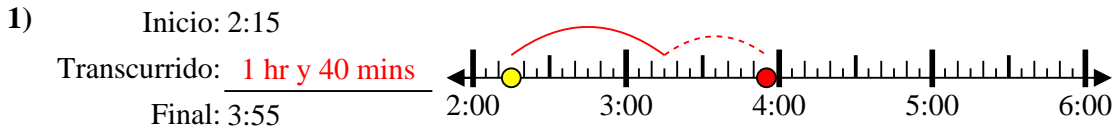
Final: 7:50



8. \_\_\_\_\_



Resuelve cada problema.



**Respuestas**

1. 1 hr y 40 mins

2. 2 hrs y 45 mins

3. 2 hrs y 10 mins

4. 1 hr y 20 mins

5. 2 hrs y 25 mins

6. 2 hrs y 20 mins

7. 2 hrs y 20 mins

8. 1 hr y 30 mins