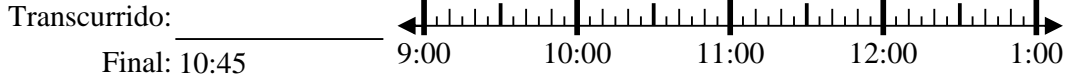


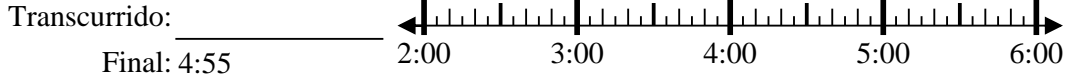


Resuelve cada problema.

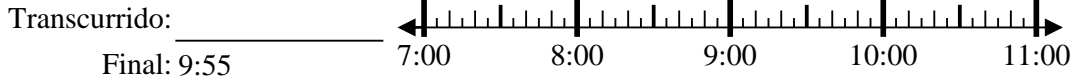
1) Inicio: 9:20



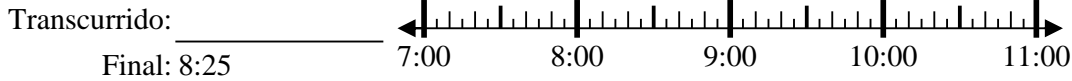
2) Inicio: 2:00



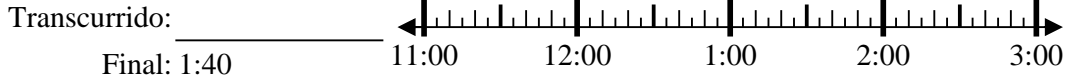
3) Inicio: 7:40



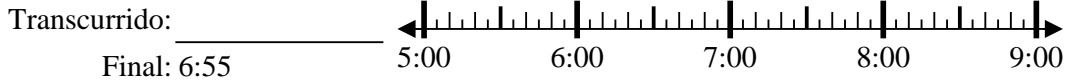
4) Inicio: 7:15



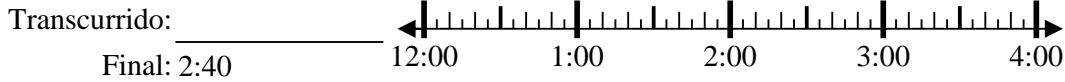
5) Inicio: 11:15



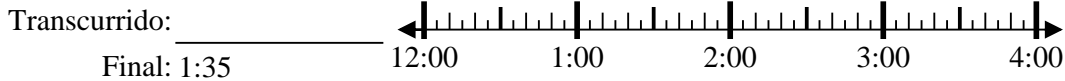
6) Inicio: 5:30



7) Inicio: 12:00



8) Inicio: 12:15



Respuestas

1. _____
2. _____
3. _____
4. _____
5. _____
6. _____
7. _____
8. _____

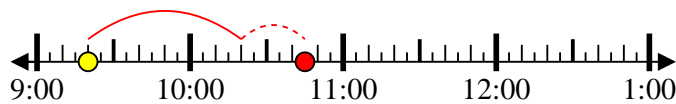


Resuelve cada problema.

1) Inicio: 9:20

Transcurrido: **1 hr y 25 mins**

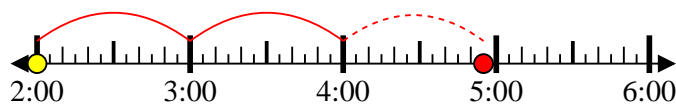
Final: 10:45



2) Inicio: 2:00

Transcurrido: **2 hrs y 55 mins**

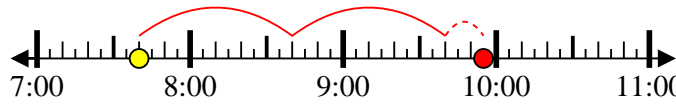
Final: 4:55



3) Inicio: 7:40

Transcurrido: **2 hrs y 15 mins**

Final: 9:55



4) Inicio: 7:15

Transcurrido: **1 hr y 10 mins**

Final: 8:25



5) Inicio: 11:15

Transcurrido: **2 hrs y 25 mins**

Final: 1:40



6) Inicio: 5:30

Transcurrido: **1 hr y 25 mins**

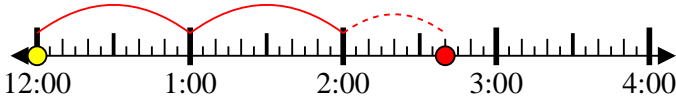
Final: 6:55



7) Inicio: 12:00

Transcurrido: **2 hrs y 40 mins**

Final: 2:40



8) Inicio: 12:15

Transcurrido: **1 hr y 20 mins**

Final: 1:35



Respuestas

1. **1 hr y 25 mins**

2. **2 hrs y 55 mins**

3. **2 hrs y 15 mins**

4. **1 hr y 10 mins**

5. **2 hrs y 25 mins**

6. **1 hr y 25 mins**

7. **2 hrs y 40 mins**

8. **1 hr y 20 mins**