



Resuelve cada problema.

1) Inicio: 6:45

Transcurrido: _____

Final: 7:55



2) Inicio: 6:25

Transcurrido: _____

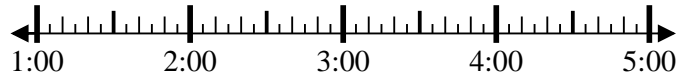
Final: 9:05



3) Inicio: 1:10

Transcurrido: _____

Final: 3:00



4) Inicio: 11:15

Transcurrido: _____

Final: 1:00



5) Inicio: 3:25

Transcurrido: _____

Final: 5:35



6) Inicio: 3:20

Transcurrido: _____

Final: 5:55



7) Inicio: 10:35

Transcurrido: _____

Final: 12:25



8) Inicio: 10:00

Transcurrido: _____

Final: 11:30



Respuestas

1. _____

2. _____

3. _____

4. _____

5. _____

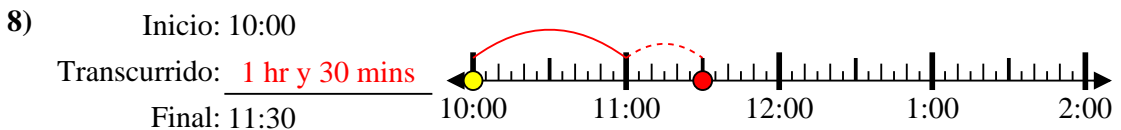
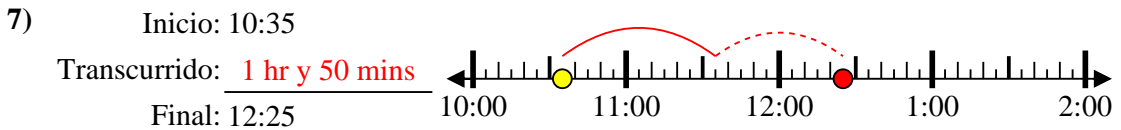
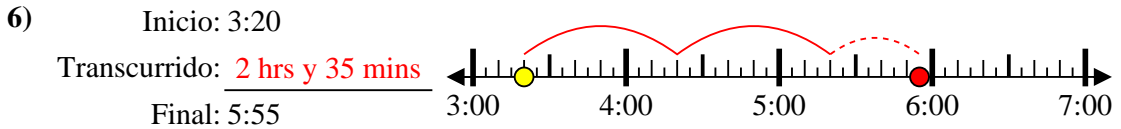
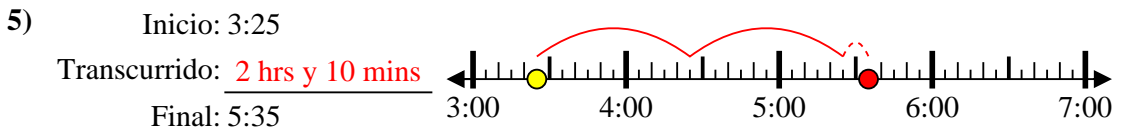
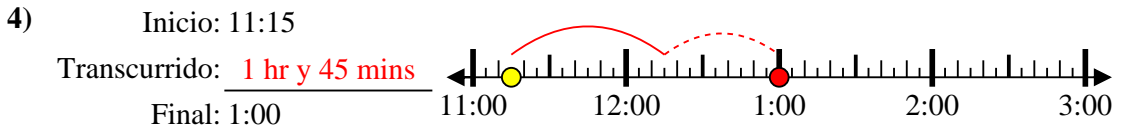
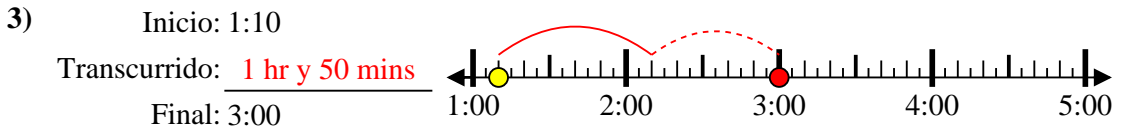
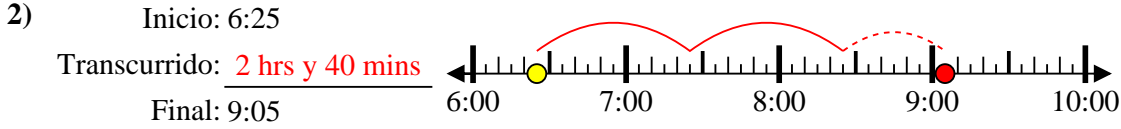
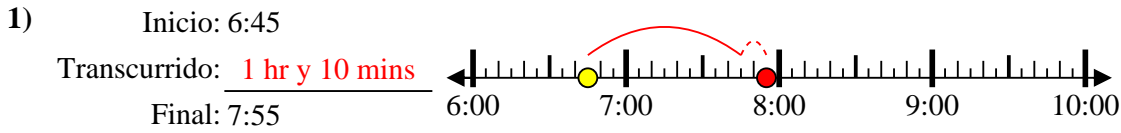
6. _____

7. _____

8. _____



Resuelve cada problema.



Respuestas

1. 1 hr y 10 mins

2. 2 hrs y 40 mins

3. 1 hr y 50 mins

4. 1 hr y 45 mins

5. 2 hrs y 10 mins

6. 2 hrs y 35 mins

7. 1 hr y 50 mins

8. 1 hr y 30 mins