



Resuelve cada problema.

1) Inicio: 7:05

Transcurrido: _____

Final: 9:25



1. _____

2) Inicio: 5:25

Transcurrido: _____

Final: 7:45



2. _____

3) Inicio: 4:15

Transcurrido: _____

Final: 5:50



3. _____

4) Inicio: 12:05

Transcurrido: _____

Final: 2:45

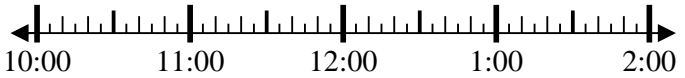


4. _____

5) Inicio: 10:05

Transcurrido: _____

Final: 11:50



5. _____

6) Inicio: 11:45

Transcurrido: _____

Final: 2:00



6. _____

7) Inicio: 5:25

Transcurrido: _____

Final: 7:05



7. _____

8) Inicio: 1:25

Transcurrido: _____

Final: 2:40

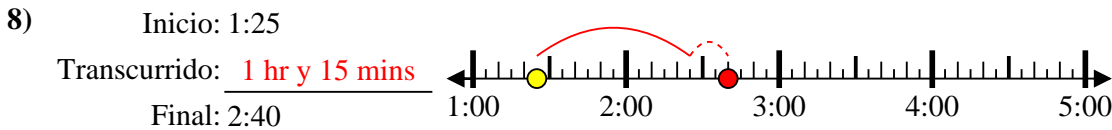
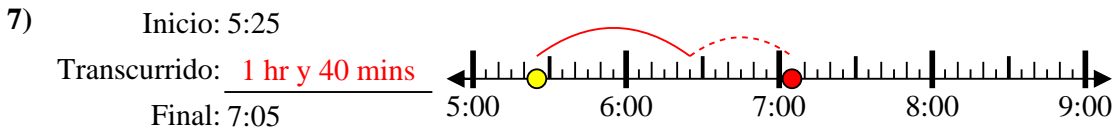
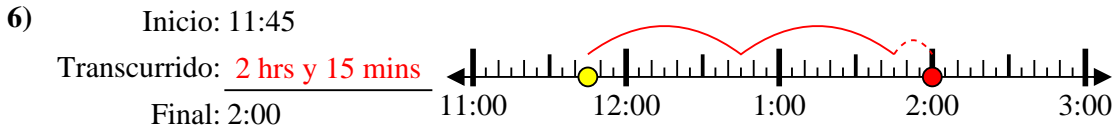
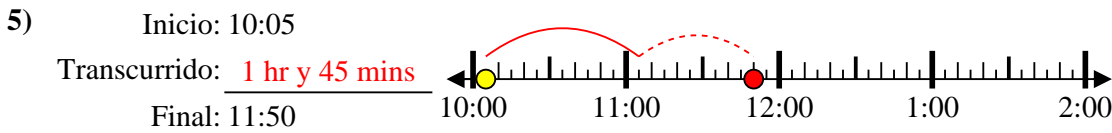
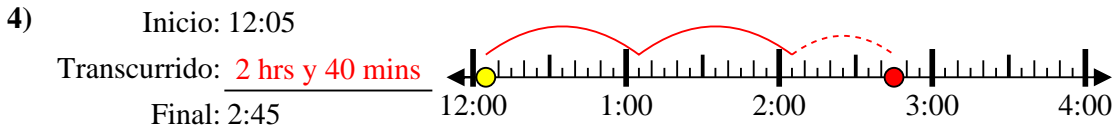
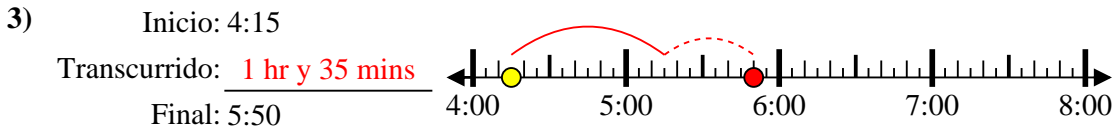
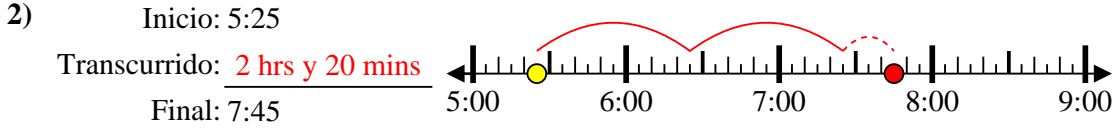
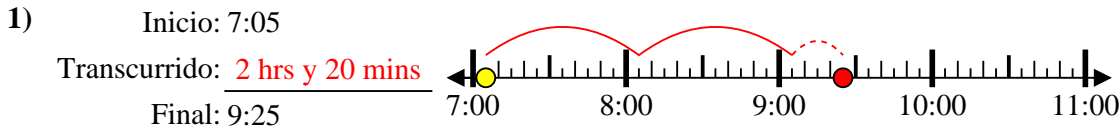


8. _____

Respuestas



Resuelve cada problema.



Respuestas

1. 2 hrs y 20 mins

2. 2 hrs y 20 mins

3. 1 hr y 35 mins

4. 2 hrs y 40 mins

5. 1 hr y 45 mins

6. 2 hrs y 15 mins

7. 1 hr y 40 mins

8. 1 hr y 15 mins